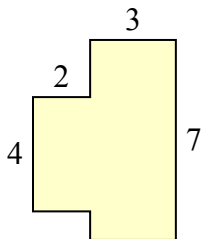




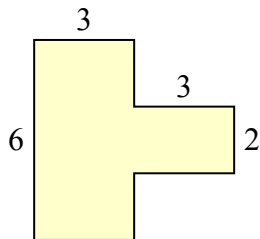
Tìm tổng diện tích của mỗi hình. Đo bằng millimet (mm). Không theo tỉ lệ.

Câu trả lời

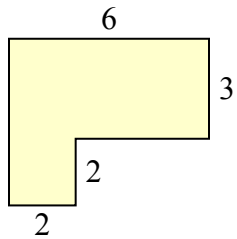
1)



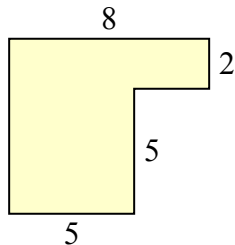
2)



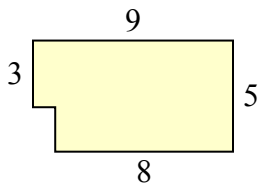
3)



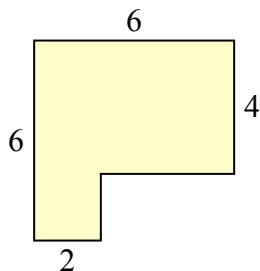
4)



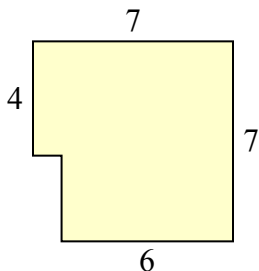
5)



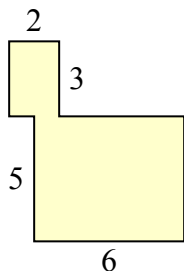
6)



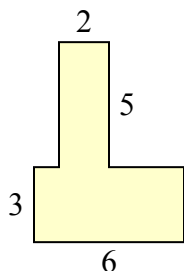
7)



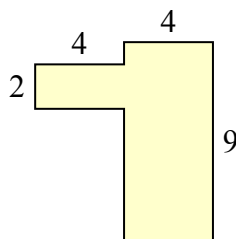
8)



9)



10)

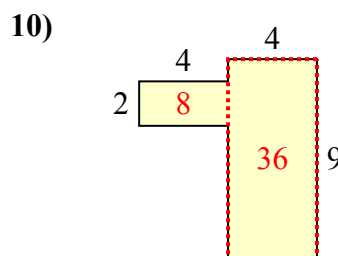
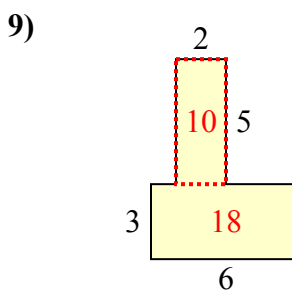
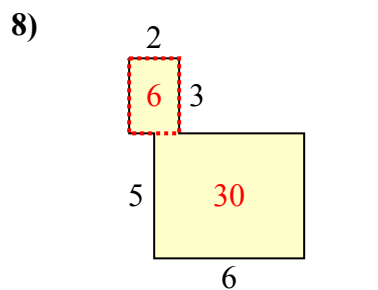
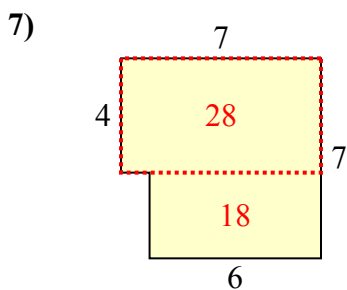
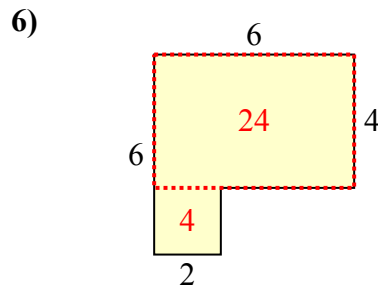
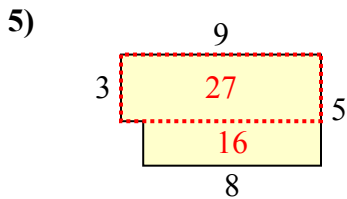
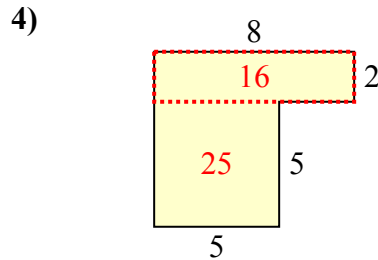
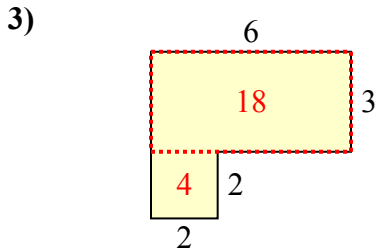
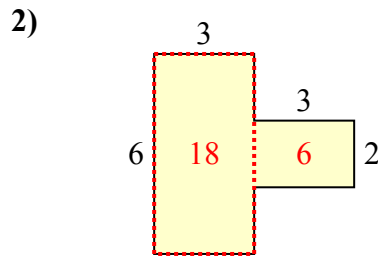
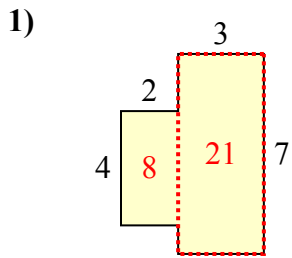


1. _____
2. _____
3. _____
4. _____
5. _____
6. _____
7. _____
8. _____
9. _____
10. _____



Tìm tổng diện tích của mỗi hình. Đo bằng millimet (mm). Không theo tỉ lệ.

Câu trả lời



1. 29 milimet²
2. 24 milimet²
3. 22 milimet²
4. 41 milimet²
5. 43 milimet²
6. 28 milimet²
7. 46 milimet²
8. 36 milimet²
9. 28 milimet²
10. 44 milimet²