




Xác định giá trị của 'L'. Độ dài tính bằng cm (không theo tỉ lệ).

Câu trả lời

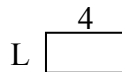
1) chu vi = 26



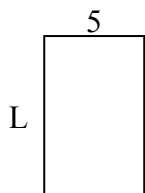
2) chu vi = 22



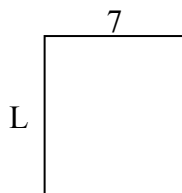
3) chu vi = 12



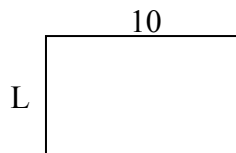
4) chu vi = 26



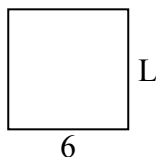
5) chu vi = 30



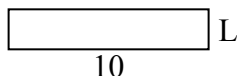
6) chu vi = 32



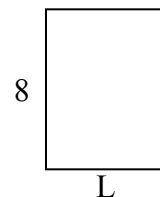
7) chu vi = 24



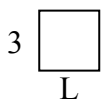
8) chu vi = 24



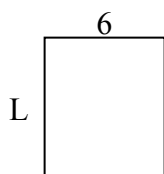
9) chu vi = 28



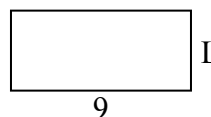
10) chu vi = 12



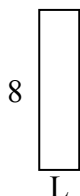
11) chu vi = 26



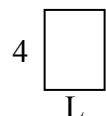
12) chu vi = 26



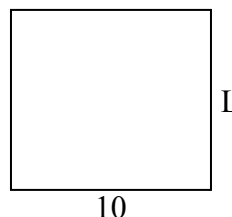
13) chu vi = 20



14) chu vi = 14



15) chu vi = 38

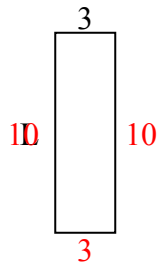


1. _____
2. _____
3. _____
4. _____
5. _____
6. _____
7. _____
8. _____
9. _____
10. _____
11. _____
12. _____
13. _____
14. _____
15. _____

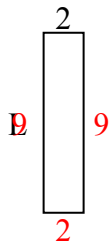


Xác định giá trị của 'L'. Độ dài tính bằng cm (không theo tỉ lệ).

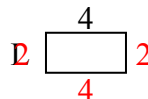
1) chu vi = 26



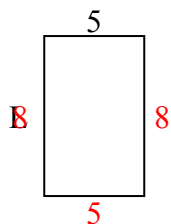
2) chu vi = 22



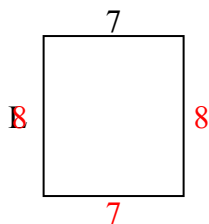
3) chu vi = 12



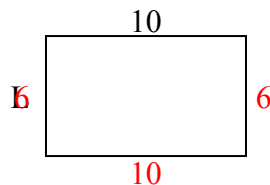
4) chu vi = 26



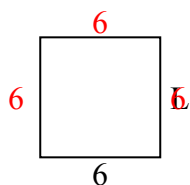
5) chu vi = 30




6) chu vi = 32



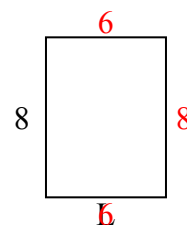
7) chu vi = 24



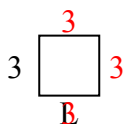
8) chu vi = 24



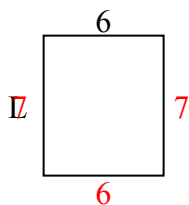
9) chu vi = 28



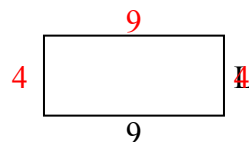
10) chu vi = 12



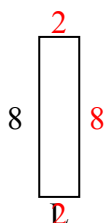
11) chu vi = 26



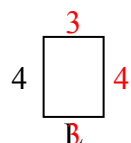
12) chu vi = 26



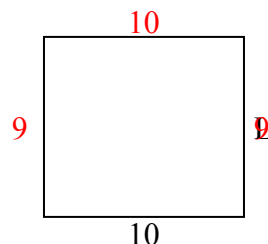
13) chu vi = 20



14) chu vi = 14



15) chu vi = 38



Câu trả lời

1. 10 centimet

2. 9 centimet

3. 2 centimet

4. 8 centimet

5. 8 centimet

6. 6 centimet

7. 6 centimet

8. 2 centimet

9. 6 centimet

10. 3 centimet

11. 7 centimet

12. 4 centimet

13. 2 centimet

14. 3 centimet

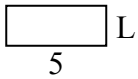
15. 9 centimet



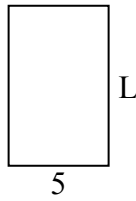
Xác định giá trị của 'L'. Độ dài tính bằng cm (không theo tỉ lệ).

Câu trả lời

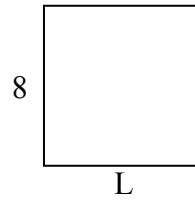
1) chu vi = 14



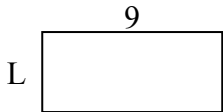
2) chu vi = 26



3) chu vi = 32



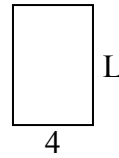
4) chu vi = 26



5) chu vi = 16




6) chu vi = 20



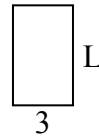
7) chu vi = 16



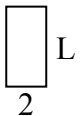
8) chu vi = 24



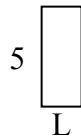
9) chu vi = 16



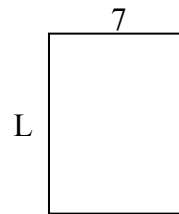
10) chu vi = 12



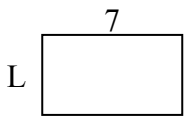
11) chu vi = 14



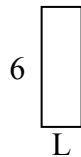
12) chu vi = 32



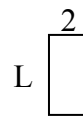
13) chu vi = 22



14) chu vi = 16



15) chu vi = 12

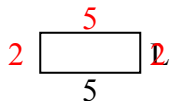


1. _____
2. _____
3. _____
4. _____
5. _____
6. _____
7. _____
8. _____
9. _____
10. _____
11. _____
12. _____
13. _____
14. _____
15. _____

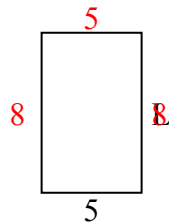


Xác định giá trị của 'L'. Độ dài tính bằng cm (không theo tỉ lệ).

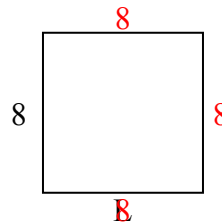
1) chu vi = 14



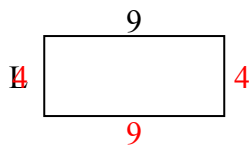
2) chu vi = 26



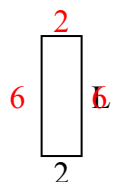
3) chu vi = 32



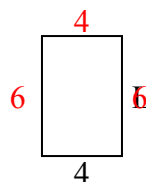
4) chu vi = 26



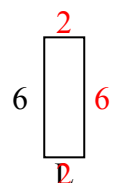
5) chu vi = 16




6) chu vi = 20



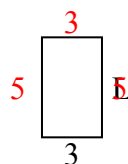
7) chu vi = 16



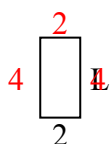
8) chu vi = 24



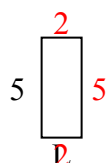
9) chu vi = 16



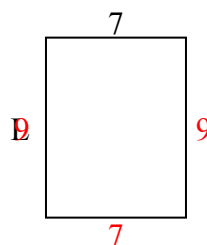
10) chu vi = 12



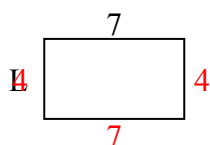
11) chu vi = 14



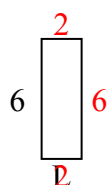
12) chu vi = 32



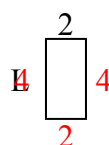
13) chu vi = 22



14) chu vi = 16



15) chu vi = 12



Câu trả lời

1. 2 centimet

2. 8 centimet

3. 8 centimet

4. 4 centimet

5. 6 centimet

6. 6 centimet

7. 2 centimet

8. 2 centimet

9. 5 centimet

10. 4 centimet

11. 2 centimet

12. 9 centimet

13. 4 centimet

14. 2 centimet

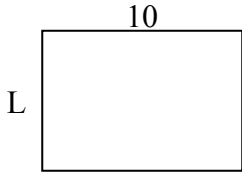
15. 4 centimet



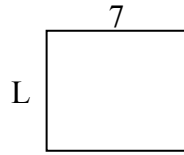
Xác định giá trị của 'L'. Độ dài tính bằng cm (không theo tỉ lệ).

Câu trả lời

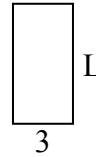
1) chu vi = 34



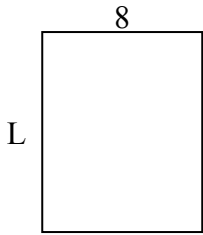
2) chu vi = 26



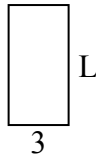
3) chu vi = 18



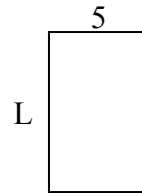
4) chu vi = 36



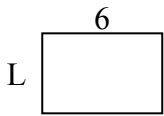
5) chu vi = 18



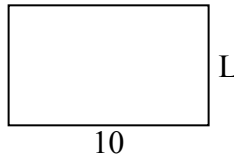
6) chu vi = 26



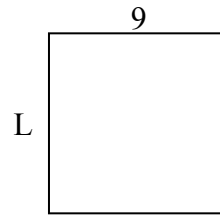
7) chu vi = 20



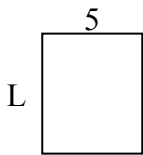
8) chu vi = 32



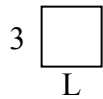
9) chu vi = 36



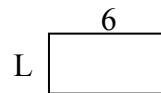
10) chu vi = 22



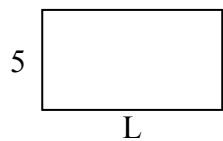
11) chu vi = 12



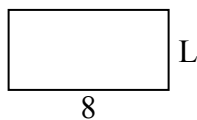
12) chu vi = 18



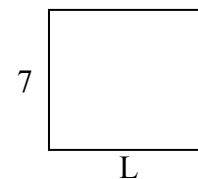
13) chu vi = 28



14) chu vi = 24



15) chu vi = 30

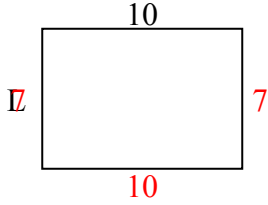


1. _____
2. _____
3. _____
4. _____
5. _____
6. _____
7. _____
8. _____
9. _____
10. _____
11. _____
12. _____
13. _____
14. _____
15. _____

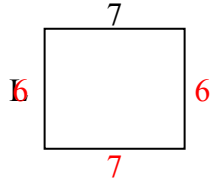


Xác định giá trị của 'L'. Độ dài tính bằng cm (không theo tỉ lệ).

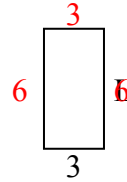
1) chu vi = 34



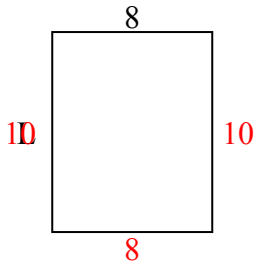
2) chu vi = 26



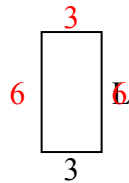
3) chu vi = 18



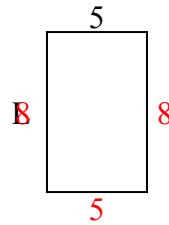
4) chu vi = 36



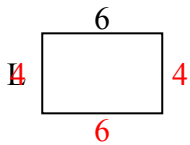
5) chu vi = 18



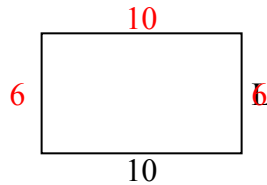
6) chu vi = 26



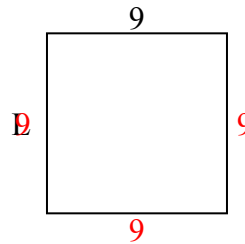
7) chu vi = 20



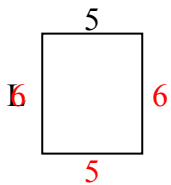
8) chu vi = 32



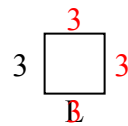
9) chu vi = 36



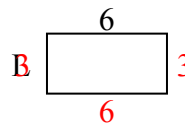
10) chu vi = 22



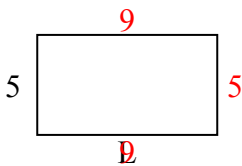
11) chu vi = 12



12) chu vi = 18



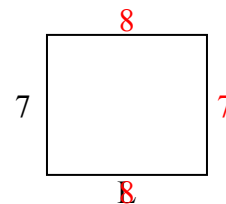
13) chu vi = 28



14) chu vi = 24



15) chu vi = 30



Câu trả lời

1. 7 centimet

2. 6 centimet

3. 6 centimet

4. 10 centimet

5. 6 centimet

6. 8 centimet

7. 4 centimet

8. 6 centimet

9. 9 centimet

10. 6 centimet

11. 3 centimet

12. 3 centimet

13. 9 centimet

14. 4 centimet

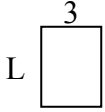
15. 8 centimet



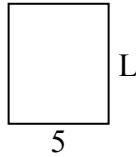
Xác định giá trị của 'L'. Độ dài tính bằng cm (không theo tỉ lệ).

Câu trả lời

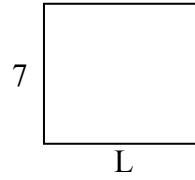
1) chu vi = 14



2) chu vi = 22



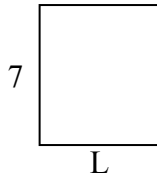
3) chu vi = 30



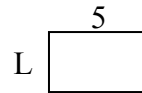
4) chu vi = 24



5) chu vi = 26



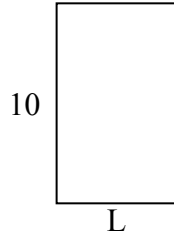
6) chu vi = 16




7) chu vi = 16



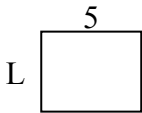
8) chu vi = 32



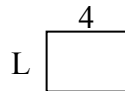
9) chu vi = 26



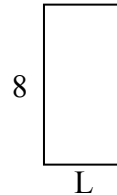
10) chu vi = 18



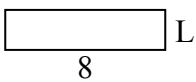
11) chu vi = 14



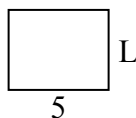
12) chu vi = 24



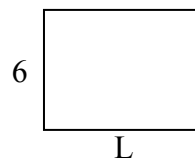
13) chu vi = 20



14) chu vi = 18



15) chu vi = 28

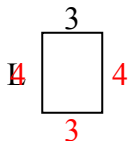


1. _____
2. _____
3. _____
4. _____
5. _____
6. _____
7. _____
8. _____
9. _____
10. _____
11. _____
12. _____
13. _____
14. _____
15. _____

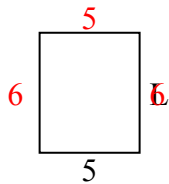


Xác định giá trị của 'L'. Độ dài tính bằng cm (không theo tỉ lệ).

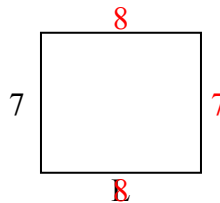
1) chu vi = 14



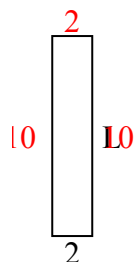
2) chu vi = 22



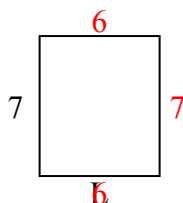
3) chu vi = 30



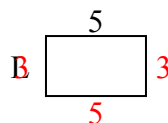
4) chu vi = 24



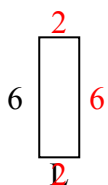
5) chu vi = 26



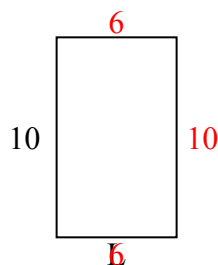
6) chu vi = 16



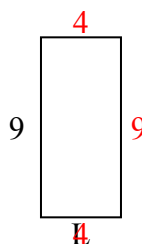
7) chu vi = 16



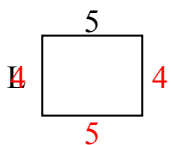
8) chu vi = 32



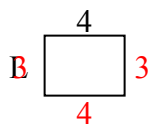
9) chu vi = 26



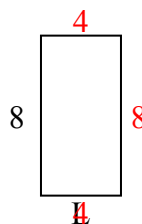
10) chu vi = 18



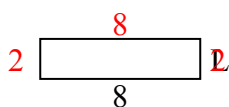
11) chu vi = 14



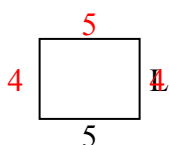
12) chu vi = 24



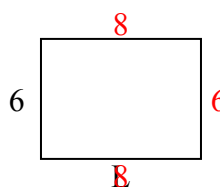
13) chu vi = 20



14) chu vi = 18



15) chu vi = 28



Câu trả lời

1. 4 centimet

2. 6 centimet

3. 8 centimet

4. 10 centimet

5. 6 centimet

6. 3 centimet

7. 2 centimet

8. 6 centimet

9. 4 centimet

10. 4 centimet

11. 3 centimet

12. 4 centimet

13. 2 centimet

14. 4 centimet

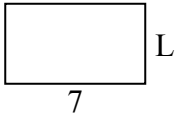
15. 8 centimet



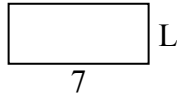
Xác định giá trị của 'L'. Độ dài tính bằng cm (không theo tỉ lệ).

Câu trả lời

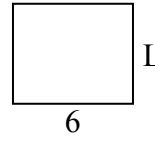
1) chu vi = 22



2) chu vi = 20



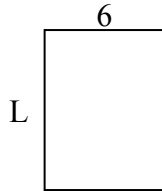
3) chu vi = 22



4) chu vi = 16




5) chu vi = 28



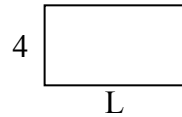
6) chu vi = 10



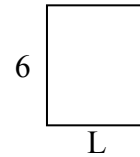
7) chu vi = 22



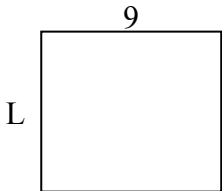
8) chu vi = 22



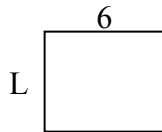
9) chu vi = 22



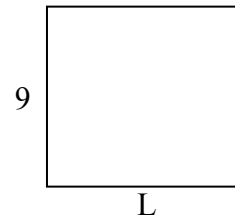
10) chu vi = 34



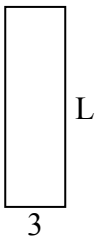
11) chu vi = 22



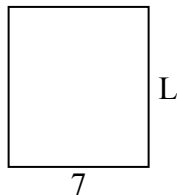
12) chu vi = 38



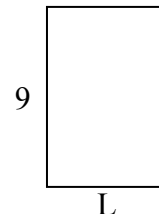
13) chu vi = 26



14) chu vi = 30



15) chu vi = 30

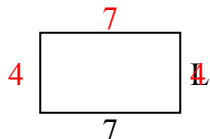


1. _____
2. _____
3. _____
4. _____
5. _____
6. _____
7. _____
8. _____
9. _____
10. _____
11. _____
12. _____
13. _____
14. _____
15. _____

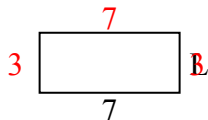


Xác định giá trị của 'L'. Độ dài tính bằng cm (không theo tỉ lệ).

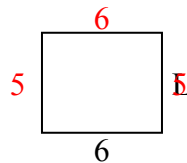
1) chu vi = 22



2) chu vi = 20



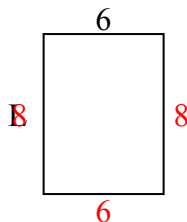
3) chu vi = 22



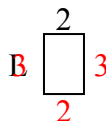
4) chu vi = 16



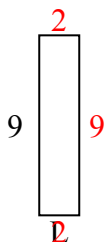
5) chu vi = 28



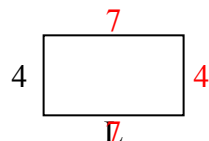
6) chu vi = 10



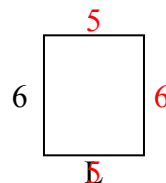
7) chu vi = 22



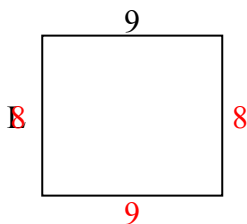
8) chu vi = 22



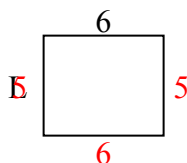
9) chu vi = 22



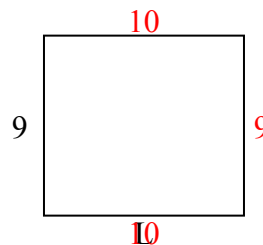
10) chu vi = 34



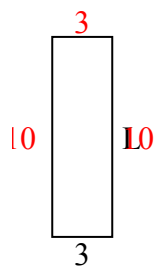
11) chu vi = 22



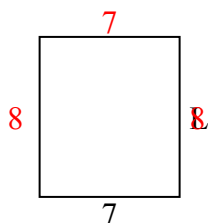
12) chu vi = 38



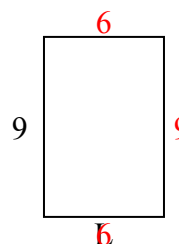
13) chu vi = 26



14) chu vi = 30



15) chu vi = 30



Câu trả lời

1. 4 centimet

2. 3 centimet

3. 5 centimet

4. 2 centimet

5. 8 centimet

6. 3 centimet

7. 2 centimet

8. 7 centimet

9. 5 centimet

10. 8 centimet

11. 5 centimet

12. 10 centimet

13. 10 centimet

14. 8 centimet

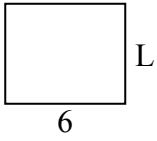
15. 6 centimet



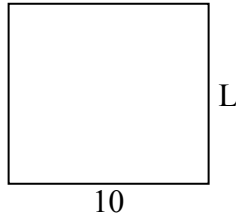
Xác định giá trị của 'L'. Độ dài tính bằng cm (không theo tỉ lệ).

Câu trả lời

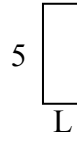
1) chu vi = 22



2) chu vi = 38



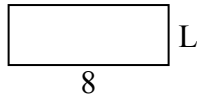
3) chu vi = 14



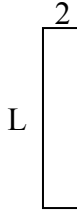
4) chu vi = 18



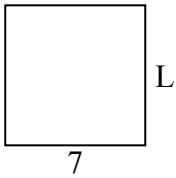
5) chu vi = 22



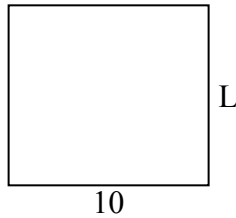
6) chu vi = 22



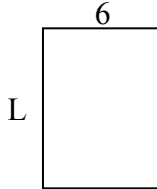
7) chu vi = 28



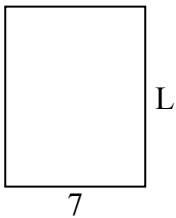
8) chu vi = 38



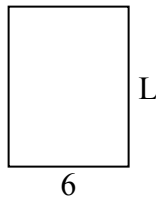
9) chu vi = 28



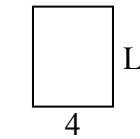
10) chu vi = 32



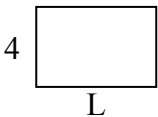
11) chu vi = 28



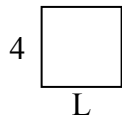
12) chu vi = 18



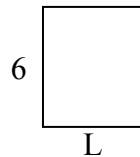
13) chu vi = 20



14) chu vi = 16



15) chu vi = 22

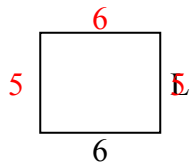


1. _____
2. _____
3. _____
4. _____
5. _____
6. _____
7. _____
8. _____
9. _____
10. _____
11. _____
12. _____
13. _____
14. _____
15. _____

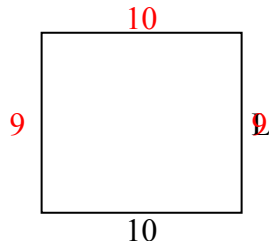


Xác định giá trị của 'L'. Độ dài tính bằng cm (không theo tỉ lệ).

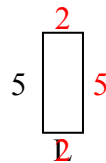
1) chu vi = 22



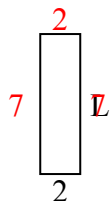
2) chu vi = 38



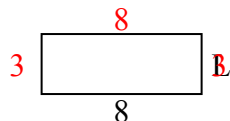
3) chu vi = 14



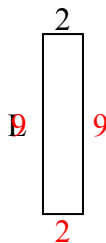
4) chu vi = 18



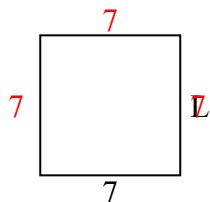
5) chu vi = 22



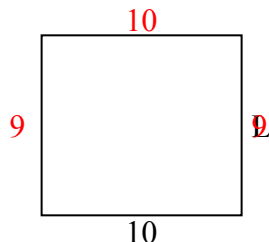
6) chu vi = 22



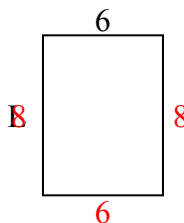
7) chu vi = 28



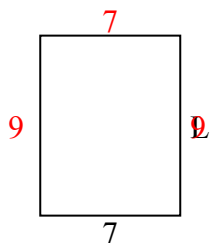
8) chu vi = 38



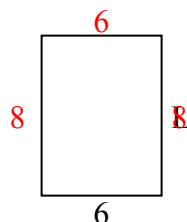
9) chu vi = 28



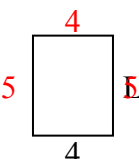
10) chu vi = 32



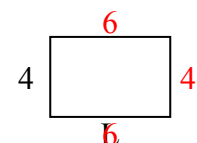
11) chu vi = 28



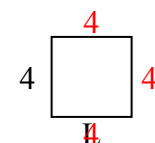
12) chu vi = 18



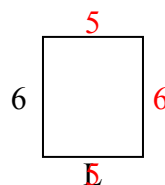
13) chu vi = 20



14) chu vi = 16



15) chu vi = 22



Câu trả lời

1. 5 centimet

2. 9 centimet

3. 2 centimet

4. 7 centimet

5. 3 centimet

6. 9 centimet

7. 7 centimet

8. 9 centimet

9. 8 centimet

10. 9 centimet

11. 8 centimet

12. 5 centimet

13. 6 centimet

14. 4 centimet

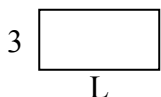
15. 5 centimet



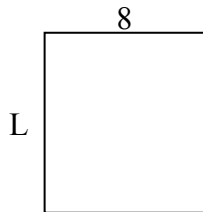
Xác định giá trị của 'L'. Độ dài tính bằng cm (không theo tỉ lệ).

Câu trả lời

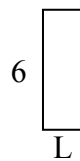
1) chu vi = 18



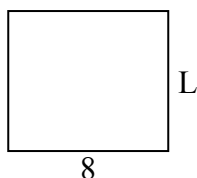
2) chu vi = 34



3) chu vi = 16



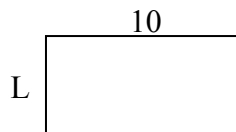
4) chu vi = 30



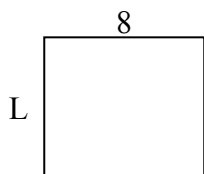
5) chu vi = 10



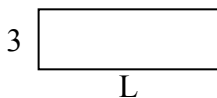
6) chu vi = 30



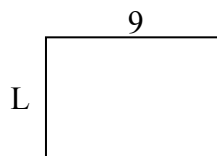
7) chu vi = 30



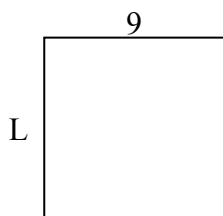
8) chu vi = 24



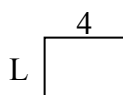
9) chu vi = 30



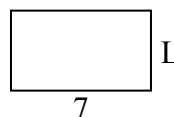
10) chu vi = 36



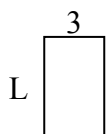
11) chu vi = 14




12) chu vi = 22



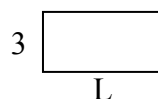
13) chu vi = 16



14) chu vi = 24



15) chu vi = 18

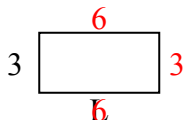


1. _____
2. _____
3. _____
4. _____
5. _____
6. _____
7. _____
8. _____
9. _____
10. _____
11. _____
12. _____
13. _____
14. _____
15. _____

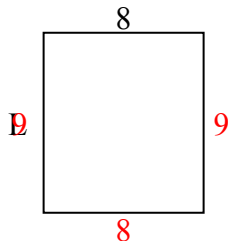


Xác định giá trị của 'L'. Độ dài tính bằng cm (không theo tỉ lệ).

1) chu vi = 18



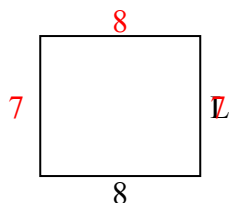
2) chu vi = 34



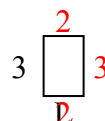
3) chu vi = 16



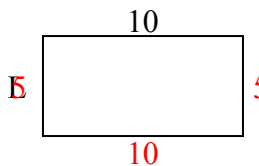
4) chu vi = 30



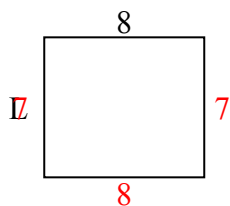
5) chu vi = 10



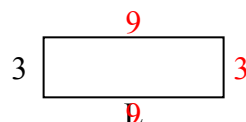
6) chu vi = 30



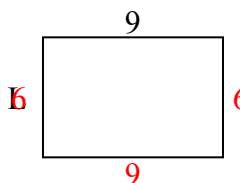
7) chu vi = 30



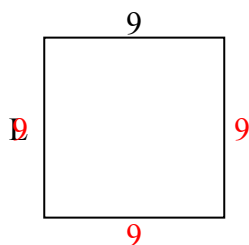
8) chu vi = 24



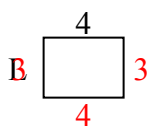
9) chu vi = 30



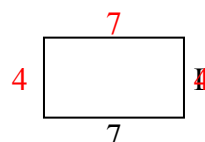
10) chu vi = 36



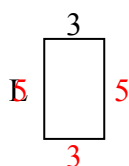
11) chu vi = 14




12) chu vi = 22



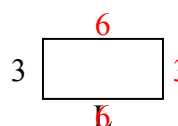
13) chu vi = 16



14) chu vi = 24



15) chu vi = 18



Câu trả lời

1. 6 centimet

2. 9 centimet

3. 2 centimet

4. 7 centimet

5. 2 centimet

6. 5 centimet

7. 7 centimet

8. 9 centimet

9. 6 centimet

10. 9 centimet

11. 3 centimet

12. 4 centimet

13. 5 centimet

14. 2 centimet

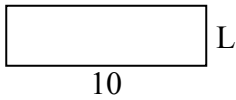
15. 6 centimet



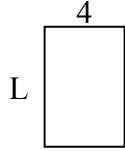
Xác định giá trị của 'L'. Độ dài tính bằng cm (không theo tỉ lệ).

Câu trả lời

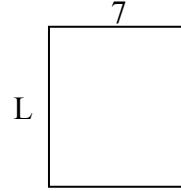
1) chu vi = 26



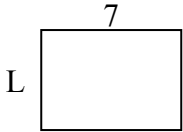
2) chu vi = 20



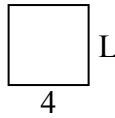
3) chu vi = 30



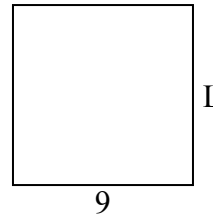
4) chu vi = 24



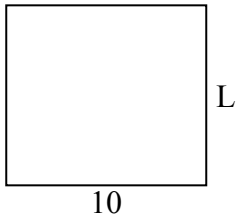
5) chu vi = 16



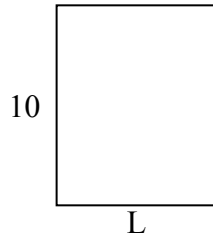
6) chu vi = 36



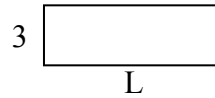
7) chu vi = 38




8) chu vi = 36



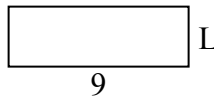
9) chu vi = 24




10) chu vi = 24



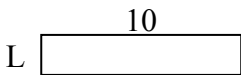
11) chu vi = 24



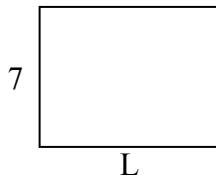
12) chu vi = 18



13) chu vi = 24



14) chu vi = 32



15) chu vi = 18




1. _____
2. _____
3. _____
4. _____
5. _____
6. _____
7. _____
8. _____
9. _____
10. _____
11. _____
12. _____
13. _____
14. _____
15. _____

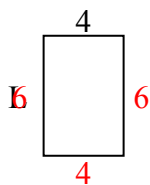


Xác định giá trị của 'L'. Độ dài tính bằng cm (không theo tỉ lệ).

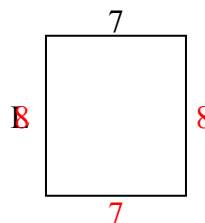
1) chu vi = 26



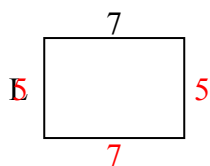
2) chu vi = 20



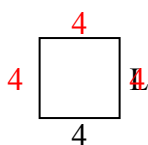
3) chu vi = 30



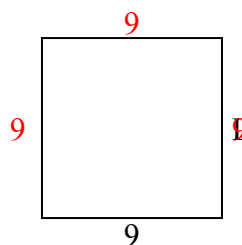
4) chu vi = 24



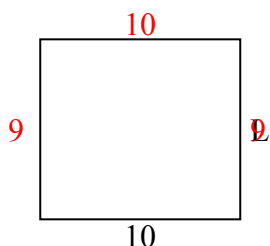
5) chu vi = 16



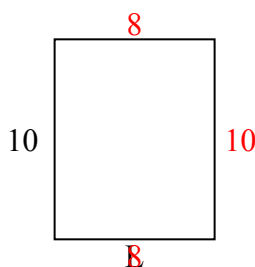
6) chu vi = 36



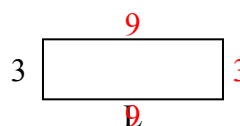
7) chu vi = 38



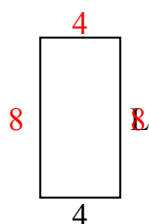
8) chu vi = 36



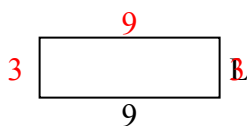
9) chu vi = 24



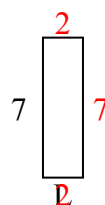
10) chu vi = 24



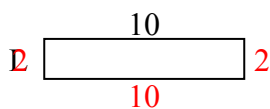
11) chu vi = 24



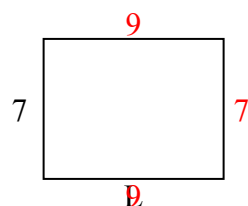
12) chu vi = 18



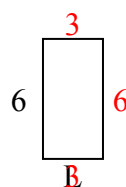
13) chu vi = 24



14) chu vi = 32



15) chu vi = 18



Câu trả lời

1. 3 centimet

2. 6 centimet

3. 8 centimet

4. 5 centimet

5. 4 centimet

6. 9 centimet

7. 9 centimet

8. 8 centimet

9. 9 centimet

10. 8 centimet

11. 3 centimet

12. 2 centimet

13. 2 centimet

14. 9 centimet

15. 3 centimet



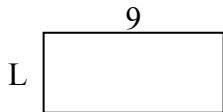
Xác định giá trị của 'L'. Độ dài tính bằng cm (không theo tỉ lệ).

Câu trả lời

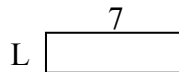
1) chu vi = 12



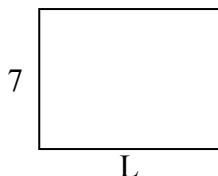
2) chu vi = 26



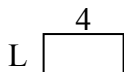
3) chu vi = 18



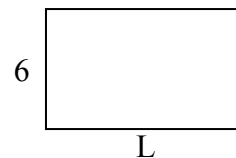
4) chu vi = 32



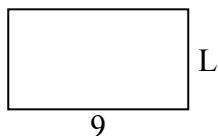
5) chu vi = 12



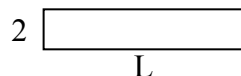
6) chu vi = 32



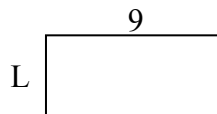
7) chu vi = 28



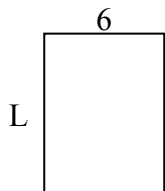
8) chu vi = 24



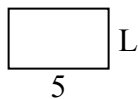
9) chu vi = 26



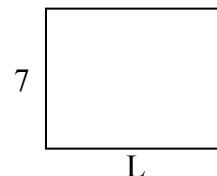
10) chu vi = 28



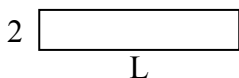
11) chu vi = 16



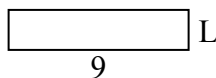
12) chu vi = 32



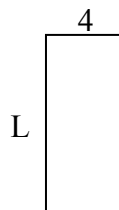
13) chu vi = 24



14) chu vi = 22



15) chu vi = 26



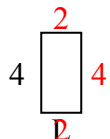
1. _____
2. _____
3. _____
4. _____
5. _____
6. _____
7. _____
8. _____
9. _____
10. _____
11. _____
12. _____
13. _____
14. _____
15. _____



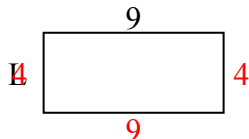
Xác định giá trị của 'L'. Độ dài tính bằng cm (không theo tỉ lệ).

Câu trả lời

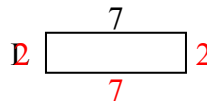
1) chu vi = 12



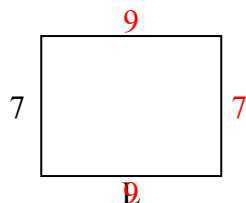
2) chu vi = 26



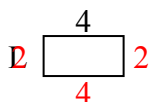
3) chu vi = 18



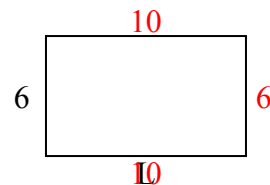
4) chu vi = 32



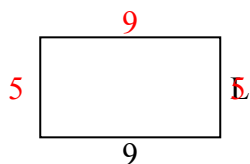
5) chu vi = 12




6) chu vi = 32



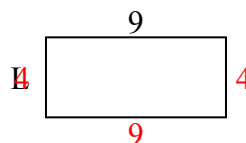
7) chu vi = 28



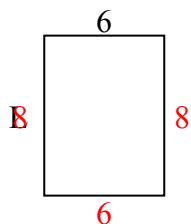
8) chu vi = 24



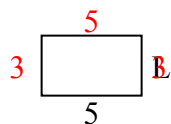
9) chu vi = 26



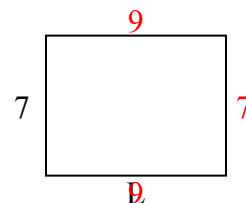
10) chu vi = 28




11) chu vi = 16



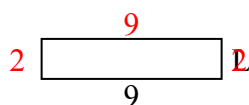
12) chu vi = 32



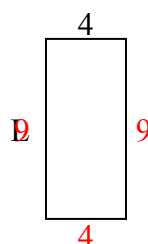
13) chu vi = 24



14) chu vi = 22



15) chu vi = 26



1. 2 centimet

2. 4 centimet

3. 2 centimet

4. 9 centimet

5. 2 centimet

6. 10 centimet

7. 5 centimet

8. 10 centimet

9. 4 centimet

10. 8 centimet

11. 3 centimet

12. 9 centimet

13. 10 centimet

14. 2 centimet

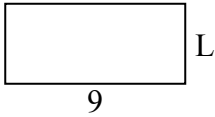
15. 9 centimet



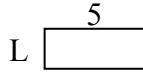
Xác định giá trị của 'L'. Độ dài tính bằng cm (không theo tỉ lệ).

Câu trả lời

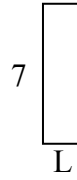
1) chu vi = 26



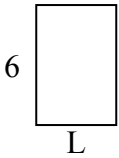
2) chu vi = 14



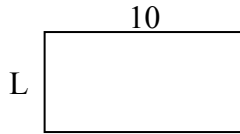
3) chu vi = 18



4) chu vi = 20



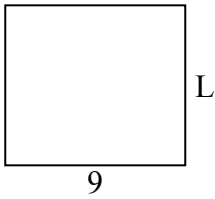
5) chu vi = 30



6) chu vi = 10



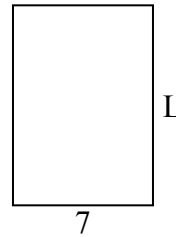
7) chu vi = 34



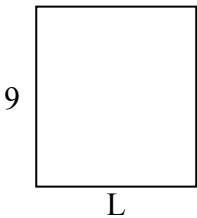
8) chu vi = 24



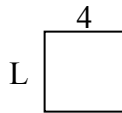
9) chu vi = 34



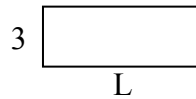
10) chu vi = 34



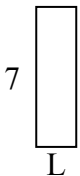
11) chu vi = 16



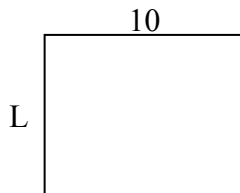
12) chu vi = 22



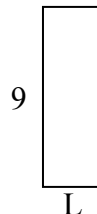
13) chu vi = 18



14) chu vi = 36



15) chu vi = 24

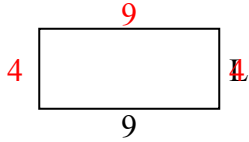


1. _____
2. _____
3. _____
4. _____
5. _____
6. _____
7. _____
8. _____
9. _____
10. _____
11. _____
12. _____
13. _____
14. _____
15. _____

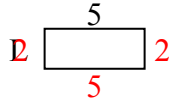


Xác định giá trị của 'L'. Độ dài tính bằng cm (không theo tỉ lệ).

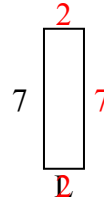
1) chu vi = 26



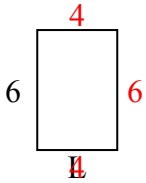
2) chu vi = 14



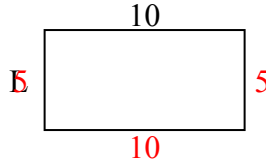
3) chu vi = 18



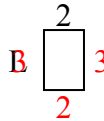
4) chu vi = 20



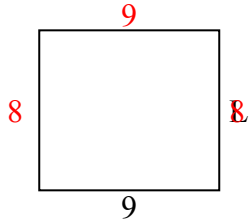
5) chu vi = 30



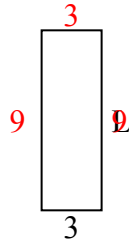
6) chu vi = 10



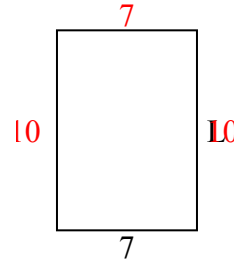
7) chu vi = 34



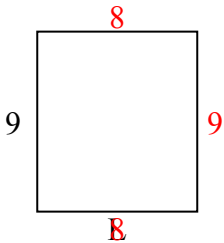
8) chu vi = 24



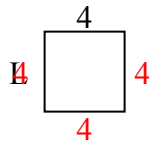
9) chu vi = 34



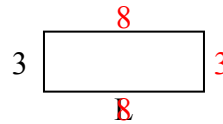
10) chu vi = 34



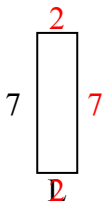
11) chu vi = 16



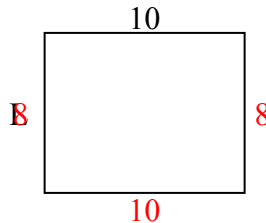
12) chu vi = 22



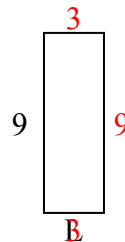
13) chu vi = 18



14) chu vi = 36



15) chu vi = 24



Câu trả lời

1. 4 centimet

2. 2 centimet

3. 2 centimet

4. 4 centimet

5. 5 centimet

6. 3 centimet

7. 8 centimet

8. 9 centimet

9. 10 centimet

10. 8 centimet

11. 4 centimet

12. 8 centimet

13. 2 centimet

14. 8 centimet

15. 3 centimet