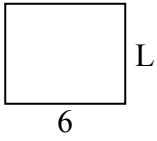


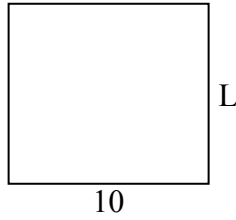


Xác định giá trị của 'L'. Độ dài tính bằng cm (không theo tỉ lệ).

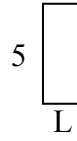
1) chu vi = 22



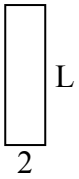
2) chu vi = 38



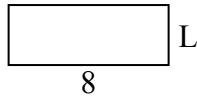
3) chu vi = 14



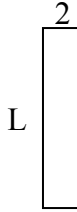
4) chu vi = 18



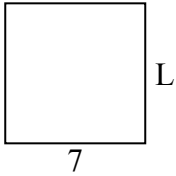
5) chu vi = 22



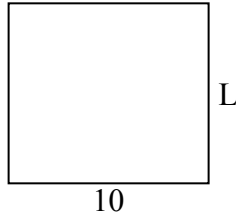
6) chu vi = 22



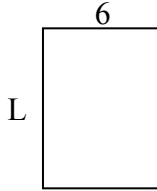
7) chu vi = 28



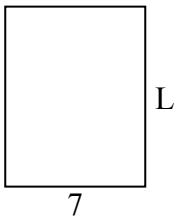
8) chu vi = 38



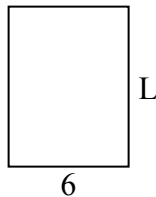
9) chu vi = 28



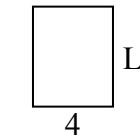
10) chu vi = 32



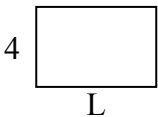
11) chu vi = 28



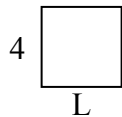
12) chu vi = 18



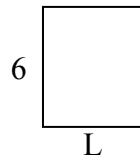
13) chu vi = 20



14) chu vi = 16



15) chu vi = 22



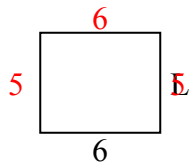
Câu trả lời

1. _____
2. _____
3. _____
4. _____
5. _____
6. _____
7. _____
8. _____
9. _____
10. _____
11. _____
12. _____
13. _____
14. _____
15. _____

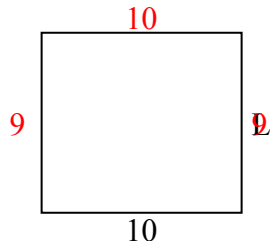


Xác định giá trị của 'L'. Độ dài tính bằng cm (không theo tỉ lệ).

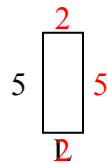
1) chu vi = 22



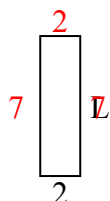
2) chu vi = 38



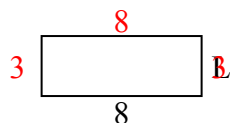
3) chu vi = 14



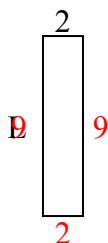
4) chu vi = 18



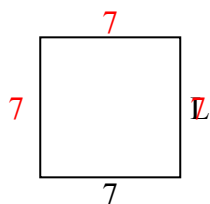
5) chu vi = 22



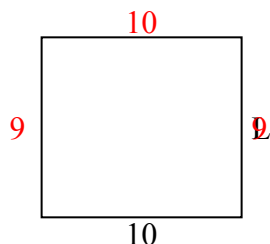
6) chu vi = 22



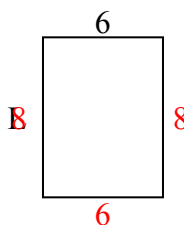
7) chu vi = 28



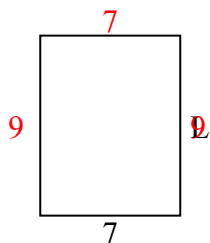
8) chu vi = 38



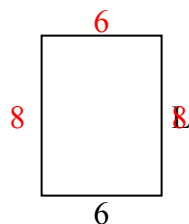
9) chu vi = 28



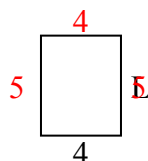
10) chu vi = 32



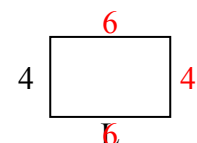
11) chu vi = 28



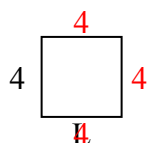
12) chu vi = 18



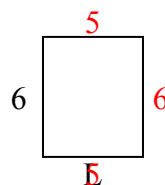
13) chu vi = 20



14) chu vi = 16



15) chu vi = 22



Câu trả lời

1. 5 centimet

2. 9 centimet

3. 2 centimet

4. 7 centimet

5. 3 centimet

6. 9 centimet

7. 7 centimet

8. 9 centimet

9. 8 centimet

10. 9 centimet

11. 8 centimet

12. 5 centimet

13. 6 centimet

14. 4 centimet

15. 5 centimet