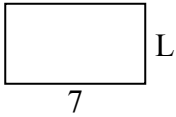




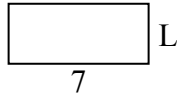
Xác định giá trị của 'L'. Độ dài tính bằng cm (không theo tỉ lệ).

**Câu trả lời**

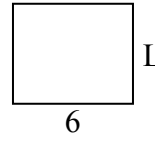
1) chu vi = 22



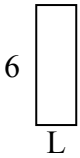
2) chu vi = 20



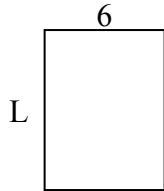
3) chu vi = 22



4) chu vi = 16




5) chu vi = 28



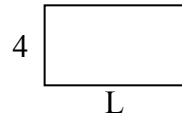
6) chu vi = 10



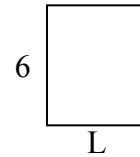
7) chu vi = 22



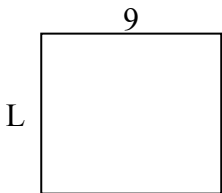
8) chu vi = 22



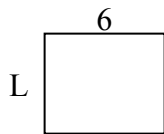
9) chu vi = 22



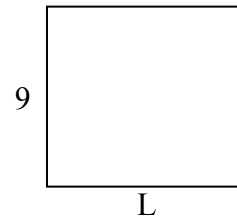
10) chu vi = 34



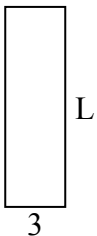
11) chu vi = 22



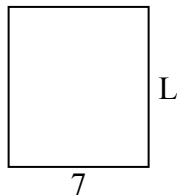
12) chu vi = 38



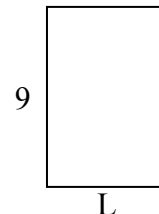
13) chu vi = 26



14) chu vi = 30



15) chu vi = 30

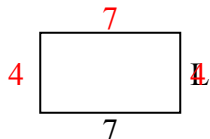


1. \_\_\_\_\_
2. \_\_\_\_\_
3. \_\_\_\_\_
4. \_\_\_\_\_
5. \_\_\_\_\_
6. \_\_\_\_\_
7. \_\_\_\_\_
8. \_\_\_\_\_
9. \_\_\_\_\_
10. \_\_\_\_\_
11. \_\_\_\_\_
12. \_\_\_\_\_
13. \_\_\_\_\_
14. \_\_\_\_\_
15. \_\_\_\_\_

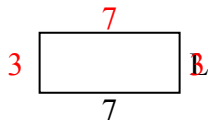


Xác định giá trị của 'L'. Độ dài tính bằng cm (không theo tỉ lệ).

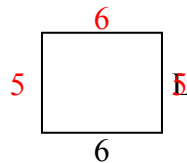
1) chu vi = 22



2) chu vi = 20



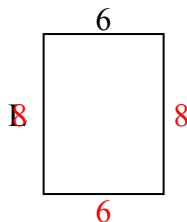
3) chu vi = 22



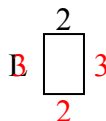
4) chu vi = 16



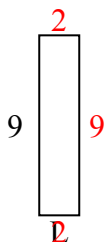
5) chu vi = 28



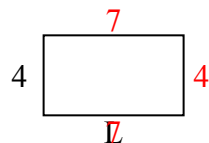
6) chu vi = 10



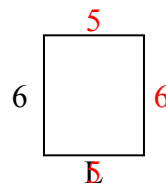
7) chu vi = 22



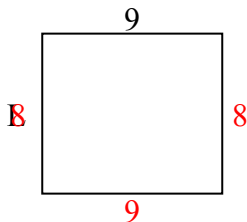
8) chu vi = 22



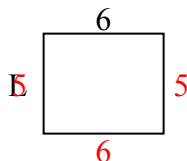
9) chu vi = 22



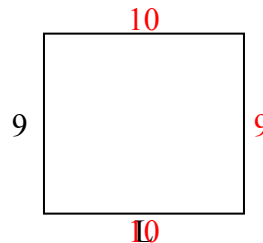
10) chu vi = 34



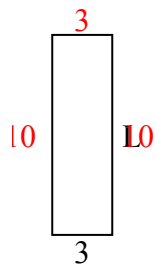
11) chu vi = 22



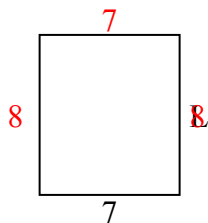
12) chu vi = 38



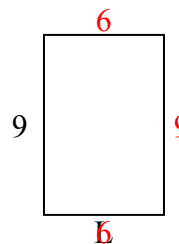
13) chu vi = 26



14) chu vi = 30



15) chu vi = 30



**Câu trả lời**

1. 4 centimet

2. 3 centimet

3. 5 centimet

4. 2 centimet

5. 8 centimet

6. 3 centimet

7. 2 centimet

8. 7 centimet

9. 5 centimet

10. 8 centimet

11. 5 centimet

12. 10 centimet

13. 10 centimet

14. 8 centimet

15. 6 centimet