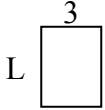




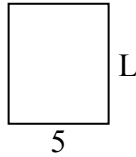
Xác định giá trị của 'L'. Độ dài tính bằng cm (không theo tỉ lệ).

**Câu trả lời**

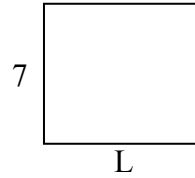
1) chu vi = 14



2) chu vi = 22



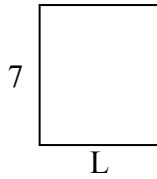
3) chu vi = 30



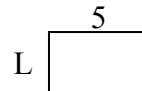
4) chu vi = 24



5) chu vi = 26



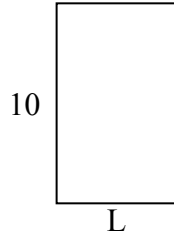
6) chu vi = 16




7) chu vi = 16



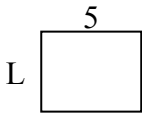
8) chu vi = 32



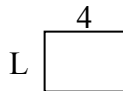
9) chu vi = 26



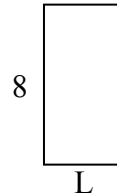
10) chu vi = 18



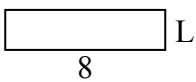
11) chu vi = 14



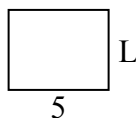
12) chu vi = 24



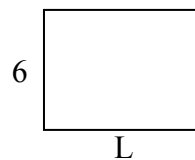
13) chu vi = 20



14) chu vi = 18



15) chu vi = 28

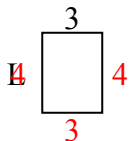


1. \_\_\_\_\_
2. \_\_\_\_\_
3. \_\_\_\_\_
4. \_\_\_\_\_
5. \_\_\_\_\_
6. \_\_\_\_\_
7. \_\_\_\_\_
8. \_\_\_\_\_
9. \_\_\_\_\_
10. \_\_\_\_\_
11. \_\_\_\_\_
12. \_\_\_\_\_
13. \_\_\_\_\_
14. \_\_\_\_\_
15. \_\_\_\_\_

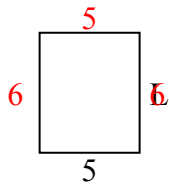


Xác định giá trị của 'L'. Độ dài tính bằng cm (không theo tỉ lệ).

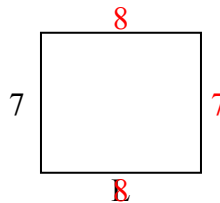
1) chu vi = 14



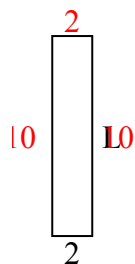
2) chu vi = 22



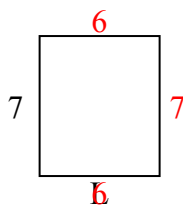
3) chu vi = 30



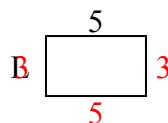
4) chu vi = 24



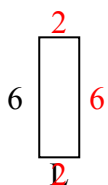
5) chu vi = 26



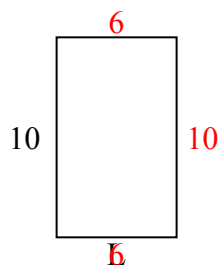
6) chu vi = 16



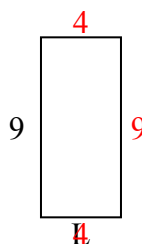
7) chu vi = 16



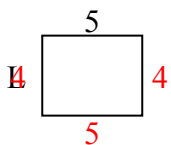
8) chu vi = 32



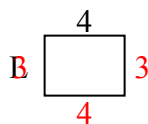
9) chu vi = 26



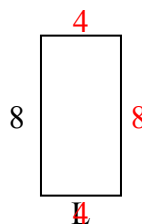
10) chu vi = 18



11) chu vi = 14



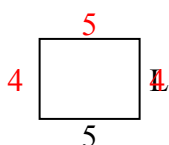
12) chu vi = 24



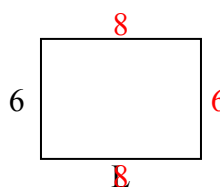
13) chu vi = 20



14) chu vi = 18



15) chu vi = 28



**Câu trả lời**

1. 4 centimet

2. 6 centimet

3. 8 centimet

4. 10 centimet

5. 6 centimet

6. 3 centimet

7. 2 centimet

8. 6 centimet

9. 4 centimet

10. 4 centimet

11. 3 centimet

12. 4 centimet

13. 2 centimet

14. 4 centimet

15. 8 centimet