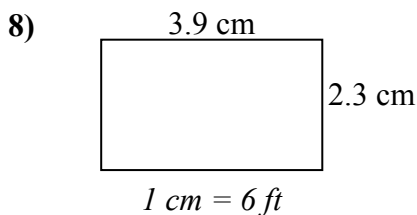
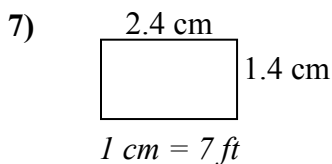
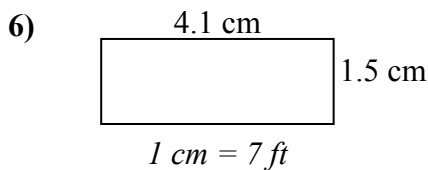
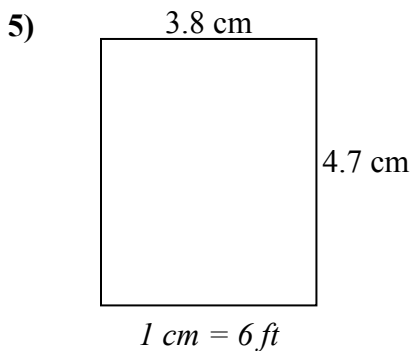
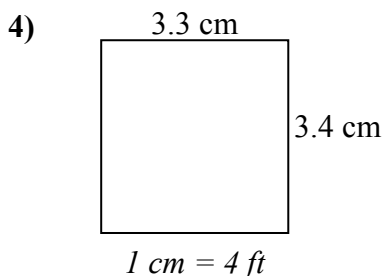
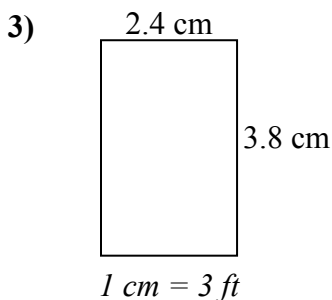
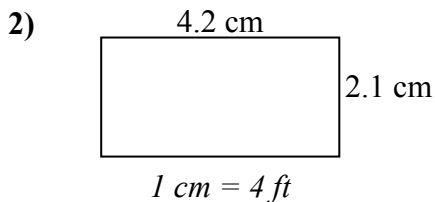
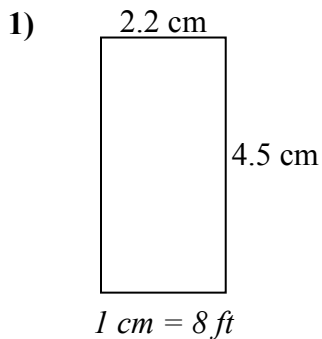




Xác định chiều rộng, chiều cao và diện tích thực của mỗi hình chữ nhật tỷ lệ. Làm tròn diện tích đến số nguyên gần nhất.

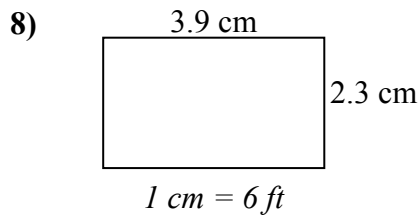
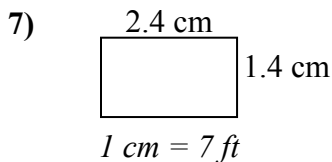
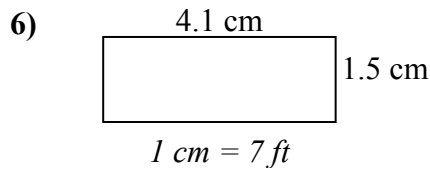
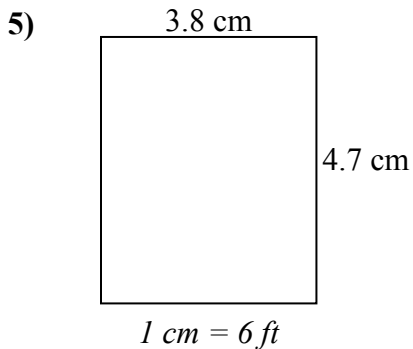
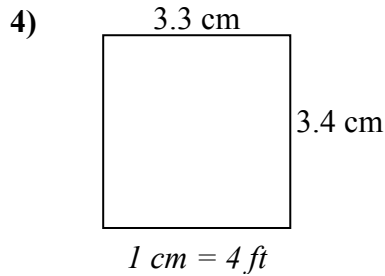
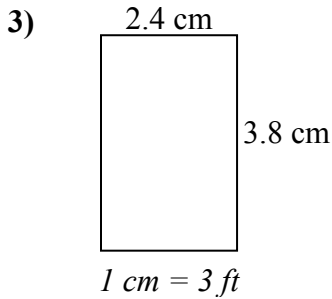
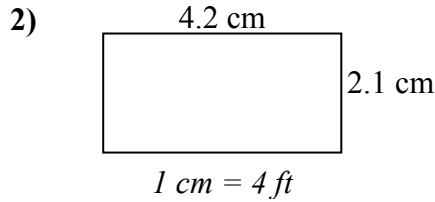
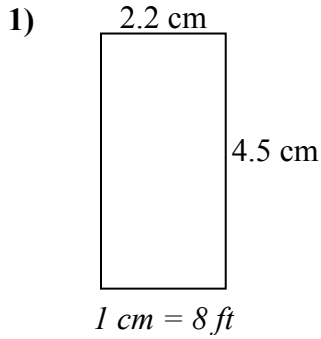
**Câu trả lời**



1. \_\_\_\_\_
2. \_\_\_\_\_
3. \_\_\_\_\_
4. \_\_\_\_\_
5. \_\_\_\_\_
6. \_\_\_\_\_
7. \_\_\_\_\_
8. \_\_\_\_\_



Xác định chiều rộng, chiều cao và diện tích thực của mỗi hình chữ nhật tỷ lệ. Làm tròn diện tích đến số nguyên gần nhất.



**Câu trả lời**

1. 17.6   36   634
2. 16.8   8.4   141
3. 7.2   11.4   82
4. 13.2   13.6   180
5. 22.8   28.2   643
6. 28.7   10.5   301
7. 16.8   9.8   165
8. 23.4   13.8   323