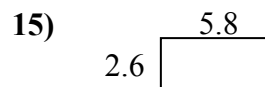
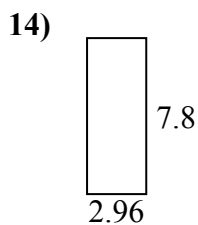
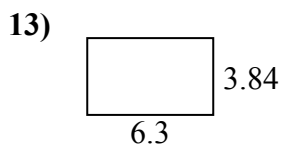
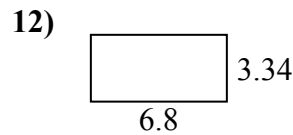
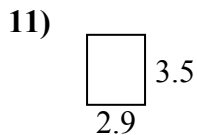
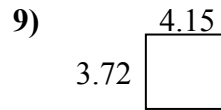
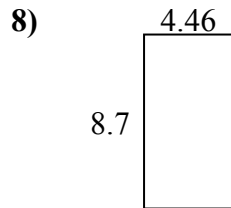
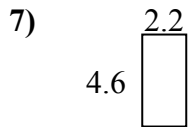
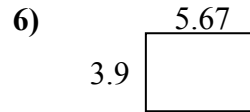
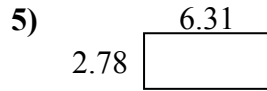
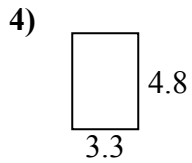
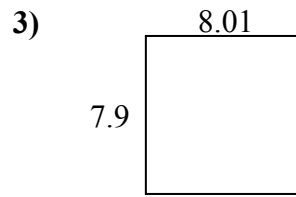
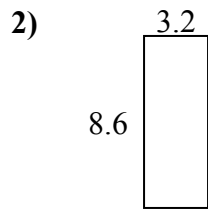
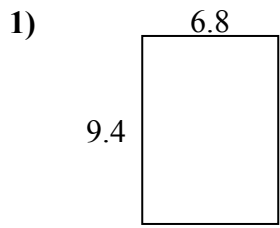




Tìm chu vi và diện tích của mỗi hình. Trả lời đến ngày 10 gần nhất.

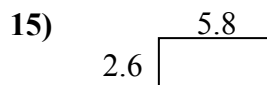
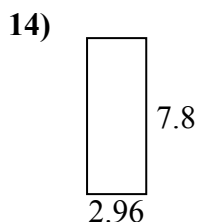
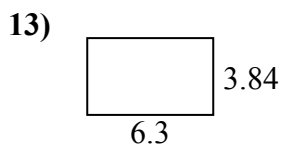
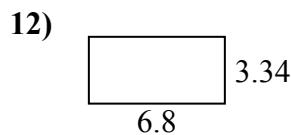
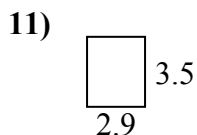
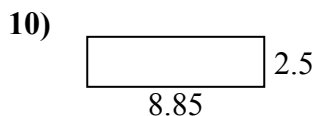
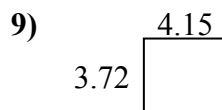
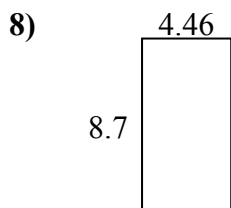
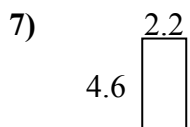
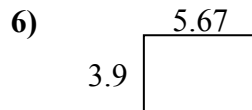
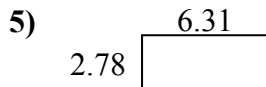
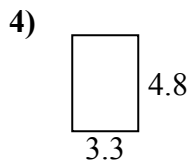
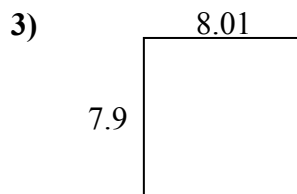
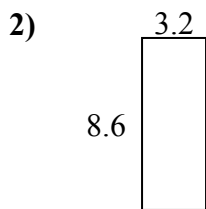
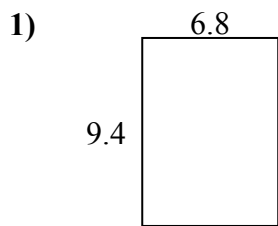


**Câu trả lời**

1. \_\_\_\_\_
2. \_\_\_\_\_
3. \_\_\_\_\_
4. \_\_\_\_\_
5. \_\_\_\_\_
6. \_\_\_\_\_
7. \_\_\_\_\_
8. \_\_\_\_\_
9. \_\_\_\_\_
10. \_\_\_\_\_
11. \_\_\_\_\_
12. \_\_\_\_\_
13. \_\_\_\_\_
14. \_\_\_\_\_
15. \_\_\_\_\_



Tìm chu vi và diện tích của mỗi hình. Trả lời đến ngày 10 gần nhất.



**Câu trả lời**

|     |             |             |
|-----|-------------|-------------|
| 1.  | <u>63,9</u> | <u>32,4</u> |
| 2.  | <u>27,5</u> | <u>23,6</u> |
| 3.  | <u>63,3</u> | <u>31,8</u> |
| 4.  | <u>15,8</u> | <u>16,2</u> |
| 5.  | <u>17,5</u> | <u>18,2</u> |
| 6.  | <u>22,1</u> | <u>19,1</u> |
| 7.  | <u>10,1</u> | <u>13,6</u> |
| 8.  | <u>38,8</u> | <u>26,3</u> |
| 9.  | <u>15,4</u> | <u>15,7</u> |
| 10. | <u>22,1</u> | <u>22,7</u> |
| 11. | <u>10,2</u> | <u>12,8</u> |
| 12. | <u>22,7</u> | <u>20,3</u> |
| 13. | <u>24,2</u> | <u>20,3</u> |
| 14. | <u>23,1</u> | <u>21,5</u> |
| 15. | <u>15,1</u> | <u>16,8</u> |