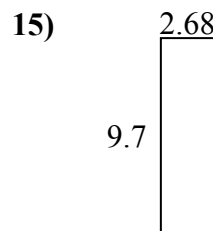
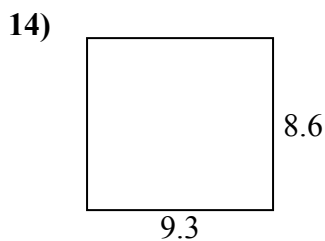
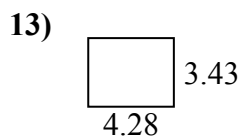
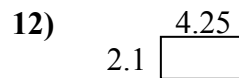
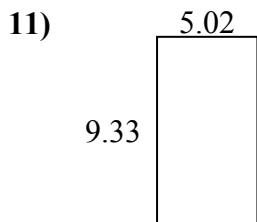
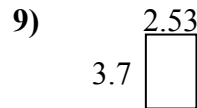
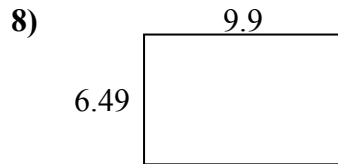
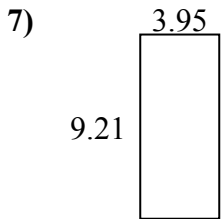
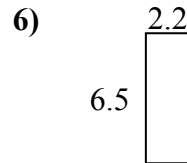
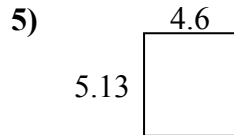
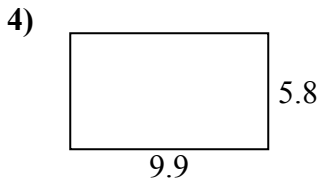
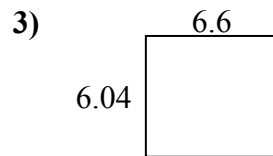
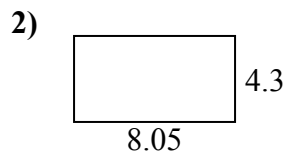
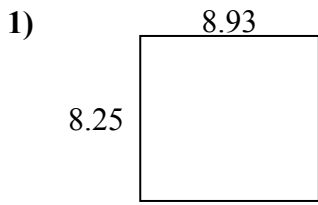




Tìm chu vi và diện tích của mỗi hình. Trả lời đến ngày 10 gần nhất.

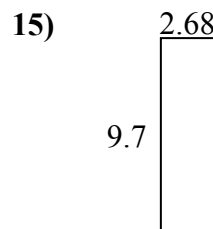
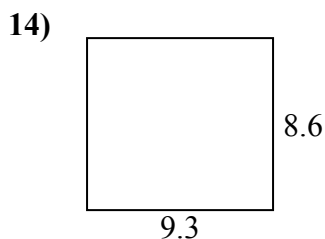
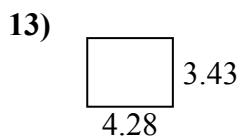
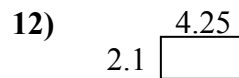
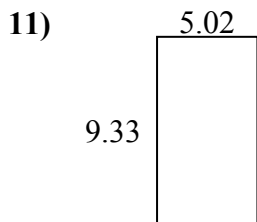
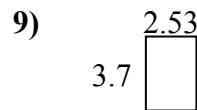
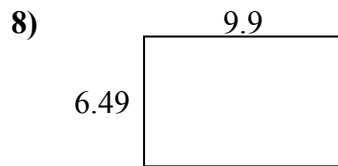
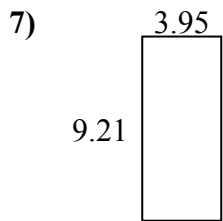
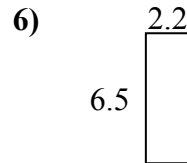
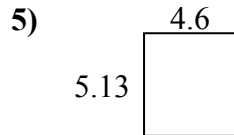
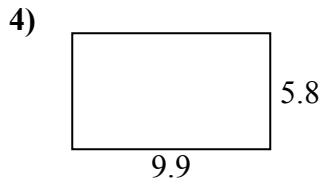
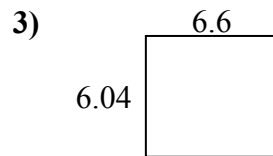
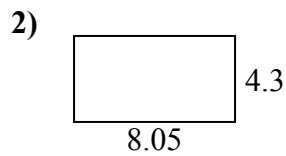
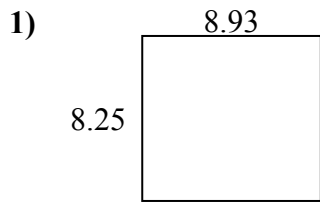


**Câu trả lời**

1. \_\_\_\_\_
2. \_\_\_\_\_
3. \_\_\_\_\_
4. \_\_\_\_\_
5. \_\_\_\_\_
6. \_\_\_\_\_
7. \_\_\_\_\_
8. \_\_\_\_\_
9. \_\_\_\_\_
10. \_\_\_\_\_
11. \_\_\_\_\_
12. \_\_\_\_\_
13. \_\_\_\_\_
14. \_\_\_\_\_
15. \_\_\_\_\_



Tìm chu vi và diện tích của mỗi hình. Trả lời đến ngày 10 gần nhất.



**Câu trả lời**

1.	<u>73,7</u>	<u>34,4</u>
2.	<u>34,6</u>	<u>24,7</u>
3.	<u>39,9</u>	<u>25,3</u>
4.	<u>57,4</u>	<u>31,4</u>
5.	<u>23,6</u>	<u>19,5</u>
6.	<u>14,3</u>	<u>17,4</u>
7.	<u>36,4</u>	<u>26,3</u>
8.	<u>64,3</u>	<u>32,8</u>
9.	<u>9,4</u>	<u>12,5</u>
10.	<u>25,2</u>	<u>21,4</u>
11.	<u>46,8</u>	<u>28,7</u>
12.	<u>8,9</u>	<u>12,7</u>
13.	<u>14,7</u>	<u>15,4</u>
14.	<u>80,0</u>	<u>35,8</u>
15.	<u>26,0</u>	<u>24,8</u>