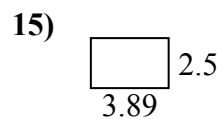
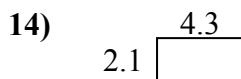
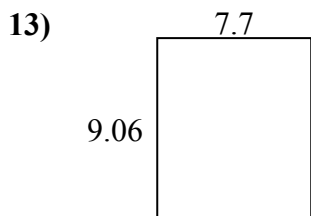
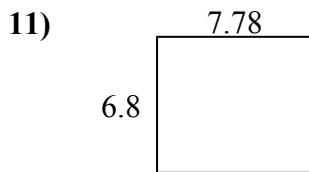
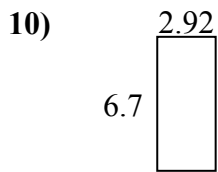
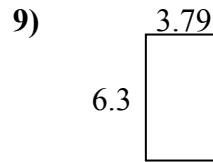
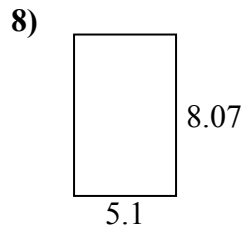
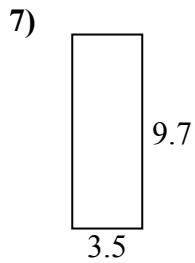
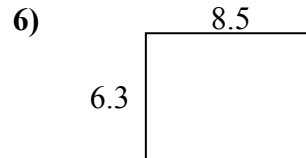
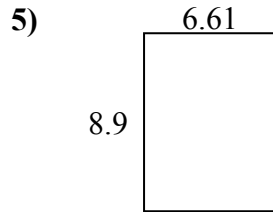
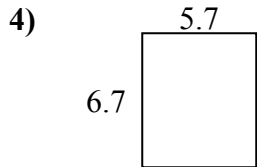
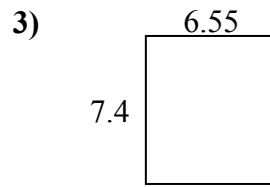
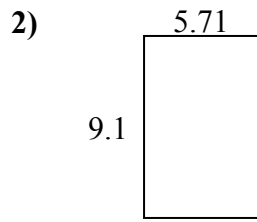
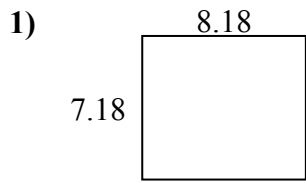




Tìm chu vi và diện tích của mỗi hình. Trả lời đến ngày 10 gần nhất.

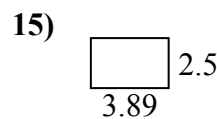
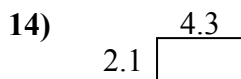
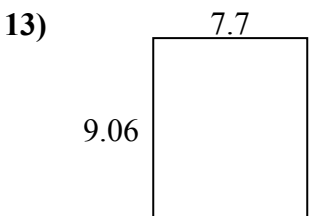
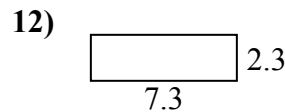
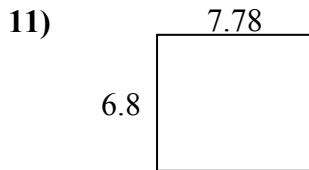
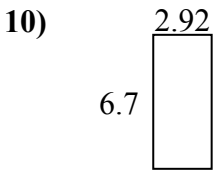
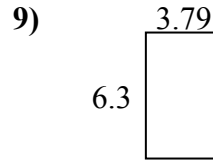
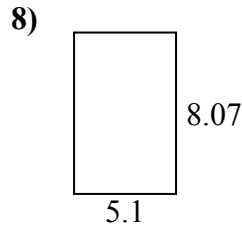
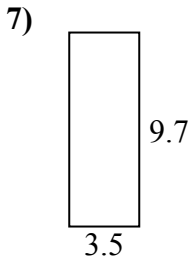
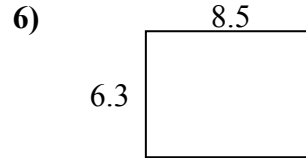
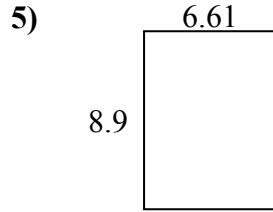
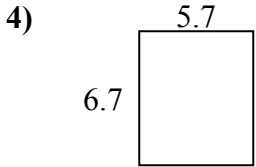
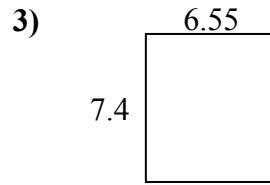
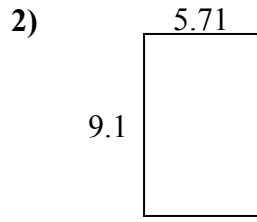
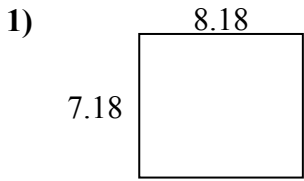


**Câu trả lời**

1. \_\_\_\_\_
2. \_\_\_\_\_
3. \_\_\_\_\_
4. \_\_\_\_\_
5. \_\_\_\_\_
6. \_\_\_\_\_
7. \_\_\_\_\_
8. \_\_\_\_\_
9. \_\_\_\_\_
10. \_\_\_\_\_
11. \_\_\_\_\_
12. \_\_\_\_\_
13. \_\_\_\_\_
14. \_\_\_\_\_
15. \_\_\_\_\_



Tìm chu vi và diện tích của mỗi hình. Trả lời đến ngày 10 gần nhất.



**Câu trả lời**

1.	<u>58,7</u>	<u>30,7</u>
2.	<u>52,0</u>	<u>29,6</u>
3.	<u>48,5</u>	<u>27,9</u>
4.	<u>38,2</u>	<u>24,8</u>
5.	<u>58,8</u>	<u>31,0</u>
6.	<u>53,6</u>	<u>29,6</u>
7.	<u>34,0</u>	<u>26,4</u>
8.	<u>41,2</u>	<u>26,3</u>
9.	<u>23,9</u>	<u>20,2</u>
10.	<u>19,6</u>	<u>19,2</u>
11.	<u>52,9</u>	<u>29,2</u>
12.	<u>16,8</u>	<u>19,2</u>
13.	<u>69,8</u>	<u>33,5</u>
14.	<u>9,0</u>	<u>12,8</u>
15.	<u>9,7</u>	<u>12,8</u>