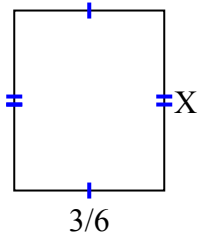




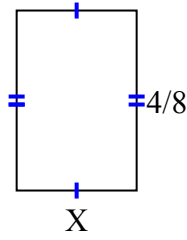
Tìm giá trị của X đối với mỗi hình. Mỗi hình tính bằng cm (cm). Không phải mở rộng quy mô.

Câu trả lời

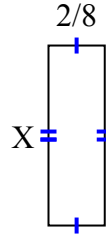
1) diện tích = $\frac{9}{30}$ centimet²



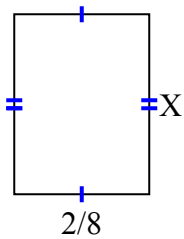
2) diện tích = $\frac{12}{72}$ centimet²



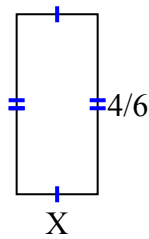
3) diện tích = $\frac{16}{80}$ centimet²



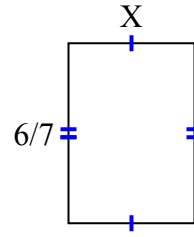
4) diện tích = $\frac{2}{24}$ centimet²



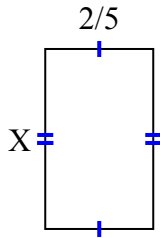
5) diện tích = $\frac{12}{60}$ centimet²



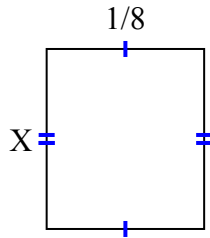
6) diện tích = $\frac{36}{70}$ centimet²



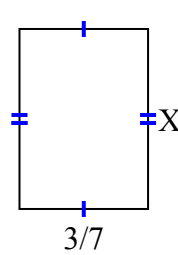
7) diện tích = $\frac{4}{15}$ centimet²



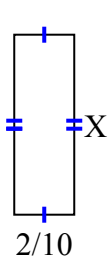
8) diện tích = $\frac{1}{56}$ centimet²



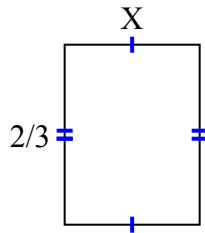
9) diện tích = $\frac{18}{70}$ centimet²



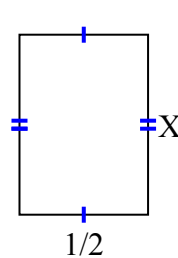
10) diện tích = $\frac{6}{50}$ centimet²



11) diện tích = $\frac{4}{12}$ centimet²



12) diện tích = $\frac{7}{20}$ centimet²

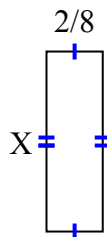
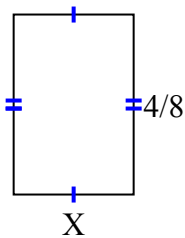
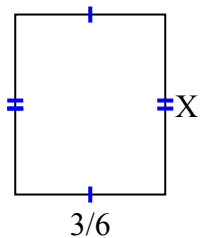


1. _____
2. _____
3. _____
4. _____
5. _____
6. _____
7. _____
8. _____
9. _____
10. _____
11. _____
12. _____

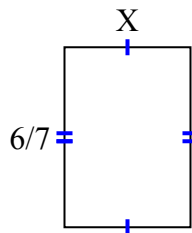
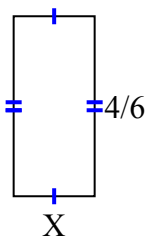
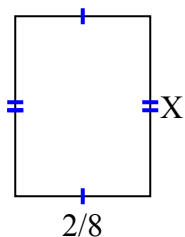


Tìm giá trị của X đối với mỗi hình. Mỗi hình tính bằng cm (cm). Không phải mở rộng quy mô.

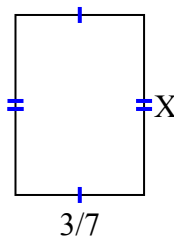
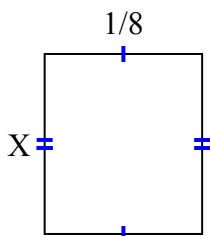
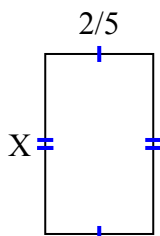
- 1) diện tích = $\frac{9}{30}$ centimet² 2) diện tích = $\frac{12}{72}$ centimet² 3) diện tích = $\frac{16}{80}$ centimet²



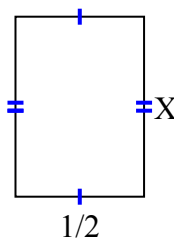
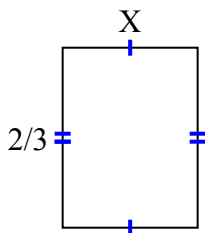
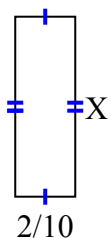
- 4) diện tích = $\frac{2}{24}$ centimet² 5) diện tích = $\frac{12}{60}$ centimet² 6) diện tích = $\frac{36}{70}$ centimet²



- 7) diện tích = $\frac{4}{15}$ centimet² 8) diện tích = $\frac{1}{56}$ centimet² 9) diện tích = $\frac{18}{70}$ centimet²



- 10) diện tích = $\frac{6}{50}$ centimet² 11) diện tích = $\frac{4}{12}$ centimet² 12) diện tích = $\frac{7}{20}$ centimet²



Câu trả lời

1. $\frac{3}{5}$
2. $\frac{3}{9}$
3. $\frac{8}{10}$
4. $\frac{1}{3}$
5. $\frac{3}{10}$
6. $\frac{6}{10}$
7. $\frac{2}{3}$
8. $\frac{1}{7}$
9. $\frac{6}{10}$
10. $\frac{3}{5}$
11. $\frac{2}{4}$
12. $\frac{7}{10}$