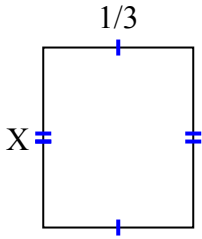




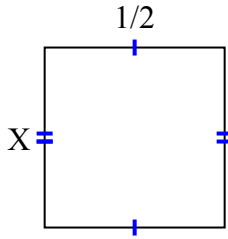
Tìm giá trị của X đối với mỗi hình. Mỗi hình tính bằng cm (cm). Không phải mở rộng quy mô.

Câu trả lời

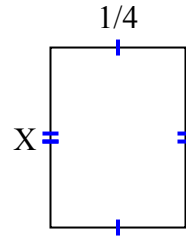
1) diện tích = $\frac{2}{15}$ centimet²



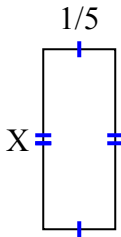
2) diện tích = $\frac{1}{4}$ centimet²



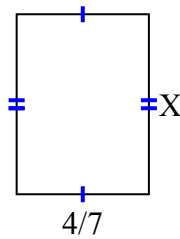
3) diện tích = $\frac{1}{12}$ centimet²



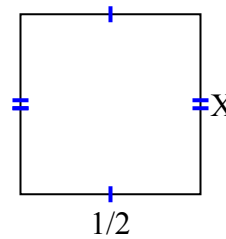
4) diện tích = $\frac{2}{20}$ centimet²



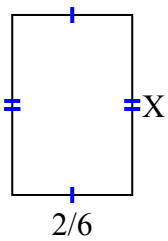
5) diện tích = $\frac{28}{63}$ centimet²



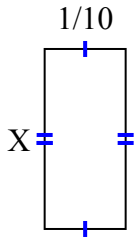
6) diện tích = $\frac{5}{20}$ centimet²



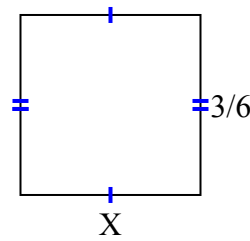
7) diện tích = $\frac{2}{12}$ centimet²



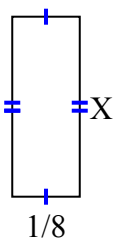
8) diện tích = $\frac{2}{90}$ centimet²



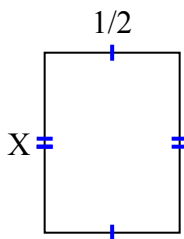
9) diện tích = $\frac{3}{12}$ centimet²



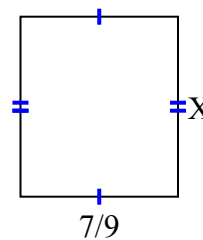
10) diện tích = $\frac{1}{24}$ centimet²



11) diện tích = $\frac{4}{12}$ centimet²



12) diện tích = $\frac{56}{81}$ centimet²

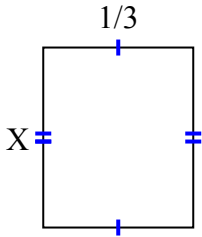


1. _____
2. _____
3. _____
4. _____
5. _____
6. _____
7. _____
8. _____
9. _____
10. _____
11. _____
12. _____

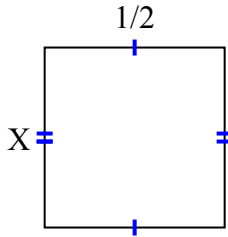


Tìm giá trị của X đối với mỗi hình. Mỗi hình tính bằng cm (cm). Không phải mở rộng quy mô.

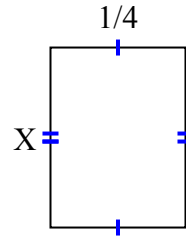
1) diện tích = $\frac{2}{15}$ centimet²



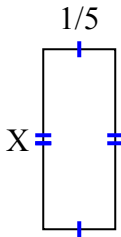
2) diện tích = $\frac{1}{4}$ centimet²



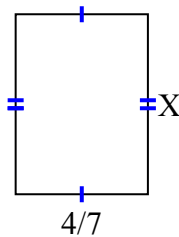
3) diện tích = $\frac{1}{12}$ centimet²



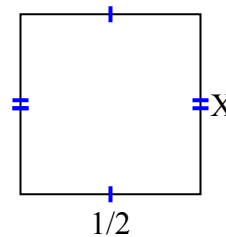
4) diện tích = $\frac{2}{20}$ centimet²



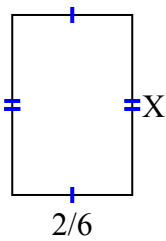
5) diện tích = $\frac{28}{63}$ centimet²



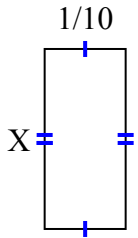
6) diện tích = $\frac{5}{20}$ centimet²



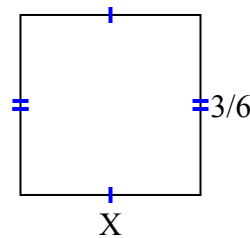
7) diện tích = $\frac{2}{12}$ centimet²



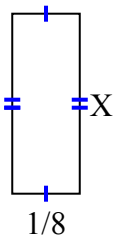
8) diện tích = $\frac{2}{90}$ centimet²



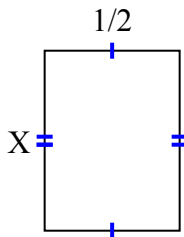
9) diện tích = $\frac{3}{12}$ centimet²



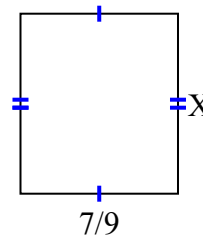
10) diện tích = $\frac{1}{24}$ centimet²



11) diện tích = $\frac{4}{12}$ centimet²



12) diện tích = $\frac{56}{81}$ centimet²



Câu trả lời

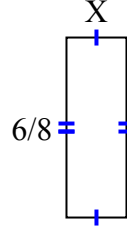
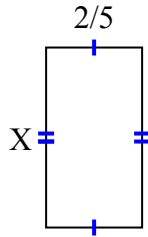
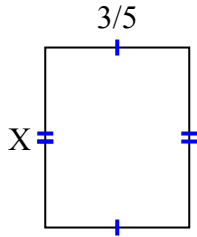
1. $\frac{2}{5}$
2. $\frac{1}{2}$
3. $\frac{1}{3}$
4. $\frac{2}{4}$
5. $\frac{7}{9}$
6. $\frac{5}{10}$
7. $\frac{1}{2}$
8. $\frac{2}{9}$
9. $\frac{1}{2}$
10. $\frac{1}{3}$
11. $\frac{4}{6}$
12. $\frac{8}{9}$



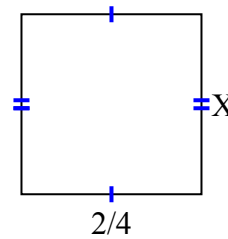
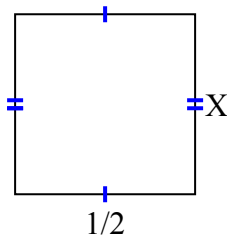
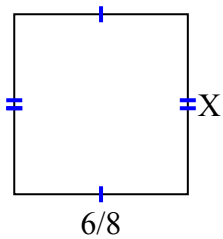
Tìm giá trị của X đối với mỗi hình. Mỗi hình tính bằng cm (cm). Không phải mở rộng quy mô.

Câu trả lời

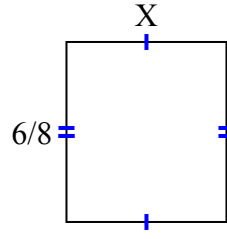
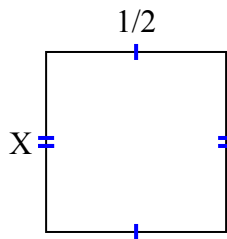
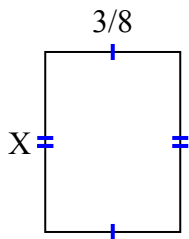
- 1) diện tích = $\frac{18}{40}$ centimet² 2) diện tích = $\frac{6}{20}$ centimet² 3) diện tích = $\frac{6}{32}$ centimet²



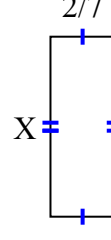
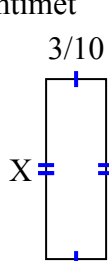
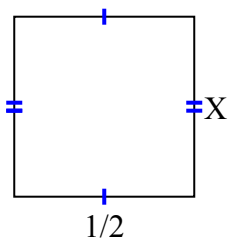
- 4) diện tích = $\frac{42}{72}$ centimet² 5) diện tích = $\frac{5}{20}$ centimet² 6) diện tích = $\frac{6}{24}$ centimet²



- 7) diện tích = $\frac{3}{16}$ centimet² 8) diện tích = $\frac{2}{8}$ centimet² 9) diện tích = $\frac{12}{24}$ centimet²



- 10) diện tích = $\frac{1}{4}$ centimet² 11) diện tích = $\frac{27}{100}$ centimet² 12) diện tích = $\frac{16}{70}$ centimet²



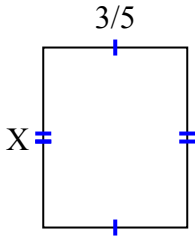
1. _____
2. _____
3. _____
4. _____
5. _____
6. _____
7. _____
8. _____
9. _____
10. _____
11. _____
12. _____



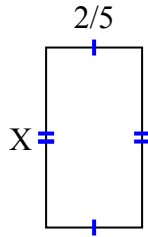
Tìm giá trị của X đối với mỗi hình. Mỗi hình tính bằng cm (cm). Không phải mở rộng quy mô.

Câu trả lời

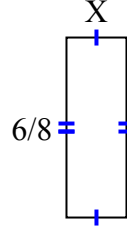
1) diện tích = $\frac{18}{40}$ centimet²



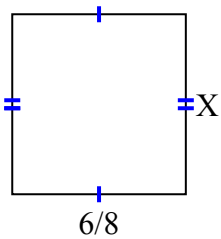
2) diện tích = $\frac{6}{20}$ centimet²



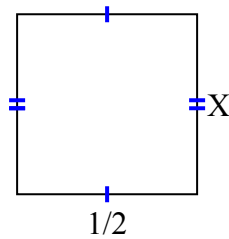
3) diện tích = $\frac{6}{32}$ centimet²



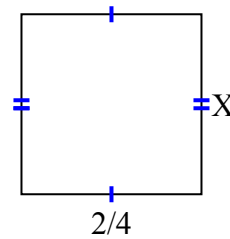
4) diện tích = $\frac{42}{72}$ centimet²



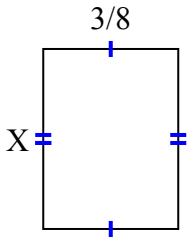
5) diện tích = $\frac{5}{20}$ centimet²



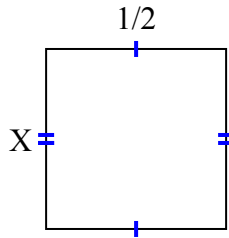
6) diện tích = $\frac{6}{24}$ centimet²



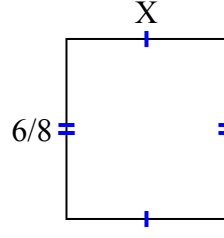
7) diện tích = $\frac{3}{16}$ centimet²



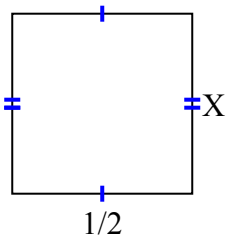
8) diện tích = $\frac{2}{8}$ centimet²



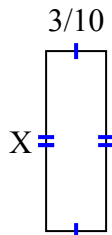
9) diện tích = $\frac{12}{24}$ centimet²



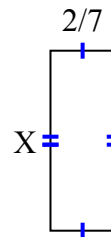
10) diện tích = $\frac{1}{4}$ centimet²



11) diện tích = $\frac{27}{100}$ centimet²



12) diện tích = $\frac{16}{70}$ centimet²



1. $\frac{6}{8}$

2. $\frac{3}{4}$

3. $\frac{1}{4}$

4. $\frac{7}{9}$

5. $\frac{5}{10}$

6. $\frac{3}{6}$

7. $\frac{1}{2}$

8. $\frac{2}{4}$

9. $\frac{2}{3}$

10. $\frac{1}{2}$

11. $\frac{9}{10}$

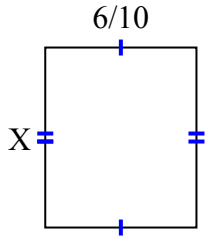
12. $\frac{8}{10}$



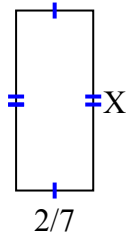
Tìm giá trị của X đối với mỗi hình. Mỗi hình tính bằng cm (cm). Không phải mở rộng quy mô.

Câu trả lời

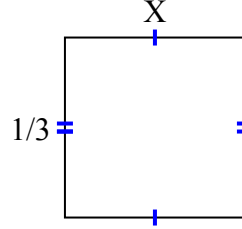
1) diện tích = $\frac{30}{70}$ centimet²



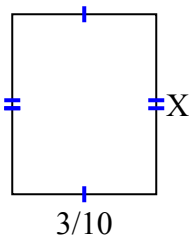
2) diện tích = $\frac{4}{21}$ centimet²



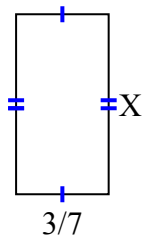
3) diện tích = $\frac{1}{9}$ centimet²



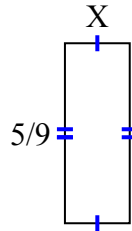
4) diện tích = $\frac{9}{80}$ centimet²



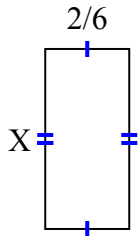
5) diện tích = $\frac{15}{42}$ centimet²



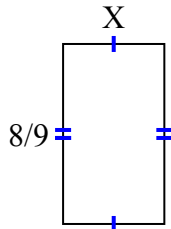
6) diện tích = $\frac{5}{45}$ centimet²



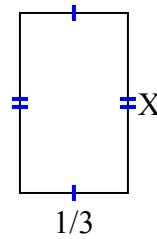
7) diện tích = $\frac{10}{42}$ centimet²



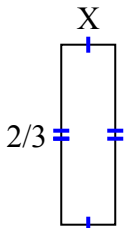
8) diện tích = $\frac{40}{90}$ centimet²



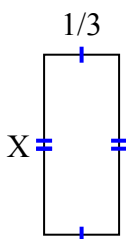
9) diện tích = $\frac{5}{27}$ centimet²



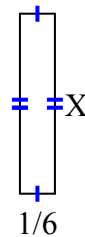
10) diện tích = $\frac{2}{15}$ centimet²



11) diện tích = $\frac{4}{15}$ centimet²



12) diện tích = $\frac{6}{42}$ centimet²

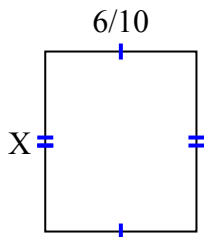


1. _____
2. _____
3. _____
4. _____
5. _____
6. _____
7. _____
8. _____
9. _____
10. _____
11. _____
12. _____

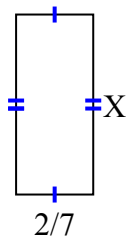


Tìm giá trị của X đối với mỗi hình. Mỗi hình tính bằng cm (cm). Không phải mở rộng quy mô.

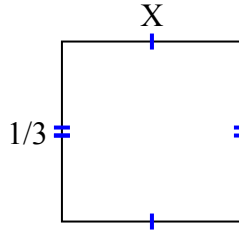
1) diện tích = $\frac{30}{70}$ centimet²



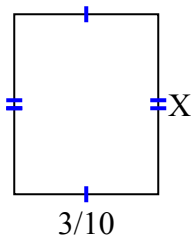
2) diện tích = $\frac{4}{21}$ centimet²



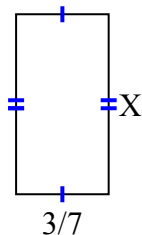
3) diện tích = $\frac{1}{9}$ centimet²



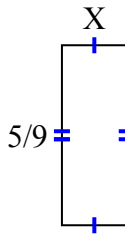
4) diện tích = $\frac{9}{80}$ centimet²



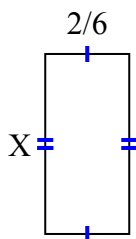
5) diện tích = $\frac{15}{42}$ centimet²



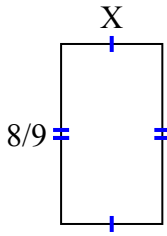
6) diện tích = $\frac{5}{45}$ centimet²



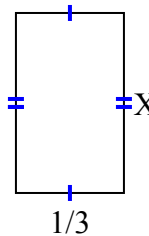
7) diện tích = $\frac{10}{42}$ centimet²



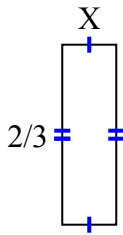
8) diện tích = $\frac{40}{90}$ centimet²



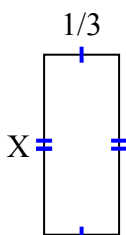
9) diện tích = $\frac{5}{27}$ centimet²



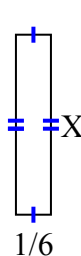
10) diện tích = $\frac{2}{15}$ centimet²



11) diện tích = $\frac{4}{15}$ centimet²



12) diện tích = $\frac{6}{42}$ centimet²



Câu trả lời

1. $\frac{5}{7}$

2. $\frac{2}{3}$

3. $\frac{1}{3}$

4. $\frac{3}{8}$

5. $\frac{5}{6}$

6. $\frac{1}{5}$

7. $\frac{5}{7}$

8. $\frac{5}{10}$

9. $\frac{5}{9}$

10. $\frac{1}{5}$

11. $\frac{4}{5}$

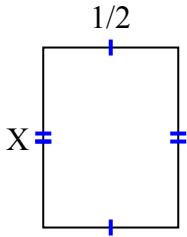
12. $\frac{6}{7}$



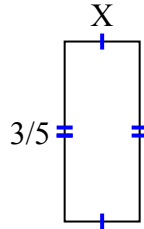
Tìm giá trị của X đối với mỗi hình. Mỗi hình tính bằng cm (cm). Không phải mở rộng quy mô.

Câu trả lời

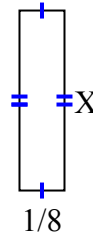
1) diện tích = $\frac{2}{6}$ centimet²



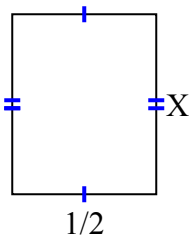
2) diện tích = $\frac{3}{20}$ centimet²



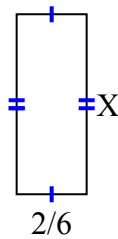
3) diện tích = $\frac{1}{16}$ centimet²



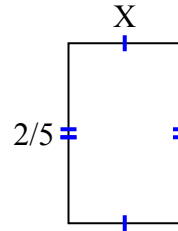
4) diện tích = $\frac{5}{16}$ centimet²



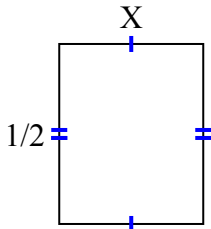
5) diện tích = $\frac{12}{42}$ centimet²



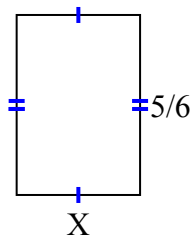
6) diện tích = $\frac{4}{40}$ centimet²



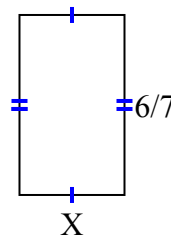
7) diện tích = $\frac{2}{10}$ centimet²



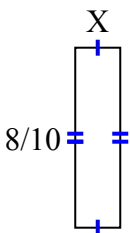
8) diện tích = $\frac{20}{42}$ centimet²



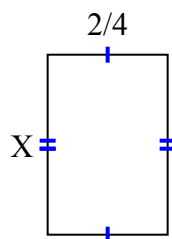
9) diện tích = $\frac{12}{28}$ centimet²



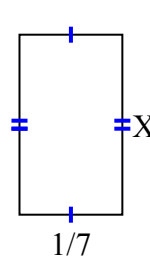
10) diện tích = $\frac{8}{50}$ centimet²



11) diện tích = $\frac{12}{32}$ centimet²



12) diện tích = $\frac{1}{28}$ centimet²

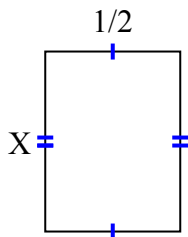


1. _____
2. _____
3. _____
4. _____
5. _____
6. _____
7. _____
8. _____
9. _____
10. _____
11. _____
12. _____

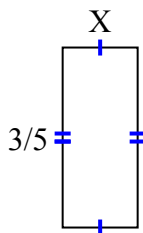


Tìm giá trị của X đối với mỗi hình. Mỗi hình tính bằng cm (cm). Không phải mở rộng quy mô.

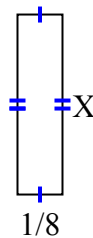
1) diện tích = $\frac{2}{6}$ centimet²



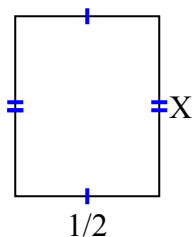
2) diện tích = $\frac{3}{20}$ centimet²



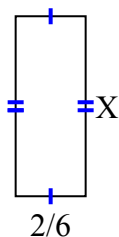
3) diện tích = $\frac{1}{16}$ centimet²



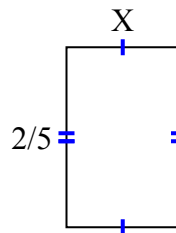
4) diện tích = $\frac{5}{16}$ centimet²



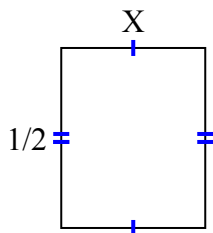
5) diện tích = $\frac{12}{42}$ centimet²



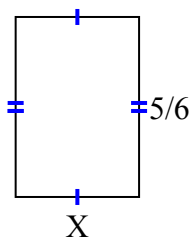
6) diện tích = $\frac{4}{40}$ centimet²



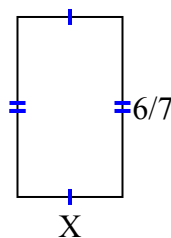
7) diện tích = $\frac{2}{10}$ centimet²



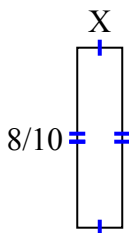
8) diện tích = $\frac{20}{42}$ centimet²



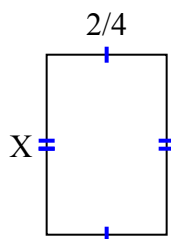
9) diện tích = $\frac{12}{28}$ centimet²



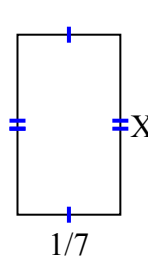
10) diện tích = $\frac{8}{50}$ centimet²



11) diện tích = $\frac{12}{32}$ centimet²



12) diện tích = $\frac{1}{28}$ centimet²



Câu trả lời

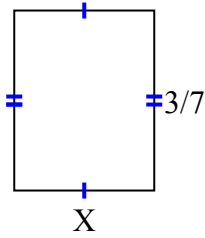
1. $\frac{2}{3}$
2. $\frac{1}{4}$
3. $\frac{1}{2}$
4. $\frac{5}{8}$
5. $\frac{6}{7}$
6. $\frac{2}{8}$
7. $\frac{2}{5}$
8. $\frac{4}{7}$
9. $\frac{2}{4}$
10. $\frac{1}{5}$
11. $\frac{6}{8}$
12. $\frac{1}{4}$



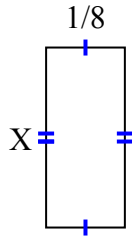
Tìm giá trị của X đối với mỗi hình. Mỗi hình tính bằng cm (cm). Không phải mở rộng quy mô.

Câu trả lời

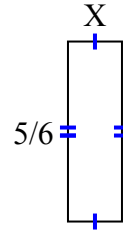
1) diện tích = $\frac{9}{63}$ centimet²



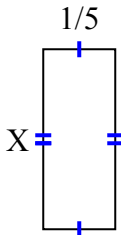
2) diện tích = $\frac{2}{56}$ centimet²



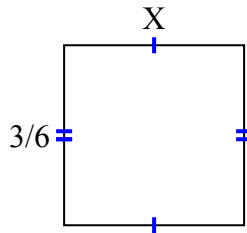
3) diện tích = $\frac{5}{24}$ centimet²



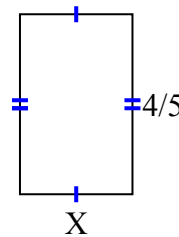
4) diện tích = $\frac{1}{10}$ centimet²



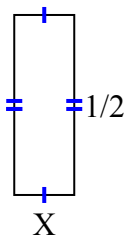
5) diện tích = $\frac{6}{24}$ centimet²



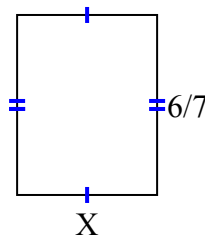
6) diện tích = $\frac{4}{10}$ centimet²



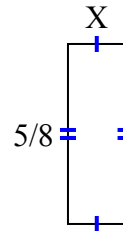
7) diện tích = $\frac{1}{12}$ centimet²



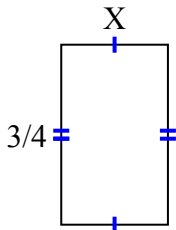
8) diện tích = $\frac{36}{63}$ centimet²



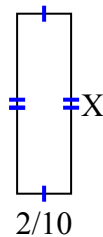
9) diện tích = $\frac{5}{40}$ centimet²



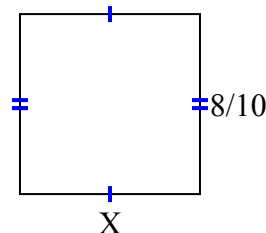
10) diện tích = $\frac{12}{36}$ centimet²



11) diện tích = $\frac{8}{60}$ centimet²



12) diện tích = $\frac{64}{100}$ centimet²



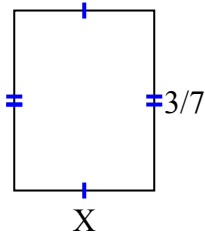
1. _____
2. _____
3. _____
4. _____
5. _____
6. _____
7. _____
8. _____
9. _____
10. _____
11. _____
12. _____



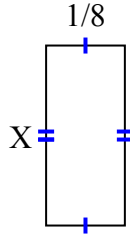
Tìm giá trị của X đối với mỗi hình. Mỗi hình tính bằng cm (cm). Không phải mở rộng quy mô.

Câu trả lời

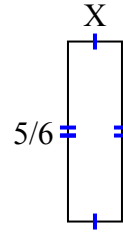
1) diện tích = $\frac{9}{63}$ centimet²



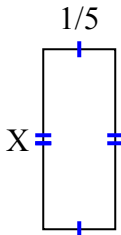
2) diện tích = $\frac{2}{56}$ centimet²



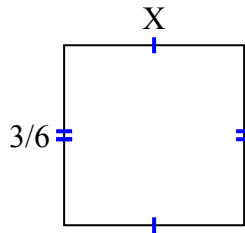
3) diện tích = $\frac{5}{24}$ centimet²



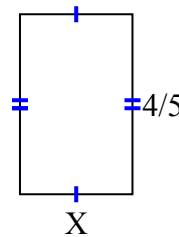
4) diện tích = $\frac{1}{10}$ centimet²



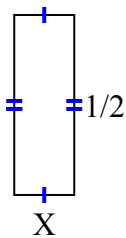
5) diện tích = $\frac{6}{24}$ centimet²



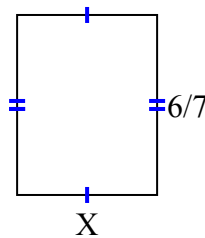
6) diện tích = $\frac{4}{10}$ centimet²



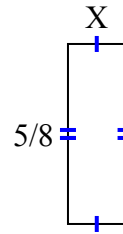
7) diện tích = $\frac{1}{12}$ centimet²



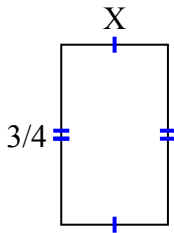
8) diện tích = $\frac{36}{63}$ centimet²



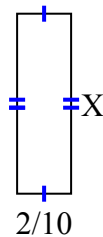
9) diện tích = $\frac{5}{40}$ centimet²



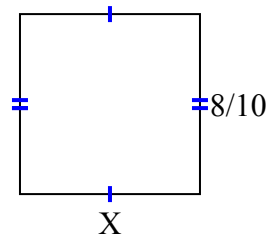
10) diện tích = $\frac{12}{36}$ centimet²



11) diện tích = $\frac{8}{60}$ centimet²



12) diện tích = $\frac{64}{100}$ centimet²



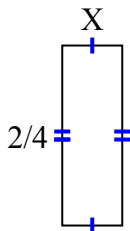
1. $\frac{3}{9}$
2. $\frac{2}{7}$
3. $\frac{1}{4}$
4. $\frac{1}{2}$
5. $\frac{2}{4}$
6. $\frac{1}{2}$
7. $\frac{1}{6}$
8. $\frac{6}{9}$
9. $\frac{1}{5}$
10. $\frac{4}{9}$
11. $\frac{4}{6}$
12. $\frac{8}{10}$



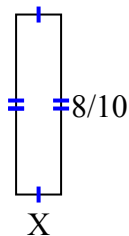
Tìm giá trị của X đối với mỗi hình. Mỗi hình tính bằng cm (cm). Không phải mở rộng quy mô.

Câu trả lời

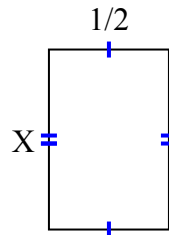
1) diện tích = $\frac{2}{24}$ centimet²



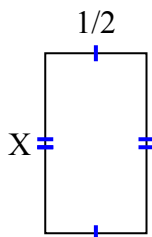
2) diện tích = $\frac{8}{50}$ centimet²



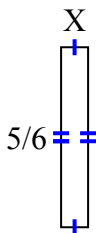
3) diện tích = $\frac{6}{16}$ centimet²



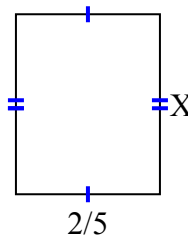
4) diện tích = $\frac{8}{18}$ centimet²



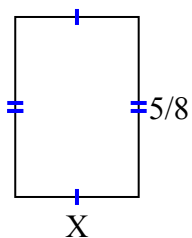
5) diện tích = $\frac{5}{48}$ centimet²



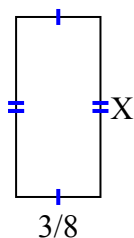
6) diện tích = $\frac{2}{10}$ centimet²



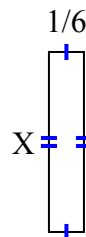
7) diện tích = $\frac{15}{56}$ centimet²



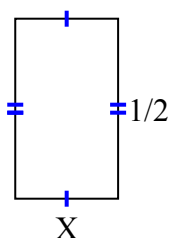
8) diện tích = $\frac{24}{80}$ centimet²



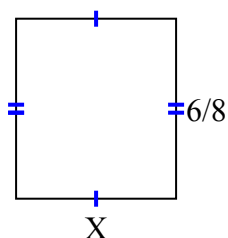
9) diện tích = $\frac{6}{42}$ centimet²



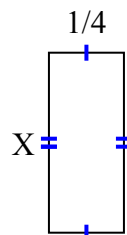
10) diện tích = $\frac{2}{14}$ centimet²



11) diện tích = $\frac{24}{48}$ centimet²



12) diện tích = $\frac{3}{20}$ centimet²



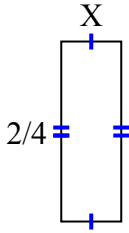
1. _____
2. _____
3. _____
4. _____
5. _____
6. _____
7. _____
8. _____
9. _____
10. _____
11. _____
12. _____



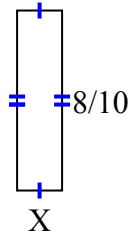
Tìm giá trị của X đối với mỗi hình. Mỗi hình tính bằng cm (cm). Không phải mở rộng quy mô.

Câu trả lời

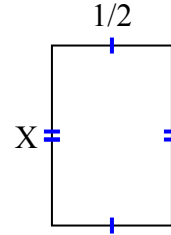
1) diện tích = $\frac{2}{24}$ centimet²



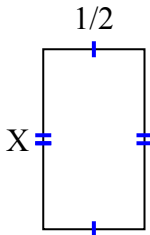
2) diện tích = $\frac{8}{50}$ centimet²



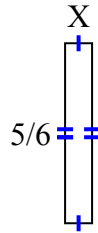
3) diện tích = $\frac{6}{16}$ centimet²



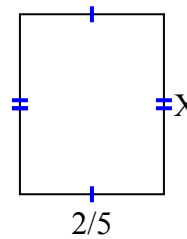
4) diện tích = $\frac{8}{18}$ centimet²



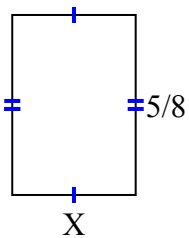
5) diện tích = $\frac{5}{48}$ centimet²



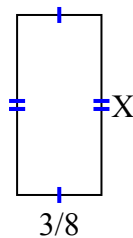
6) diện tích = $\frac{2}{10}$ centimet²



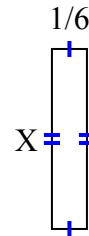
7) diện tích = $\frac{15}{56}$ centimet²



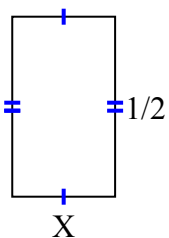
8) diện tích = $\frac{24}{80}$ centimet²



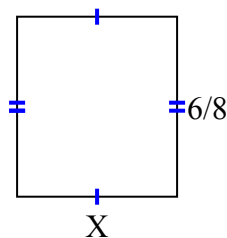
9) diện tích = $\frac{6}{42}$ centimet²



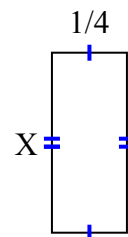
10) diện tích = $\frac{2}{14}$ centimet²



11) diện tích = $\frac{24}{48}$ centimet²



12) diện tích = $\frac{3}{20}$ centimet²



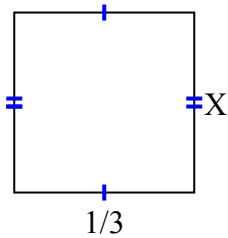
1. $\frac{1}{6}$
2. $\frac{1}{5}$
3. $\frac{6}{8}$
4. $\frac{8}{9}$
5. $\frac{1}{8}$
6. $\frac{1}{2}$
7. $\frac{3}{7}$
8. $\frac{8}{10}$
9. $\frac{6}{7}$
10. $\frac{2}{7}$
11. $\frac{4}{6}$
12. $\frac{3}{5}$



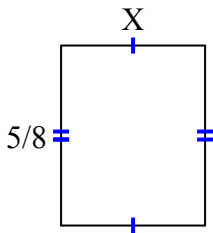
Tìm giá trị của X đối với mỗi hình. Mỗi hình tính bằng cm (cm). Không phải mở rộng quy mô.

Câu trả lời

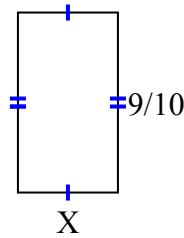
1) diện tích = $\frac{2}{18}$ centimet²



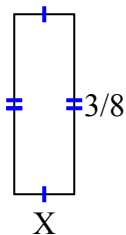
2) diện tích = $\frac{10}{32}$ centimet²



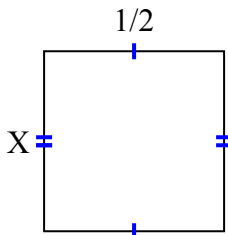
3) diện tích = $\frac{9}{20}$ centimet²



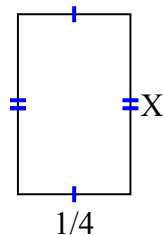
4) diện tích = $\frac{3}{64}$ centimet²



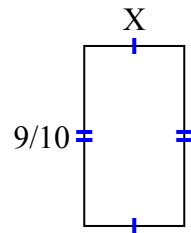
5) diện tích = $\frac{2}{8}$ centimet²



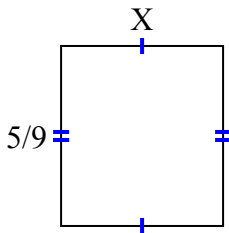
6) diện tích = $\frac{4}{40}$ centimet²



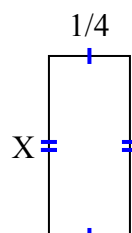
7) diện tích = $\frac{36}{80}$ centimet²



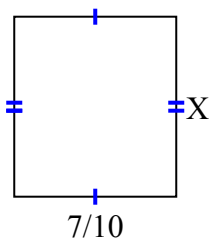
8) diện tích = $\frac{5}{18}$ centimet²



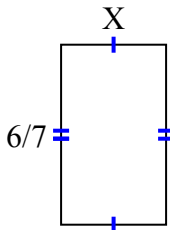
9) diện tích = $\frac{5}{36}$ centimet²



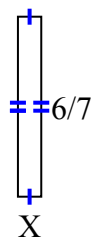
10) diện tích = $\frac{49}{90}$ centimet²



11) diện tích = $\frac{12}{28}$ centimet²



12) diện tích = $\frac{6}{63}$ centimet²



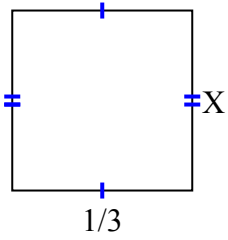
1. _____
2. _____
3. _____
4. _____
5. _____
6. _____
7. _____
8. _____
9. _____
10. _____
11. _____
12. _____



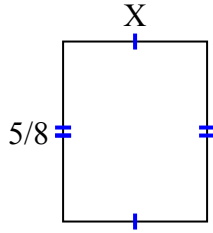
Tìm giá trị của X đối với mỗi hình. Mỗi hình tính bằng cm (cm). Không phải mở rộng quy mô.

Câu trả lời

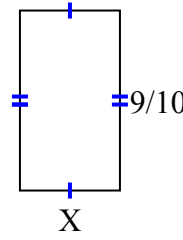
1) diện tích = $\frac{2}{18}$ centimet²



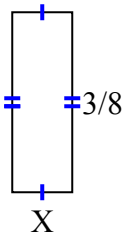
2) diện tích = $\frac{10}{32}$ centimet²



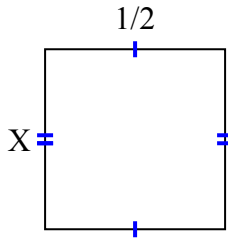
3) diện tích = $\frac{9}{20}$ centimet²



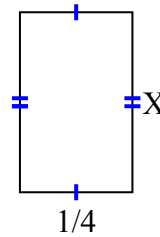
4) diện tích = $\frac{3}{64}$ centimet²



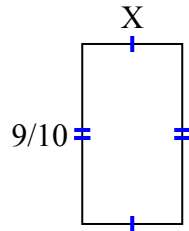
5) diện tích = $\frac{2}{8}$ centimet²



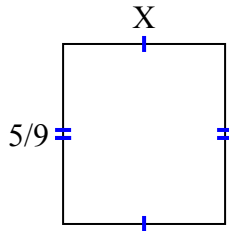
6) diện tích = $\frac{4}{40}$ centimet²



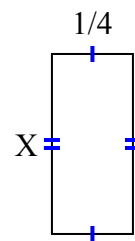
7) diện tích = $\frac{36}{80}$ centimet²



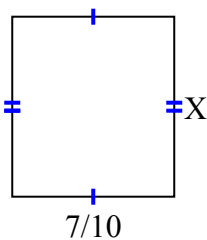
8) diện tích = $\frac{5}{18}$ centimet²



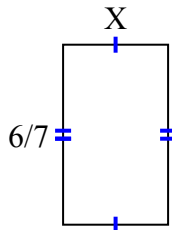
9) diện tích = $\frac{5}{36}$ centimet²



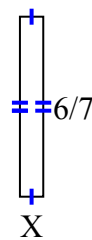
10) diện tích = $\frac{49}{90}$ centimet²



11) diện tích = $\frac{12}{28}$ centimet²



12) diện tích = $\frac{6}{63}$ centimet²



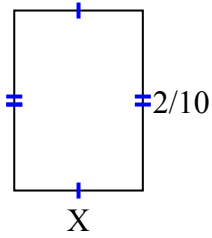
1. $\frac{2}{6}$
2. $\frac{2}{4}$
3. $\frac{1}{2}$
4. $\frac{1}{8}$
5. $\frac{2}{4}$
6. $\frac{4}{10}$
7. $\frac{4}{8}$
8. $\frac{1}{2}$
9. $\frac{5}{9}$
10. $\frac{7}{9}$
11. $\frac{2}{4}$
12. $\frac{1}{9}$



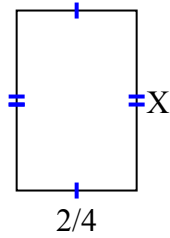
Tìm giá trị của X đối với mỗi hình. Mỗi hình tính bằng cm (cm). Không phải mở rộng quy mô.

Câu trả lời

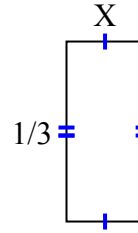
1) diện tích = $\frac{2}{70} \text{ centimet}^2$



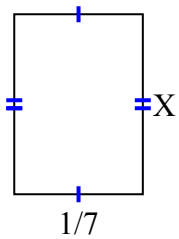
2) diện tích = $\frac{12}{32} \text{ centimet}^2$



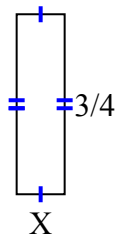
3) diện tích = $\frac{1}{21} \text{ centimet}^2$



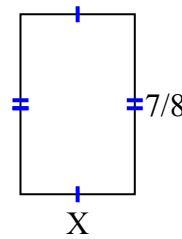
4) diện tích = $\frac{2}{70} \text{ centimet}^2$



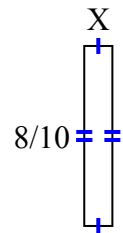
5) diện tích = $\frac{3}{20} \text{ centimet}^2$



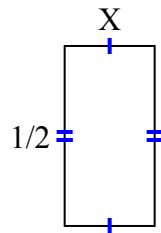
6) diện tích = $\frac{35}{72} \text{ centimet}^2$



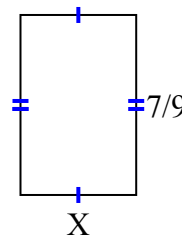
7) diện tích = $\frac{8}{80} \text{ centimet}^2$



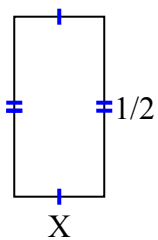
8) diện tích = $\frac{2}{16} \text{ centimet}^2$



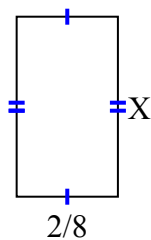
9) diện tích = $\frac{14}{36} \text{ centimet}^2$



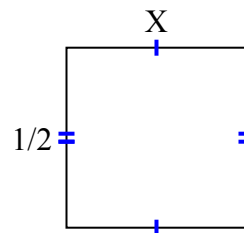
10) diện tích = $\frac{1}{8} \text{ centimet}^2$



11) diện tích = $\frac{8}{72} \text{ centimet}^2$



12) diện tích = $\frac{1}{4} \text{ centimet}^2$



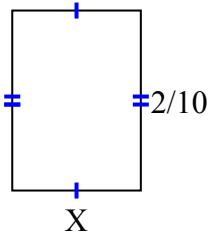
1. _____
2. _____
3. _____
4. _____
5. _____
6. _____
7. _____
8. _____
9. _____
10. _____
11. _____
12. _____



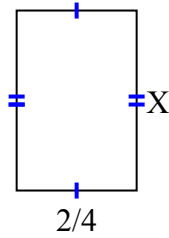
Tìm giá trị của X đối với mỗi hình. Mỗi hình tính bằng cm (cm). Không phải mở rộng quy mô.

Câu trả lời

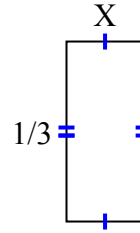
1) diện tích = $\frac{2}{70}$ centimet²



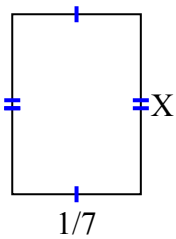
2) diện tích = $\frac{12}{32}$ centimet²



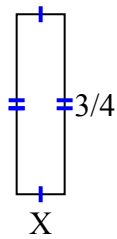
3) diện tích = $\frac{1}{21}$ centimet²



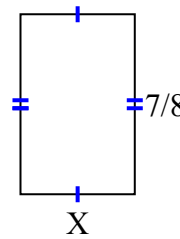
4) diện tích = $\frac{2}{70}$ centimet²



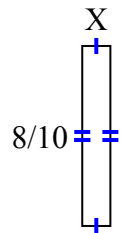
5) diện tích = $\frac{3}{20}$ centimet²



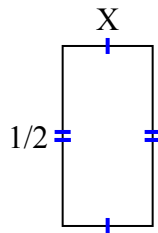
6) diện tích = $\frac{35}{72}$ centimet²



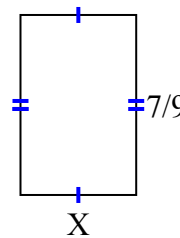
7) diện tích = $\frac{8}{80}$ centimet²



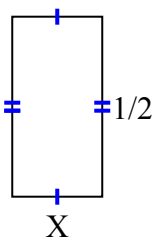
8) diện tích = $\frac{2}{16}$ centimet²



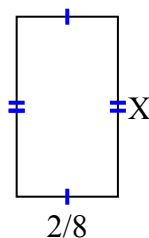
9) diện tích = $\frac{14}{36}$ centimet²



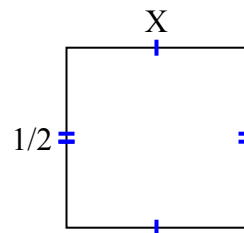
10) diện tích = $\frac{1}{8}$ centimet²



11) diện tích = $\frac{8}{72}$ centimet²



12) diện tích = $\frac{1}{4}$ centimet²



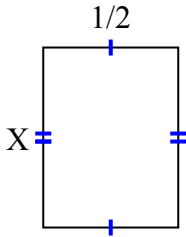
1. $\frac{1}{7}$
2. $\frac{6}{8}$
3. $\frac{1}{7}$
4. $\frac{2}{10}$
5. $\frac{1}{5}$
6. $\frac{5}{9}$
7. $\frac{1}{8}$
8. $\frac{2}{8}$
9. $\frac{2}{4}$
10. $\frac{1}{4}$
11. $\frac{4}{9}$
12. $\frac{1}{2}$



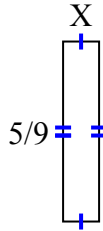
Tìm giá trị của X đối với mỗi hình. Mỗi hình tính bằng cm (cm). Không phải mở rộng quy mô.

Câu trả lời

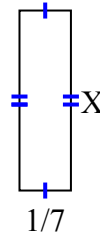
1) diện tích = $\frac{2}{6}$ centimet²



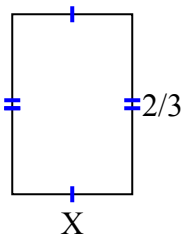
2) diện tích = $\frac{5}{81}$ centimet²



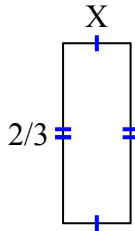
3) diện tích = $\frac{1}{14}$ centimet²



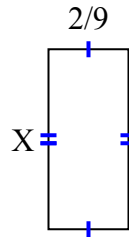
4) diện tích = $\frac{8}{27}$ centimet²



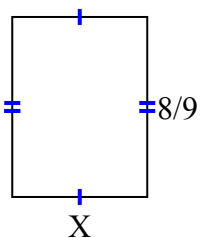
5) diện tích = $\frac{2}{12}$ centimet²



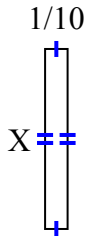
6) diện tích = $\frac{10}{90}$ centimet²



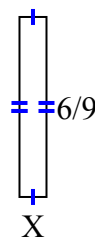
7) diện tích = $\frac{48}{81}$ centimet²



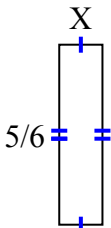
8) diện tích = $\frac{4}{50}$ centimet²



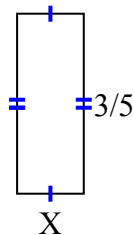
9) diện tích = $\frac{6}{90}$ centimet²



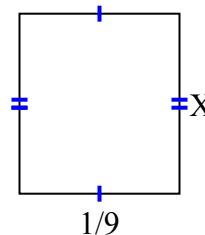
10) diện tích = $\frac{5}{30}$ centimet²



11) diện tích = $\frac{6}{45}$ centimet²



12) diện tích = $\frac{1}{72}$ centimet²



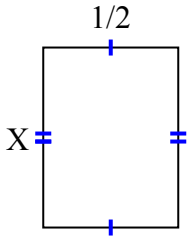
1. _____
2. _____
3. _____
4. _____
5. _____
6. _____
7. _____
8. _____
9. _____
10. _____
11. _____
12. _____



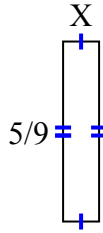
Tìm giá trị của X đối với mỗi hình. Mỗi hình tính bằng cm (cm). Không phải mở rộng quy mô.

Câu trả lời

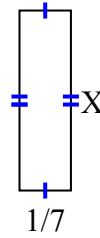
1) diện tích = $\frac{2}{6}$ centimet²



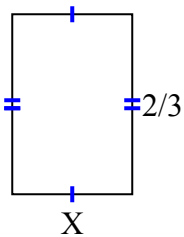
2) diện tích = $\frac{5}{81}$ centimet²



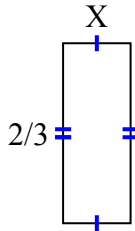
3) diện tích = $\frac{1}{14}$ centimet²



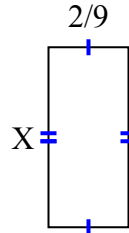
4) diện tích = $\frac{8}{27}$ centimet²



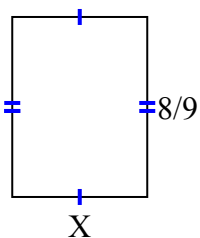
5) diện tích = $\frac{2}{12}$ centimet²



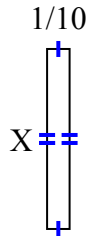
6) diện tích = $\frac{10}{90}$ centimet²



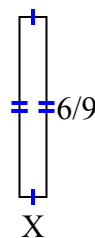
7) diện tích = $\frac{48}{81}$ centimet²



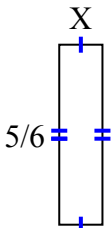
8) diện tích = $\frac{4}{50}$ centimet²



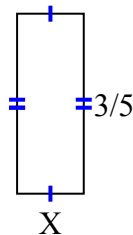
9) diện tích = $\frac{6}{90}$ centimet²



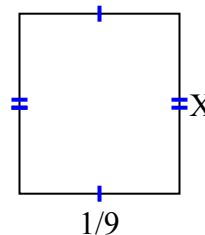
10) diện tích = $\frac{5}{30}$ centimet²



11) diện tích = $\frac{6}{45}$ centimet²



12) diện tích = $\frac{1}{72}$ centimet²



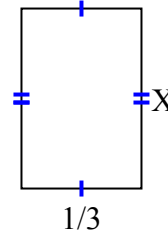
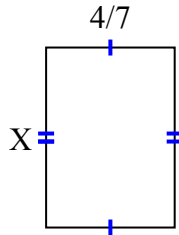
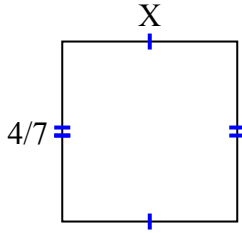
1. $\frac{2}{3}$
2. $\frac{1}{9}$
3. $\frac{1}{2}$
4. $\frac{4}{9}$
5. $\frac{1}{4}$
6. $\frac{5}{10}$
7. $\frac{6}{9}$
8. $\frac{4}{5}$
9. $\frac{1}{10}$
10. $\frac{1}{5}$
11. $\frac{2}{9}$
12. $\frac{1}{8}$



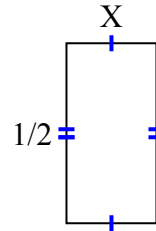
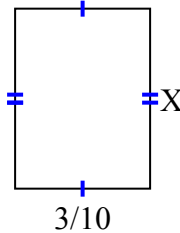
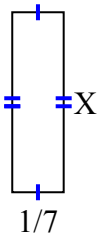
Tìm giá trị của X đối với mỗi hình. Mỗi hình tính bằng cm (cm). Không phải mở rộng quy mô.

Câu trả lời

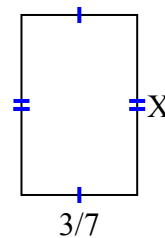
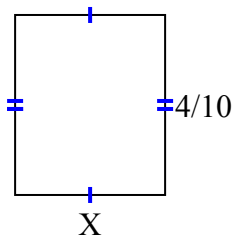
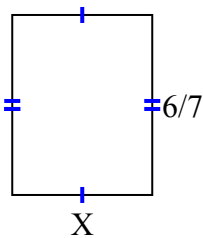
- 1) diện tích = $\frac{20}{63}$ centimet² 2) diện tích = $\frac{16}{35}$ centimet² 3) diện tích = $\frac{1}{6}$ centimet²



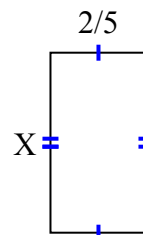
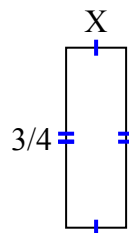
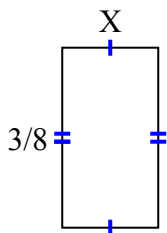
- 4) diện tích = $\frac{2}{28}$ centimet² 5) diện tích = $\frac{12}{100}$ centimet² 6) diện tích = $\frac{1}{8}$ centimet²



- 7) diện tích = $\frac{36}{63}$ centimet² 8) diện tích = $\frac{4}{30}$ centimet² 9) diện tích = $\frac{12}{42}$ centimet²



- 10) diện tích = $\frac{3}{40}$ centimet² 11) diện tích = $\frac{6}{32}$ centimet² 12) diện tích = $\frac{12}{40}$ centimet²



1. _____
2. _____
3. _____
4. _____
5. _____
6. _____
7. _____
8. _____
9. _____
10. _____
11. _____
12. _____

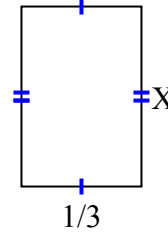
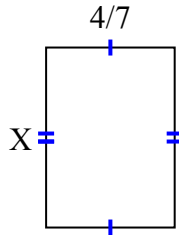
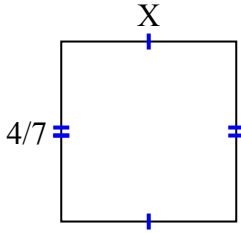


Tìm giá trị của X đối với mỗi hình. Mỗi hình tính bằng cm (cm). Không phải mở rộng quy mô.

Câu trả lời

- 1) diện tích = $\frac{20}{63}$ centimet² 2) diện tích = $\frac{16}{35}$ centimet² 3) diện tích = $\frac{1}{6}$ centimet²

1. $\frac{5}{9}$



2. $\frac{4}{5}$

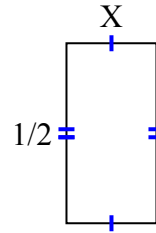
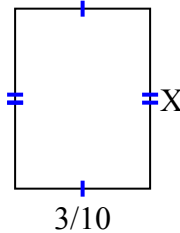
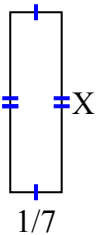
- 4) diện tích = $\frac{2}{28}$ centimet² 5) diện tích = $\frac{12}{100}$ centimet² 6) diện tích = $\frac{1}{8}$ centimet²

3. $\frac{1}{2}$

4. $\frac{2}{4}$

5. $\frac{4}{10}$

6. $\frac{1}{4}$



7. $\frac{6}{9}$

8. $\frac{1}{3}$

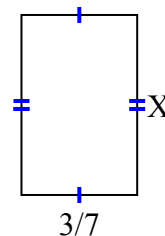
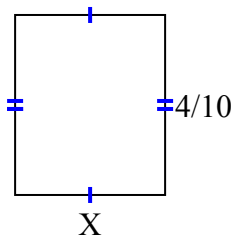
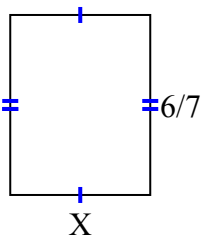
9. $\frac{4}{6}$

- 7) diện tích = $\frac{36}{63}$ centimet² 8) diện tích = $\frac{4}{30}$ centimet² 9) diện tích = $\frac{12}{42}$ centimet²

10. $\frac{1}{5}$

11. $\frac{2}{8}$

12. $\frac{6}{8}$



- 10) diện tích = $\frac{3}{40}$ centimet² 11) diện tích = $\frac{6}{32}$ centimet² 12) diện tích = $\frac{12}{40}$ centimet²

