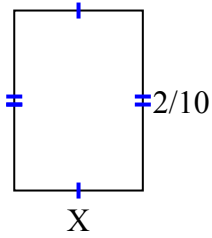




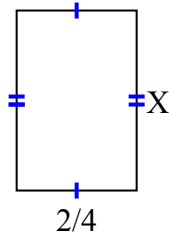
Tìm giá trị của X đối với mỗi hình. Mỗi hình tính bằng cm (cm). Không phải mở rộng quy mô.

Câu trả lời

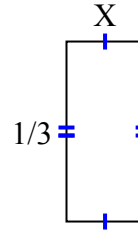
1) diện tích = $\frac{2}{70}$ centimet²



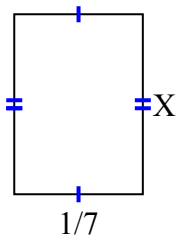
2) diện tích = $\frac{12}{32}$ centimet²



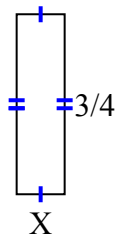
3) diện tích = $\frac{1}{21}$ centimet²



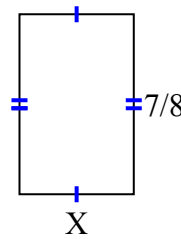
4) diện tích = $\frac{2}{70}$ centimet²



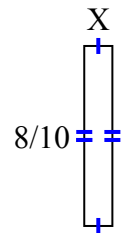
5) diện tích = $\frac{3}{20}$ centimet²



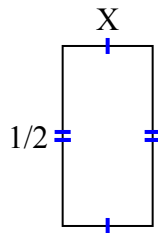
6) diện tích = $\frac{35}{72}$ centimet²



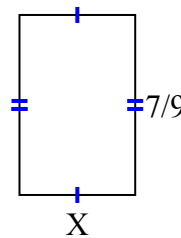
7) diện tích = $\frac{8}{80}$ centimet²



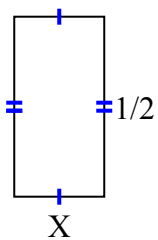
8) diện tích = $\frac{2}{16}$ centimet²



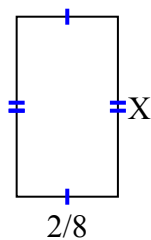
9) diện tích = $\frac{14}{36}$ centimet²



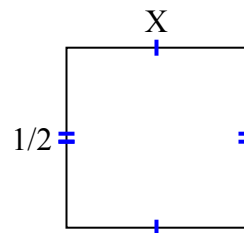
10) diện tích = $\frac{1}{8}$ centimet²



11) diện tích = $\frac{8}{72}$ centimet²



12) diện tích = $\frac{1}{4}$ centimet²



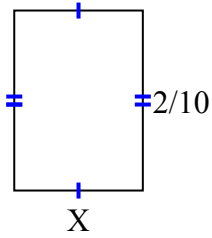
1. _____
2. _____
3. _____
4. _____
5. _____
6. _____
7. _____
8. _____
9. _____
10. _____
11. _____
12. _____



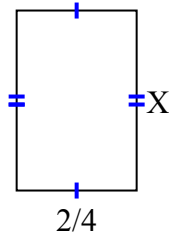
Tìm giá trị của X đối với mỗi hình. Mỗi hình tính bằng cm (cm). Không phải mở rộng quy mô.

Câu trả lời

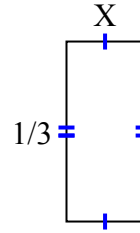
1) diện tích = $\frac{2}{70}$ centimet²



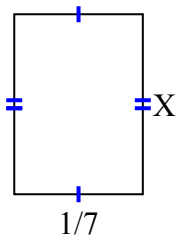
2) diện tích = $\frac{12}{32}$ centimet²



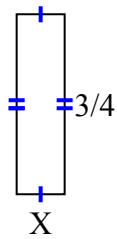
3) diện tích = $\frac{1}{21}$ centimet²



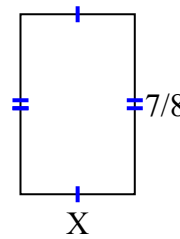
4) diện tích = $\frac{2}{70}$ centimet²



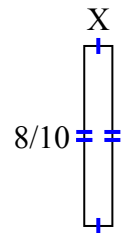
5) diện tích = $\frac{3}{20}$ centimet²



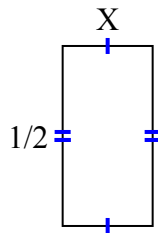
6) diện tích = $\frac{35}{72}$ centimet²



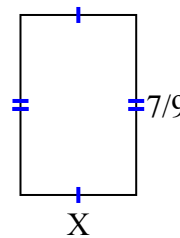
7) diện tích = $\frac{8}{80}$ centimet²



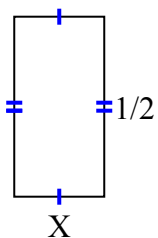
8) diện tích = $\frac{2}{16}$ centimet²



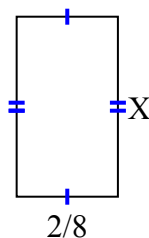
9) diện tích = $\frac{14}{36}$ centimet²



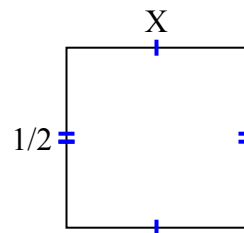
10) diện tích = $\frac{1}{8}$ centimet²



11) diện tích = $\frac{8}{72}$ centimet²



12) diện tích = $\frac{1}{4}$ centimet²



1. $\frac{1}{7}$
2. $\frac{6}{8}$
3. $\frac{1}{7}$
4. $\frac{2}{10}$
5. $\frac{1}{5}$
6. $\frac{5}{9}$
7. $\frac{1}{8}$
8. $\frac{2}{8}$
9. $\frac{2}{4}$
10. $\frac{1}{4}$
11. $\frac{4}{9}$
12. $\frac{1}{2}$