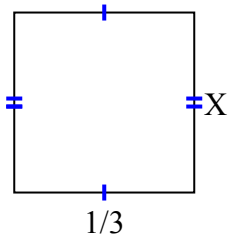




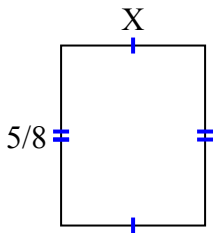
Tìm giá trị của X đối với mỗi hình. Mỗi hình tính bằng cm (cm). Không phải mở rộng quy mô.

Câu trả lời

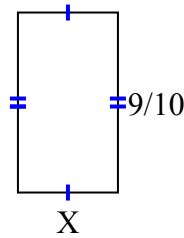
1) diện tích = $\frac{2}{18}$ centimet²



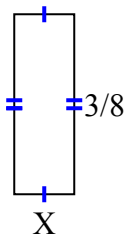
2) diện tích = $\frac{10}{32}$ centimet²



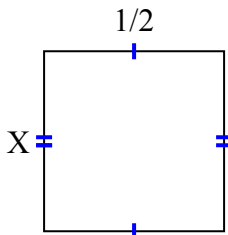
3) diện tích = $\frac{9}{20}$ centimet²



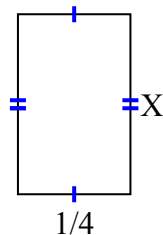
4) diện tích = $\frac{3}{64}$ centimet²



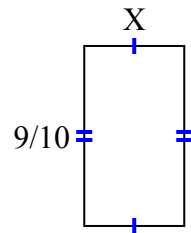
5) diện tích = $\frac{2}{8}$ centimet²



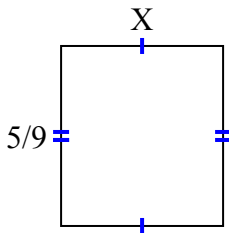
6) diện tích = $\frac{4}{40}$ centimet²



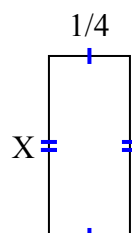
7) diện tích = $\frac{36}{80}$ centimet²



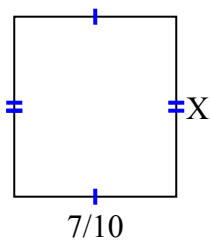
8) diện tích = $\frac{5}{18}$ centimet²



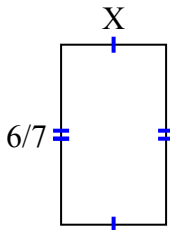
9) diện tích = $\frac{5}{36}$ centimet²



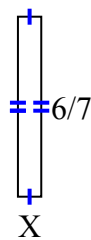
10) diện tích = $\frac{49}{90}$ centimet²



11) diện tích = $\frac{12}{28}$ centimet²



12) diện tích = $\frac{6}{63}$ centimet²



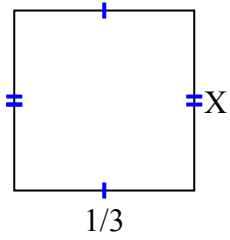
1. _____
2. _____
3. _____
4. _____
5. _____
6. _____
7. _____
8. _____
9. _____
10. _____
11. _____
12. _____



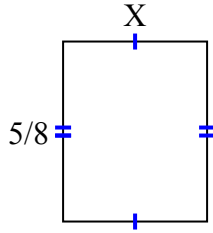
Tìm giá trị của X đối với mỗi hình. Mỗi hình tính bằng cm (cm). Không phải mở rộng quy mô.

Câu trả lời

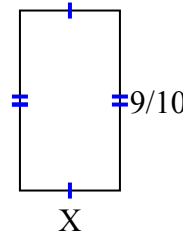
1) diện tích = $\frac{2}{18}$ centimet²



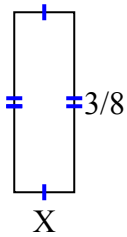
2) diện tích = $\frac{10}{32}$ centimet²



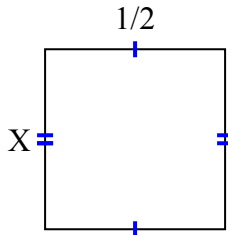
3) diện tích = $\frac{9}{20}$ centimet²



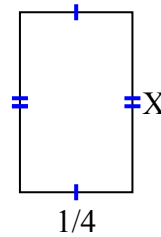
4) diện tích = $\frac{3}{64}$ centimet²



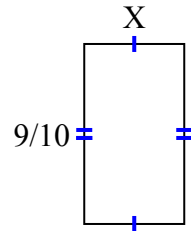
5) diện tích = $\frac{2}{8}$ centimet²



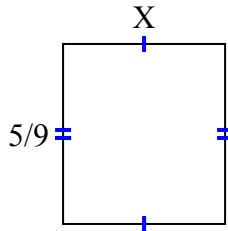
6) diện tích = $\frac{4}{40}$ centimet²



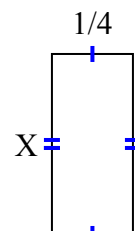
7) diện tích = $\frac{36}{80}$ centimet²



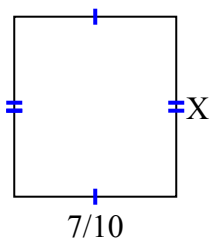
8) diện tích = $\frac{5}{18}$ centimet²



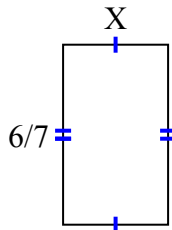
9) diện tích = $\frac{5}{36}$ centimet²



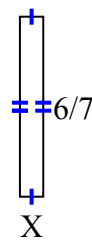
10) diện tích = $\frac{49}{90}$ centimet²



11) diện tích = $\frac{12}{28}$ centimet²



12) diện tích = $\frac{6}{63}$ centimet²



1. $\frac{2}{6}$
2. $\frac{2}{4}$
3. $\frac{1}{2}$
4. $\frac{1}{8}$
5. $\frac{2}{4}$
6. $\frac{4}{10}$
7. $\frac{4}{8}$
8. $\frac{1}{2}$
9. $\frac{5}{9}$
10. $\frac{7}{9}$
11. $\frac{2}{4}$
12. $\frac{1}{9}$