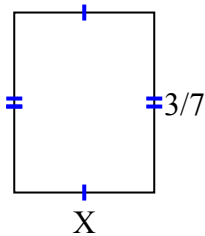




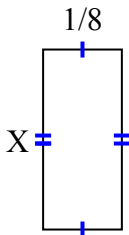
Tìm giá trị của X đối với mỗi hình. Mỗi hình tính bằng cm (cm). Không phải mở rộng quy mô.

Câu trả lời

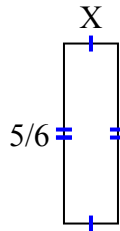
1) diện tích = $\frac{9}{63}$ centimet²



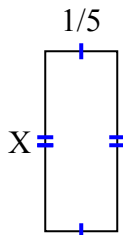
2) diện tích = $\frac{2}{56}$ centimet²



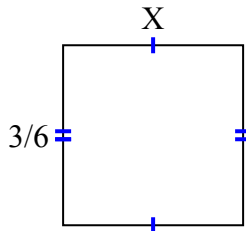
3) diện tích = $\frac{5}{24}$ centimet²



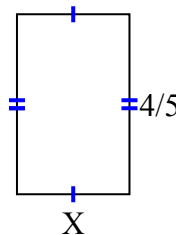
4) diện tích = $\frac{1}{10}$ centimet²



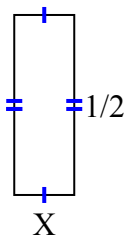
5) diện tích = $\frac{6}{24}$ centimet²



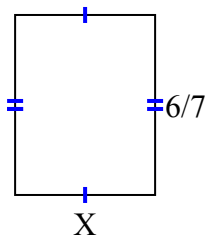
6) diện tích = $\frac{4}{10}$ centimet²



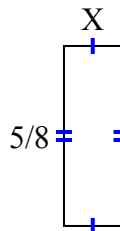
7) diện tích = $\frac{1}{12}$ centimet²



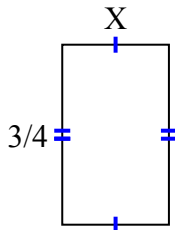
8) diện tích = $\frac{36}{63}$ centimet²



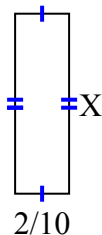
9) diện tích = $\frac{5}{40}$ centimet²



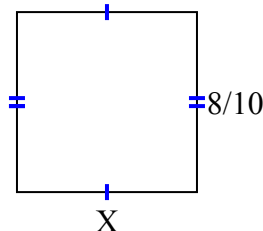
10) diện tích = $\frac{12}{36}$ centimet²



11) diện tích = $\frac{8}{60}$ centimet²



12) diện tích = $\frac{64}{100}$ centimet²



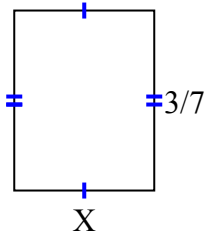
1. _____
2. _____
3. _____
4. _____
5. _____
6. _____
7. _____
8. _____
9. _____
10. _____
11. _____
12. _____



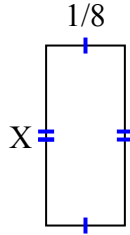
Tìm giá trị của X đối với mỗi hình. Mỗi hình tính bằng cm (cm). Không phải mở rộng quy mô.

Câu trả lời

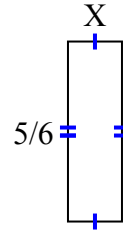
1) diện tích = $\frac{9}{63}$ centimet²



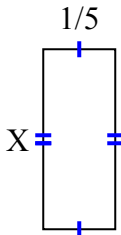
2) diện tích = $\frac{2}{56}$ centimet²



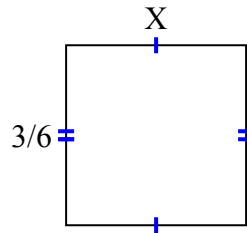
3) diện tích = $\frac{5}{24}$ centimet²



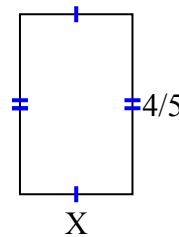
4) diện tích = $\frac{1}{10}$ centimet²



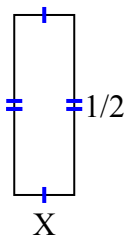
5) diện tích = $\frac{6}{24}$ centimet²



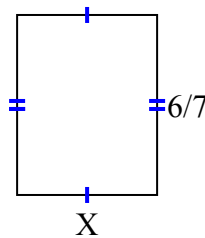
6) diện tích = $\frac{4}{10}$ centimet²



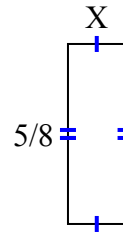
7) diện tích = $\frac{1}{12}$ centimet²



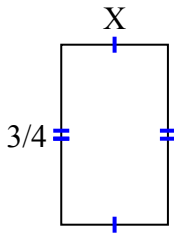
8) diện tích = $\frac{36}{63}$ centimet²



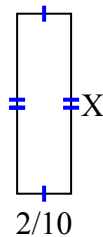
9) diện tích = $\frac{5}{40}$ centimet²



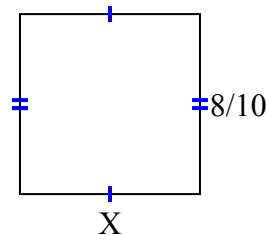
10) diện tích = $\frac{12}{36}$ centimet²



11) diện tích = $\frac{8}{60}$ centimet²



12) diện tích = $\frac{64}{100}$ centimet²



1. $\frac{3}{9}$
2. $\frac{2}{7}$
3. $\frac{1}{4}$
4. $\frac{1}{2}$
5. $\frac{2}{4}$
6. $\frac{1}{2}$
7. $\frac{1}{6}$
8. $\frac{6}{9}$
9. $\frac{1}{5}$
10. $\frac{4}{9}$
11. $\frac{4}{6}$
12. $\frac{8}{10}$