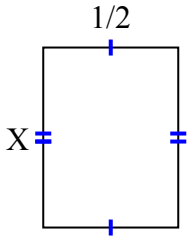




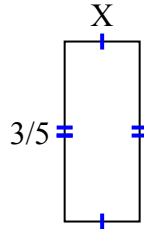
**Tìm giá trị của X đối với mỗi hình. Mỗi hình tính bằng cm (cm). Không phải mở rộng quy mô.**

**Câu trả lời**

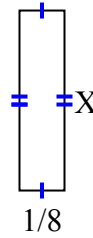
1) diện tích =  $\frac{2}{6}$  centimet<sup>2</sup>



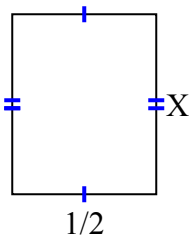
2) diện tích =  $\frac{3}{20}$  centimet<sup>2</sup>



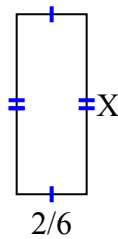
3) diện tích =  $\frac{1}{16}$  centimet<sup>2</sup>



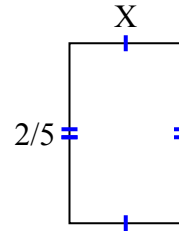
4) diện tích =  $\frac{5}{16}$  centimet<sup>2</sup>



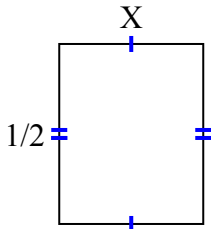
5) diện tích =  $\frac{12}{42}$  centimet<sup>2</sup>



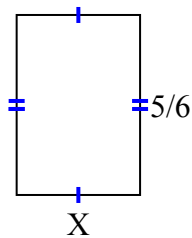
6) diện tích =  $\frac{4}{40}$  centimet<sup>2</sup>



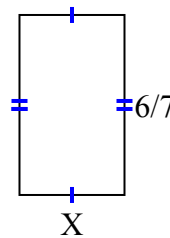
7) diện tích =  $\frac{2}{10}$  centimet<sup>2</sup>



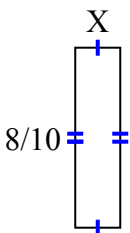
8) diện tích =  $\frac{20}{42}$  centimet<sup>2</sup>



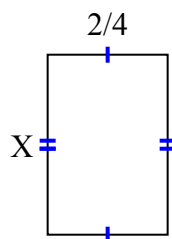
9) diện tích =  $\frac{12}{28}$  centimet<sup>2</sup>



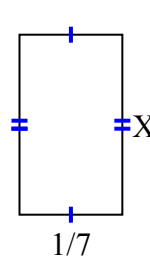
10) diện tích =  $\frac{8}{50}$  centimet<sup>2</sup>



11) diện tích =  $\frac{12}{32}$  centimet<sup>2</sup>



12) diện tích =  $\frac{1}{28}$  centimet<sup>2</sup>

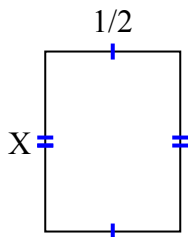


1. \_\_\_\_\_
2. \_\_\_\_\_
3. \_\_\_\_\_
4. \_\_\_\_\_
5. \_\_\_\_\_
6. \_\_\_\_\_
7. \_\_\_\_\_
8. \_\_\_\_\_
9. \_\_\_\_\_
10. \_\_\_\_\_
11. \_\_\_\_\_
12. \_\_\_\_\_

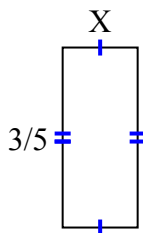


**Tìm giá trị của X đối với mỗi hình. Mỗi hình tính bằng cm (cm). Không phải mở rộng quy mô.**

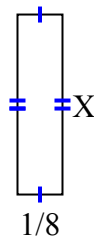
1) diện tích =  $\frac{2}{6}$  centimet<sup>2</sup>



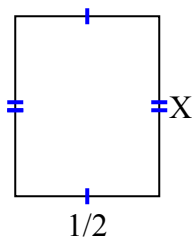
2) diện tích =  $\frac{3}{20}$  centimet<sup>2</sup>



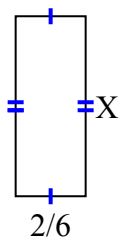
3) diện tích =  $\frac{1}{16}$  centimet<sup>2</sup>



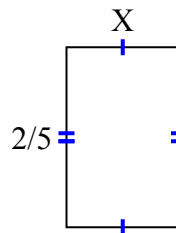
4) diện tích =  $\frac{5}{16}$  centimet<sup>2</sup>



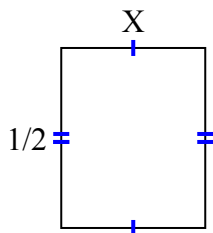
5) diện tích =  $\frac{12}{42}$  centimet<sup>2</sup>



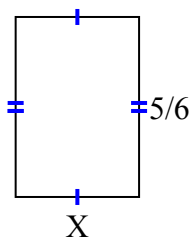
6) diện tích =  $\frac{4}{40}$  centimet<sup>2</sup>



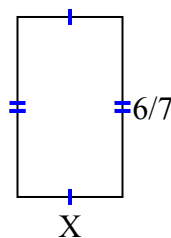
7) diện tích =  $\frac{2}{10}$  centimet<sup>2</sup>



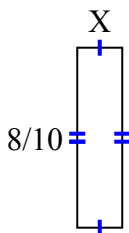
8) diện tích =  $\frac{20}{42}$  centimet<sup>2</sup>



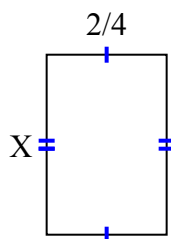
9) diện tích =  $\frac{12}{28}$  centimet<sup>2</sup>



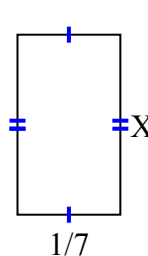
10) diện tích =  $\frac{8}{50}$  centimet<sup>2</sup>



11) diện tích =  $\frac{12}{32}$  centimet<sup>2</sup>



12) diện tích =  $\frac{1}{28}$  centimet<sup>2</sup>



**Câu trả lời**

1.  $\frac{2}{3}$
2.  $\frac{1}{4}$
3.  $\frac{1}{2}$
4.  $\frac{5}{8}$
5.  $\frac{6}{7}$
6.  $\frac{2}{8}$
7.  $\frac{2}{5}$
8.  $\frac{4}{7}$
9.  $\frac{2}{4}$
10.  $\frac{1}{5}$
11.  $\frac{6}{8}$
12.  $\frac{1}{4}$