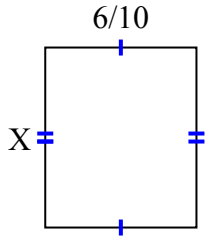




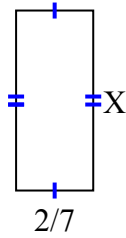
Tìm giá trị của X đối với mỗi hình. Mỗi hình tính bằng cm (cm). Không phải mở rộng quy mô.

Câu trả lời

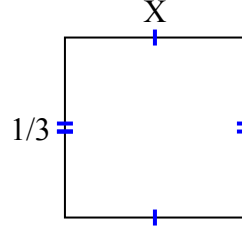
1) diện tích = $\frac{30}{70}$ centimet²



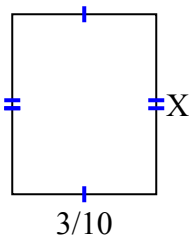
2) diện tích = $\frac{4}{21}$ centimet²



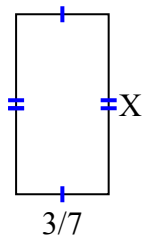
3) diện tích = $\frac{1}{9}$ centimet²



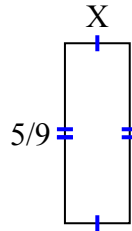
4) diện tích = $\frac{9}{80}$ centimet²



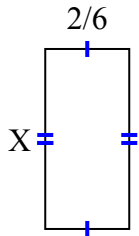
5) diện tích = $\frac{15}{42}$ centimet²



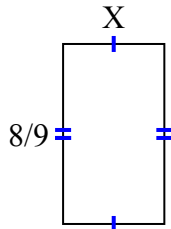
6) diện tích = $\frac{5}{45}$ centimet²



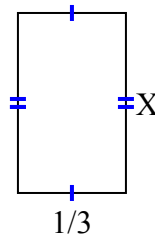
7) diện tích = $\frac{10}{42}$ centimet²



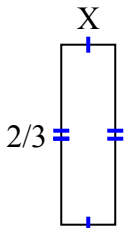
8) diện tích = $\frac{40}{90}$ centimet²



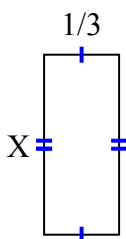
9) diện tích = $\frac{5}{27}$ centimet²



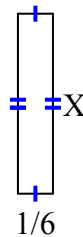
10) diện tích = $\frac{2}{15}$ centimet²



11) diện tích = $\frac{4}{15}$ centimet²



12) diện tích = $\frac{6}{42}$ centimet²



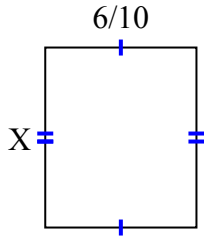
1. _____
2. _____
3. _____
4. _____
5. _____
6. _____
7. _____
8. _____
9. _____
10. _____
11. _____
12. _____



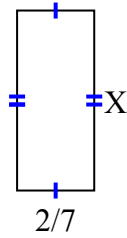
Tìm giá trị của X đối với mỗi hình. Mỗi hình tính bằng cm (cm). Không phải mở rộng quy mô.

Câu trả lời

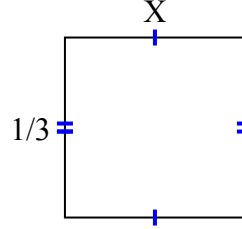
1) diện tích = $\frac{30}{70}$ centimet²



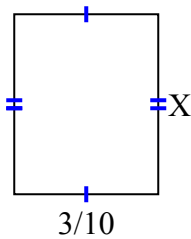
2) diện tích = $\frac{4}{21}$ centimet²



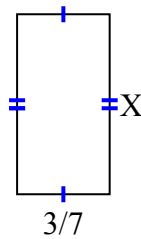
3) diện tích = $\frac{1}{9}$ centimet²



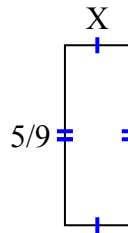
4) diện tích = $\frac{9}{80}$ centimet²



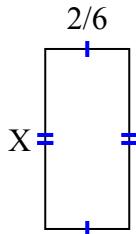
5) diện tích = $\frac{15}{42}$ centimet²



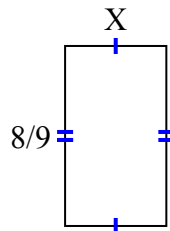
6) diện tích = $\frac{5}{45}$ centimet²



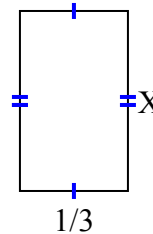
7) diện tích = $\frac{10}{42}$ centimet²



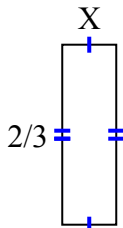
8) diện tích = $\frac{40}{90}$ centimet²



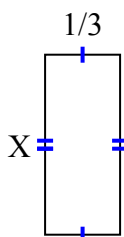
9) diện tích = $\frac{5}{27}$ centimet²



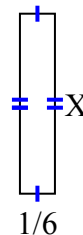
10) diện tích = $\frac{2}{15}$ centimet²



11) diện tích = $\frac{4}{15}$ centimet²



12) diện tích = $\frac{6}{42}$ centimet²



1. $\frac{5}{7}$
2. $\frac{2}{3}$
3. $\frac{1}{3}$
4. $\frac{3}{8}$
5. $\frac{5}{6}$
6. $\frac{1}{5}$
7. $\frac{5}{7}$
8. $\frac{5}{10}$
9. $\frac{5}{9}$
10. $\frac{1}{5}$
11. $\frac{4}{5}$
12. $\frac{6}{7}$