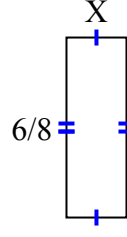
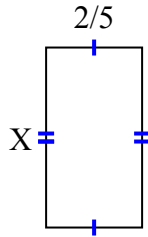
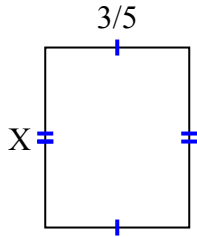




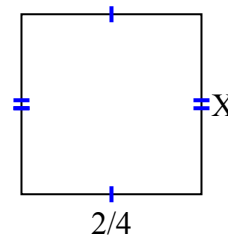
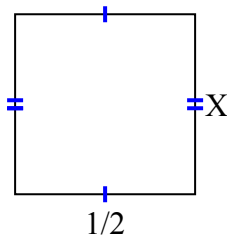
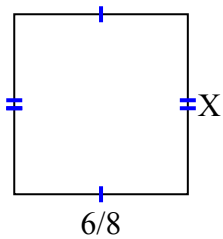
Tìm giá trị của X đối với mỗi hình. Mỗi hình tính bằng cm (cm). Không phải mở rộng quy mô.

Câu trả lời

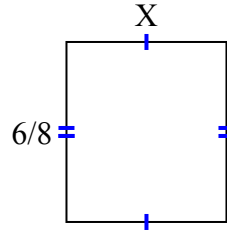
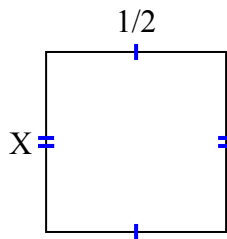
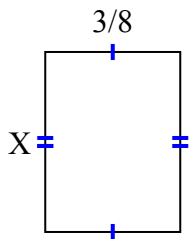
- 1) diện tích = $\frac{18}{40}$ centimet² 2) diện tích = $\frac{6}{20}$ centimet² 3) diện tích = $\frac{6}{32}$ centimet²



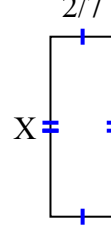
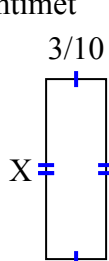
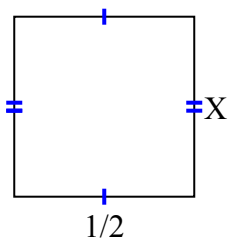
- 4) diện tích = $\frac{42}{72}$ centimet² 5) diện tích = $\frac{5}{20}$ centimet² 6) diện tích = $\frac{6}{24}$ centimet²



- 7) diện tích = $\frac{3}{16}$ centimet² 8) diện tích = $\frac{2}{8}$ centimet² 9) diện tích = $\frac{12}{24}$ centimet²



- 10) diện tích = $\frac{1}{4}$ centimet² 11) diện tích = $\frac{27}{100}$ centimet² 12) diện tích = $\frac{16}{70}$ centimet²



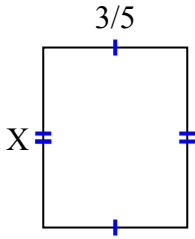
1. _____
2. _____
3. _____
4. _____
5. _____
6. _____
7. _____
8. _____
9. _____
10. _____
11. _____
12. _____



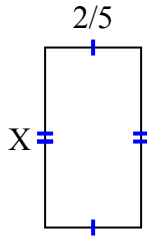
Tìm giá trị của X đối với mỗi hình. Mỗi hình tính bằng cm (cm). Không phải mở rộng quy mô.

Câu trả lời

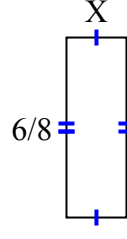
1) diện tích = $\frac{18}{40}$ centimet²



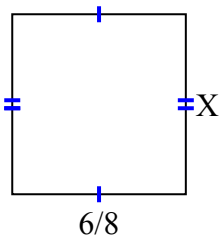
2) diện tích = $\frac{6}{20}$ centimet²



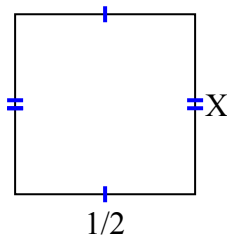
3) diện tích = $\frac{6}{32}$ centimet²



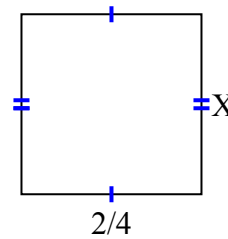
4) diện tích = $\frac{42}{72}$ centimet²



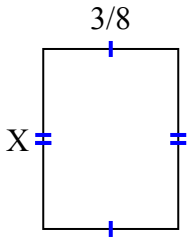
5) diện tích = $\frac{5}{20}$ centimet²



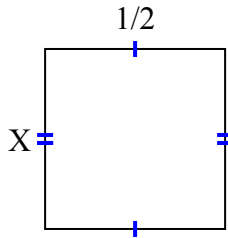
6) diện tích = $\frac{6}{24}$ centimet²



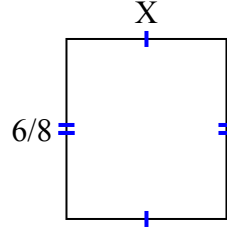
7) diện tích = $\frac{3}{16}$ centimet²



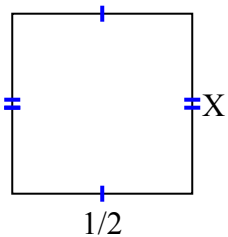
8) diện tích = $\frac{2}{8}$ centimet²



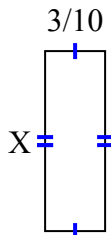
9) diện tích = $\frac{12}{24}$ centimet²



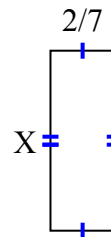
10) diện tích = $\frac{1}{4}$ centimet²



11) diện tích = $\frac{27}{100}$ centimet²



12) diện tích = $\frac{16}{70}$ centimet²



1. $\frac{6}{8}$

2. $\frac{3}{4}$

3. $\frac{1}{4}$

4. $\frac{7}{9}$

5. $\frac{5}{10}$

6. $\frac{3}{6}$

7. $\frac{1}{2}$

8. $\frac{2}{4}$

9. $\frac{2}{3}$

10. $\frac{1}{2}$

11. $\frac{9}{10}$

12. $\frac{8}{10}$