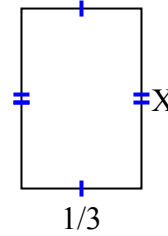
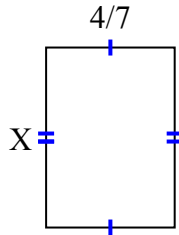
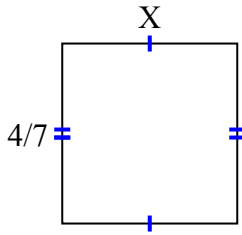




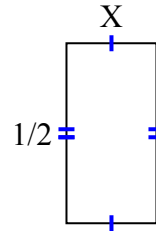
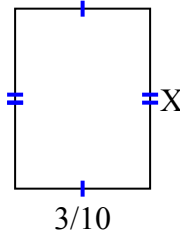
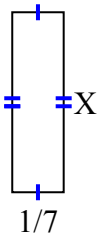
**Tìm giá trị của X đối với mỗi hình. Mỗi hình tính bằng cm (cm). Không phải mở rộng quy mô.**

**Câu trả lời**

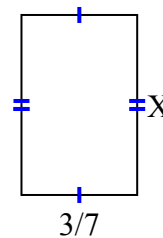
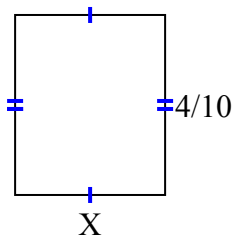
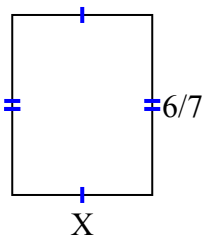
- 1) diện tích =  $\frac{20}{63}$  centimet<sup>2</sup>    2) diện tích =  $\frac{16}{35}$  centimet<sup>2</sup>    3) diện tích =  $\frac{1}{6}$  centimet<sup>2</sup>



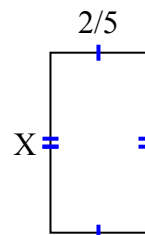
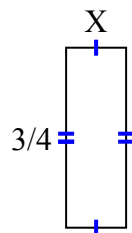
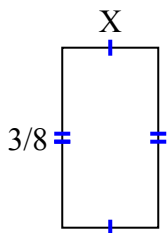
- 4) diện tích =  $\frac{2}{28}$  centimet<sup>2</sup>    5) diện tích =  $\frac{12}{100}$  centimet<sup>2</sup>    6) diện tích =  $\frac{1}{8}$  centimet<sup>2</sup>



- 7) diện tích =  $\frac{36}{63}$  centimet<sup>2</sup>    8) diện tích =  $\frac{4}{30}$  centimet<sup>2</sup>    9) diện tích =  $\frac{12}{42}$  centimet<sup>2</sup>



- 10) diện tích =  $\frac{3}{40}$  centimet<sup>2</sup>    11) diện tích =  $\frac{6}{32}$  centimet<sup>2</sup>    12) diện tích =  $\frac{12}{40}$  centimet<sup>2</sup>



1. \_\_\_\_\_
2. \_\_\_\_\_
3. \_\_\_\_\_
4. \_\_\_\_\_
5. \_\_\_\_\_
6. \_\_\_\_\_
7. \_\_\_\_\_
8. \_\_\_\_\_
9. \_\_\_\_\_
10. \_\_\_\_\_
11. \_\_\_\_\_
12. \_\_\_\_\_

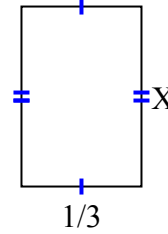
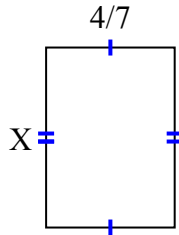
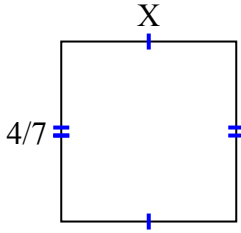


**Tìm giá trị của X đối với mỗi hình. Mỗi hình tính bằng cm (cm). Không phải mở rộng quy mô.**

**Câu trả lời**

- 1) diện tích =  $\frac{20}{63}$  centimet<sup>2</sup>    2) diện tích =  $\frac{16}{35}$  centimet<sup>2</sup>    3) diện tích =  $\frac{1}{6}$  centimet<sup>2</sup>

1.            $\frac{5}{9}$           



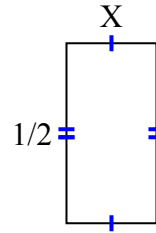
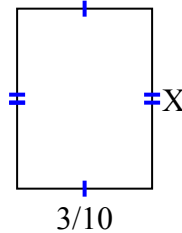
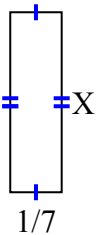
2.            $\frac{4}{5}$           

- 4) diện tích =  $\frac{2}{28}$  centimet<sup>2</sup>    5) diện tích =  $\frac{12}{100}$  centimet<sup>2</sup>    6) diện tích =  $\frac{1}{8}$  centimet<sup>2</sup>

3.            $\frac{1}{2}$           

4.            $\frac{2}{4}$           

5.            $\frac{4}{10}$           



6.            $\frac{1}{4}$           

7.            $\frac{6}{9}$           

8.            $\frac{1}{3}$           

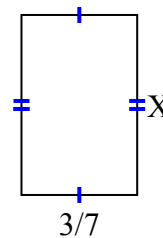
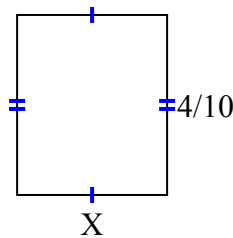
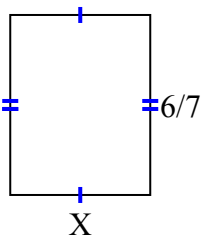
9.            $\frac{4}{6}$           

- 7) diện tích =  $\frac{36}{63}$  centimet<sup>2</sup>    8) diện tích =  $\frac{4}{30}$  centimet<sup>2</sup>    9) diện tích =  $\frac{12}{42}$  centimet<sup>2</sup>

10.            $\frac{1}{5}$           

11.            $\frac{2}{8}$           

12.            $\frac{6}{8}$           



- 10) diện tích =  $\frac{3}{40}$  centimet<sup>2</sup>    11) diện tích =  $\frac{6}{32}$  centimet<sup>2</sup>    12) diện tích =  $\frac{12}{40}$  centimet<sup>2</sup>

