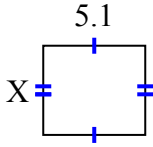




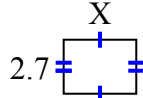
**Tìm giá trị của X đối với mỗi hình. Mỗi hình tính bằng cm (cm). Không phải mở rộng quy mô.**

**Câu trả lời**

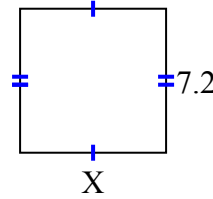
1) diện tích = 22,746 centimet<sup>2</sup>



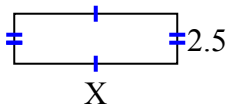
2) diện tích = 9,801 centimet<sup>2</sup>



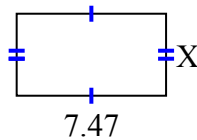
3) diện tích = 52,56 centimet<sup>2</sup>



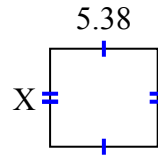
4) diện tích = 20,375 centimet<sup>2</sup>



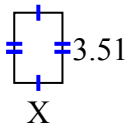
5) diện tích = 30,627 centimet<sup>2</sup>



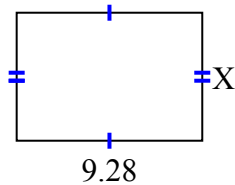
6) diện tích = 26,362 centimet<sup>2</sup>



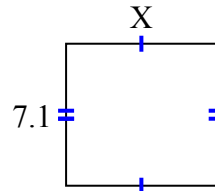
7) diện tích = 8,4591 centimet<sup>2</sup>



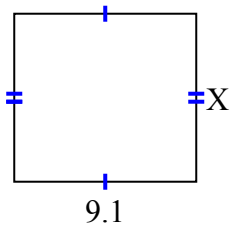
8) diện tích = 59,392 centimet<sup>2</sup>



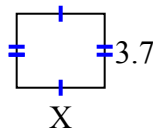
9) diện tích = 53,463 centimet<sup>2</sup>



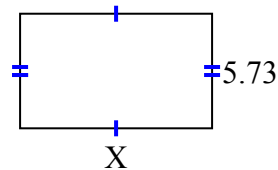
10) diện tích = 76,44 centimet<sup>2</sup>




11) diện tích = 16,28 centimet<sup>2</sup>



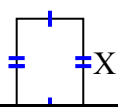
12) diện tích = 55,008 centimet<sup>2</sup>



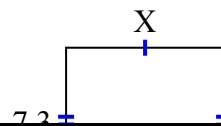
13) diện tích = 15,893 centimet<sup>2</sup>



14) diện tích = 14,4522 centimet<sup>2</sup>



15) diện tích = 57,67 centimet<sup>2</sup>



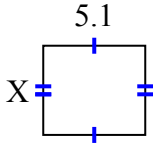
1. \_\_\_\_\_
2. \_\_\_\_\_
3. \_\_\_\_\_
4. \_\_\_\_\_
5. \_\_\_\_\_
6. \_\_\_\_\_
7. \_\_\_\_\_
8. \_\_\_\_\_
9. \_\_\_\_\_
10. \_\_\_\_\_
11. \_\_\_\_\_
12. \_\_\_\_\_
13. \_\_\_\_\_
14. \_\_\_\_\_
15. \_\_\_\_\_



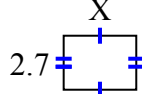
**Tìm giá trị của X đối với mỗi hình. Mỗi hình tính bằng cm (cm). Không phải mở rộng quy mô.**

**Câu trả lời**

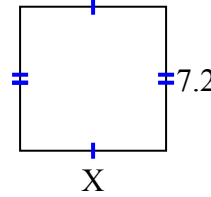
1) diện tích = 22,746 centimet<sup>2</sup>



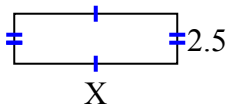
2) diện tích = 9,801 centimet<sup>2</sup>



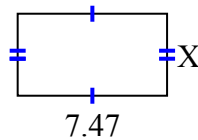
3) diện tích = 52,56 centimet<sup>2</sup>



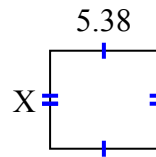
4) diện tích = 20,375 centimet<sup>2</sup>



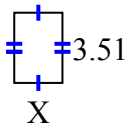
5) diện tích = 30,627 centimet<sup>2</sup>



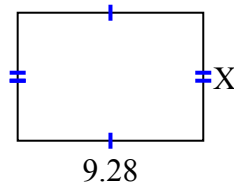
6) diện tích = 26,362 centimet<sup>2</sup>



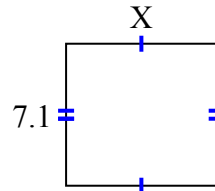
7) diện tích = 8,4591 centimet<sup>2</sup>



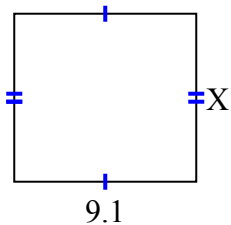
8) diện tích = 59,392 centimet<sup>2</sup>



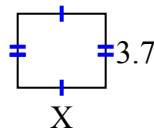
9) diện tích = 53,463 centimet<sup>2</sup>



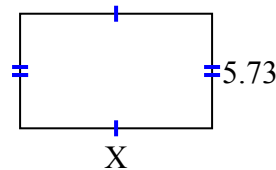
10) diện tích = 76,44 centimet<sup>2</sup>




11) diện tích = 16,28 centimet<sup>2</sup>



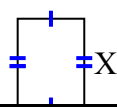
12) diện tích = 55,008 centimet<sup>2</sup>



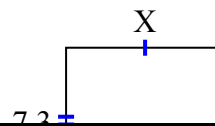
13) diện tích = 15,893 centimet<sup>2</sup>



14) diện tích = 14,4522 centimet<sup>2</sup>



15) diện tích = 57,67 centimet<sup>2</sup>



1. 4.46
2. 3.63
3. 7.3
4. 8.15
5. 4.1
6. 4.9
7. 2.41
8. 6.4
9. 7.53
10. 8.4
11. 4.4
12. 9.6
13. 2.3
14. 4.34
15. 7.9