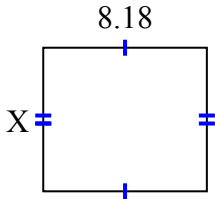




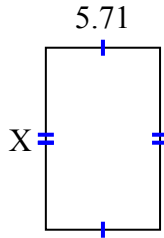
Tìm giá trị của X đối với mỗi hình. Mỗi hình tính bằng cm (cm). Không phải mở rộng quy mô.

Câu trả lời

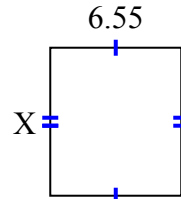
1) diện tích = 58,7324 centimet²



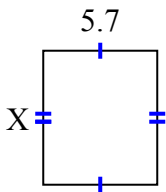
2) diện tích = 51,961 centimet²



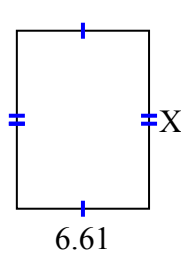
3) diện tích = 48,47 centimet²



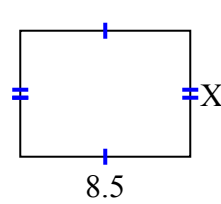
4) diện tích = 38,19 centimet²



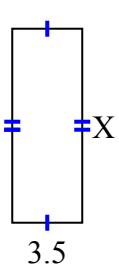
5) diện tích = 58,829 centimet²



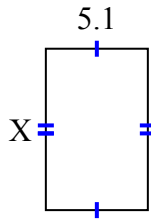
6) diện tích = 53,55 centimet²



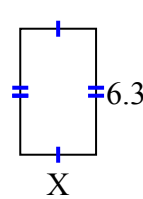
7) diện tích = 33,95 centimet²



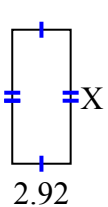
8) diện tích = 41,157 centimet²



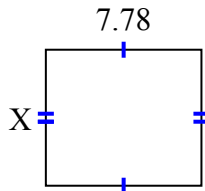
9) diện tích = 23,877 centimet²



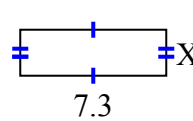
10) diện tích = 19,564 centimet²



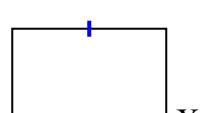
11) diện tích = 52,904 centimet²



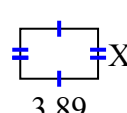
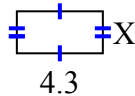
12) diện tích = 16,79 centimet²



13) diện tích = 69,762 centimet²



14) diện tích = 9,03 centimet² 15) diện tích = 9,725 centimet²



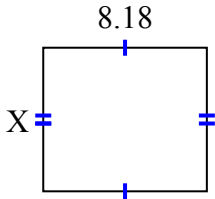
1. _____
2. _____
3. _____
4. _____
5. _____
6. _____
7. _____
8. _____
9. _____
10. _____
11. _____
12. _____
13. _____
14. _____
15. _____



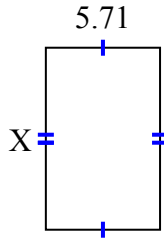
Tìm giá trị của X đối với mỗi hình. Mỗi hình tính bằng cm (cm). Không phải mở rộng quy mô.

Câu trả lời

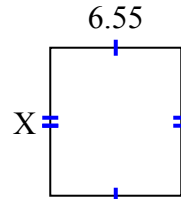
1) diện tích = 58,7324 centimet²



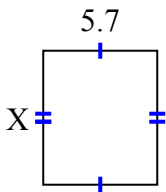
2) diện tích = 51,961 centimet²



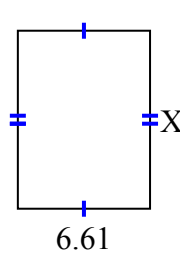
3) diện tích = 48,47 centimet²



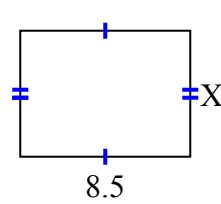
4) diện tích = 38,19 centimet²



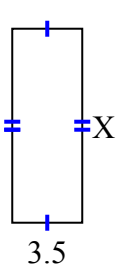
5) diện tích = 58,829 centimet²



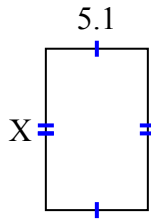
6) diện tích = 53,55 centimet²



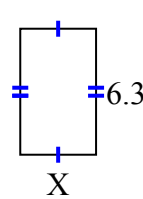
7) diện tích = 33,95 centimet²



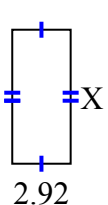
8) diện tích = 41,157 centimet²



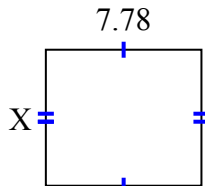
9) diện tích = 23,877 centimet²



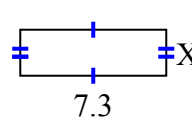
10) diện tích = 19,564 centimet²



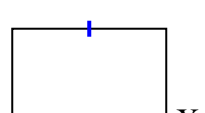
11) diện tích = 52,904 centimet²



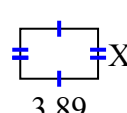
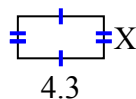
12) diện tích = 16,79 centimet²



13) diện tích = 69,762 centimet²



14) diện tích = 9,03 centimet² 15) diện tích = 9,725 centimet²



1. **7.18**

2. **9.1**

3. **7.4**

4. **6.7**

5. **8.9**

6. **6.3**

7. **9.7**

8. **8.07**

9. **3.79**

10. **6.7**

11. **6.8**

12. **2.3**

13. **9.06**

14. **2.1**

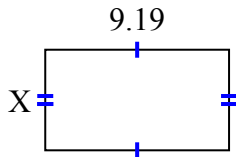
15. **2.5**



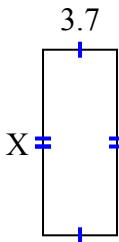
Tìm giá trị của X đối với mỗi hình. Mỗi hình tính bằng cm (cm). Không phải mở rộng quy mô.

Câu trả lời

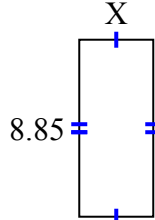
1) diện tích = 46,2257 centimet²



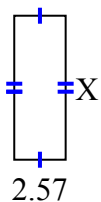
2) diện tích = 34,336 centimet²



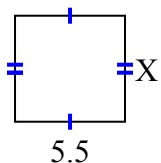
3) diện tích = 32,745 centimet²



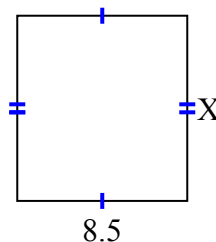
4) diện tích = 18,504 centimet²



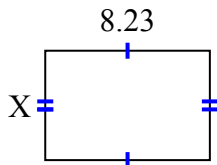
5) diện tích = 29,15 centimet²



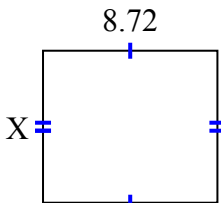
6) diện tích = 78,71 centimet²



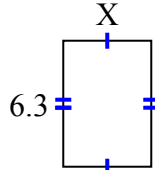
7) diện tích = 45,0181 centimet²



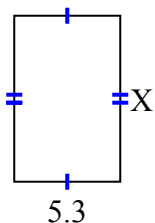
8) diện tích = 66,272 centimet²



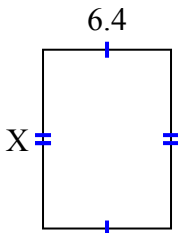
9) diện tích = 27,72 centimet²



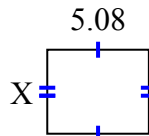
10) diện tích = 43,99 centimet²



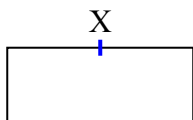
11) diện tích = 57,216 centimet²



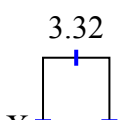
12) diện tích = 21,336 centimet²



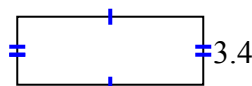
13) diện tích = 87,141 centimet²



14) diện tích = 22,41 centimet²



15) diện tích = 31,62 centimet²



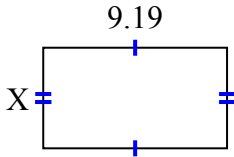
1. _____
2. _____
3. _____
4. _____
5. _____
6. _____
7. _____
8. _____
9. _____
10. _____
11. _____
12. _____
13. _____
14. _____
15. _____



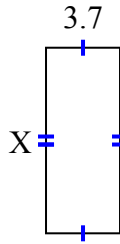
Tìm giá trị của X đối với mỗi hình. Mỗi hình tính bằng cm (cm). Không phải mở rộng quy mô.

Câu trả lời

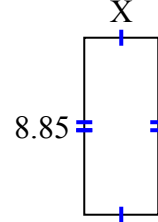
1) diện tích = 46,2257 centimet²



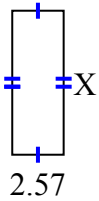
2) diện tích = 34,336 centimet²



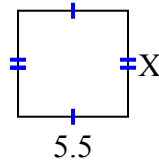
3) diện tích = 32,745 centimet²



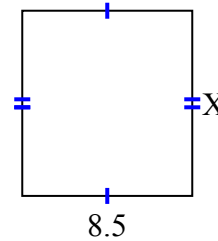
4) diện tích = 18,504 centimet²



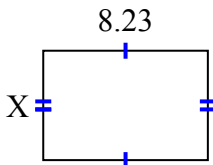
5) diện tích = 29,15 centimet²



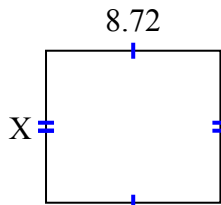
6) diện tích = 78,71 centimet²



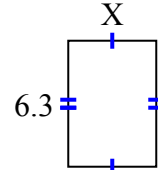
7) diện tích = 45,0181 centimet²



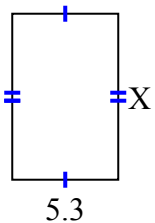
8) diện tích = 66,272 centimet²



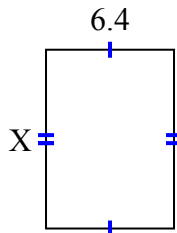
9) diện tích = 27,72 centimet²



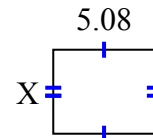
10) diện tích = 43,99 centimet²



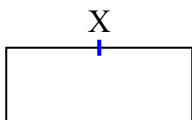
11) diện tích = 57,216 centimet²



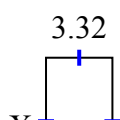
12) diện tích = 21,336 centimet²



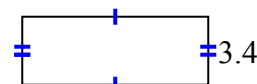
13) diện tích = 87,141 centimet²



14) diện tích = 22,41 centimet²



15) diện tích = 31,62 centimet²



1. **5.03**

2. **9.28**

3. **3.7**

4. **7.2**

5. **5.3**

6. **9.26**

7. **5.47**

8. **7.6**

9. **4.4**

10. **8.3**

11. **8.94**

12. **4.2**

13. **9.3**

14. **6.75**

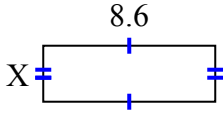
15. **9.3**



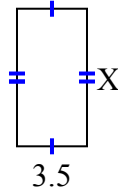
Tìm giá trị của X đối với mỗi hình. Mỗi hình tính bằng cm (cm). Không phải mở rộng quy mô.

Câu trả lời

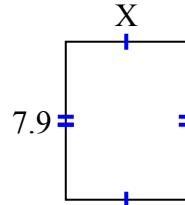
1) diện tích = 24,08 centimet²



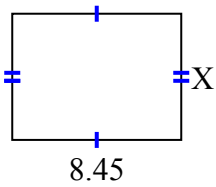
2) diện tích = 24,08 centimet²



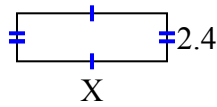
3) diện tích = 47,795 centimet²



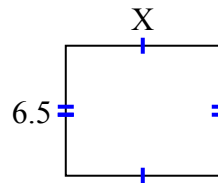
4) diện tích = 53,3195 centimet²



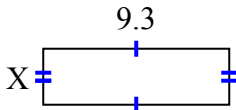
5) diện tích = 18 centimet²



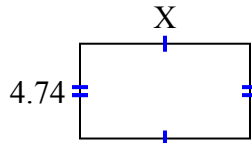
6) diện tích = 50,05 centimet²



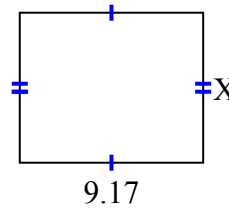
7) diện tích = 26,04 centimet²



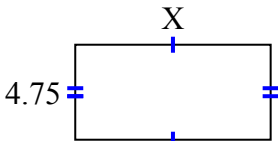
8) diện tích = 40,29 centimet²



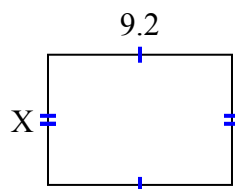
9) diện tích = 68,775 centimet²



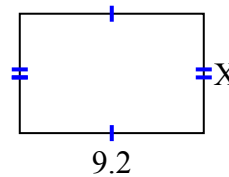
10) diện tích = 46,4075 centimet²



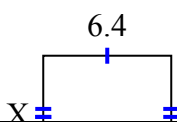
11) diện tích = 59,892 centimet²



12) diện tích = 54,924 centimet²



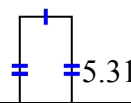
13) diện tích = 36,608 centimet²



14) diện tích = 22,241 centimet²



15) diện tích = 13,806 centimet²



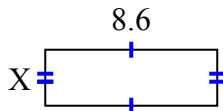
1. _____
2. _____
3. _____
4. _____
5. _____
6. _____
7. _____
8. _____
9. _____
10. _____
11. _____
12. _____
13. _____
14. _____
15. _____



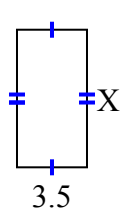
Tìm giá trị của X đối với mỗi hình. Mỗi hình tính bằng cm (cm). Không phải mở rộng quy mô.

Câu trả lời

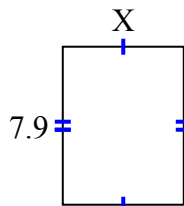
1) diện tích = 24,08 centimet²



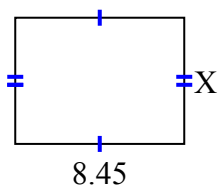
2) diện tích = 24,08 centimet²



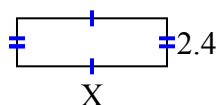
3) diện tích = 47,795 centimet²



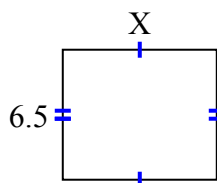
4) diện tích = 53,3195 centimet²



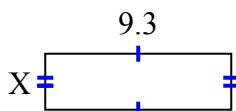
5) diện tích = 18 centimet²



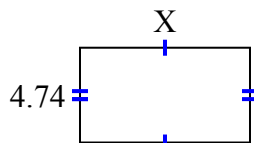
6) diện tích = 50,05 centimet²



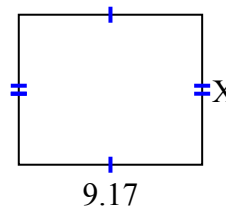
7) diện tích = 26,04 centimet²



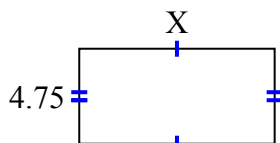
8) diện tích = 40,29 centimet²



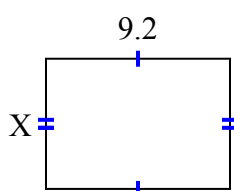
9) diện tích = 68,775 centimet²



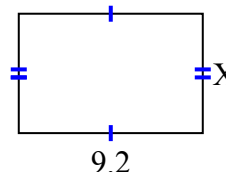
10) diện tích = 46,4075 centimet²



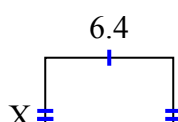
11) diện tích = 59,892 centimet²



12) diện tích = 54,924 centimet²



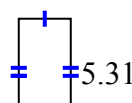
13) diện tích = 36,608 centimet²



14) diện tích = 22,241 centimet²



15) diện tích = 13,806 centimet²



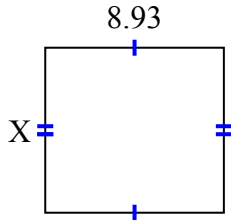
1. 2.8
2. 6.88
3. 6.05
4. 6.31
5. 7.5
6. 7.7
7. 2.8
8. 8.5
9. 7.5
10. 9.77
11. 6.51
12. 5.97
13. 5.72
14. 2.3
15. 2.6



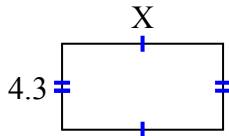
Tìm giá trị của X đối với mỗi hình. Mỗi hình tính bằng cm (cm). Không phải mở rộng quy mô.

Câu trả lời

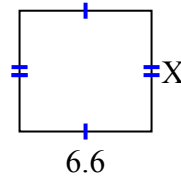
1) diện tích = 73,6725 centimet²



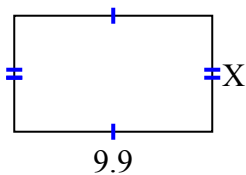
2) diện tích = 34,615 centimet²



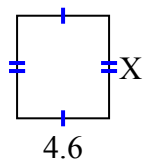
3) diện tích = 39,864 centimet²



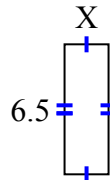
4) diện tích = 57,42 centimet²



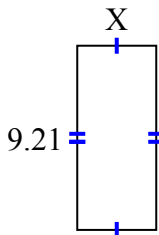
5) diện tích = 23,598 centimet²



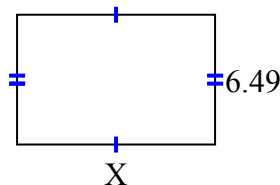
6) diện tích = 14,3 centimet²



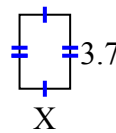
7) diện tích = 36,3795 centimet²



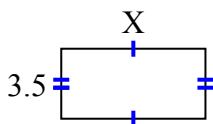
8) diện tích = 64,251 centimet²



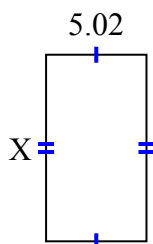
9) diện tích = 9,361 centimet²



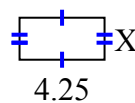
10) diện tích = 25,235 centimet²



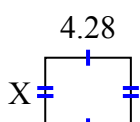
11) diện tích = 46,8366 centimet²



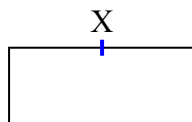
12) diện tích = 8,925 centimet²



13) diện tích = 14,6804 centimet²



14) diện tích = 79,98 centimet²



15) diện tích = 25,996 centimet²



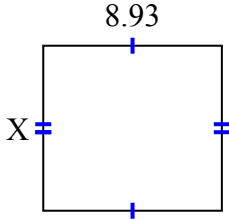
1. _____
2. _____
3. _____
4. _____
5. _____
6. _____
7. _____
8. _____
9. _____
10. _____
11. _____
12. _____
13. _____
14. _____
15. _____



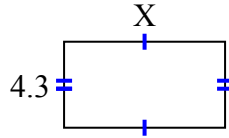
Tìm giá trị của X đối với mỗi hình. Mỗi hình tính bằng cm (cm). Không phải mở rộng quy mô.

Câu trả lời

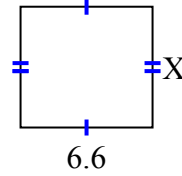
1) diện tích = 73,6725 centimet²



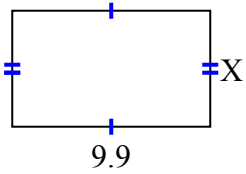
2) diện tích = 34,615 centimet²



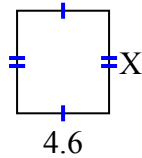
3) diện tích = 39,864 centimet²



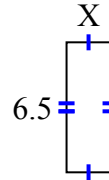
4) diện tích = 57,42 centimet²



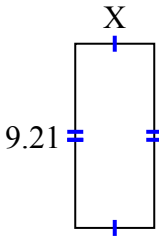
5) diện tích = 23,598 centimet²



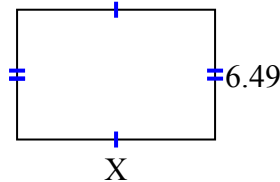
6) diện tích = 14,3 centimet²



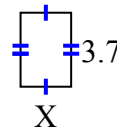
7) diện tích = 36,3795 centimet²



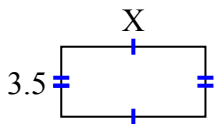
8) diện tích = 64,251 centimet²



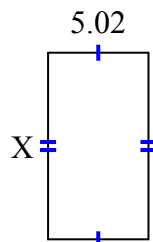
9) diện tích = 9,361 centimet²



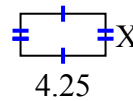
10) diện tích = 25,235 centimet²



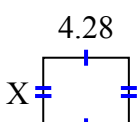
11) diện tích = 46,8366 centimet²



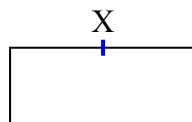
12) diện tích = 8,925 centimet²



13) diện tích = 14,6804 centimet²



14) diện tích = 79,98 centimet²



15) diện tích = 25,996 centimet²



1. 8.25

2. 8.05

3. 6.04

4. 5.8

5. 5.13

6. 2.2

7. 3.95

8. 9.9

9. 2.53

10. 7.21

11. 9.33

12. 2.1

13. 3.43

14. 9.3

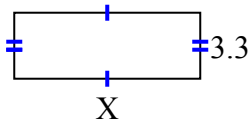
15. 9.7



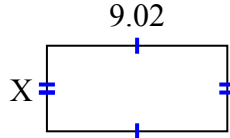
Tìm giá trị của X đối với mỗi hình. Mỗi hình tính bằng cm (cm). Không phải mở rộng quy mô.

Câu trả lời

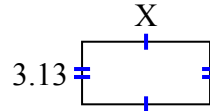
1) diện tích = 30,69 centimet²



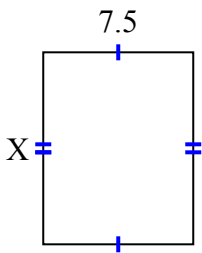
2) diện tích = 38,6056 centimet²



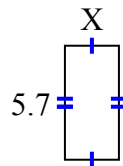
3) diện tích = 20,032 centimet²



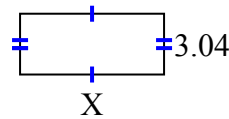
4) diện tích = 72 centimet²



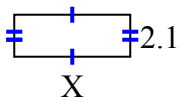
5) diện tích = 15,39 centimet²



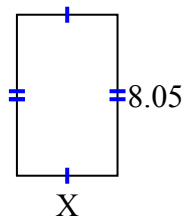
6) diện tích = 21,888 centimet²



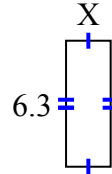
7) diện tích = 12,18 centimet²



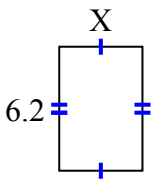
8) diện tích = 40,4915 centimet²



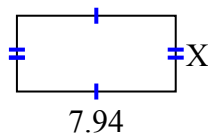
9) diện tích = 14,049 centimet²



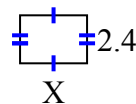
10) diện tích = 25,792 centimet²



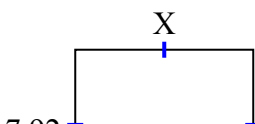
11) diện tích = 30,0926 centimet²



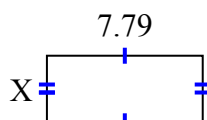
12) diện tích = 8,04 centimet²



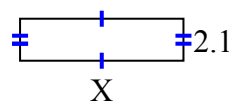
13) diện tích = 70,488 centimet²



14) diện tích = 25,5512 centimet²



15) diện tích = 17,157 centimet²



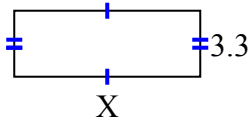
1. _____
2. _____
3. _____
4. _____
5. _____
6. _____
7. _____
8. _____
9. _____
10. _____
11. _____
12. _____
13. _____
14. _____
15. _____



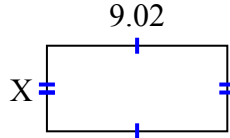
Tìm giá trị của X đối với mỗi hình. Mỗi hình tính bằng cm (cm). Không phải mở rộng quy mô.

Câu trả lời

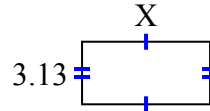
1) diện tích = 30,69 centimet²



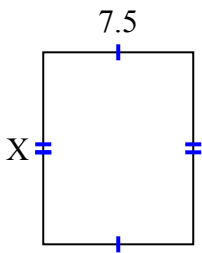
2) diện tích = 38,6056 centimet²



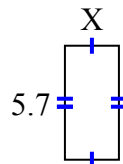
3) diện tích = 20,032 centimet²



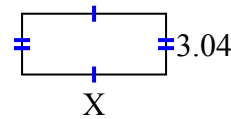
4) diện tích = 72 centimet²



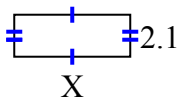
5) diện tích = 15,39 centimet²



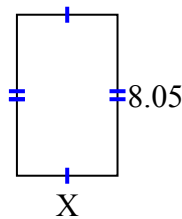
6) diện tích = 21,888 centimet²



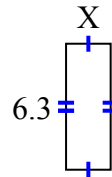
7) diện tích = 12,18 centimet²



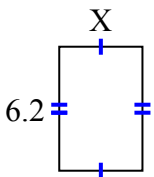
8) diện tích = 40,4915 centimet²



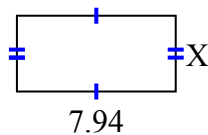
9) diện tích = 14,049 centimet²



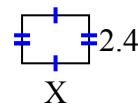
10) diện tích = 25,792 centimet²



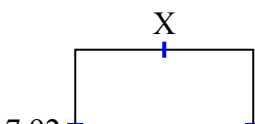
11) diện tích = 30,0926 centimet²



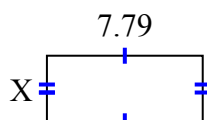
12) diện tích = 8,04 centimet²



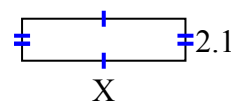
13) diện tích = 70,488 centimet²



14) diện tích = 25,5512 centimet²



15) diện tích = 17,157 centimet²



1. **9.3**

2. **4.28**

3. **6.4**

4. **9.6**

5. **2.7**

6. **7.2**

7. **5.8**

8. **5.03**

9. **2.23**

10. **4.16**

11. **3.79**

12. **3.35**

13. **8.9**

14. **3.28**

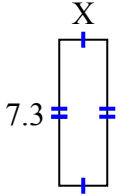
15. **8.17**



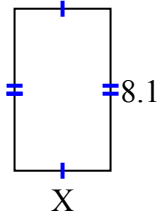
Tìm giá trị của X đối với mỗi hình. Mỗi hình tính bằng cm (cm). Không phải mở rộng quy mô.

Câu trả lời

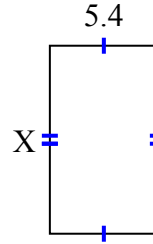
1) diện tích = 17,52 centimet²



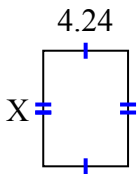
2) diện tích = 38,88 centimet²



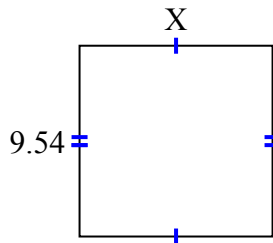
3) diện tích = 50,76 centimet²



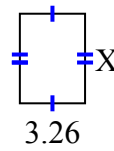
4) diện tích = 24,5072 centimet²



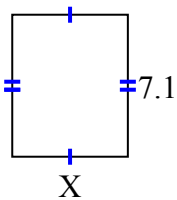
5) diện tích = 92,061 centimet²



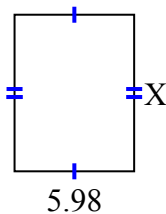
6) diện tích = 14,6048 centimet²



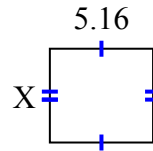
7) diện tích = 41,038 centimet²



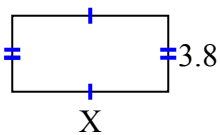
8) diện tích = 46,8234 centimet²



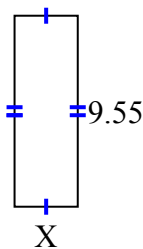
9) diện tích = 24,2004 centimet²



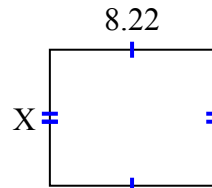
10) diện tích = 29,64 centimet²



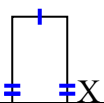
11) diện tích = 30,178 centimet²



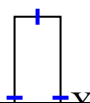
12) diện tích = 55,896 centimet²



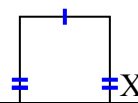
13) diện tích = 20,075 centimet²



14) diện tích = 19,55 centimet²



15) diện tích = 30,15 centimet²



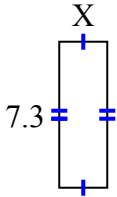
1. _____
2. _____
3. _____
4. _____
5. _____
6. _____
7. _____
8. _____
9. _____
10. _____
11. _____
12. _____
13. _____
14. _____
15. _____



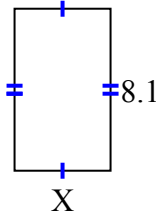
Tìm giá trị của X đối với mỗi hình. Mỗi hình tính bằng cm (cm). Không phải mở rộng quy mô.

Câu trả lời

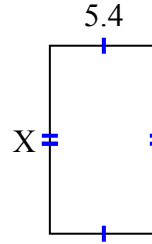
1) diện tích = 17,52 centimet²



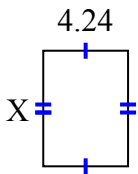
2) diện tích = 38,88 centimet²



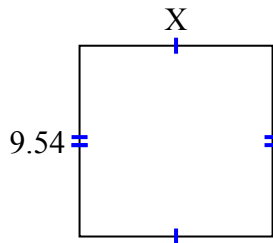
3) diện tích = 50,76 centimet²



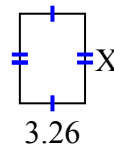
4) diện tích = 24,5072 centimet²



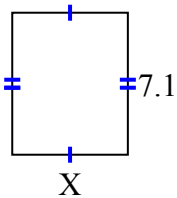
5) diện tích = 92,061 centimet²



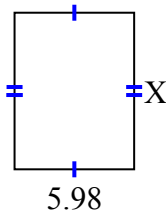
6) diện tích = 14,6048 centimet²



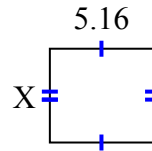
7) diện tích = 41,038 centimet²



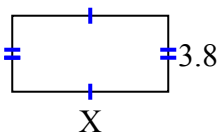
8) diện tích = 46,8234 centimet²



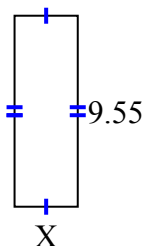
9) diện tích = 24,2004 centimet²



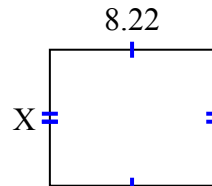
10) diện tích = 29,64 centimet²



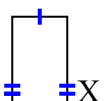
11) diện tích = 30,178 centimet²



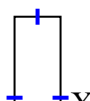
12) diện tích = 55,896 centimet²



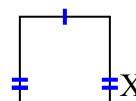
13) diện tích = 20,075 centimet²



14) diện tích = 19,55 centimet²



15) diện tích = 30,15 centimet²



1. 2.4

2. 4.8

3. 9.4

4. 5.78

5. 9.65

6. 4.48

7. 5.78

8. 7.83

9. 4.69

10. 7.8

11. 3.16

12. 6.8

13. 7.3

14. 8.5

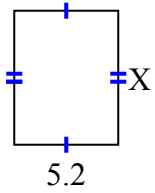
15. 6.7



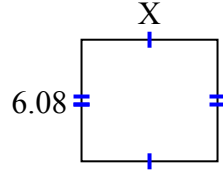
Tìm giá trị của X đối với mỗi hình. Mỗi hình tính bằng cm (cm). Không phải mở rộng quy mô.

Câu trả lời

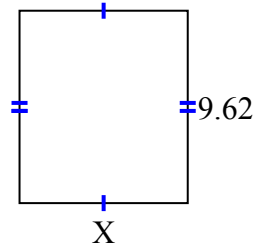
1) diện tích = 34,84 centimet²



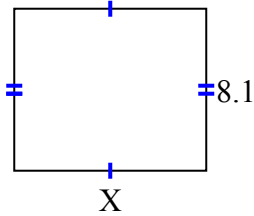
2) diện tích = 41,344 centimet²



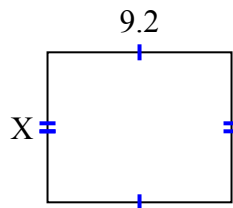
3) diện tích = 80,9042 centimet²



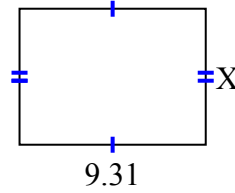
4) diện tích = 77,76 centimet²



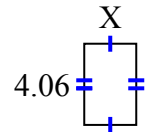
5) diện tích = 69 centimet²



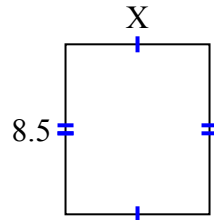
6) diện tích = 63,308 centimet²



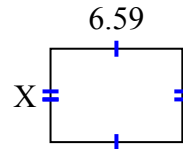
7) diện tích = 10,556 centimet²



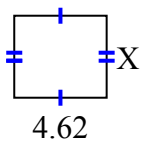
8) diện tích = 61,2 centimet²



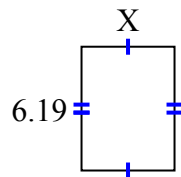
9) diện tích = 30,7753 centimet²



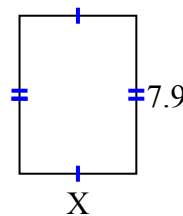
10) diện tích = 18,942 centimet²



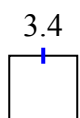
11) diện tích = 28,7835 centimet²



12) diện tích = 46,136 centimet²



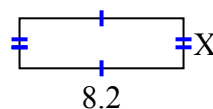
13) diện tích = 26,86 centimet²



14) diện tích = 52,437 centimet²



15) diện tích = 20,5 centimet²



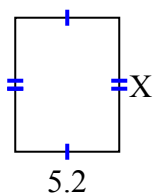
1. _____
2. _____
3. _____
4. _____
5. _____
6. _____
7. _____
8. _____
9. _____
10. _____
11. _____
12. _____
13. _____
14. _____
15. _____



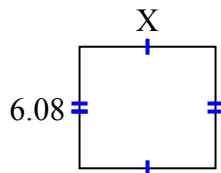
Tìm giá trị của X đối với mỗi hình. Mỗi hình tính bằng cm (cm). Không phải mở rộng quy mô.

Câu trả lời

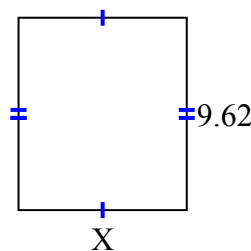
1) diện tích = 34,84 centimet²



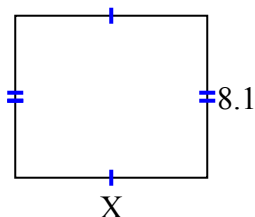
2) diện tích = 41,344 centimet²



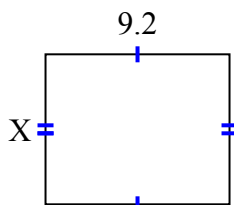
3) diện tích = 80,9042 centimet²



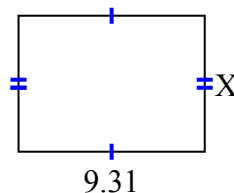
4) diện tích = 77,76 centimet²



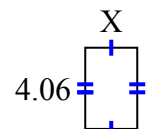
5) diện tích = 69 centimet²



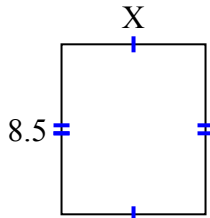
6) diện tích = 63,308 centimet²



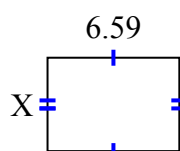
7) diện tích = 10,556 centimet²



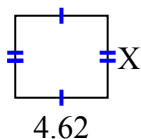
8) diện tích = 61,2 centimet²



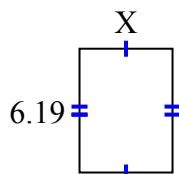
9) diện tích = 30,7753 centimet²



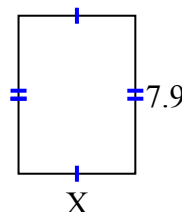
10) diện tích = 18,942 centimet²



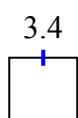
11) diện tích = 28,7835 centimet²



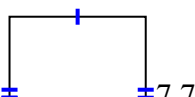
12) diện tích = 46,136 centimet²



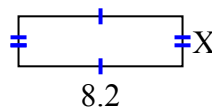
13) diện tích = 26,86 centimet²



14) diện tích = 52,437 centimet²



15) diện tích = 20,5 centimet²



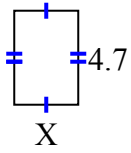
1. 6.7
2. 6.8
3. 8.41
4. 9.6
5. 7.5
6. 6.8
7. 2.6
8. 7.2
9. 4.67
10. 4.1
11. 4.65
12. 5.84
13. 7.9
14. 6.81
15. 2.5



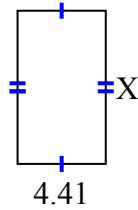
Tìm giá trị của X đối với mỗi hình. Mỗi hình tính bằng cm (cm). Không phải mở rộng quy mô.

Câu trả lời

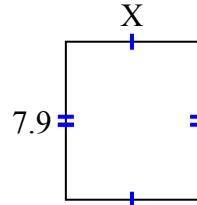
1) diện tích = 15,04 centimet²



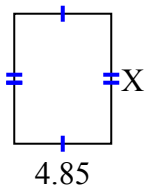
2) diện tích = 33,7806 centimet²



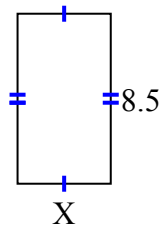
3) diện tích = 52,219 centimet²



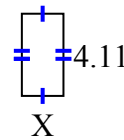
4) diện tích = 31,525 centimet²



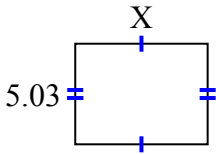
5) diện tích = 39,61 centimet²



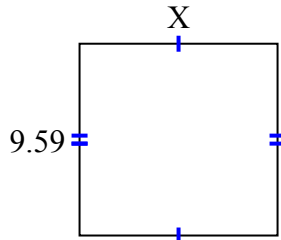
6) diện tích = 8,5488 centimet²



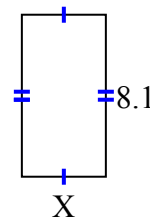
7) diện tích = 33,2986 centimet²



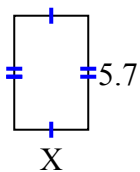
8) diện tích = 94,941 centimet²



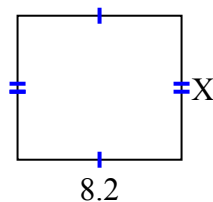
9) diện tích = 34,02 centimet²



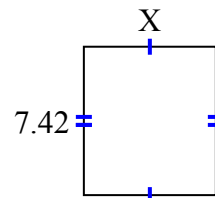
10) diện tích = 21,09 centimet²



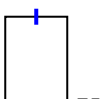
11) diện tích = 59,04 centimet²



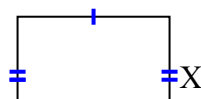
12) diện tích = 48,972 centimet²



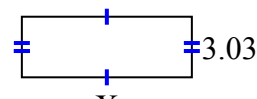
13) diện tích = 28,21 centimet²



14) diện tích = 44,84 centimet²



15) diện tích = 25,755 centimet²



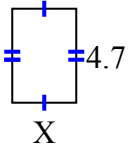
1. _____
2. _____
3. _____
4. _____
5. _____
6. _____
7. _____
8. _____
9. _____
10. _____
11. _____
12. _____
13. _____
14. _____
15. _____



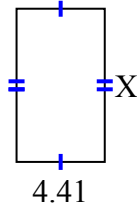
Tìm giá trị của X đối với mỗi hình. Mỗi hình tính bằng cm (cm). Không phải mở rộng quy mô.

Câu trả lời

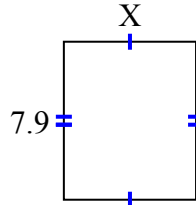
1) diện tích = 15,04 centimet²



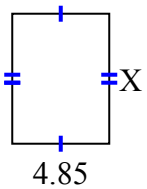
2) diện tích = 33,7806 centimet²



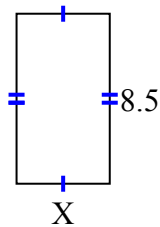
3) diện tích = 52,219 centimet²



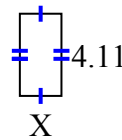
4) diện tích = 31,525 centimet²



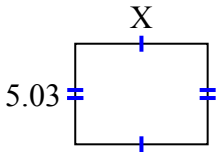
5) diện tích = 39,61 centimet²



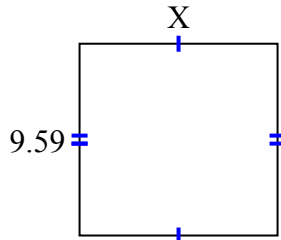
6) diện tích = 8,5488 centimet²



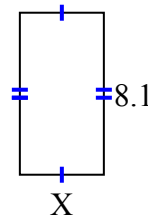
7) diện tích = 33,2986 centimet²



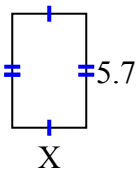
8) diện tích = 94,941 centimet²



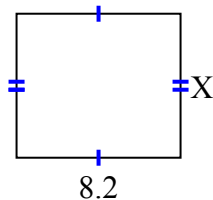
9) diện tích = 34,02 centimet²



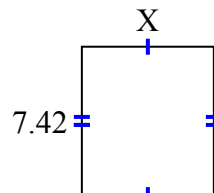
10) diện tích = 21,09 centimet²



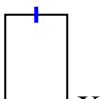
11) diện tích = 59,04 centimet²



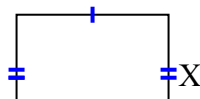
12) diện tích = 48,972 centimet²



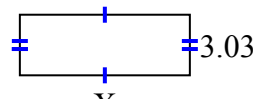
13) diện tích = 28,21 centimet²



14) diện tích = 44,84 centimet²



15) diện tích = 25,755 centimet²



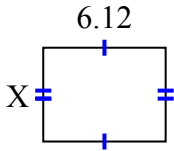
1. 3.2
2. 7.66
3. 6.61
4. 6.5
5. 4.66
6. 2.08
7. 6.62
8. 9.9
9. 4.2
10. 3.7
11. 7.2
12. 6.6
13. 9.1
14. 5.9
15. 8.5



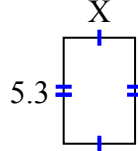
Tìm giá trị của X đối với mỗi hình. Mỗi hình tính bằng cm (cm). Không phải mở rộng quy mô.

Câu trả lời

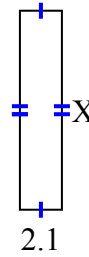
1) diện tích = 28,7028 centimet²



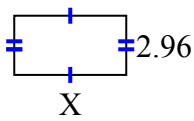
2) diện tích = 18,921 centimet²



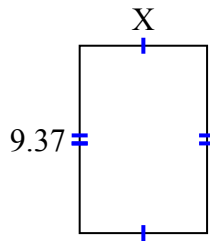
3) diện tích = 20,895 centimet²



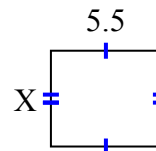
4) diện tích = 16,576 centimet²



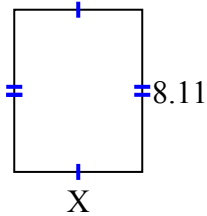
5) diện tích = 59,6869 centimet²



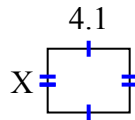
6) diện tích = 26,345 centimet²



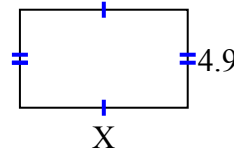
7) diện tích = 51,904 centimet²



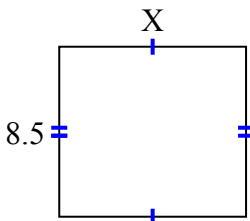
8) diện tích = 13,079 centimet²



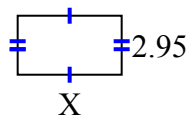
9) diện tích = 41,111 centimet²



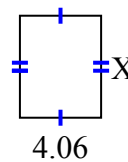
10) diện tích = 79,39 centimet²



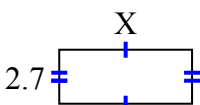
11) diện tích = 15,34 centimet²



12) diện tích = 20,706 centimet²



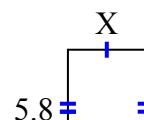
13) diện tích = 17,928 centimet²



14) diện tích = 8,295 centimet²



15) diện tích = 22,562 centimet²



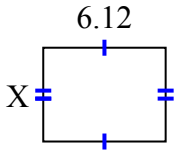
1. _____
2. _____
3. _____
4. _____
5. _____
6. _____
7. _____
8. _____
9. _____
10. _____
11. _____
12. _____
13. _____
14. _____
15. _____



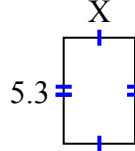
Tìm giá trị của X đối với mỗi hình. Mỗi hình tính bằng cm (cm). Không phải mở rộng quy mô.

Câu trả lời

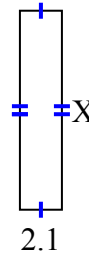
1) diện tích = 28,7028 centimet²



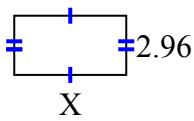
2) diện tích = 18,921 centimet²



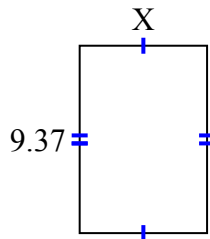
3) diện tích = 20,895 centimet²



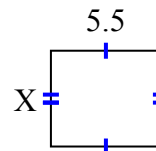
4) diện tích = 16,576 centimet²



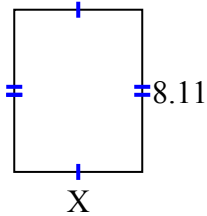
5) diện tích = 59,6869 centimet²



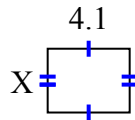
6) diện tích = 26,345 centimet²



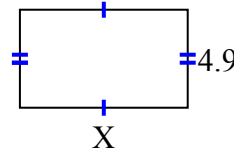
7) diện tích = 51,904 centimet²



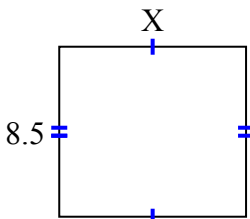
8) diện tích = 13,079 centimet²



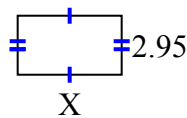
9) diện tích = 41,111 centimet²



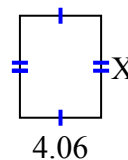
10) diện tích = 79,39 centimet²



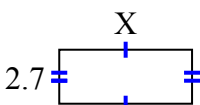
11) diện tích = 15,34 centimet²



12) diện tích = 20,706 centimet²



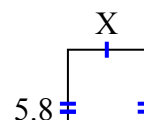
13) diện tích = 17,928 centimet²



14) diện tích = 8,295 centimet²



15) diện tích = 22,562 centimet²



1. **4.69**

2. **3.57**

3. **9.95**

4. **5.6**

5. **6.37**

6. **4.79**

7. **6.4**

8. **3.19**

9. **8.39**

10. **9.34**

11. **5.2**

12. **5.1**

13. **6.64**

14. **3.95**

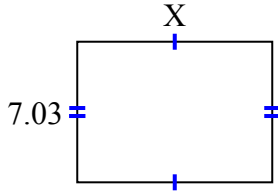
15. **3.89**



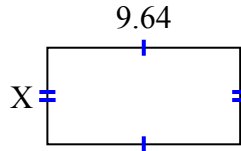
Tìm giá trị của X đối với mỗi hình. Mỗi hình tính bằng cm (cm). Không phải mở rộng quy mô.

Câu trả lời

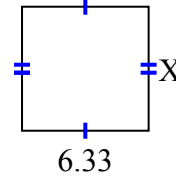
1) diện tích = 68,5425 centimet²



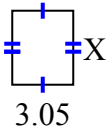
2) diện tích = 46,5612 centimet²



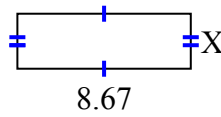
3) diện tích = 39,246 centimet²



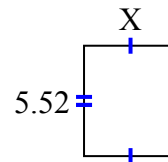
4) diện tích = 11,285 centimet²



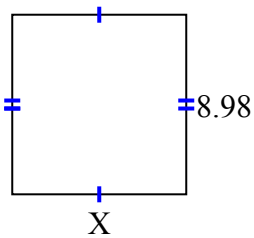
5) diện tích = 23,8425 centimet²



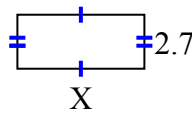
6) diện tích = 25,668 centimet²



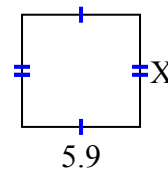
7) diện tích = 78,126 centimet²



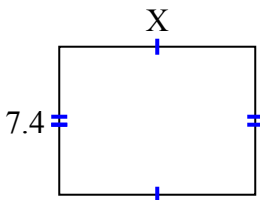
8) diện tích = 17,145 centimet²



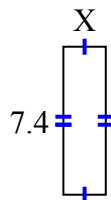
9) diện tích = 33,099 centimet²



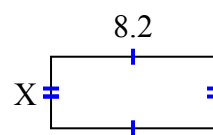
10) diện tích = 72,52 centimet²



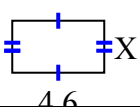
11) diện tích = 15,688 centimet²



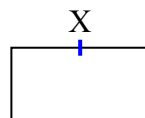
12) diện tích = 29,356 centimet²



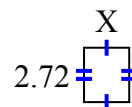
13) diện tích = 11,96 centimet²



14) diện tích = 66,048 centimet²



15) diện tích = 6,1472 centimet²



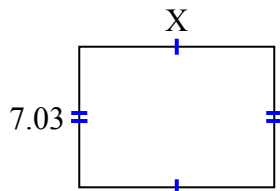
1. _____
2. _____
3. _____
4. _____
5. _____
6. _____
7. _____
8. _____
9. _____
10. _____
11. _____
12. _____
13. _____
14. _____
15. _____



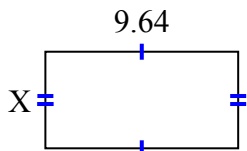
Tìm giá trị của X đối với mỗi hình. Mỗi hình tính bằng cm (cm). Không phải mở rộng quy mô.

Câu trả lời

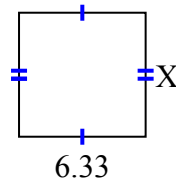
1) diện tích = 68,5425 centimet²



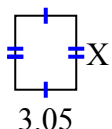
2) diện tích = 46,5612 centimet²



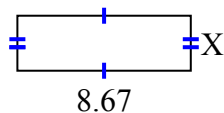
3) diện tích = 39,246 centimet²



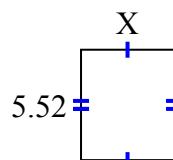
4) diện tích = 11,285 centimet²



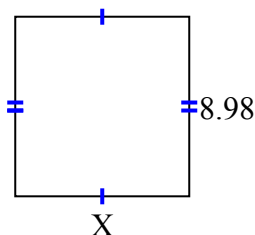
5) diện tích = 23,8425 centimet²



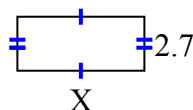
6) diện tích = 25,668 centimet²



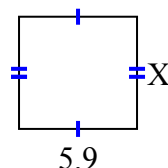
7) diện tích = 78,126 centimet²



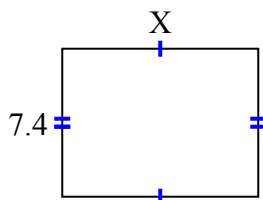
8) diện tích = 17,145 centimet²



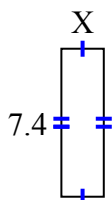
9) diện tích = 33,099 centimet²



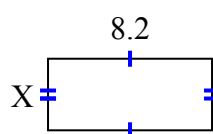
10) diện tích = 72,52 centimet²



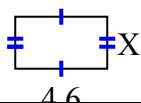
11) diện tích = 15,688 centimet²



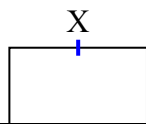
12) diện tích = 29,356 centimet²



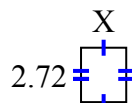
13) diện tích = 11,96 centimet²



14) diện tích = 66,048 centimet²



15) diện tích = 6,1472 centimet²



1. 9.75
2. 4.83
3. 6.2
4. 3.7
5. 2.75
6. 4.65
7. 8.7
8. 6.35
9. 5.61
10. 9.8
11. 2.12
12. 3.58
13. 2.6
14. 6.88
15. 2.26