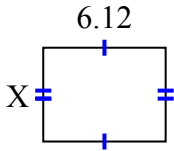




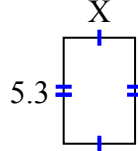
Tìm giá trị của X đối với mỗi hình. Mỗi hình tính bằng cm (cm). Không phải mở rộng quy mô.

Câu trả lời

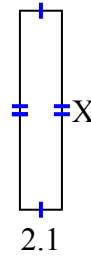
1) diện tích = 28,7028 centimet²



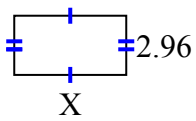
2) diện tích = 18,921 centimet²



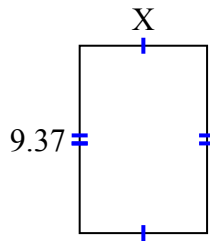
3) diện tích = 20,895 centimet²



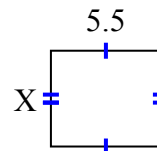
4) diện tích = 16,576 centimet²



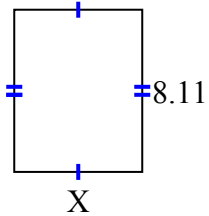
5) diện tích = 59,6869 centimet²



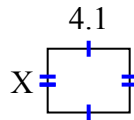
6) diện tích = 26,345 centimet²



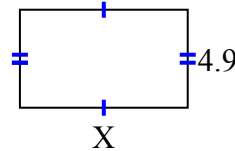
7) diện tích = 51,904 centimet²



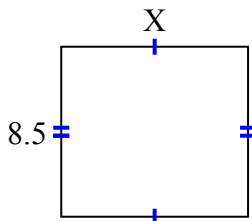
8) diện tích = 13,079 centimet²



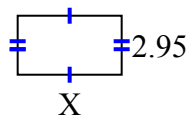
9) diện tích = 41,111 centimet²



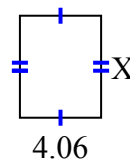
10) diện tích = 79,39 centimet²



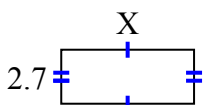
11) diện tích = 15,34 centimet²



12) diện tích = 20,706 centimet²



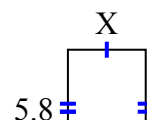
13) diện tích = 17,928 centimet²



14) diện tích = 8,295 centimet²



15) diện tích = 22,562 centimet²



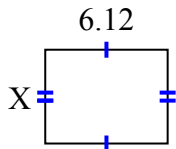
1. _____
2. _____
3. _____
4. _____
5. _____
6. _____
7. _____
8. _____
9. _____
10. _____
11. _____
12. _____
13. _____
14. _____
15. _____



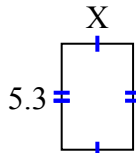
Tìm giá trị của X đối với mỗi hình. Mỗi hình tính bằng cm (cm). Không phải mở rộng quy mô.

Câu trả lời

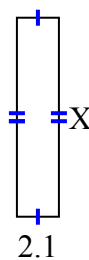
1) diện tích = 28,7028 centimet²



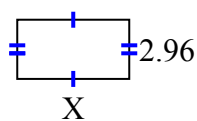
2) diện tích = 18,921 centimet²



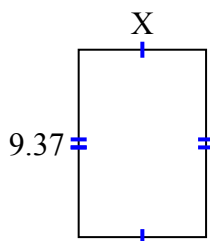
3) diện tích = 20,895 centimet²



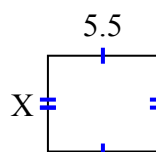
4) diện tích = 16,576 centimet²



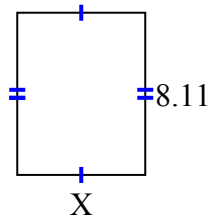
5) diện tích = 59,6869 centimet²



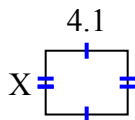
6) diện tích = 26,345 centimet²



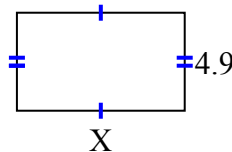
7) diện tích = 51,904 centimet²



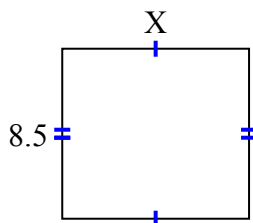
8) diện tích = 13,079 centimet²



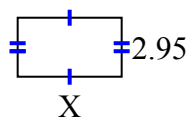
9) diện tích = 41,111 centimet²



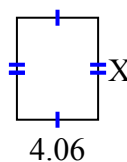
10) diện tích = 79,39 centimet²



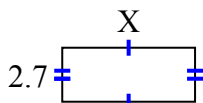
11) diện tích = 15,34 centimet²



12) diện tích = 20,706 centimet²



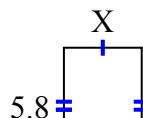
13) diện tích = 17,928 centimet²



14) diện tích = 8,295 centimet²



15) diện tích = 22,562 centimet²



1. 4.69
2. 3.57
3. 9.95
4. 5.6
5. 6.37
6. 4.79
7. 6.4
8. 3.19
9. 8.39
10. 9.34
11. 5.2
12. 5.1
13. 6.64
14. 3.95
15. 3.89