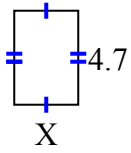




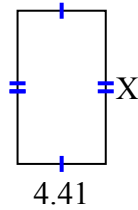
Tìm giá trị của X đối với mỗi hình. Mỗi hình tính bằng cm (cm). Không phải mở rộng quy mô.

Câu trả lời

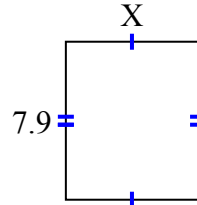
1) diện tích = 15,04 centimet²



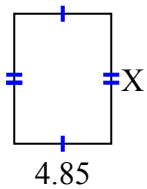
2) diện tích = 33,7806 centimet²



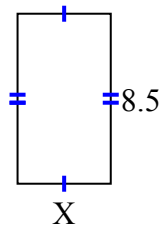
3) diện tích = 52,219 centimet²



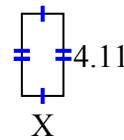
4) diện tích = 31,525 centimet²



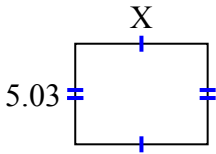
5) diện tích = 39,61 centimet²



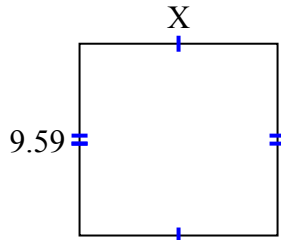
6) diện tích = 8,5488 centimet²



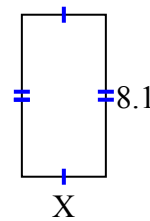
7) diện tích = 33,2986 centimet²



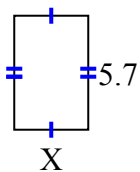
8) diện tích = 94,941 centimet²



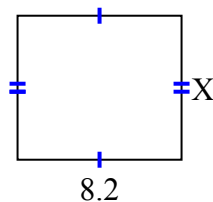
9) diện tích = 34,02 centimet²



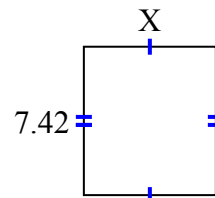
10) diện tích = 21,09 centimet²



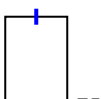
11) diện tích = 59,04 centimet²



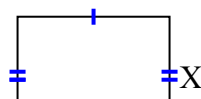
12) diện tích = 48,972 centimet²



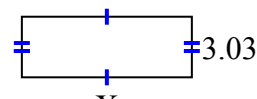
13) diện tích = 28,21 centimet²



14) diện tích = 44,84 centimet²



15) diện tích = 25,755 centimet²



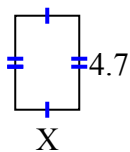
1. _____
2. _____
3. _____
4. _____
5. _____
6. _____
7. _____
8. _____
9. _____
10. _____
11. _____
12. _____
13. _____
14. _____
15. _____



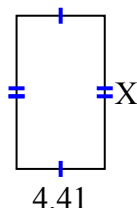
Tìm giá trị của X đối với mỗi hình. Mỗi hình tính bằng cm (cm). Không phải mở rộng quy mô.

Câu trả lời

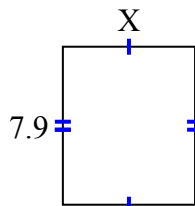
1) diện tích = 15,04 centimet²



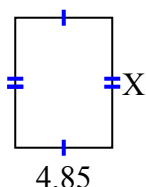
2) diện tích = 33,7806 centimet²



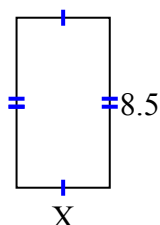
3) diện tích = 52,219 centimet²



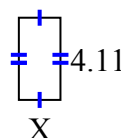
4) diện tích = 31,525 centimet²



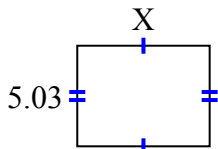
5) diện tích = 39,61 centimet²



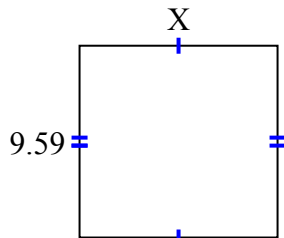
6) diện tích = 8,5488 centimet²



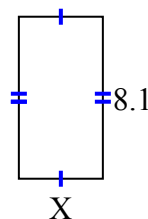
7) diện tích = 33,2986 centimet²



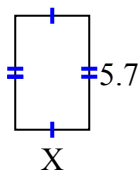
8) diện tích = 94,941 centimet²



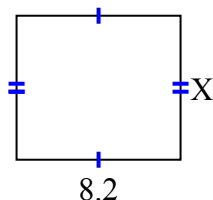
9) diện tích = 34,02 centimet²



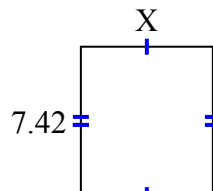
10) diện tích = 21,09 centimet²



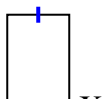
11) diện tích = 59,04 centimet²



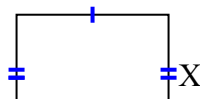
12) diện tích = 48,972 centimet²



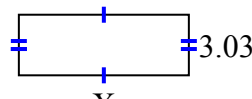
13) diện tích = 28,21 centimet²



14) diện tích = 44,84 centimet²



15) diện tích = 25,755 centimet²



1. 3.2
2. 7.66
3. 6.61
4. 6.5
5. 4.66
6. 2.08
7. 6.62
8. 9.9
9. 4.2
10. 3.7
11. 7.2
12. 6.6
13. 9.1
14. 5.9
15. 8.5