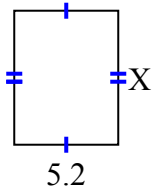




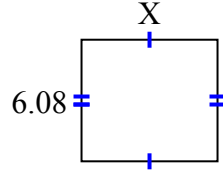
Tìm giá trị của X đối với mỗi hình. Mỗi hình tính bằng cm (cm). Không phải mở rộng quy mô.

Câu trả lời

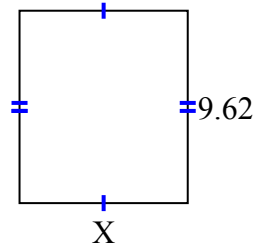
1) diện tích = 34,84 centimet²



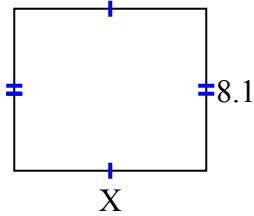
2) diện tích = 41,344 centimet²



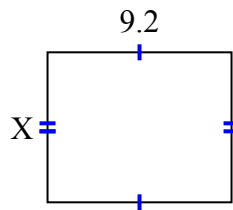
3) diện tích = 80,9042 centimet²



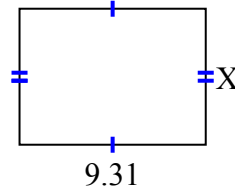
4) diện tích = 77,76 centimet²



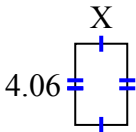
5) diện tích = 69 centimet²



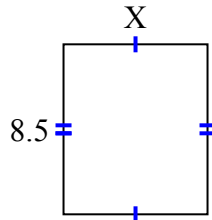
6) diện tích = 63,308 centimet²



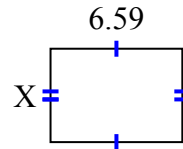
7) diện tích = 10,556 centimet²



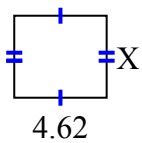
8) diện tích = 61,2 centimet²



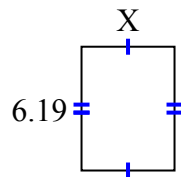
9) diện tích = 30,7753 centimet²



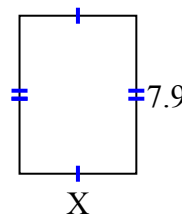
10) diện tích = 18,942 centimet²



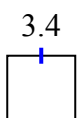
11) diện tích = 28,7835 centimet²



12) diện tích = 46,136 centimet²



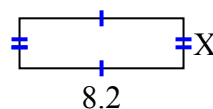
13) diện tích = 26,86 centimet²



14) diện tích = 52,437 centimet²



15) diện tích = 20,5 centimet²



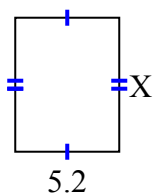
1. _____
2. _____
3. _____
4. _____
5. _____
6. _____
7. _____
8. _____
9. _____
10. _____
11. _____
12. _____
13. _____
14. _____
15. _____



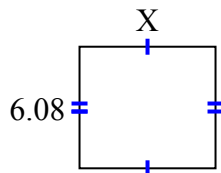
Tìm giá trị của X đối với mỗi hình. Mỗi hình tính bằng cm (cm). Không phải mở rộng quy mô.

Câu trả lời

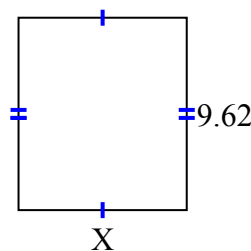
1) diện tích = 34,84 centimet²



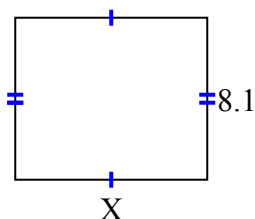
2) diện tích = 41,344 centimet²



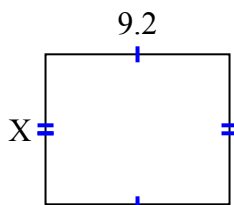
3) diện tích = 80,9042 centimet²



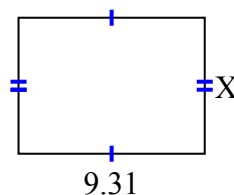
4) diện tích = 77,76 centimet²



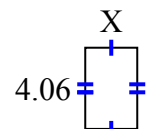
5) diện tích = 69 centimet²



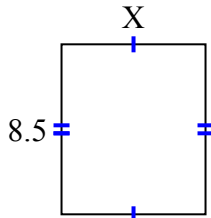
6) diện tích = 63,308 centimet²



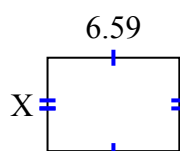
7) diện tích = 10,556 centimet²



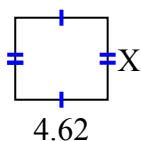
8) diện tích = 61,2 centimet²



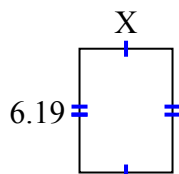
9) diện tích = 30,7753 centimet²



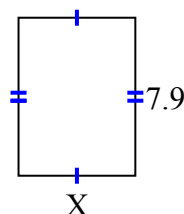
10) diện tích = 18,942 centimet²



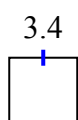
11) diện tích = 28,7835 centimet²



12) diện tích = 46,136 centimet²



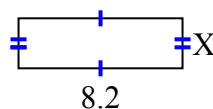
13) diện tích = 26,86 centimet²



14) diện tích = 52,437 centimet²



15) diện tích = 20,5 centimet²



1. 6.7
2. 6.8
3. 8.41
4. 9.6
5. 7.5
6. 6.8
7. 2.6
8. 7.2
9. 4.67
10. 4.1
11. 4.65
12. 5.84
13. 7.9
14. 6.81
15. 2.5