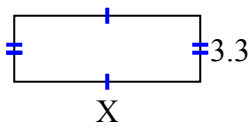




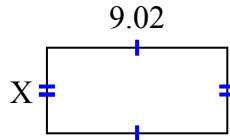
Tìm giá trị của X đối với mỗi hình. Mỗi hình tính bằng cm (cm). Không phải mở rộng quy mô.

Câu trả lời

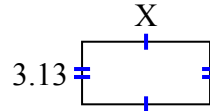
1) diện tích = 30,69 centimet²



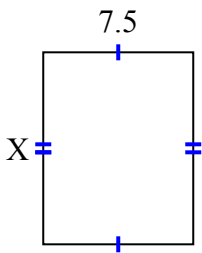
2) diện tích = 38,6056 centimet²



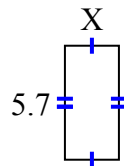
3) diện tích = 20,032 centimet²



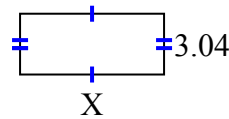
4) diện tích = 72 centimet²



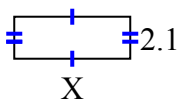
5) diện tích = 15,39 centimet²



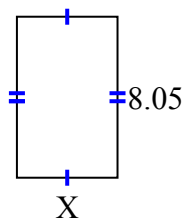
6) diện tích = 21,888 centimet²



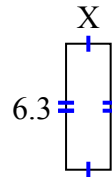
7) diện tích = 12,18 centimet²



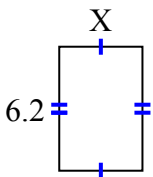
8) diện tích = 40,4915 centimet²



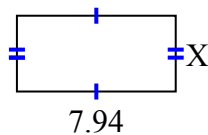
9) diện tích = 14,049 centimet²



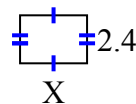
10) diện tích = 25,792 centimet²



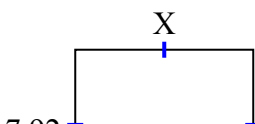
11) diện tích = 30,0926 centimet²



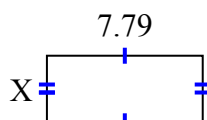
12) diện tích = 8,04 centimet²



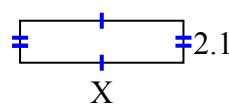
13) diện tích = 70,488 centimet²



14) diện tích = 25,5512 centimet²



15) diện tích = 17,157 centimet²



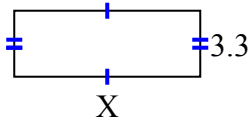
1. _____
2. _____
3. _____
4. _____
5. _____
6. _____
7. _____
8. _____
9. _____
10. _____
11. _____
12. _____
13. _____
14. _____
15. _____



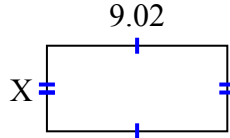
Tìm giá trị của X đối với mỗi hình. Mỗi hình tính bằng cm (cm). Không phải mở rộng quy mô.

Câu trả lời

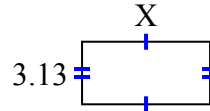
- 1) diện tích = 30,69 centimet²



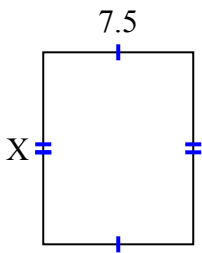
- 2) diện tích = 38,6056 centimet²



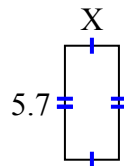
- 3) diện tích = 20,032 centimet²



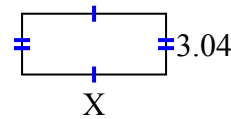
- 4) diện tích = 72 centimet²



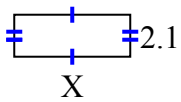
- 5) diện tích = 15,39 centimet²



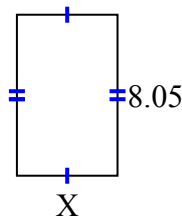
- 6) diện tích = 21,888 centimet²



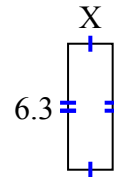
- 7) diện tích = 12,18 centimet²



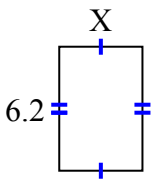
- 8) diện tích = 40,4915 centimet²



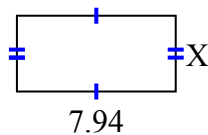
- 9) diện tích = 14,049 centimet²



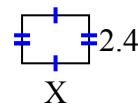
- 10) diện tích = 25,792 centimet²



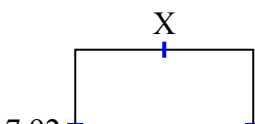
- 11) diện tích = 30,0926 centimet²



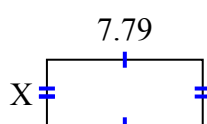
- 12) diện tích = 8,04 centimet²



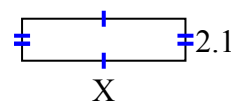
- 13) diện tích = 70,488 centimet²



- 14) diện tích = 25,5512 centimet²



- 15) diện tích = 17,157 centimet²



1. 9.3

2. 4.28

3. 6.4

4. 9.6

5. 2.7

6. 7.2

7. 5.8

8. 5.03

9. 2.23

10. 4.16

11. 3.79

12. 3.35

13. 8.9

14. 3.28

15. 8.17