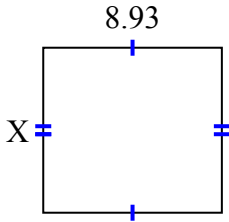




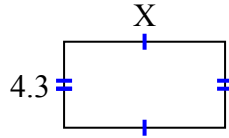
**Tìm giá trị của X đối với mỗi hình. Mỗi hình tính bằng cm (cm). Không phải mở rộng quy mô.**

**Câu trả lời**

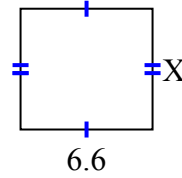
1) diện tích = 73,6725 centimet<sup>2</sup>



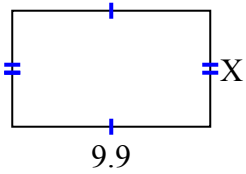
2) diện tích = 34,615 centimet<sup>2</sup>



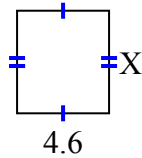
3) diện tích = 39,864 centimet<sup>2</sup>



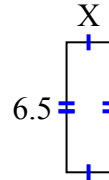
4) diện tích = 57,42 centimet<sup>2</sup>



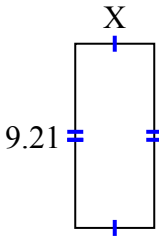
5) diện tích = 23,598 centimet<sup>2</sup>



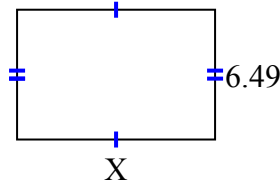
6) diện tích = 14,3 centimet<sup>2</sup>



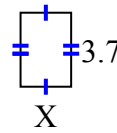
7) diện tích = 36,3795 centimet<sup>2</sup>



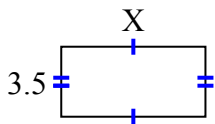
8) diện tích = 64,251 centimet<sup>2</sup>



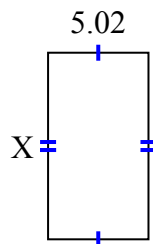
9) diện tích = 9,361 centimet<sup>2</sup>



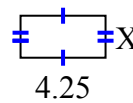
10) diện tích = 25,235 centimet<sup>2</sup>



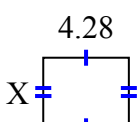
11) diện tích = 46,8366 centimet<sup>2</sup>



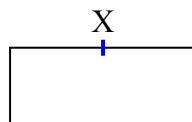
12) diện tích = 8,925 centimet<sup>2</sup>



13) diện tích = 14,6804 centimet<sup>2</sup>



14) diện tích = 79,98 centimet<sup>2</sup>



15) diện tích = 25,996 centimet<sup>2</sup>



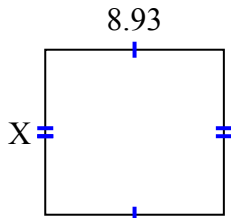
1. \_\_\_\_\_
2. \_\_\_\_\_
3. \_\_\_\_\_
4. \_\_\_\_\_
5. \_\_\_\_\_
6. \_\_\_\_\_
7. \_\_\_\_\_
8. \_\_\_\_\_
9. \_\_\_\_\_
10. \_\_\_\_\_
11. \_\_\_\_\_
12. \_\_\_\_\_
13. \_\_\_\_\_
14. \_\_\_\_\_
15. \_\_\_\_\_



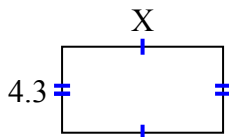
**Tìm giá trị của X đối với mỗi hình. Mỗi hình tính bằng cm (cm). Không phải mở rộng quy mô.**

**Câu trả lời**

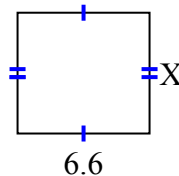
- 1) diện tích = 73,6725 centimet<sup>2</sup>



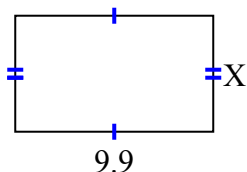
- 2) diện tích = 34,615 centimet<sup>2</sup>



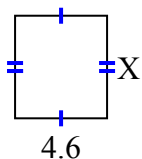
- 3) diện tích = 39,864 centimet<sup>2</sup>



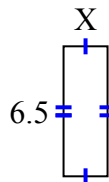
- 4) diện tích = 57,42 centimet<sup>2</sup>



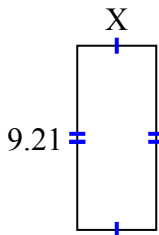
- 5) diện tích = 23,598 centimet<sup>2</sup>



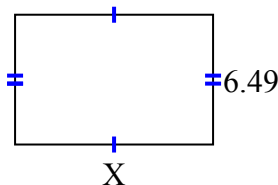
- 6) diện tích = 14,3 centimet<sup>2</sup>



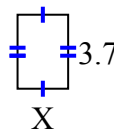
- 7) diện tích = 36,3795 centimet<sup>2</sup>



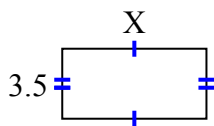
- 8) diện tích = 64,251 centimet<sup>2</sup>



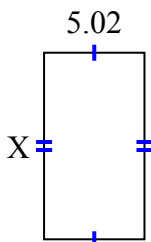
- 9) diện tích = 9,361 centimet<sup>2</sup>



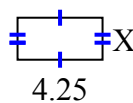
- 10) diện tích = 25,235 centimet<sup>2</sup>



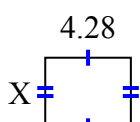
- 11) diện tích = 46,8366 centimet<sup>2</sup>



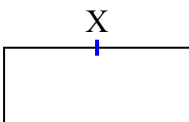
- 12) diện tích = 8,925 centimet<sup>2</sup>



- 13) diện tích = 14,6804 centimet<sup>2</sup>



- 14) diện tích = 79,98 centimet<sup>2</sup>



- 15) diện tích = 25,996 centimet<sup>2</sup>



1. 8.25
2. 8.05
3. 6.04
4. 5.8
5. 5.13
6. 2.2
7. 3.95
8. 9.9
9. 2.53
10. 7.21
11. 9.33
12. 2.1
13. 3.43
14. 9.3
15. 9.7