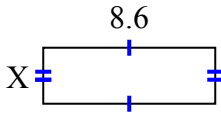




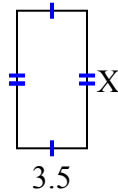
**Tìm giá trị của X đối với mỗi hình. Mỗi hình tính bằng cm (cm). Không phải mở rộng quy mô.**

**Câu trả lời**

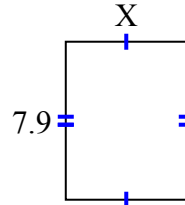
1) diện tích = 24,08 centimet<sup>2</sup>



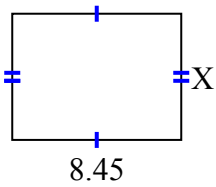
2) diện tích = 24,08 centimet<sup>2</sup>



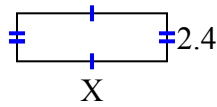
3) diện tích = 47,795 centimet<sup>2</sup>



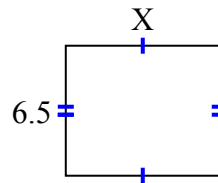
4) diện tích = 53,3195 centimet<sup>2</sup>



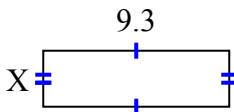
5) diện tích = 18 centimet<sup>2</sup>



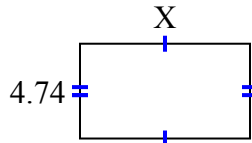
6) diện tích = 50,05 centimet<sup>2</sup>



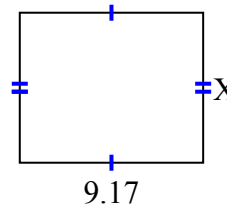
7) diện tích = 26,04 centimet<sup>2</sup>



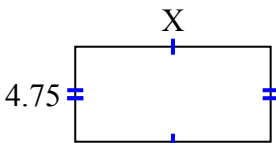
8) diện tích = 40,29 centimet<sup>2</sup>



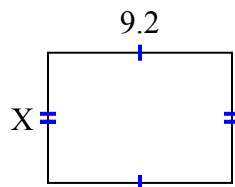
9) diện tích = 68,775 centimet<sup>2</sup>



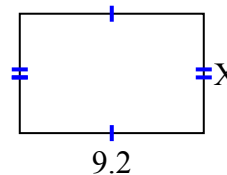
10) diện tích = 46,4075 centimet<sup>2</sup>



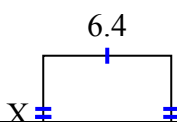
11) diện tích = 59,892 centimet<sup>2</sup>



12) diện tích = 54,924 centimet<sup>2</sup>



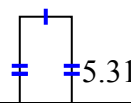
13) diện tích = 36,608 centimet<sup>2</sup>



14) diện tích = 22,241 centimet<sup>2</sup>



15) diện tích = 13,806 centimet<sup>2</sup>



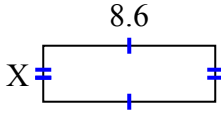
1. \_\_\_\_\_
2. \_\_\_\_\_
3. \_\_\_\_\_
4. \_\_\_\_\_
5. \_\_\_\_\_
6. \_\_\_\_\_
7. \_\_\_\_\_
8. \_\_\_\_\_
9. \_\_\_\_\_
10. \_\_\_\_\_
11. \_\_\_\_\_
12. \_\_\_\_\_
13. \_\_\_\_\_
14. \_\_\_\_\_
15. \_\_\_\_\_



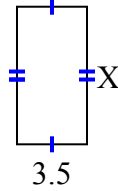
**Tìm giá trị của X đối với mỗi hình. Mỗi hình tính bằng cm (cm). Không phải mở rộng quy mô.**

**Câu trả lời**

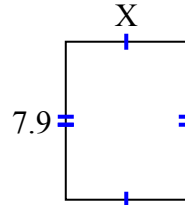
- 1) diện tích = 24,08 centimet<sup>2</sup>



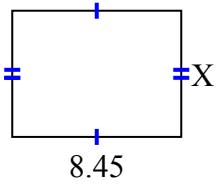
- 2) diện tích = 24,08 centimet<sup>2</sup>



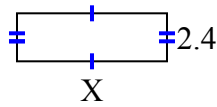
- 3) diện tích = 47,795 centimet<sup>2</sup>



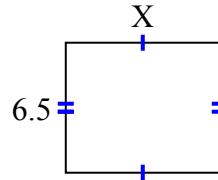
- 4) diện tích = 53,3195 centimet<sup>2</sup>



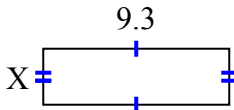
- 5) diện tích = 18 centimet<sup>2</sup>



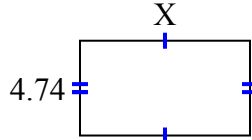
- 6) diện tích = 50,05 centimet<sup>2</sup>



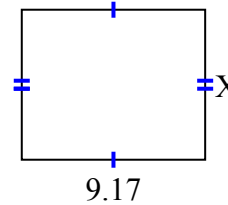
- 7) diện tích = 26,04 centimet<sup>2</sup>



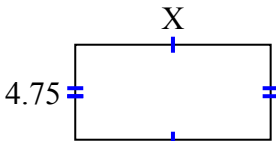
- 8) diện tích = 40,29 centimet<sup>2</sup>



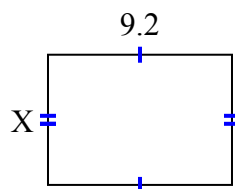
- 9) diện tích = 68,775 centimet<sup>2</sup>



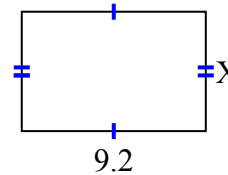
- 10) diện tích = 46,4075 centimet<sup>2</sup>



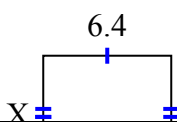
- 11) diện tích = 59,892 centimet<sup>2</sup>



- 12) diện tích = 54,924 centimet<sup>2</sup>



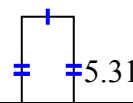
- 13) diện tích = 36,608 centimet<sup>2</sup>



- 14) diện tích = 22,241 centimet<sup>2</sup>



- 15) diện tích = 13,806 centimet<sup>2</sup>



1. 2.8

2. 6.88

3. 6.05

4. 6.31

5. 7.5

6. 7.7

7. 2.8

8. 8.5

9. 7.5

10. 9.77

11. 6.51

12. 5.97

13. 5.72

14. 2.3

15. 2.6