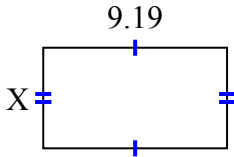




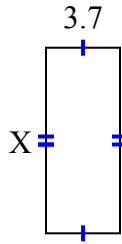
Tìm giá trị của X đối với mỗi hình. Mỗi hình tính bằng cm (cm). Không phải mở rộng quy mô.

Câu trả lời

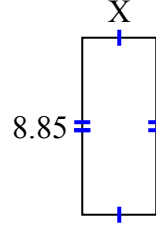
1) diện tích = 46,2257 centimet²



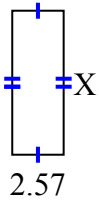
2) diện tích = 34,336 centimet²



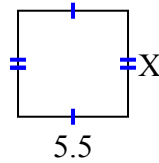
3) diện tích = 32,745 centimet²



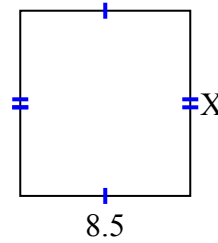
4) diện tích = 18,504 centimet²



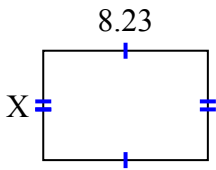
5) diện tích = 29,15 centimet²



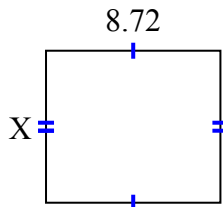
6) diện tích = 78,71 centimet²



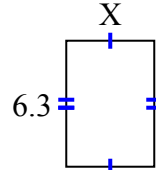
7) diện tích = 45,0181 centimet²



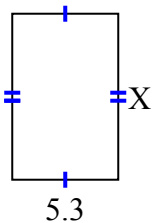
8) diện tích = 66,272 centimet²



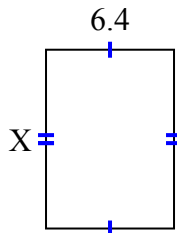
9) diện tích = 27,72 centimet²



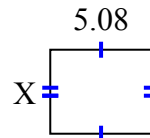
10) diện tích = 43,99 centimet²



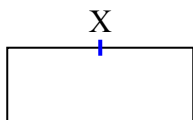
11) diện tích = 57,216 centimet²



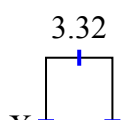
12) diện tích = 21,336 centimet²



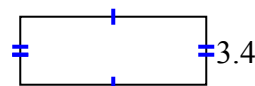
13) diện tích = 87,141 centimet²



14) diện tích = 22,41 centimet²



15) diện tích = 31,62 centimet²



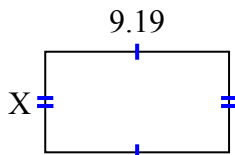
1. _____
2. _____
3. _____
4. _____
5. _____
6. _____
7. _____
8. _____
9. _____
10. _____
11. _____
12. _____
13. _____
14. _____
15. _____



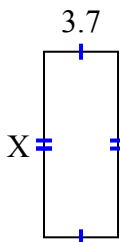
Tìm giá trị của X đối với mỗi hình. Mỗi hình tính bằng cm (cm). Không phải mở rộng quy mô.

Câu trả lời

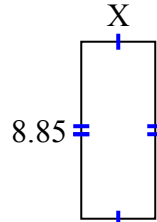
1) diện tích = 46,2257 centimet²



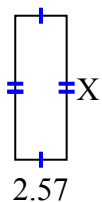
2) diện tích = 34,336 centimet²



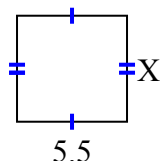
3) diện tích = 32,745 centimet²



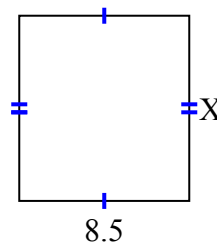
4) diện tích = 18,504 centimet²



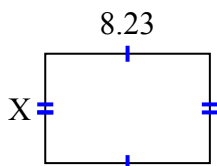
5) diện tích = 29,15 centimet²



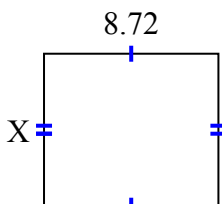
6) diện tích = 78,71 centimet²



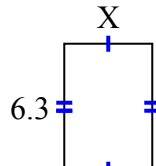
7) diện tích = 45,0181 centimet²



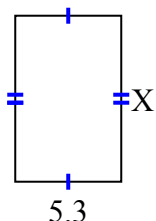
8) diện tích = 66,272 centimet²



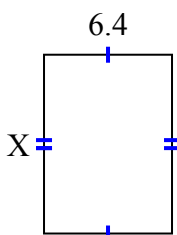
9) diện tích = 27,72 centimet²



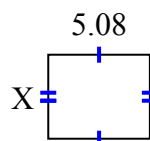
10) diện tích = 43,99 centimet²



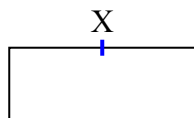
11) diện tích = 57,216 centimet²



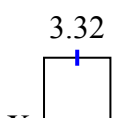
12) diện tích = 21,336 centimet²



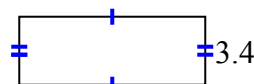
13) diện tích = 87,141 centimet²



14) diện tích = 22,41 centimet²



15) diện tích = 31,62 centimet²



1. 5.03
2. 9.28
3. 3.7
4. 7.2
5. 5.3
6. 9.26
7. 5.47
8. 7.6
9. 4.4
10. 8.3
11. 8.94
12. 4.2
13. 9.3
14. 6.75
15. 9.3