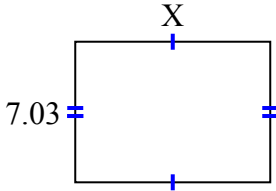




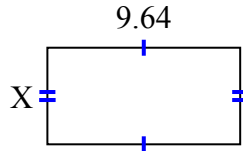
**Tìm giá trị của X đối với mỗi hình. Mỗi hình tính bằng cm (cm). Không phải mở rộng quy mô.**

**Câu trả lời**

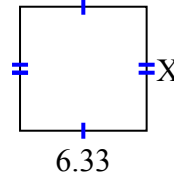
1) diện tích = 68,5425 centimet<sup>2</sup>



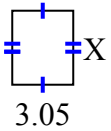
2) diện tích = 46,5612 centimet<sup>2</sup>



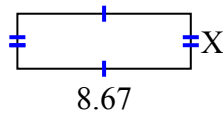
3) diện tích = 39,246 centimet<sup>2</sup>



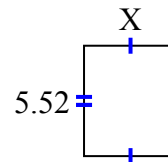
4) diện tích = 11,285 centimet<sup>2</sup>



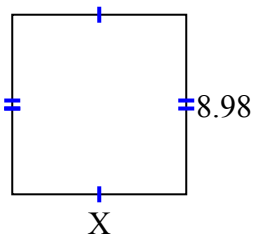
5) diện tích = 23,8425 centimet<sup>2</sup>



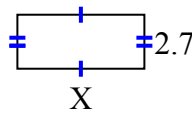
6) diện tích = 25,668 centimet<sup>2</sup>



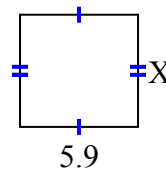
7) diện tích = 78,126 centimet<sup>2</sup>



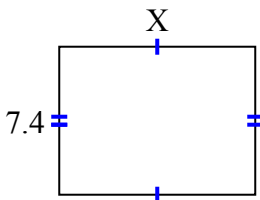
8) diện tích = 17,145 centimet<sup>2</sup>



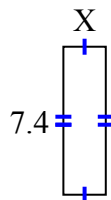
9) diện tích = 33,099 centimet<sup>2</sup>



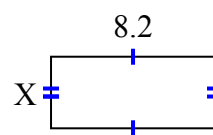
10) diện tích = 72,52 centimet<sup>2</sup>



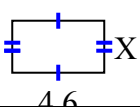
11) diện tích = 15,688 centimet<sup>2</sup>



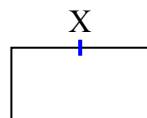
12) diện tích = 29,356 centimet<sup>2</sup>



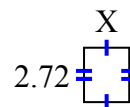
13) diện tích = 11,96 centimet<sup>2</sup>



14) diện tích = 66,048 centimet<sup>2</sup>



15) diện tích = 6,1472 centimet<sup>2</sup>



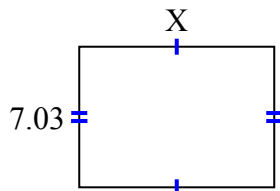
1. \_\_\_\_\_
2. \_\_\_\_\_
3. \_\_\_\_\_
4. \_\_\_\_\_
5. \_\_\_\_\_
6. \_\_\_\_\_
7. \_\_\_\_\_
8. \_\_\_\_\_
9. \_\_\_\_\_
10. \_\_\_\_\_
11. \_\_\_\_\_
12. \_\_\_\_\_
13. \_\_\_\_\_
14. \_\_\_\_\_
15. \_\_\_\_\_



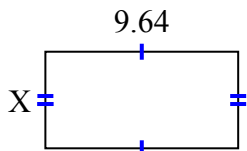
**Tìm giá trị của X đối với mỗi hình. Mỗi hình tính bằng cm (cm). Không phải mở rộng quy mô.**

**Câu trả lời**

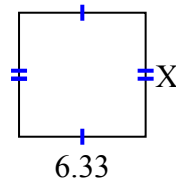
1) diện tích = 68,5425 centimet<sup>2</sup>



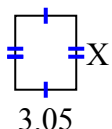
2) diện tích = 46,5612 centimet<sup>2</sup>



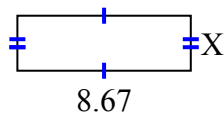
3) diện tích = 39,246 centimet<sup>2</sup>



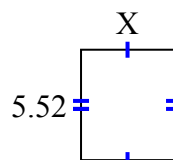
4) diện tích = 11,285 centimet<sup>2</sup>



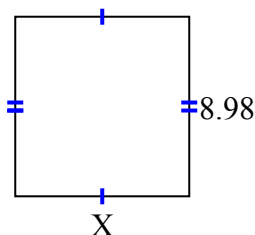
5) diện tích = 23,8425 centimet<sup>2</sup>



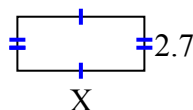
6) diện tích = 25,668 centimet<sup>2</sup>



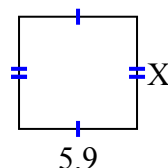
7) diện tích = 78,126 centimet<sup>2</sup>



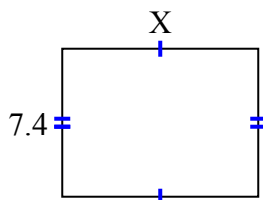
8) diện tích = 17,145 centimet<sup>2</sup>



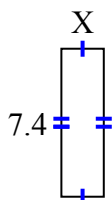
9) diện tích = 33,099 centimet<sup>2</sup>



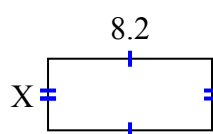
10) diện tích = 72,52 centimet<sup>2</sup>



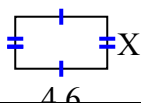
11) diện tích = 15,688 centimet<sup>2</sup>



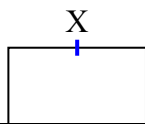
12) diện tích = 29,356 centimet<sup>2</sup>



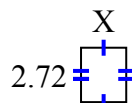
13) diện tích = 11,96 centimet<sup>2</sup>



14) diện tích = 66,048 centimet<sup>2</sup>



15) diện tích = 6,1472 centimet<sup>2</sup>



1. 9.75
2. 4.83
3. 6.2
4. 3.7
5. 2.75
6. 4.65
7. 8.7
8. 6.35
9. 5.61
10. 9.8
11. 2.12
12. 3.58
13. 2.6
14. 6.88
15. 2.26