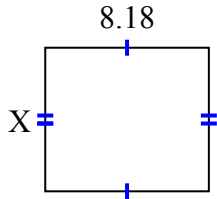




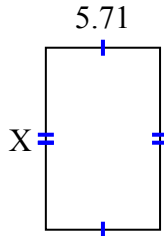
**Tìm giá trị của X đối với mỗi hình. Mỗi hình tính bằng cm (cm). Không phải mở rộng quy mô.**

**Câu trả lời**

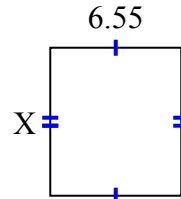
1) diện tích = 58,7324 centimet<sup>2</sup>



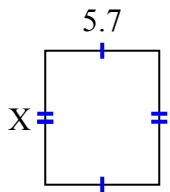
2) diện tích = 51,961 centimet<sup>2</sup>



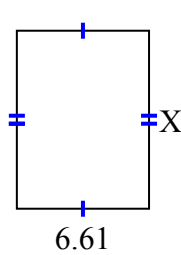
3) diện tích = 48,47 centimet<sup>2</sup>



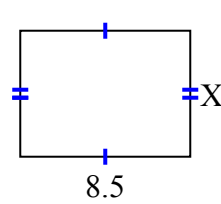
4) diện tích = 38,19 centimet<sup>2</sup>



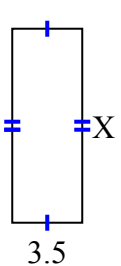
5) diện tích = 58,829 centimet<sup>2</sup>



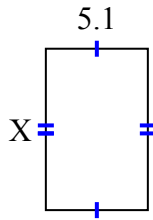
6) diện tích = 53,55 centimet<sup>2</sup>



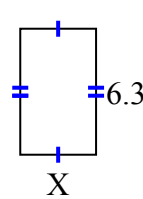
7) diện tích = 33,95 centimet<sup>2</sup>



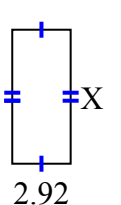
8) diện tích = 41,157 centimet<sup>2</sup>



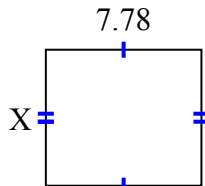
9) diện tích = 23,877 centimet<sup>2</sup>



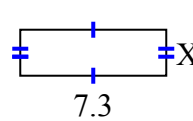
10) diện tích = 19,564 centimet<sup>2</sup>



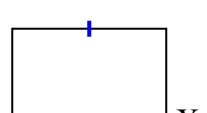
11) diện tích = 52,904 centimet<sup>2</sup>



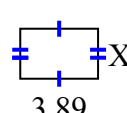
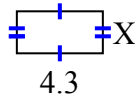
12) diện tích = 16,79 centimet<sup>2</sup>



13) diện tích = 69,762 centimet<sup>2</sup>



14) diện tích = 9,03 centimet<sup>2</sup> 15) diện tích = 9,725 centimet<sup>2</sup>



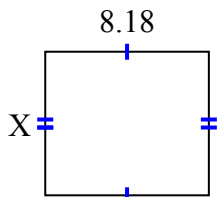
1. \_\_\_\_\_
2. \_\_\_\_\_
3. \_\_\_\_\_
4. \_\_\_\_\_
5. \_\_\_\_\_
6. \_\_\_\_\_
7. \_\_\_\_\_
8. \_\_\_\_\_
9. \_\_\_\_\_
10. \_\_\_\_\_
11. \_\_\_\_\_
12. \_\_\_\_\_
13. \_\_\_\_\_
14. \_\_\_\_\_
15. \_\_\_\_\_



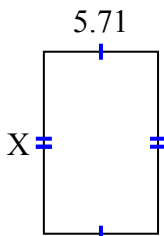
**Tìm giá trị của X đối với mỗi hình. Mỗi hình tính bằng cm (cm). Không phải mở rộng quy mô.**

**Câu trả lời**

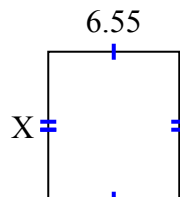
1) diện tích = 58,7324 centimet<sup>2</sup>



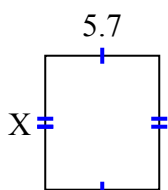
2) diện tích = 51,961 centimet<sup>2</sup>



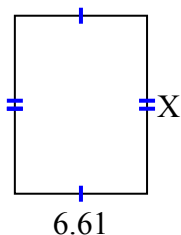
3) diện tích = 48,47 centimet<sup>2</sup>



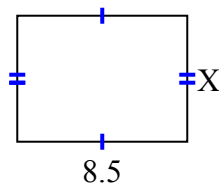
4) diện tích = 38,19 centimet<sup>2</sup>



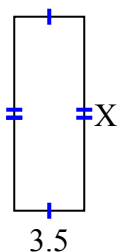
5) diện tích = 58,829 centimet<sup>2</sup>



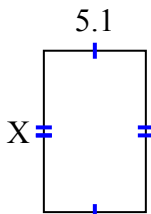
6) diện tích = 53,55 centimet<sup>2</sup>



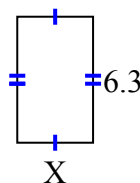
7) diện tích = 33,95 centimet<sup>2</sup>



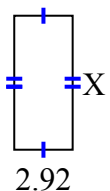
8) diện tích = 41,157 centimet<sup>2</sup>



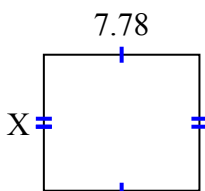
9) diện tích = 23,877 centimet<sup>2</sup>



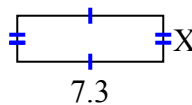
10) diện tích = 19,564 centimet<sup>2</sup>



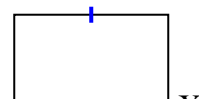
11) diện tích = 52,904 centimet<sup>2</sup>



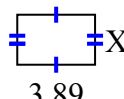
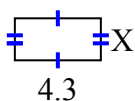
12) diện tích = 16,79 centimet<sup>2</sup>



13) diện tích = 69,762 centimet<sup>2</sup>



14) diện tích = 9,03 centimet<sup>2</sup> 15) diện tích = 9,725 centimet<sup>2</sup>



1. 7.18
2. 9.1
3. 7.4
4. 6.7
5. 8.9
6. 6.3
7. 9.7
8. 8.07
9. 3.79
10. 6.7
11. 6.8
12. 2.3
13. 9.06
14. 2.1
15. 2.5