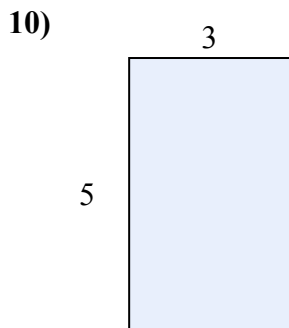
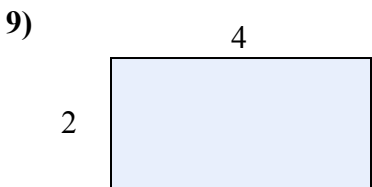
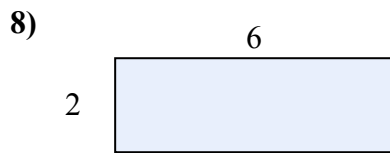

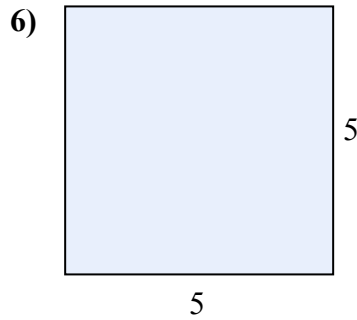
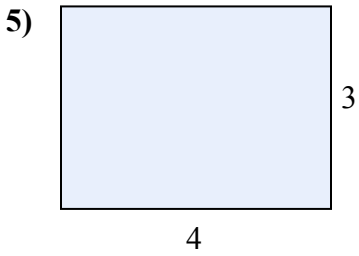
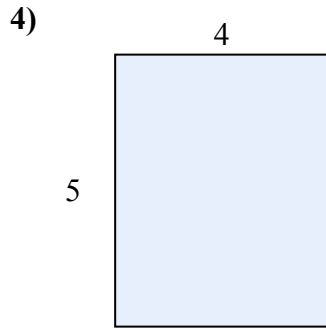
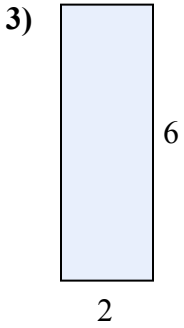
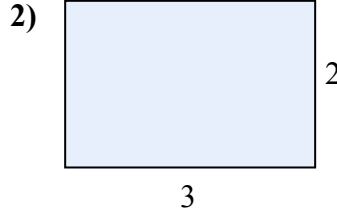
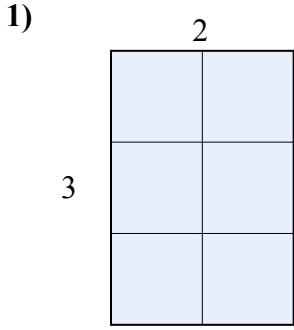




Tìm diện tích hình chữ nhật tính bằng ô gạch lát. Cái đầu tiên chia ô để bạn hình dung.

**Câu trả lời**

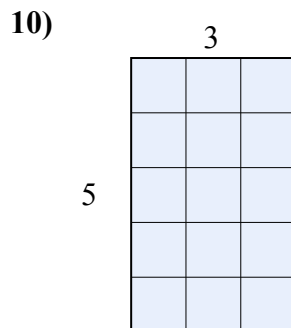
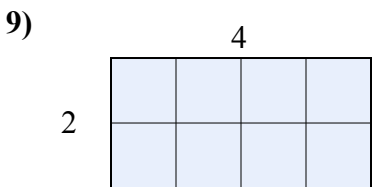
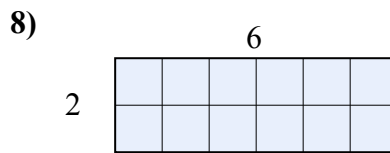
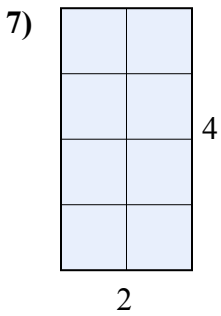
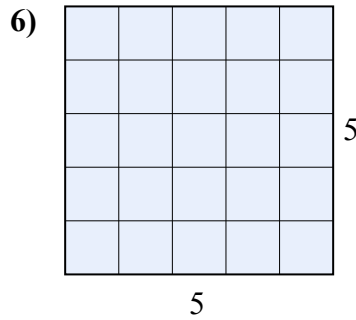
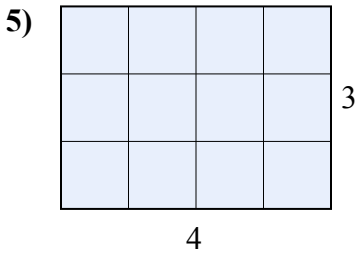
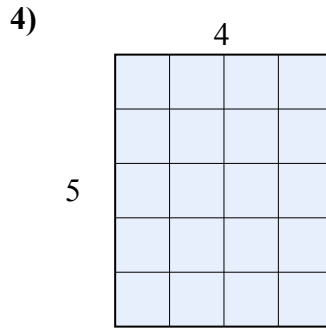
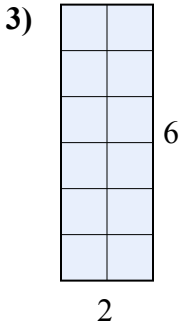
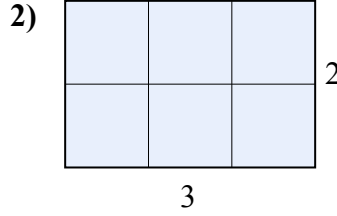
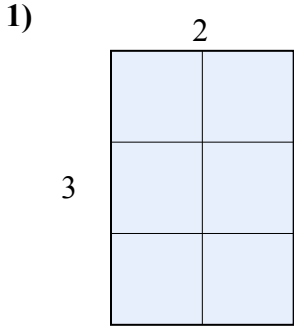


1. \_\_\_\_\_
2. \_\_\_\_\_
3. \_\_\_\_\_
4. \_\_\_\_\_
5. \_\_\_\_\_
6. \_\_\_\_\_
7. \_\_\_\_\_
8. \_\_\_\_\_
9. \_\_\_\_\_
10. \_\_\_\_\_



Tìm diện tích hình chữ nhật tính bằng ô gạch lát. Cái đầu tiên chia ô để bạn hình dung.

**Câu trả lời**



1. 6

2. 6

3. 12

4. 20

5. 12

6. 25

7. 8

8. 12

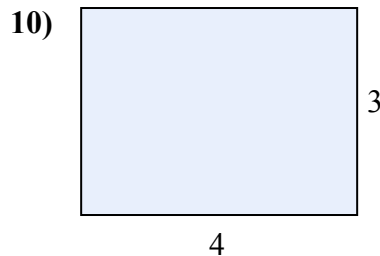
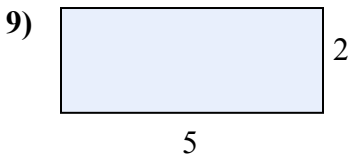
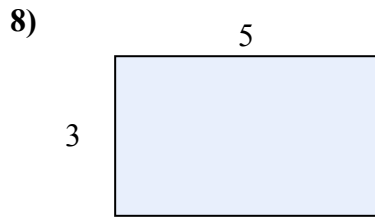
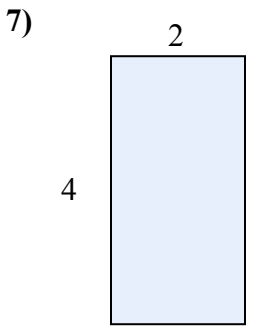

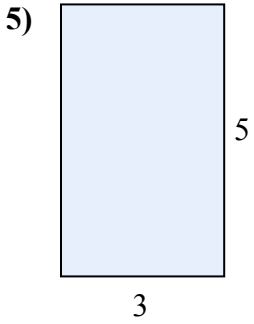
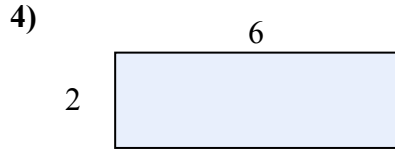
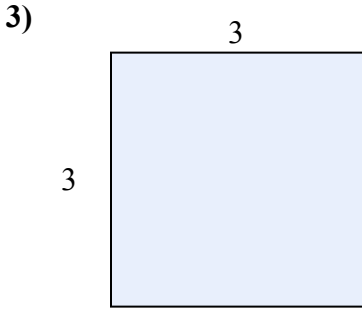
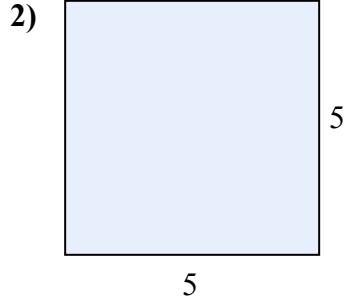
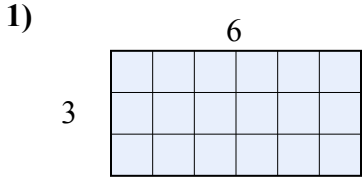
9. 8

10. 15



Tìm diện tích hình chữ nhật tính bằng ô gạch lát. Cái đầu tiên chia ô để bạn hình dung.

**Câu trả lời**

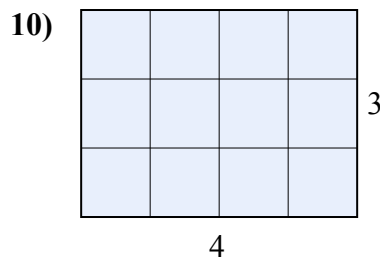
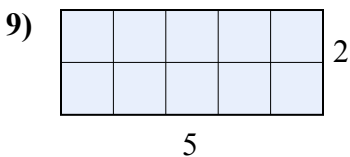
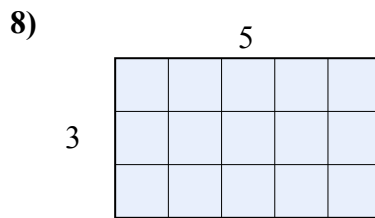
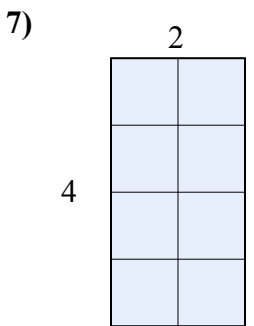
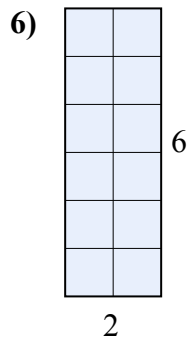
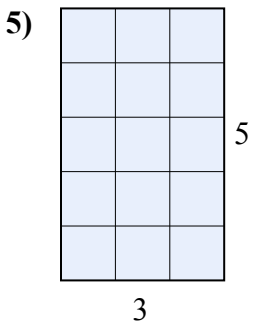
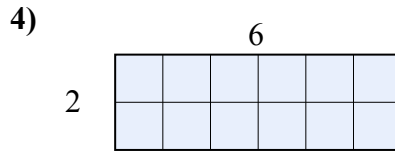
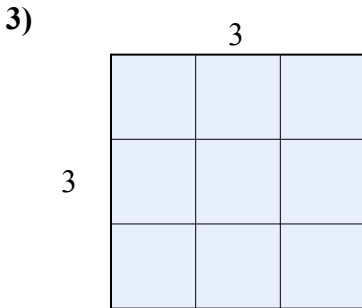
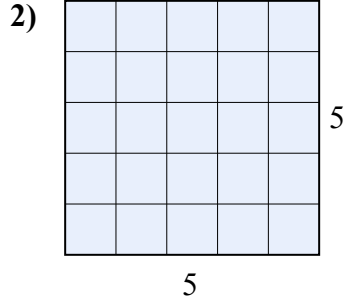
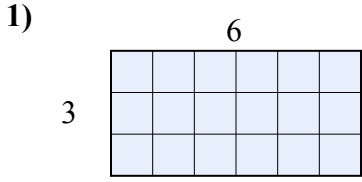


1. \_\_\_\_\_
2. \_\_\_\_\_
3. \_\_\_\_\_
4. \_\_\_\_\_
5. \_\_\_\_\_
6. \_\_\_\_\_
7. \_\_\_\_\_
8. \_\_\_\_\_
9. \_\_\_\_\_
10. \_\_\_\_\_



Tìm diện tích hình chữ nhật tính bằng ô gạch lát. Cái đầu tiên chia ô để bạn hình dung.

**Câu trả lời**



1. **18**

2. **25**

3. **9**

4. **12**

5. **15**

6. **12**

7. **8**

8. **15**

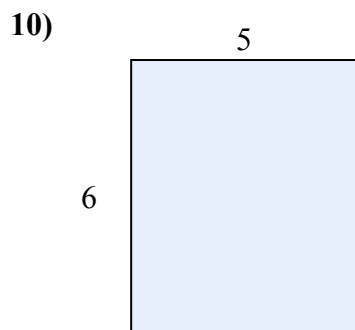
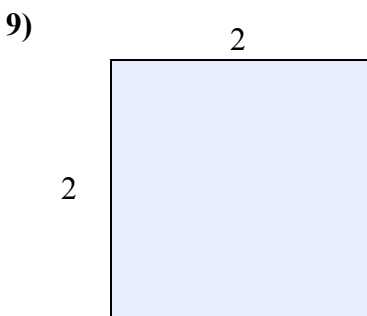
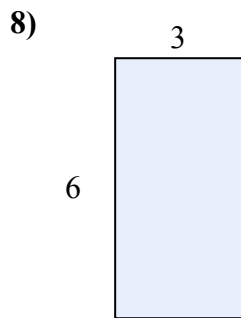
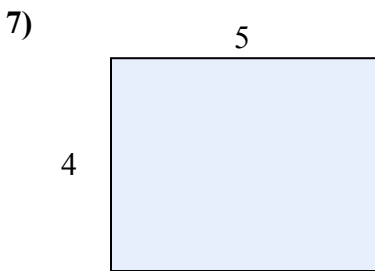
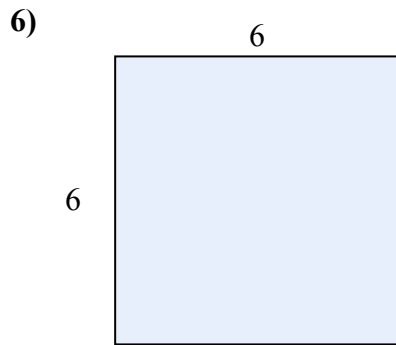
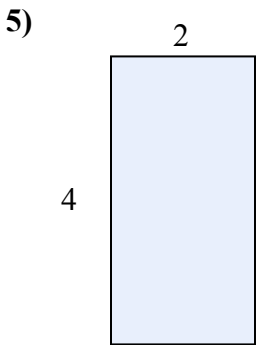
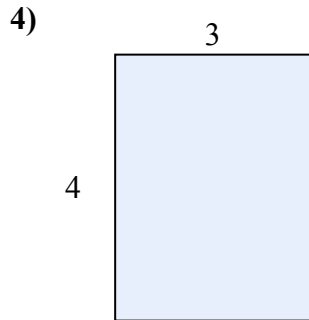
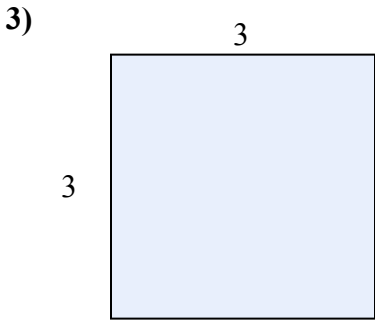
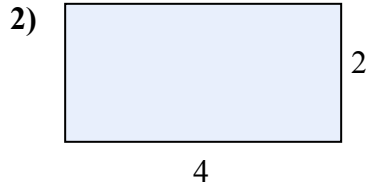
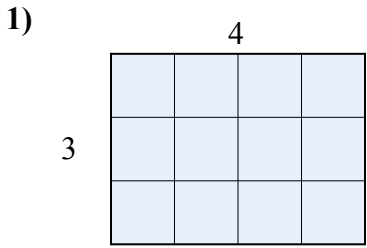
9. **10**

10. **12**



Tìm diện tích hình chữ nhật tính bằng ô gạch lát. Cái đầu tiên chia ô để bạn hình dung.

**Câu trả lời**

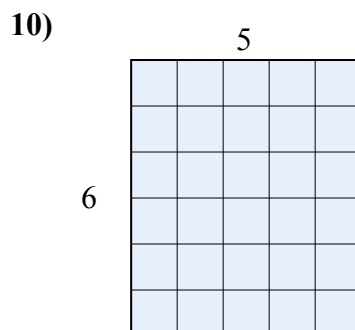
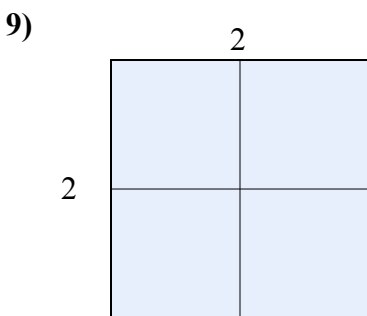
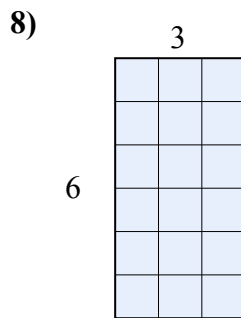
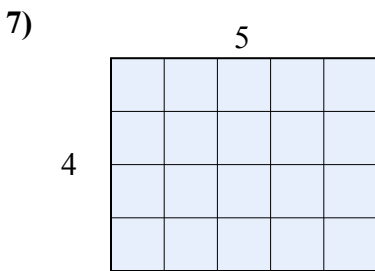
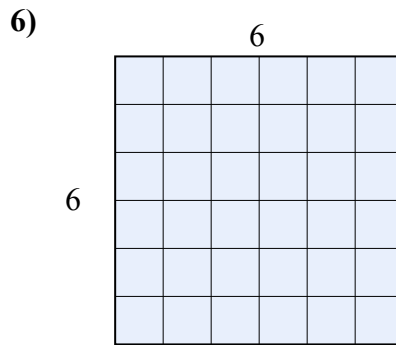
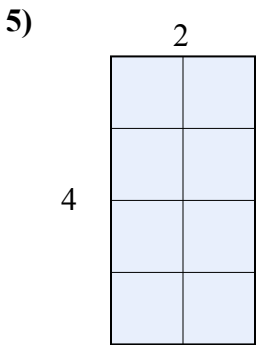
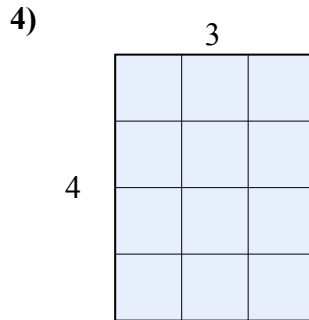
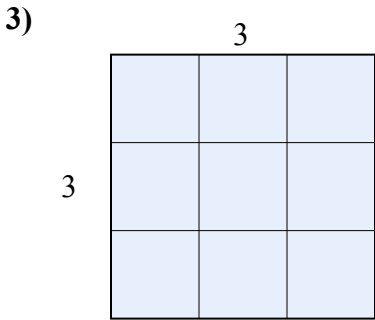
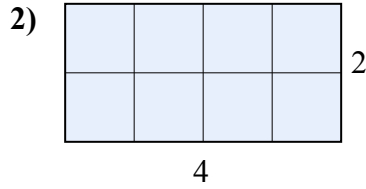
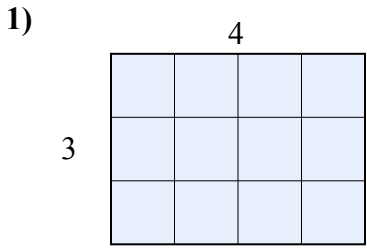


1. \_\_\_\_\_
2. \_\_\_\_\_
3. \_\_\_\_\_
4. \_\_\_\_\_
5. \_\_\_\_\_
6. \_\_\_\_\_
7. \_\_\_\_\_
8. \_\_\_\_\_
9. \_\_\_\_\_
10. \_\_\_\_\_



Tìm diện tích hình chữ nhật tính bằng ô gạch lát. Cái đầu tiên chia ô để bạn hình dung.

**Câu trả lời**



1. 12

2. 8

3. 9

4. 12

5. 8

6. 36

7. 20

8. 18

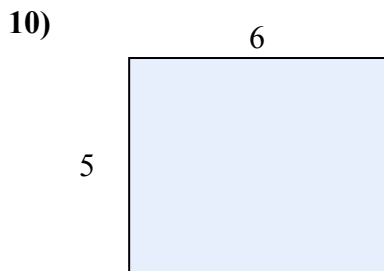
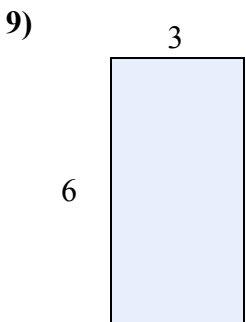
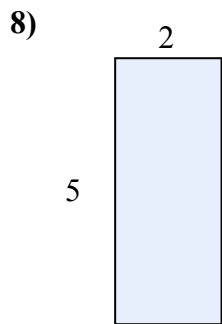
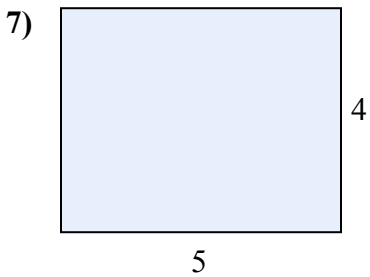
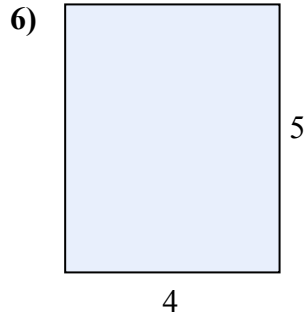
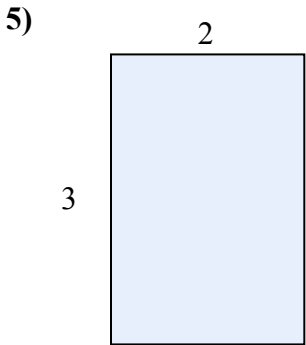
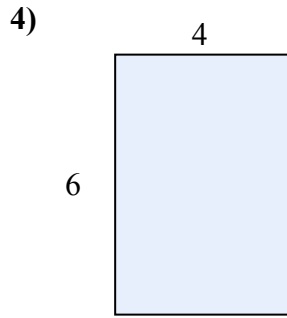
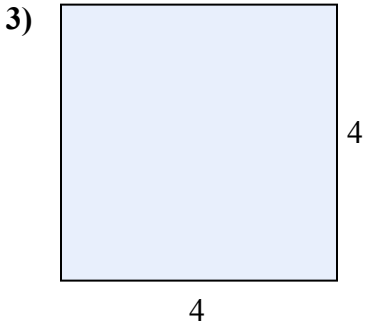
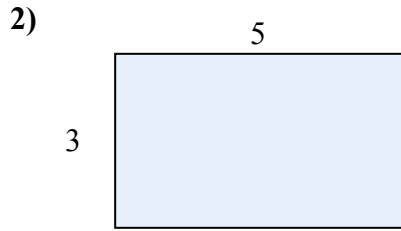
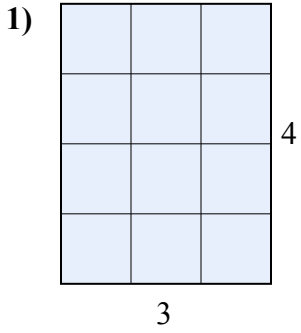
9. 4

10. 30



Tìm diện tích hình chữ nhật tính bằng ô gạch lát. Cái đầu tiên chia ô để bạn hình dung.

**Câu trả lời**

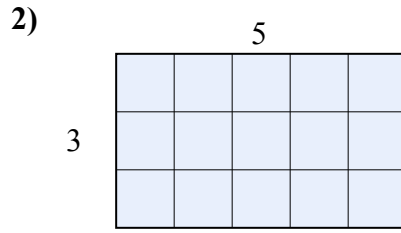
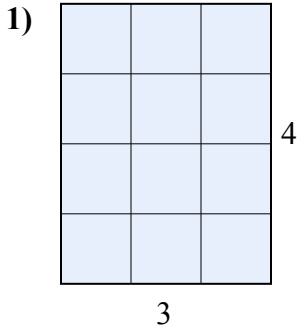


1. \_\_\_\_\_
2. \_\_\_\_\_
3. \_\_\_\_\_
4. \_\_\_\_\_
5. \_\_\_\_\_
6. \_\_\_\_\_
7. \_\_\_\_\_
8. \_\_\_\_\_
9. \_\_\_\_\_
10. \_\_\_\_\_

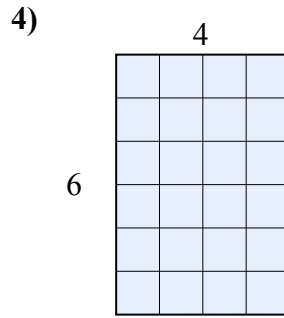
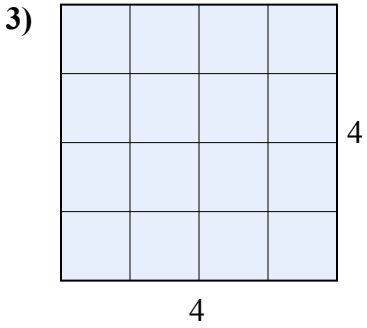


Tìm diện tích hình chữ nhật tính bằng ô gạch lát. Cái đầu tiên chia ô để bạn hình dung.

**Câu trả lời**



1. **12**



2. **15**

3. **16**

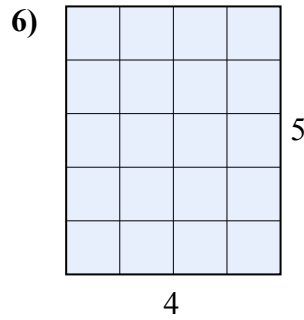
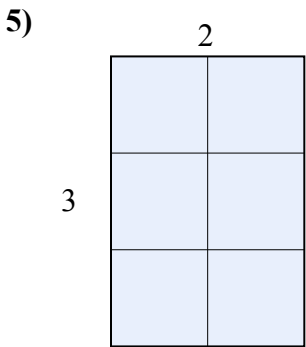
4. **24**

5. **6**

6. **20**

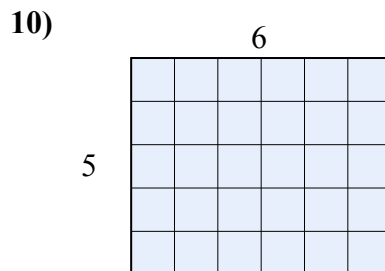
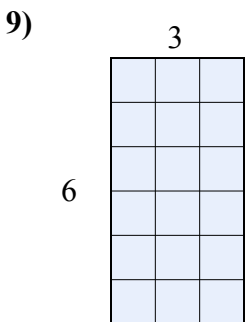
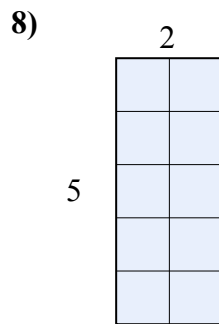
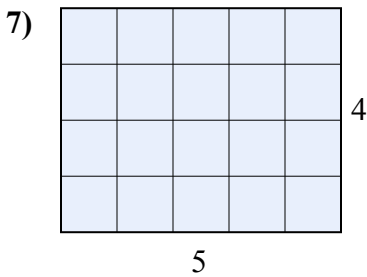
7. **20**

8. **10**



9. **18**

10. **30**

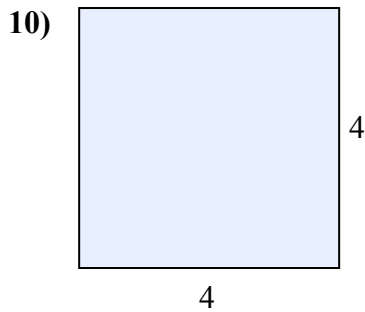
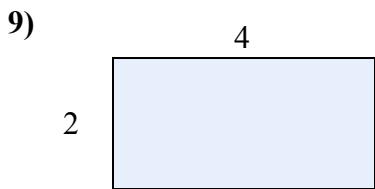

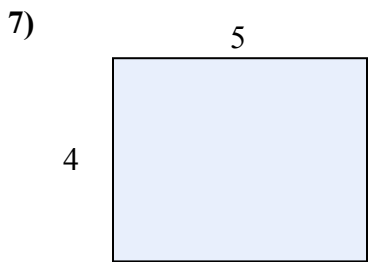
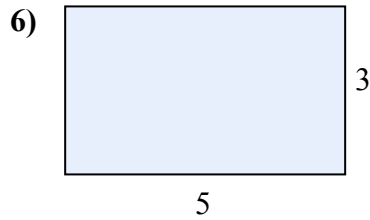
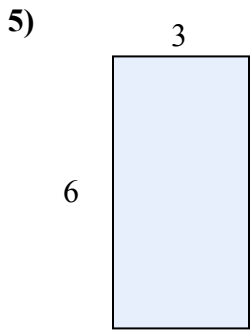
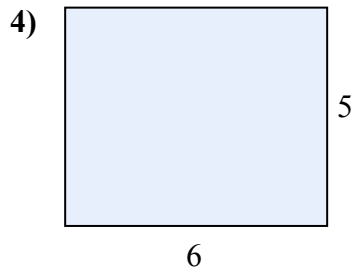
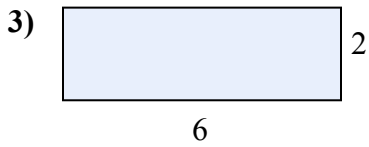
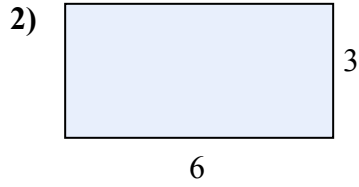
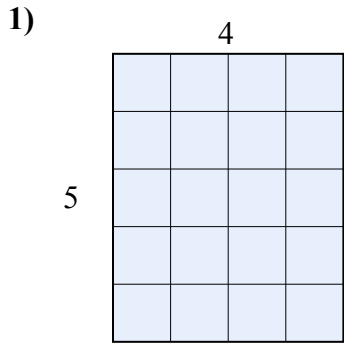






Tìm diện tích hình chữ nhật tính bằng ô gạch lát. Cái đầu tiên chia ô để bạn hình dung.

**Câu trả lời**

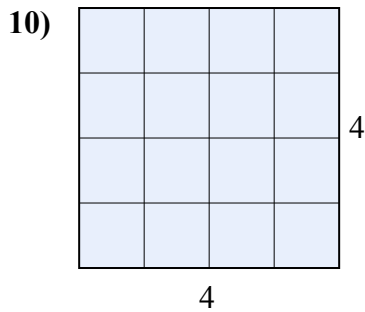
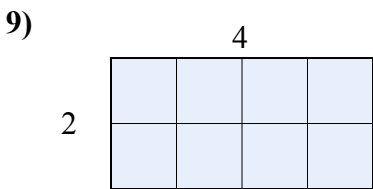
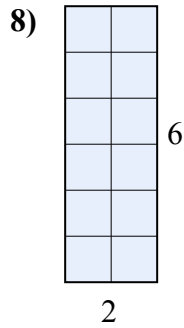
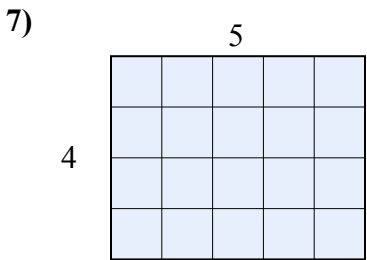
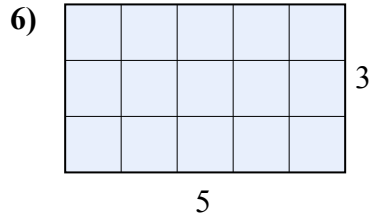
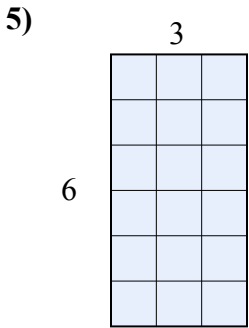
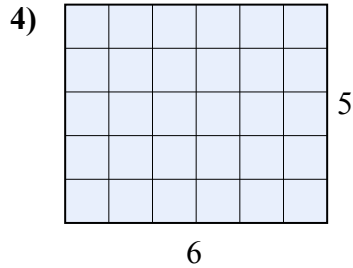
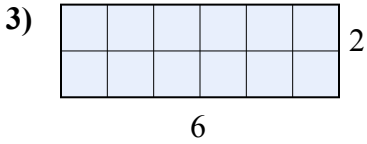
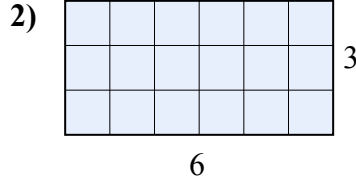
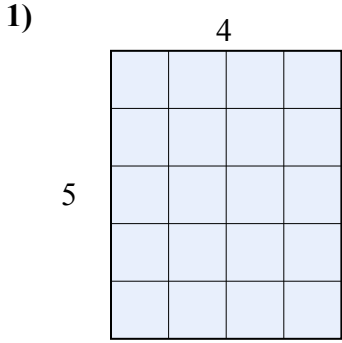


1. \_\_\_\_\_
2. \_\_\_\_\_
3. \_\_\_\_\_
4. \_\_\_\_\_
5. \_\_\_\_\_
6. \_\_\_\_\_
7. \_\_\_\_\_
8. \_\_\_\_\_
9. \_\_\_\_\_
10. \_\_\_\_\_



Tìm diện tích hình chữ nhật tính bằng ô gạch lát. Cái đầu tiên chia ô để bạn hình dung.

**Câu trả lời**



1. 20

2. 18

3. 12

4. 30

5. 18

6. 15

7. 20

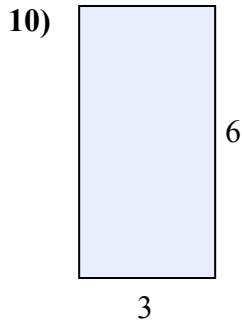
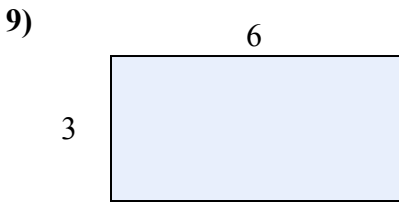
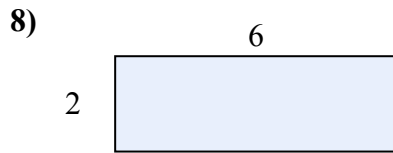
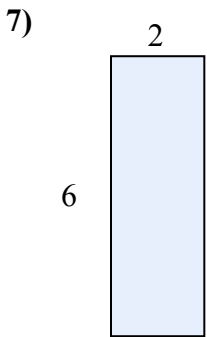
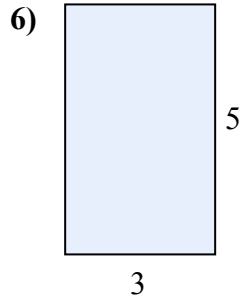
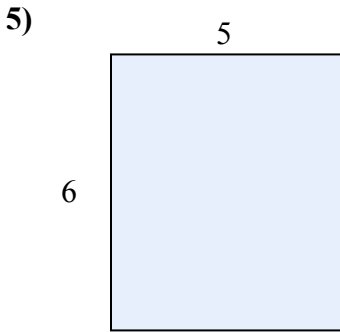
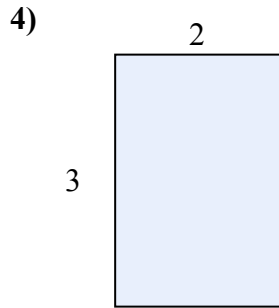
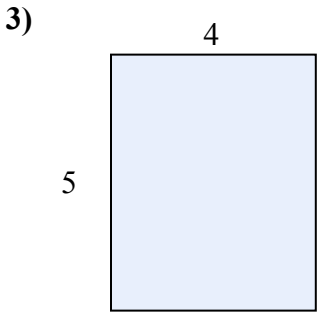
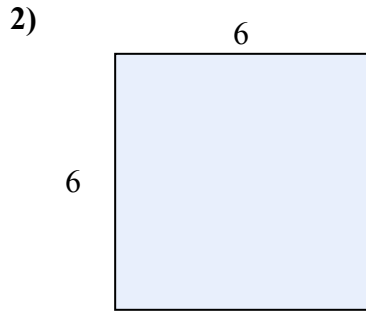
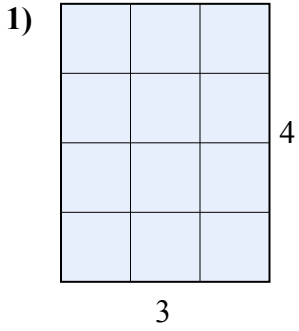
8. 12

9. 8

10. 16



Tìm diện tích hình chữ nhật tính bằng ô gạch lát. Cái đầu tiên chia ô để bạn hình dung.



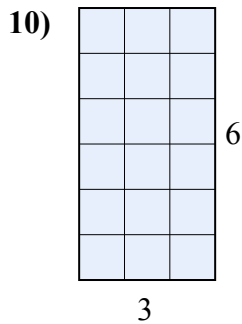
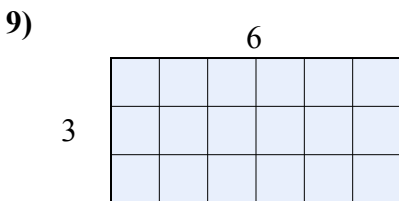
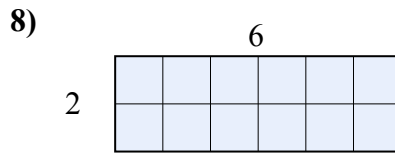
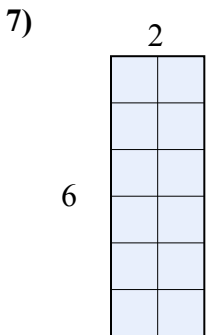
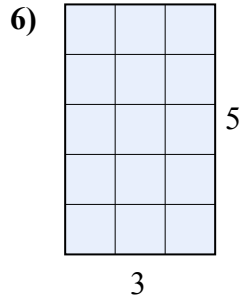
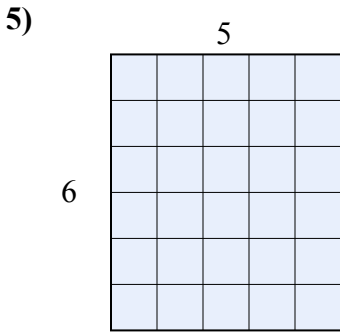
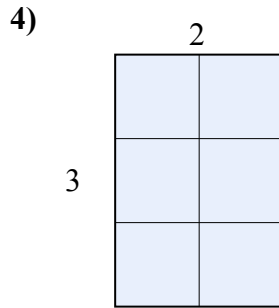
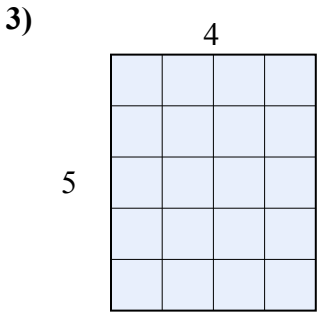
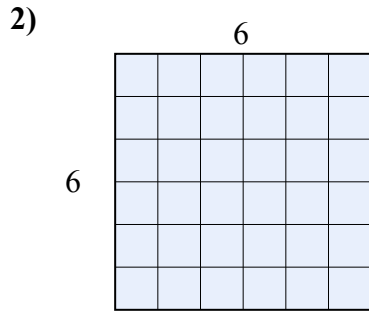
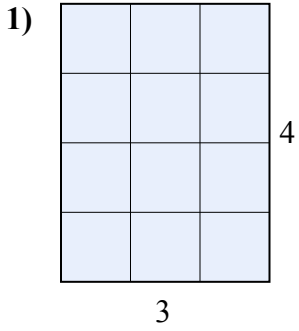
**Câu trả lời**

1. \_\_\_\_\_
2. \_\_\_\_\_
3. \_\_\_\_\_
4. \_\_\_\_\_
5. \_\_\_\_\_
6. \_\_\_\_\_
7. \_\_\_\_\_
8. \_\_\_\_\_
9. \_\_\_\_\_
10. \_\_\_\_\_



Tìm diện tích hình chữ nhật tính bằng ô gạch lát. Cái đầu tiên chia ô để bạn hình dung.

**Câu trả lời**



1. **12**

2. **36**

3. **20**

4. **6**

5. **30**

6. **15**

7. **12**

8. **12**

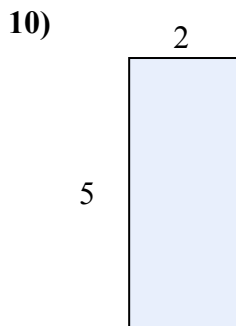
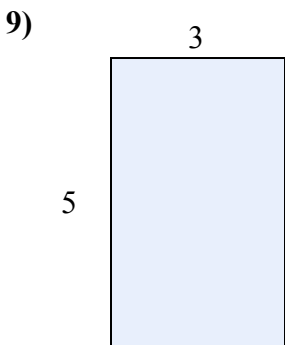
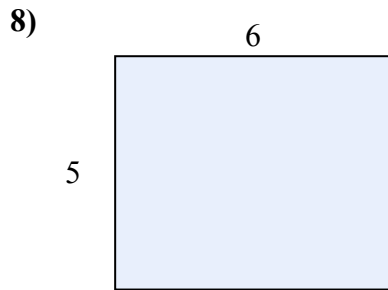
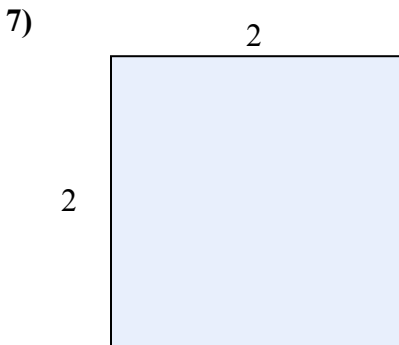
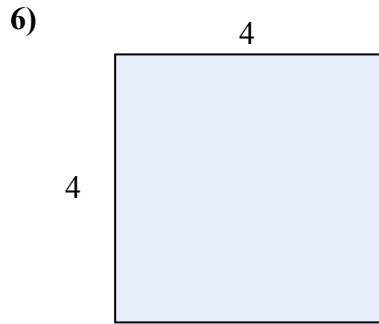
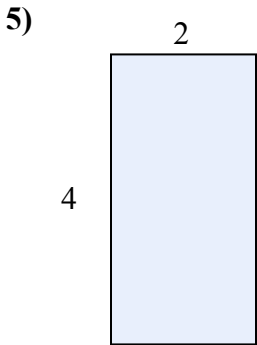

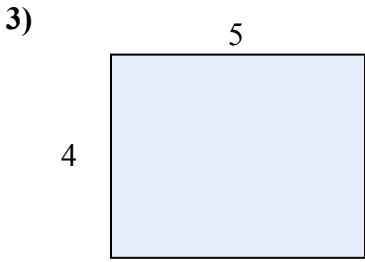
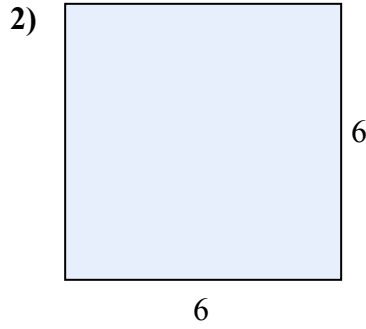
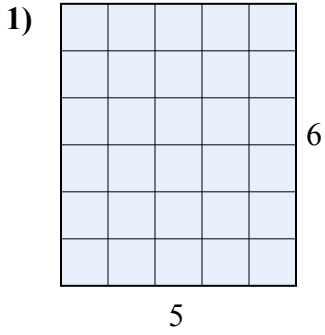
9. **18**

10. **18**



Tìm diện tích hình chữ nhật tính bằng ô gạch lát. Cái đầu tiên chia ô để bạn hình dung.

**Câu trả lời**

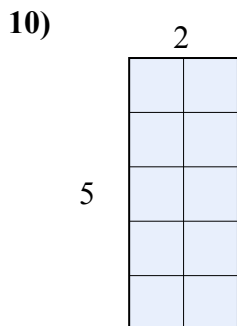
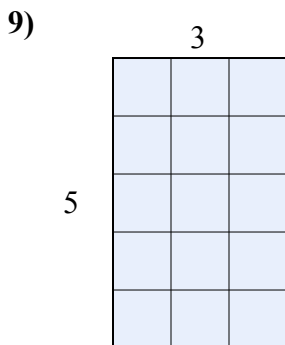
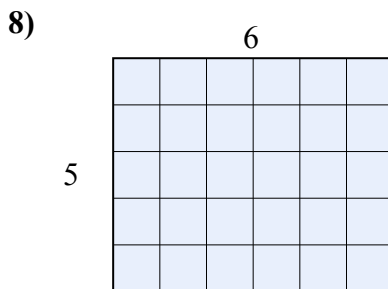
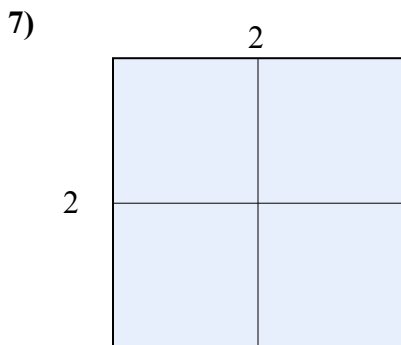
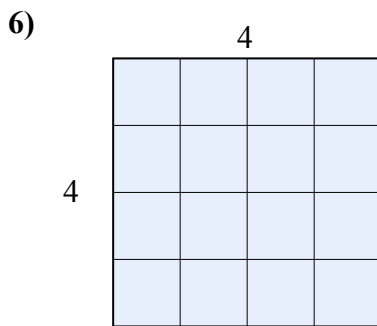
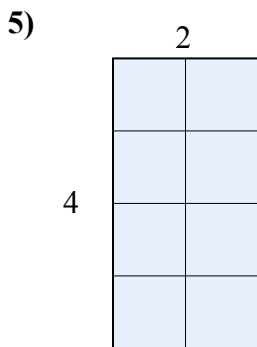
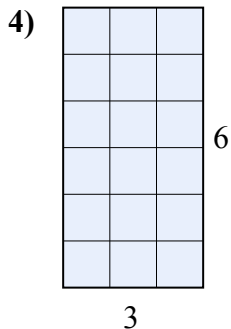
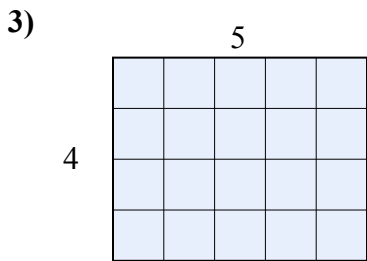
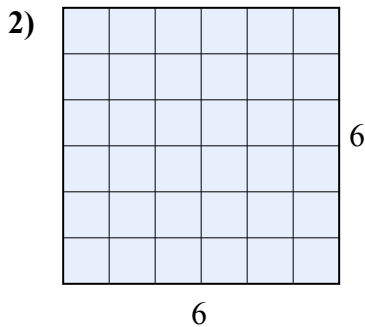
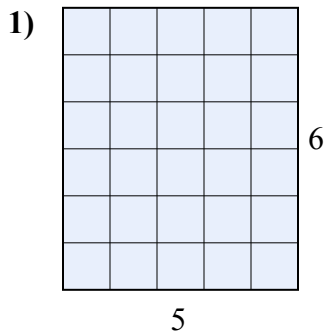


1. \_\_\_\_\_
2. \_\_\_\_\_
3. \_\_\_\_\_
4. \_\_\_\_\_
5. \_\_\_\_\_
6. \_\_\_\_\_
7. \_\_\_\_\_
8. \_\_\_\_\_
9. \_\_\_\_\_
10. \_\_\_\_\_



Tìm diện tích hình chữ nhật tính bằng ô gạch lát. Cái đầu tiên chia ô để bạn hình dung.

**Câu trả lời**



1. **30**

2. **36**

3. **20**

4. **18**

5. **8**

6. **16**

7. **4**

8. **30**

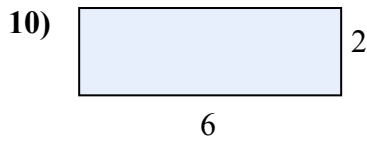
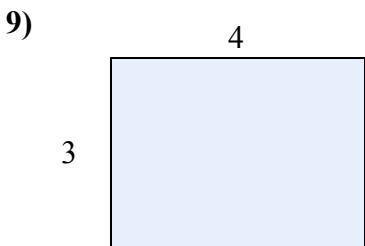
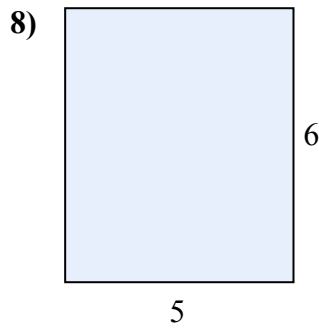
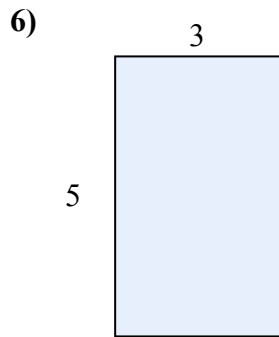
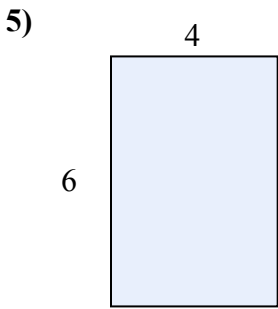
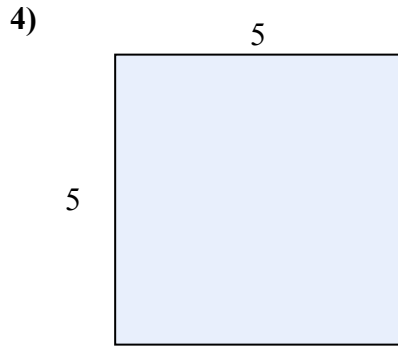
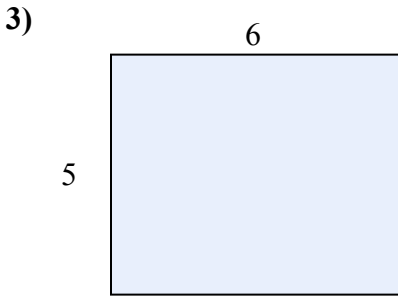
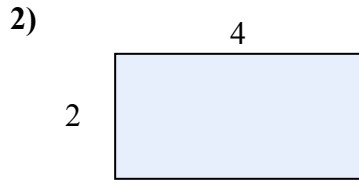
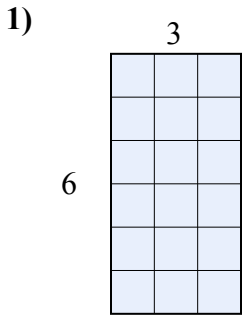
9. **15**

10. **10**



Tìm diện tích hình chữ nhật tính bằng ô gạch lát. Cái đầu tiên chia ô để bạn hình dung.

**Câu trả lời**

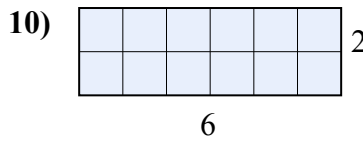
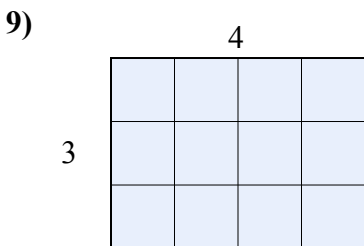
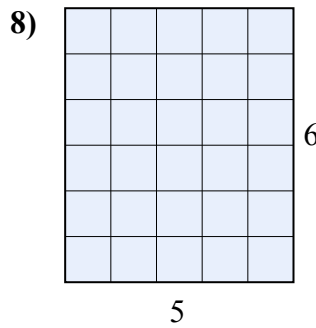
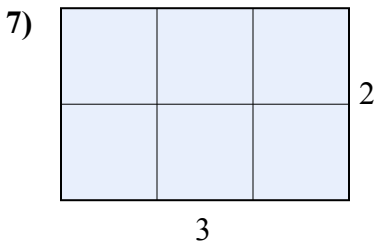
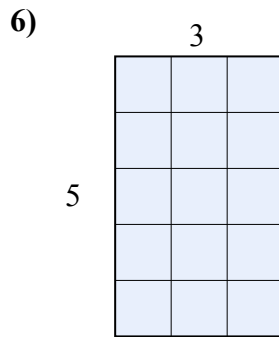
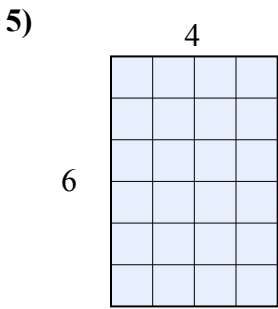
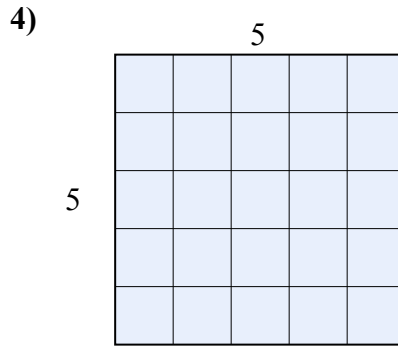
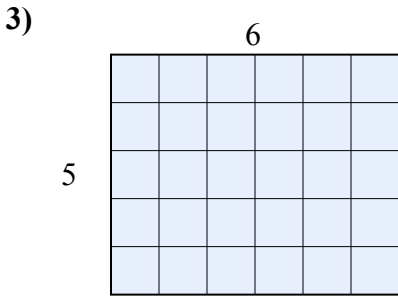
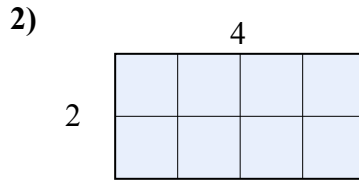
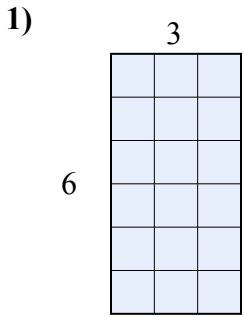


1. \_\_\_\_\_
2. \_\_\_\_\_
3. \_\_\_\_\_
4. \_\_\_\_\_
5. \_\_\_\_\_
6. \_\_\_\_\_
7. \_\_\_\_\_
8. \_\_\_\_\_
9. \_\_\_\_\_
10. \_\_\_\_\_



Tìm diện tích hình chữ nhật tính bằng ô gạch lát. Cái đầu tiên chia ô để bạn hình dung.

**Câu trả lời**



1. 18

2. 8

3. 30

4. 25

5. 24

6. 15

7. 6

8. 30

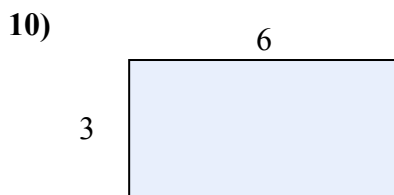
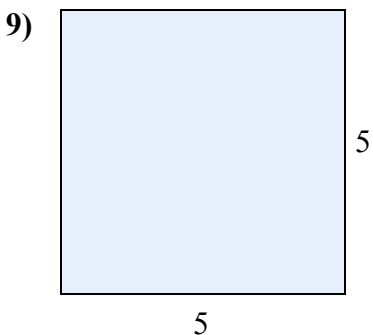
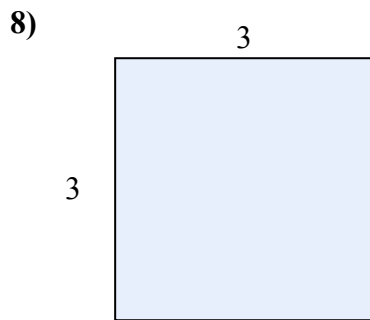
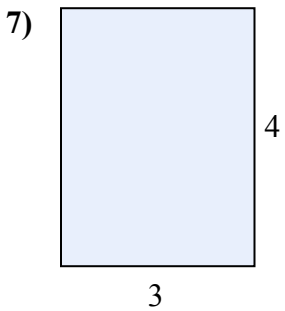
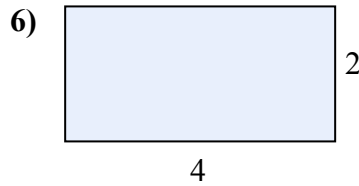

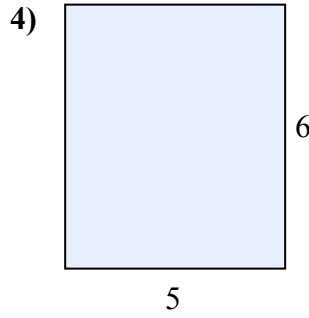
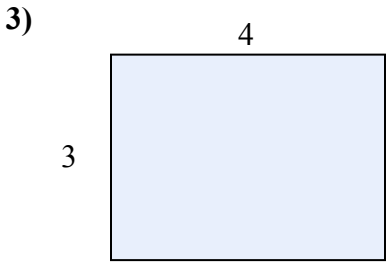
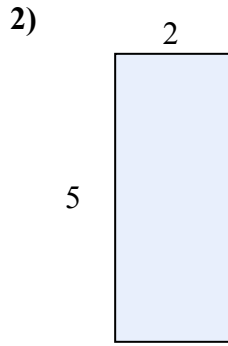
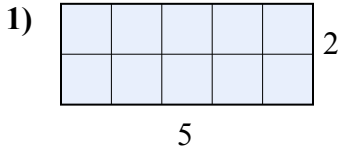
9. 12

10. 12





Tìm diện tích hình chữ nhật tính bằng ô gạch lát. Cái đầu tiên chia ô để bạn hình dung.



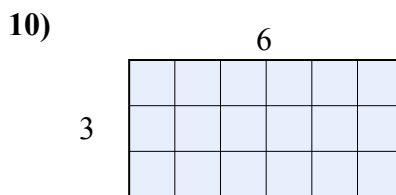
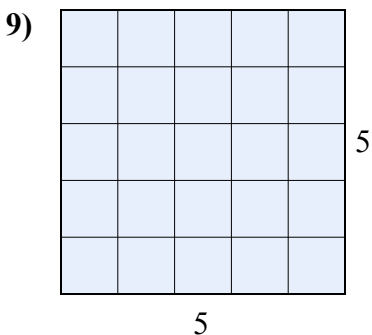
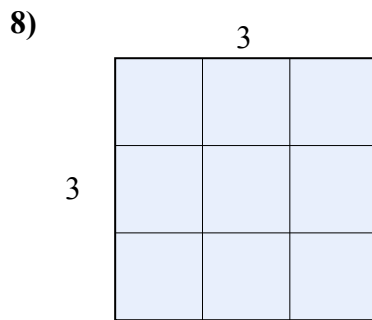
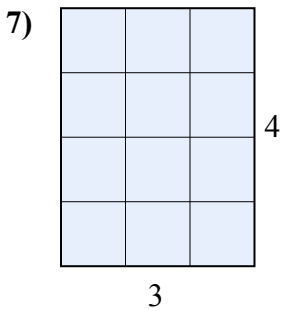
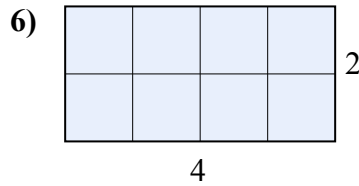
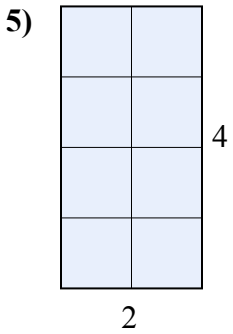
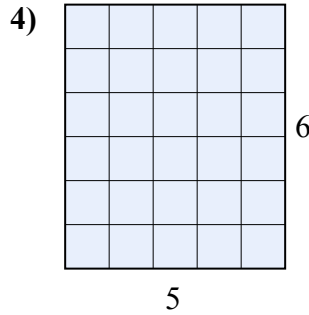
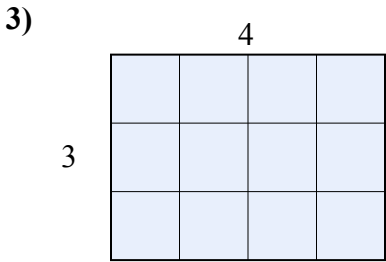
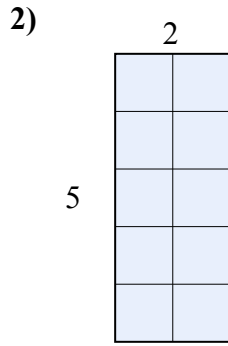
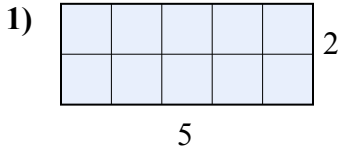
**Câu trả lời**

1. \_\_\_\_\_
2. \_\_\_\_\_
3. \_\_\_\_\_
4. \_\_\_\_\_
5. \_\_\_\_\_
6. \_\_\_\_\_
7. \_\_\_\_\_
8. \_\_\_\_\_
9. \_\_\_\_\_
10. \_\_\_\_\_



Tìm diện tích hình chữ nhật tính bằng ô gạch lát. Cái đầu tiên chia ô để bạn hình dung.

**Câu trả lời**



1. 10

2. 10

3. 12

4. 30

5. 8

6. 8

7. 12

8. 9

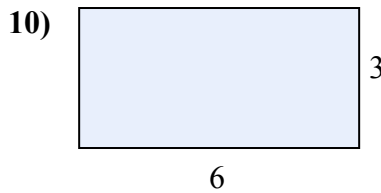
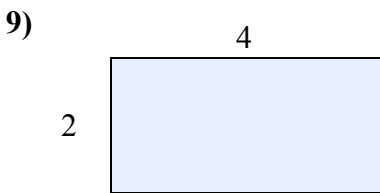
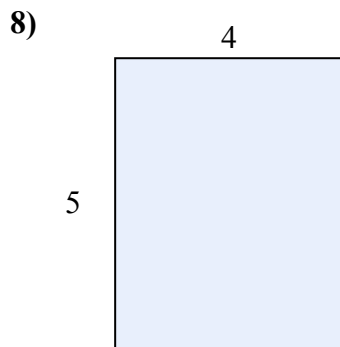
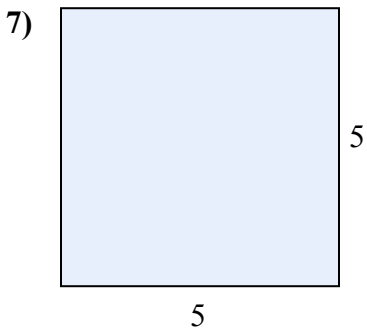
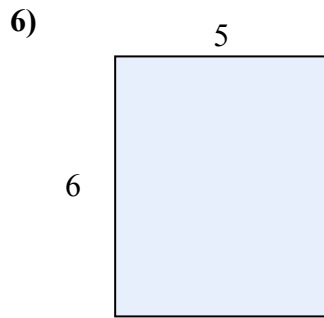
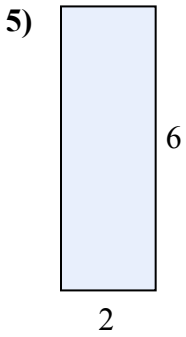
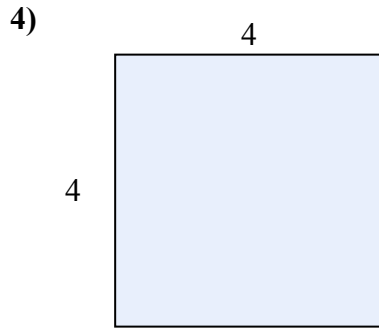
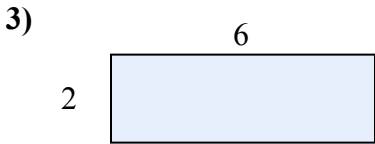
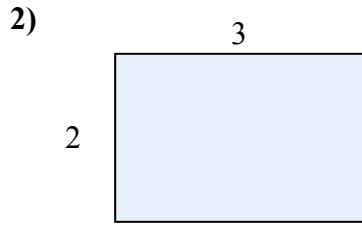
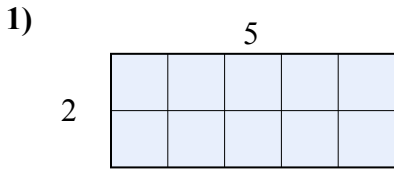
9. 25

10. 18



Tìm diện tích hình chữ nhật tính bằng ô gạch lát. Cái đầu tiên chia ô để bạn hình dung.

**Câu trả lời**

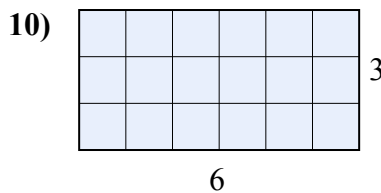
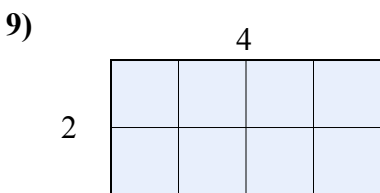
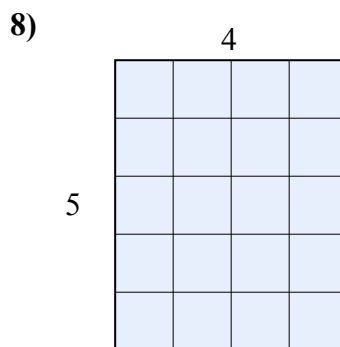
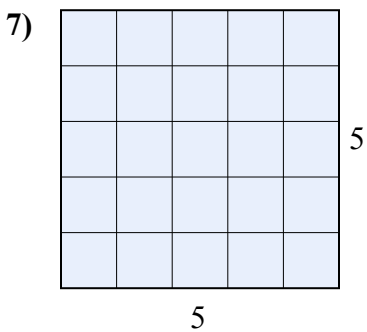
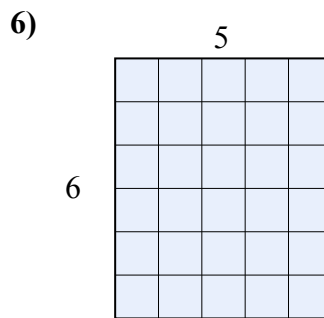
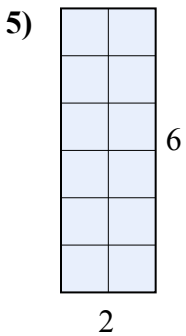
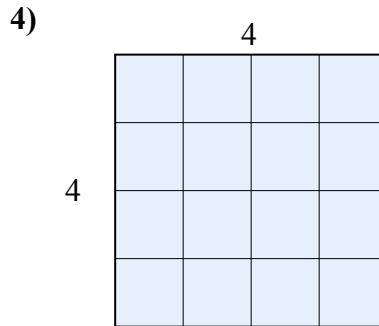
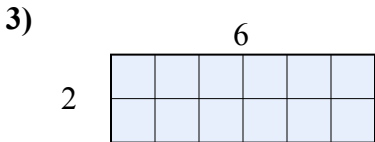
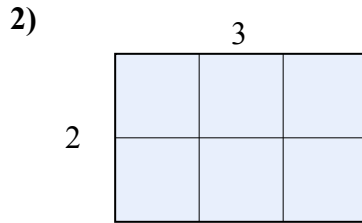
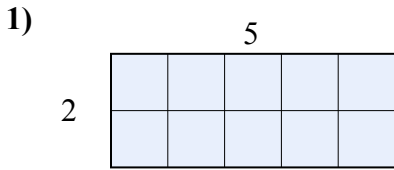


1. \_\_\_\_\_
2. \_\_\_\_\_
3. \_\_\_\_\_
4. \_\_\_\_\_
5. \_\_\_\_\_
6. \_\_\_\_\_
7. \_\_\_\_\_
8. \_\_\_\_\_
9. \_\_\_\_\_
10. \_\_\_\_\_



Tìm diện tích hình chữ nhật tính bằng ô gạch lát. Cái đầu tiên chia ô để bạn hình dung.

**Câu trả lời**



1. 10

2. 6

3. 12

4. 16

5. 12

6. 30

7. 25

8. 20

9. 8

10. 18