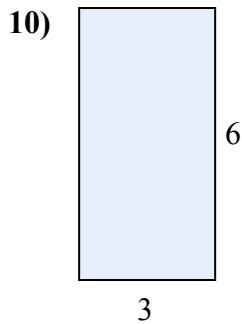
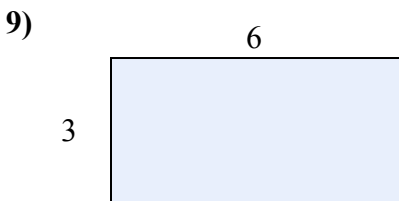
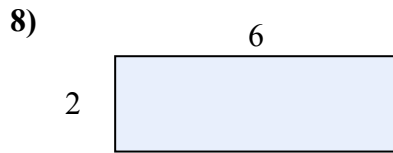
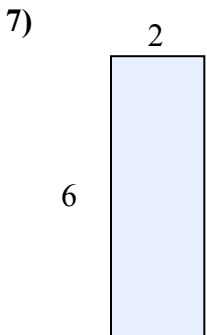
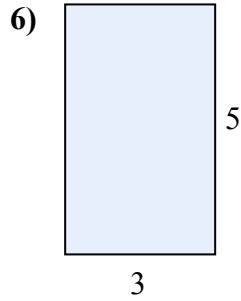
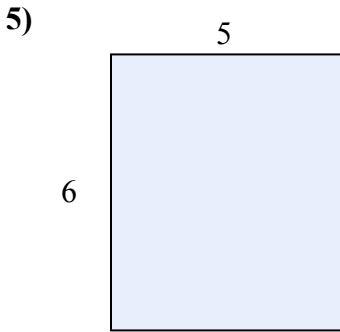
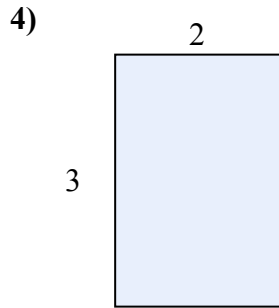
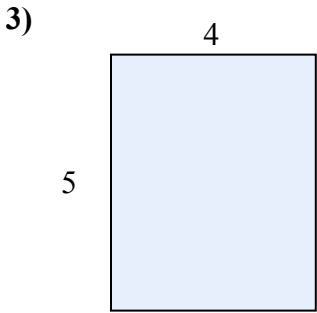
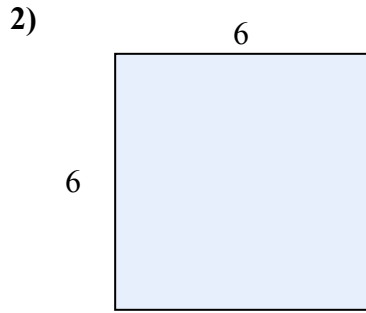
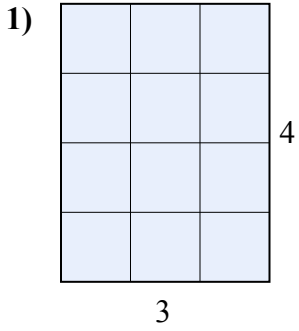




Tìm diện tích hình chữ nhật tính bằng ô gạch lát. Cái đầu tiên chia ô để bạn hình dung.



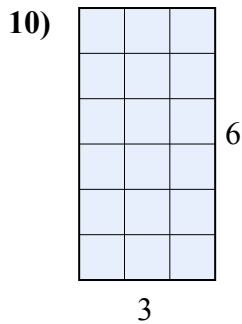
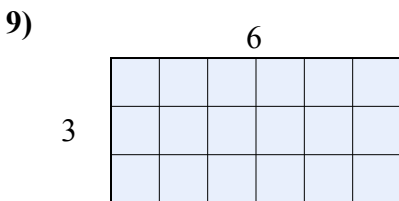
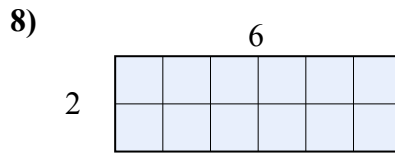
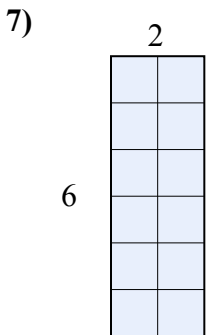
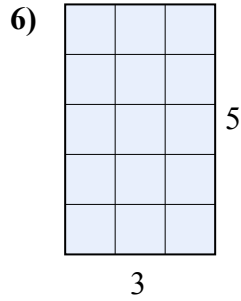
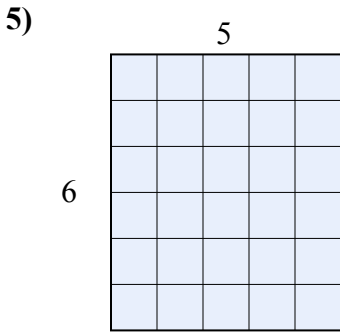
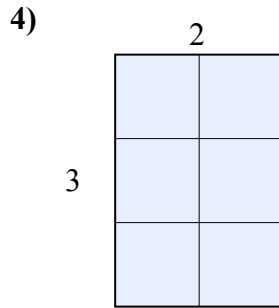
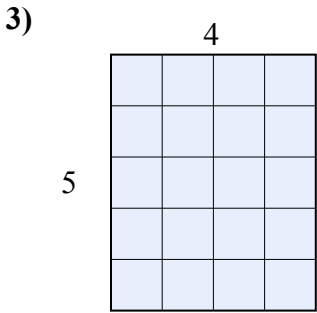
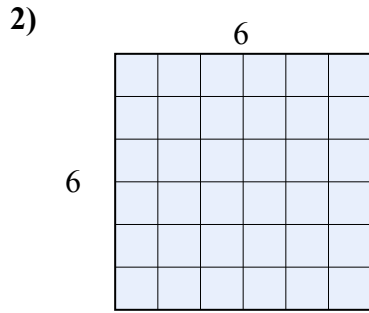
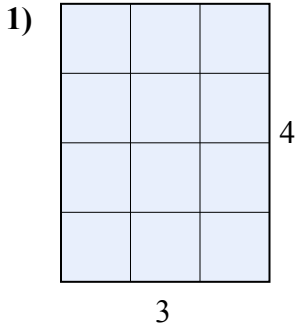
**Câu trả lời**

1. \_\_\_\_\_
2. \_\_\_\_\_
3. \_\_\_\_\_
4. \_\_\_\_\_
5. \_\_\_\_\_
6. \_\_\_\_\_
7. \_\_\_\_\_
8. \_\_\_\_\_
9. \_\_\_\_\_
10. \_\_\_\_\_



Tìm diện tích hình chữ nhật tính bằng ô gạch lát. Cái đầu tiên chia ô để bạn hình dung.

**Câu trả lời**



1. 12

2. 36

3. 20

4. 6

5. 30

6. 15

7. 12

8. 12

9. 18

10. 18