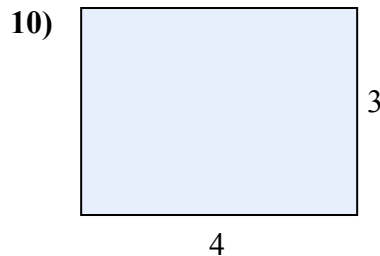
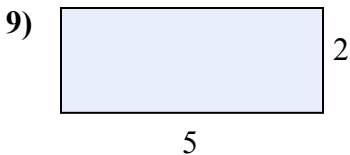
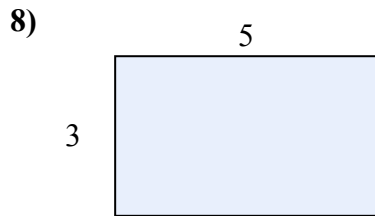
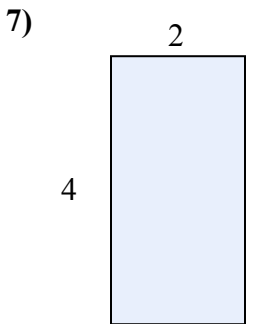
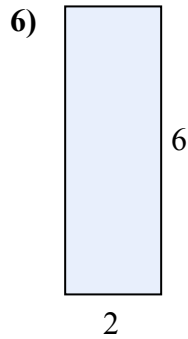
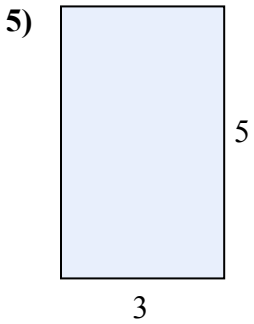
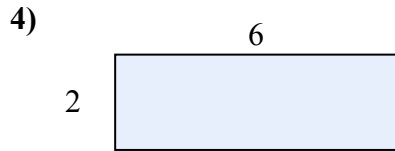
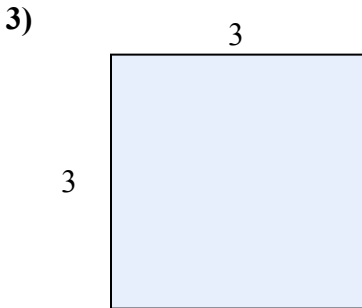
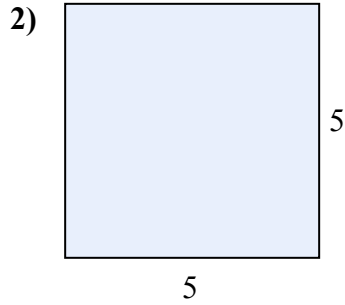
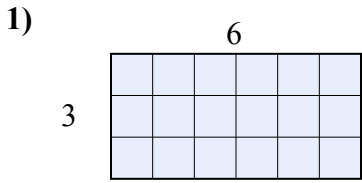




Tìm diện tích hình chữ nhật tính bằng ô gạch lát. Cái đầu tiên chia ô để bạn hình dung.

**Câu trả lời**

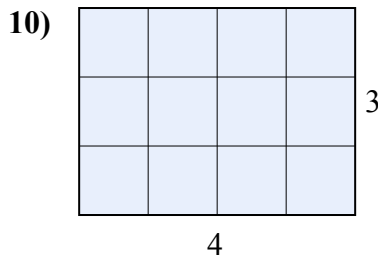
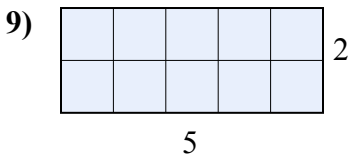
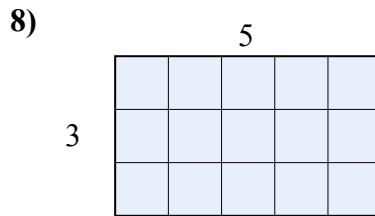
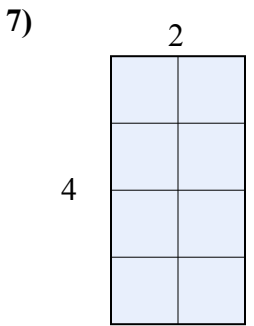
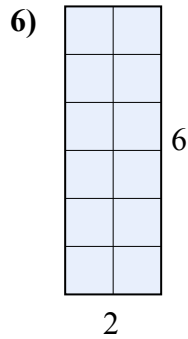
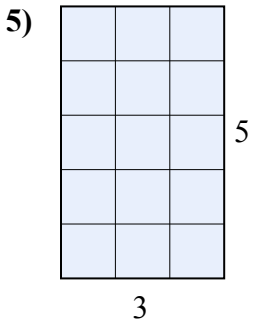
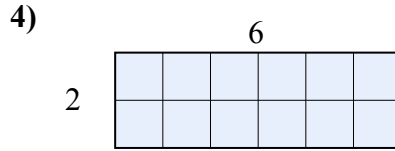
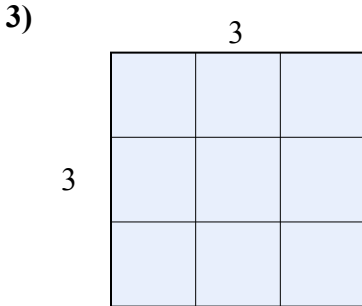
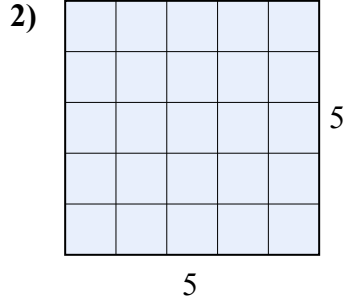
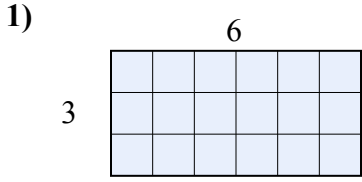


1. \_\_\_\_\_
2. \_\_\_\_\_
3. \_\_\_\_\_
4. \_\_\_\_\_
5. \_\_\_\_\_
6. \_\_\_\_\_
7. \_\_\_\_\_
8. \_\_\_\_\_
9. \_\_\_\_\_
10. \_\_\_\_\_



Tìm diện tích hình chữ nhật tính bằng ô gạch lát. Cái đầu tiên chia ô để bạn hình dung.

**Câu trả lời**



1. 18

2. 25

3. 9

4. 12

5. 15

6. 12

7. 8

8. 15

9. 10

10. 12