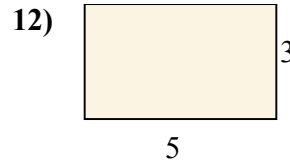
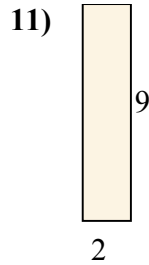
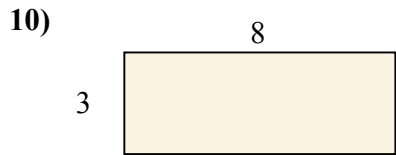
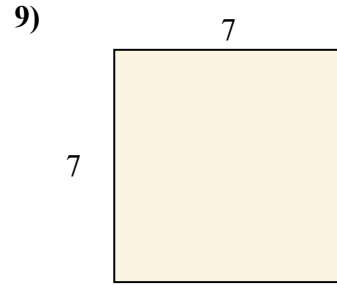
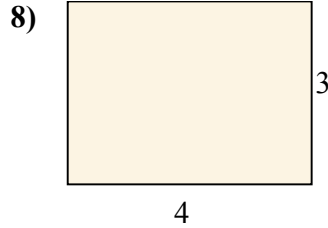
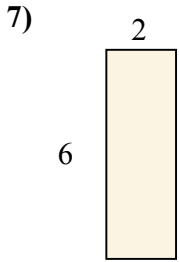
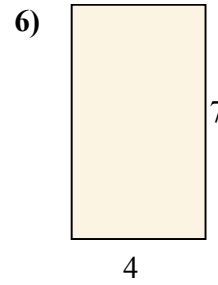
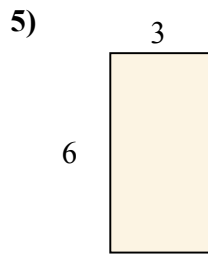
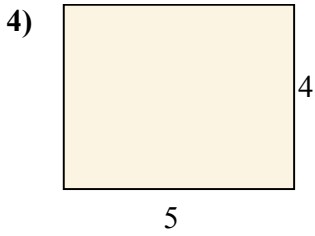
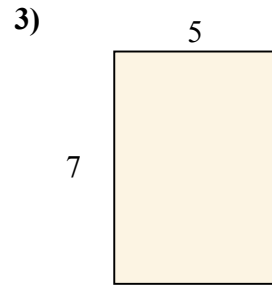
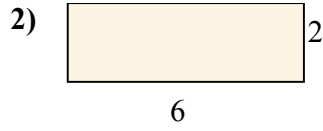
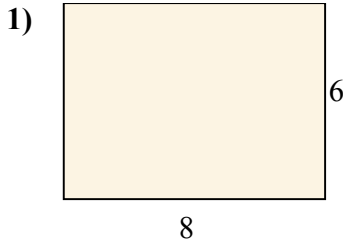




Tìm diện tích (tính bằng cm) của các hình chữ nhật.

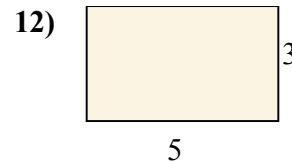
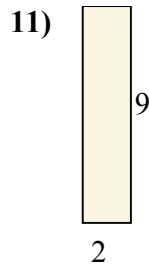
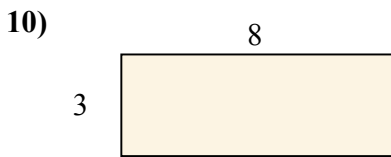
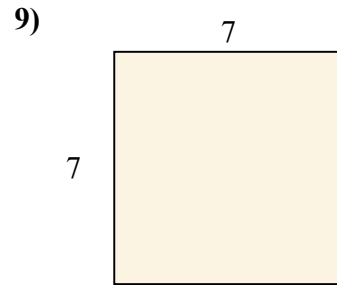
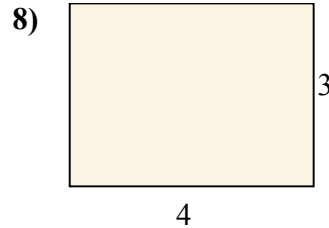
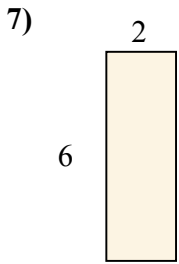
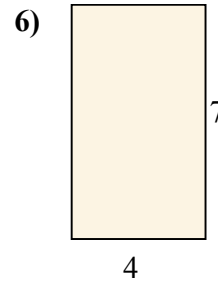
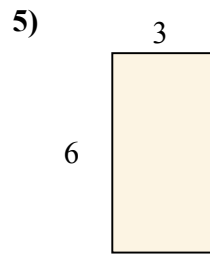
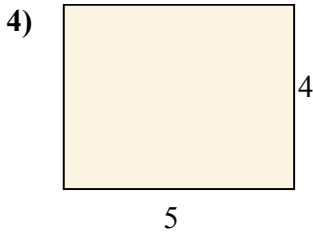
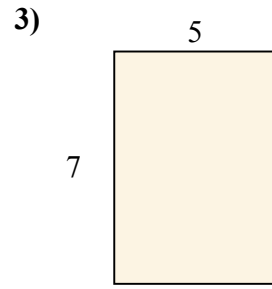
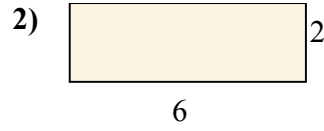
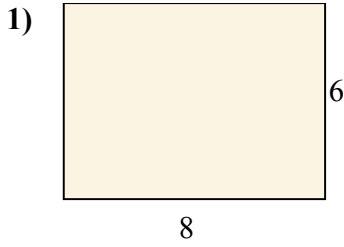


**Câu trả lời**

1. \_\_\_\_\_
2. \_\_\_\_\_
3. \_\_\_\_\_
4. \_\_\_\_\_
5. \_\_\_\_\_
6. \_\_\_\_\_
7. \_\_\_\_\_
8. \_\_\_\_\_
9. \_\_\_\_\_
10. \_\_\_\_\_
11. \_\_\_\_\_
12. \_\_\_\_\_



Tìm diện tích (tính bằng cm) của các hình chữ nhật.



**Câu trả lời**

1. 48

2. 12

3. 35

4. 20

5. 18

6. 28

7. 12

8. 12

9. 49

10. 24

11. 18

12. 15