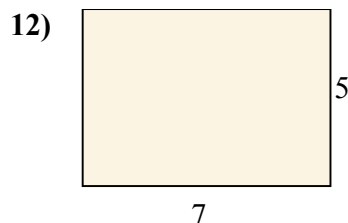
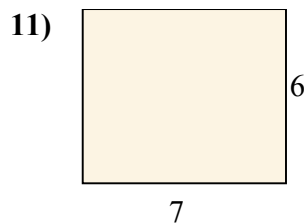
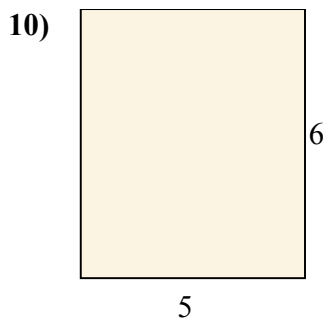
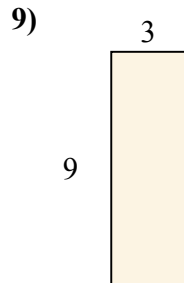
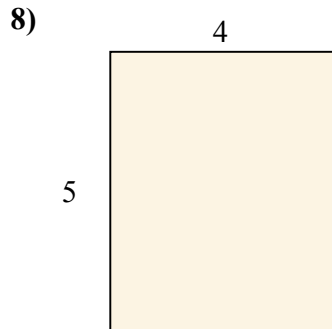

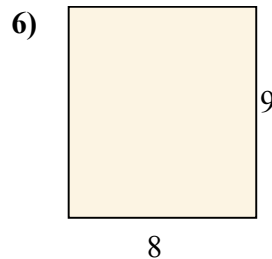
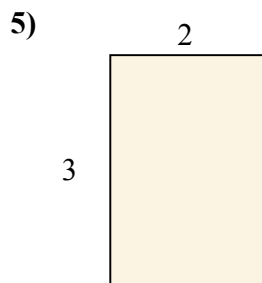
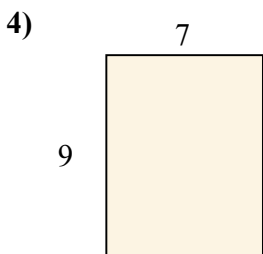
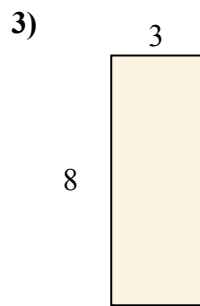
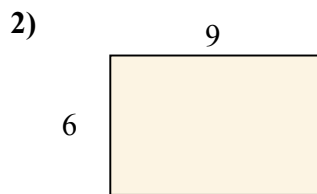
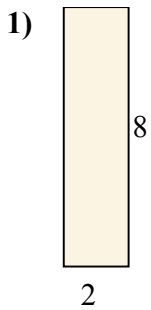




Tìm diện tích (tính bằng cm) của các hình chữ nhật.

**Câu trả lời**

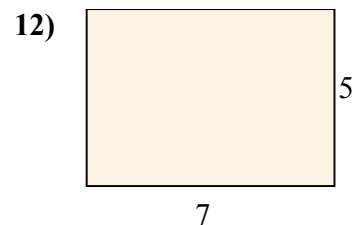
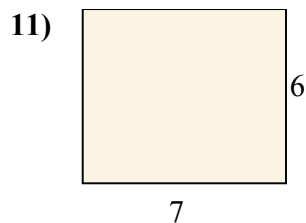
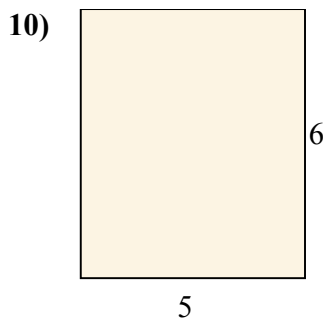
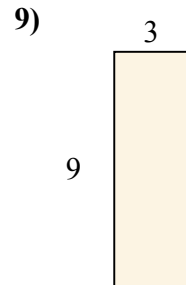
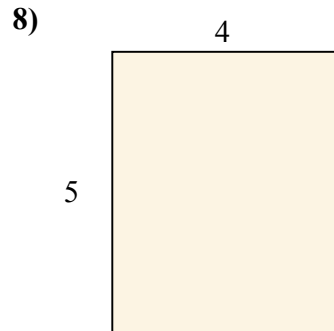
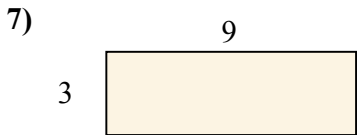
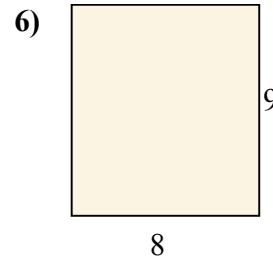
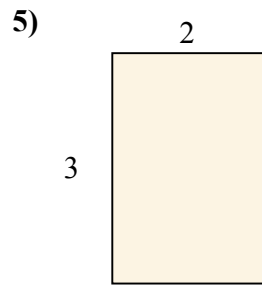
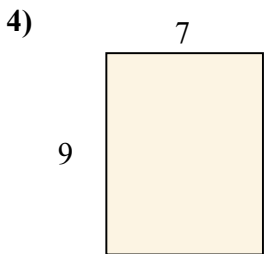
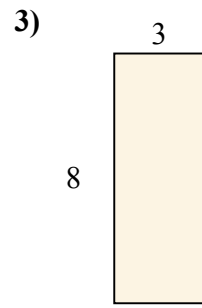
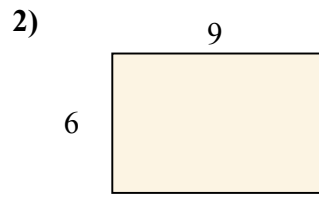
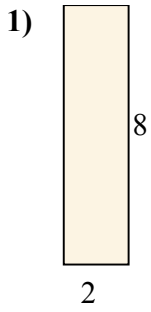


1. \_\_\_\_\_
2. \_\_\_\_\_
3. \_\_\_\_\_
4. \_\_\_\_\_
5. \_\_\_\_\_
6. \_\_\_\_\_
7. \_\_\_\_\_
8. \_\_\_\_\_
9. \_\_\_\_\_
10. \_\_\_\_\_
11. \_\_\_\_\_
12. \_\_\_\_\_



Tìm diện tích (tính bằng cm) của các hình chữ nhật.

**Câu trả lời**



1. 16

2. 54

3. 24

4. 63

5. 6

6. 72

7. 27

8. 20

9. 27

10. 30

11. 42

12. 35