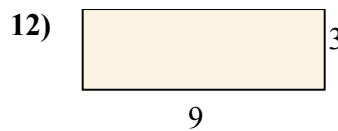
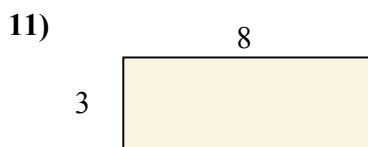
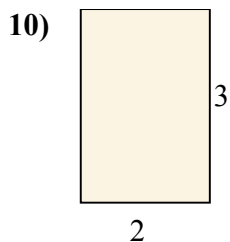
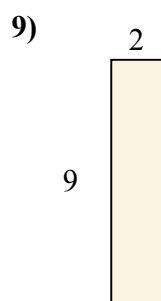
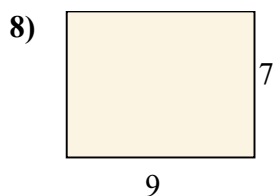
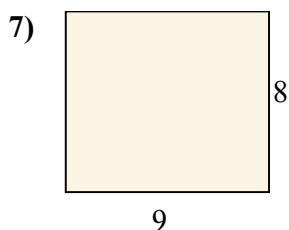
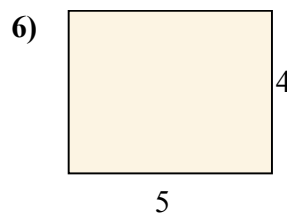
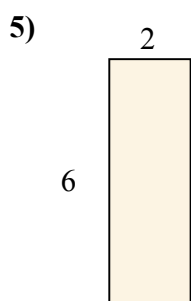
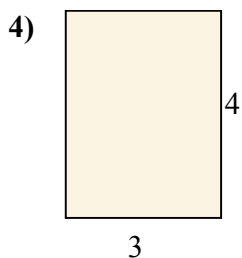
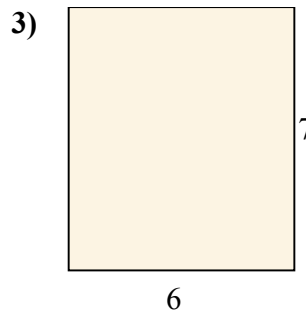
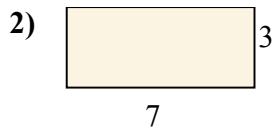
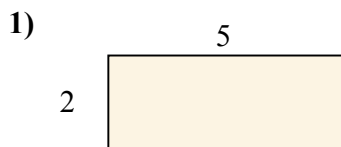




Tìm diện tích (tính bằng cm) của các hình chữ nhật.

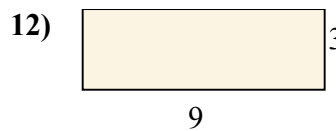
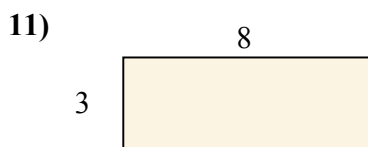
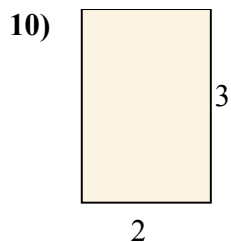
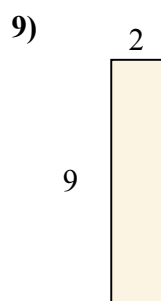
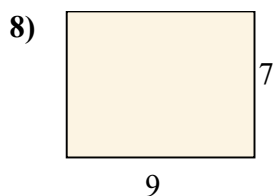
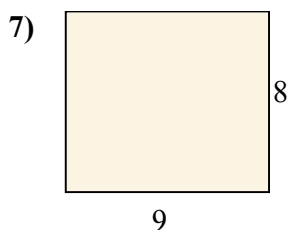
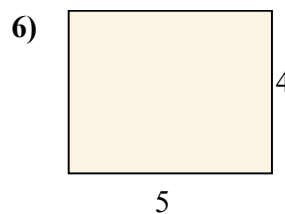
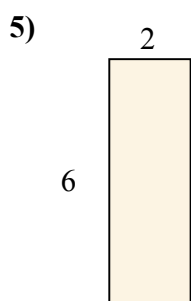
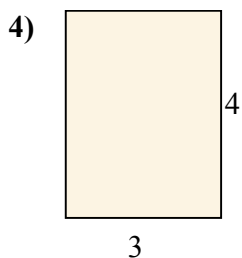
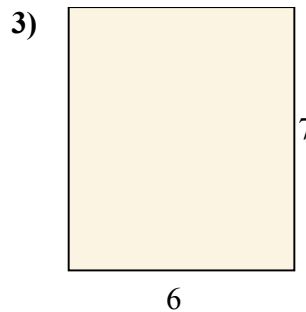
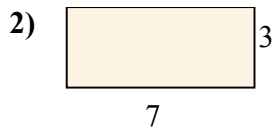
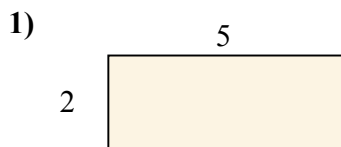


**Câu trả lời**

1. \_\_\_\_\_
2. \_\_\_\_\_
3. \_\_\_\_\_
4. \_\_\_\_\_
5. \_\_\_\_\_
6. \_\_\_\_\_
7. \_\_\_\_\_
8. \_\_\_\_\_
9. \_\_\_\_\_
10. \_\_\_\_\_
11. \_\_\_\_\_
12. \_\_\_\_\_



Tìm diện tích (tính bằng cm) của các hình chữ nhật.



**Câu trả lời**

1. 10

2. 21

3. 42

4. 12

5. 12

6. 20

7. 72

8. 63

9. 18

10. 6

11. 24

12. 27