
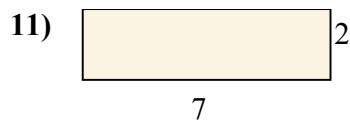
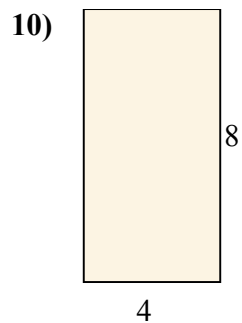
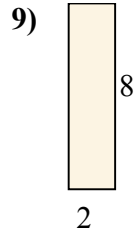
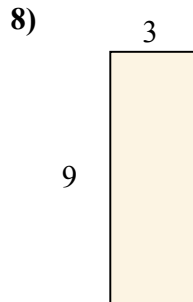
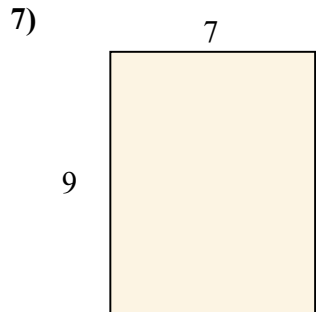
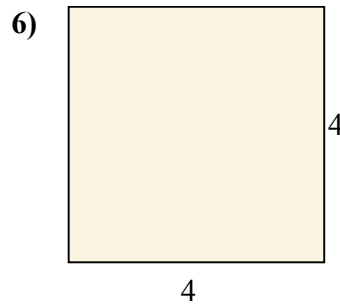
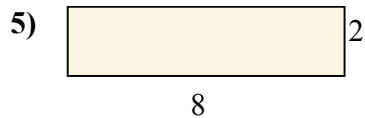
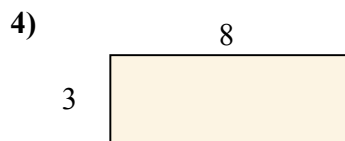
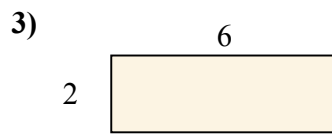
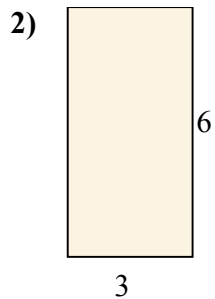
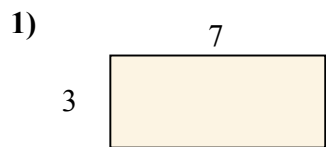




Tìm diện tích (tính bằng cm) của các hình chữ nhật.


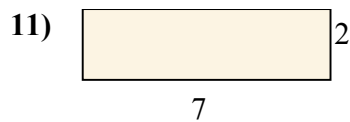
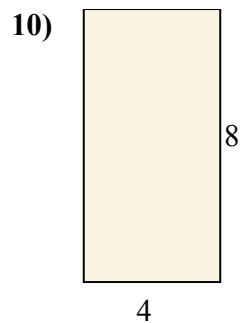
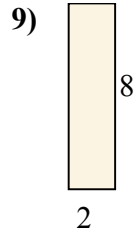
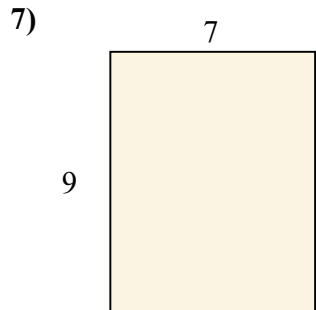
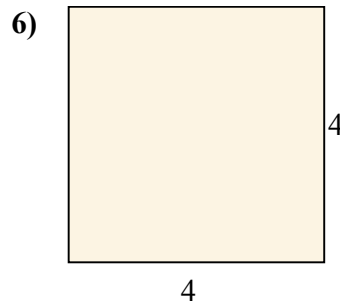
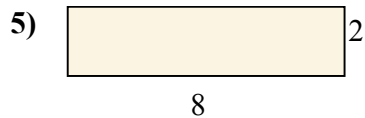
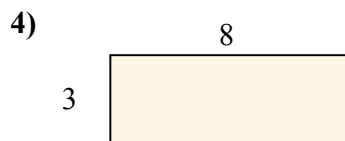
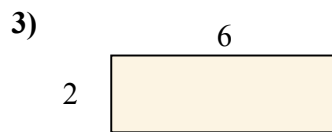
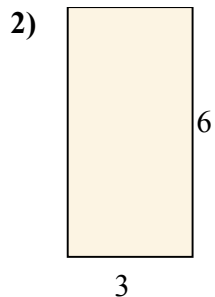
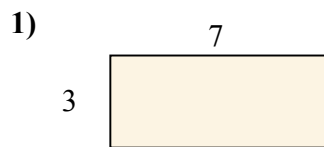


Câu trả lời

- 1. _____
- 2. _____
- 3. _____
- 4. _____
- 5. _____
- 6. _____
- 7. _____
- 8. _____
- 9. _____
- 10. _____
- 11. _____
- 12. _____



Tìm diện tích (tính bằng cm) của các hình chữ nhật.



Câu trả lời

1. 21

2. 18

3. 12

4. 24

5. 16

6. 16

7. 63

8. 27

9. 16

10. 32

11. 14

12. 12