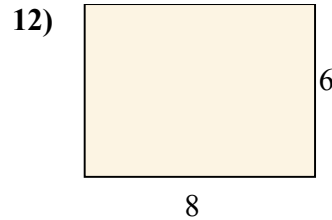
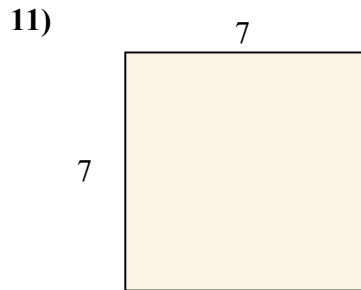
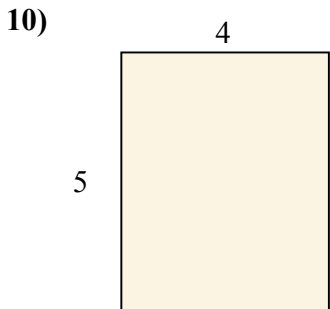
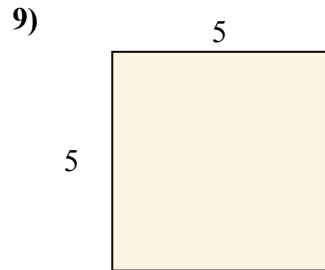
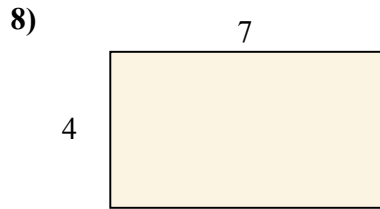
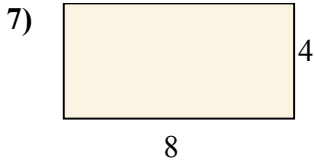
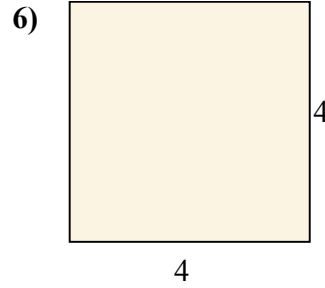
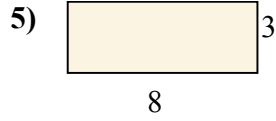

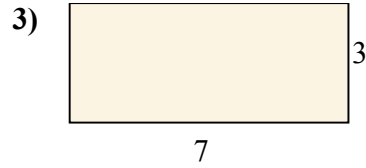
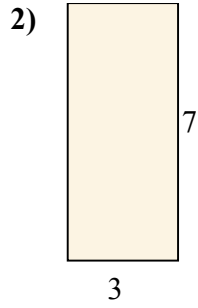
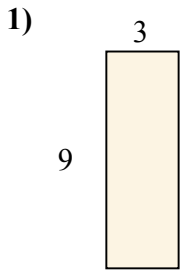




Tìm diện tích (tính bằng cm) của các hình chữ nhật.

**Câu trả lời**

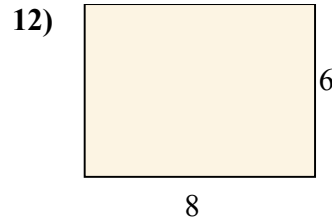
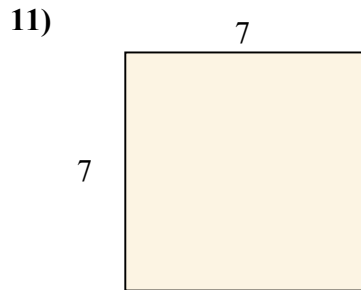
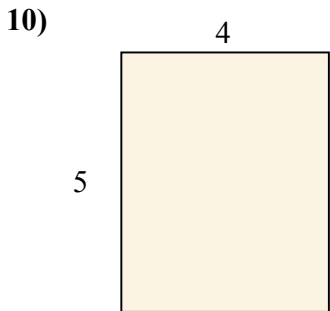
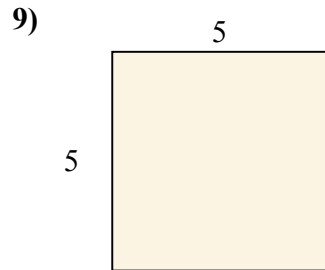
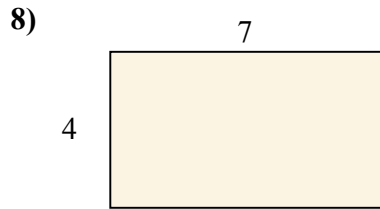
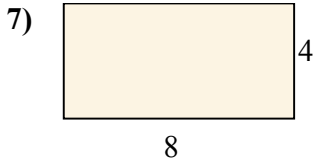
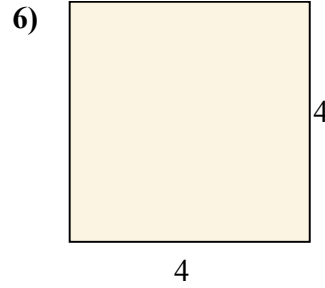
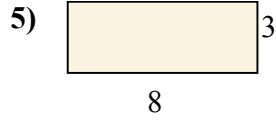

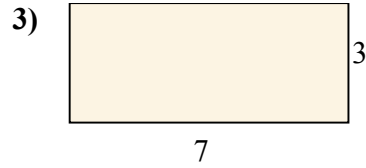
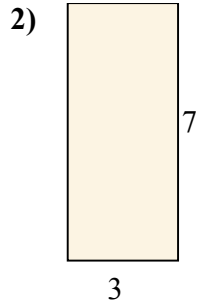
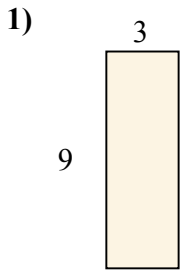


1. \_\_\_\_\_
2. \_\_\_\_\_
3. \_\_\_\_\_
4. \_\_\_\_\_
5. \_\_\_\_\_
6. \_\_\_\_\_
7. \_\_\_\_\_
8. \_\_\_\_\_
9. \_\_\_\_\_
10. \_\_\_\_\_
11. \_\_\_\_\_
12. \_\_\_\_\_



Tìm diện tích (tính bằng cm) của các hình chữ nhật.

**Câu trả lời**



1. 27

2. 21

3. 21

4. 14

5. 24

6. 16

7. 32

8. 28

9. 25

10. 20

11. 49

12. 48