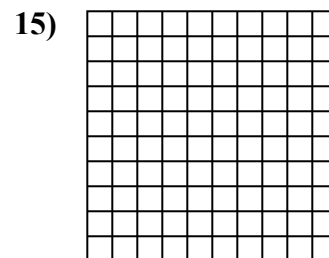
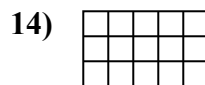
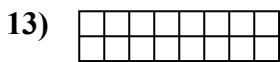
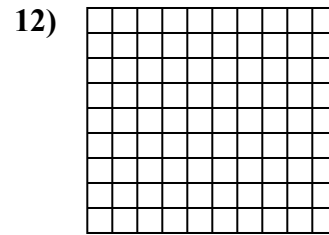
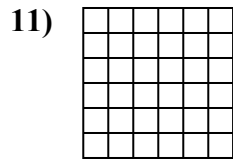
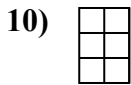
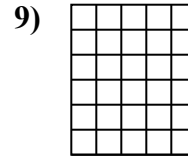

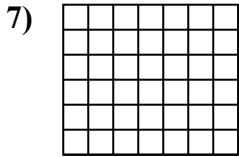

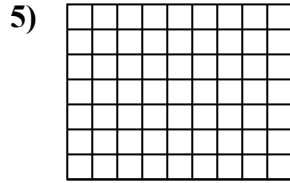
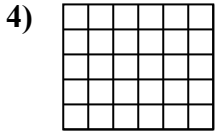
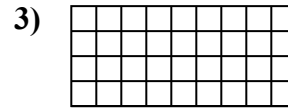
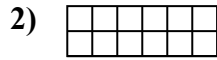
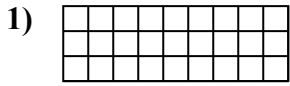




Xác định diện tích. Mỗi $\square = 1 \text{ u} (\text{u}^2)$.

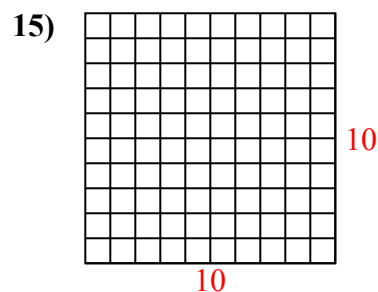
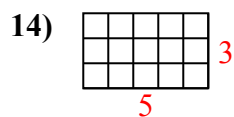
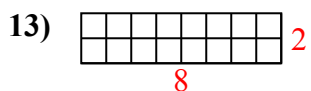
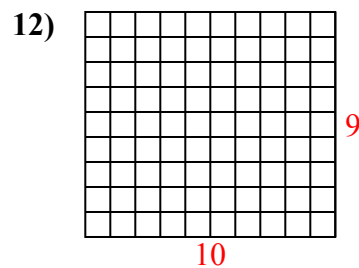
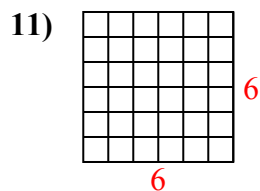
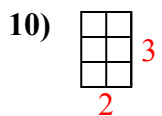
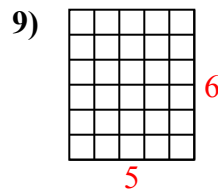
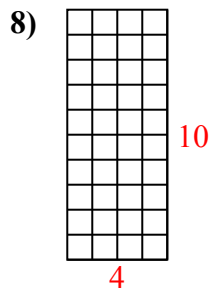
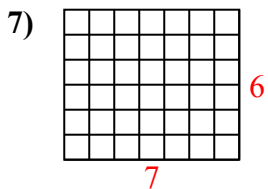
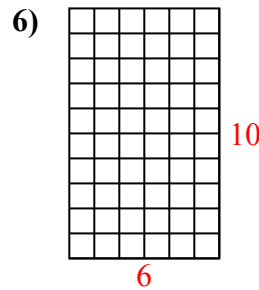
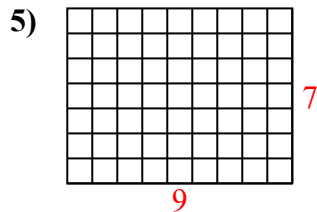
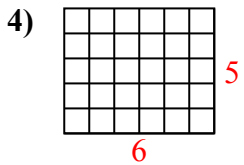
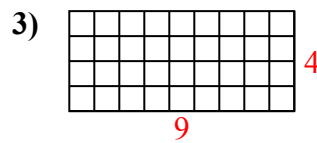
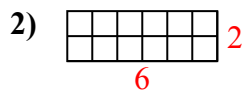
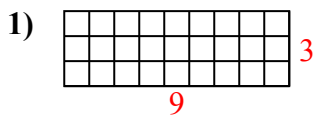


Câu trả lời

1. _____
2. _____
3. _____
4. _____
5. _____
6. _____
7. _____
8. _____
9. _____
10. _____
11. _____
12. _____
13. _____
14. _____
15. _____



Xác định diện tích. Mỗi $\square = 1 \text{ u} (u^2)$.



Câu trả lời

1. 27 u²

2. 12 u²

3. 36 u²

4. 30 u²

5. 63 u²

6. 60 u²

7. 42 u²

8. 40 u²

9. 30 u²

10. 6 u²

11. 36 u²

12. 90 u²

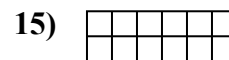
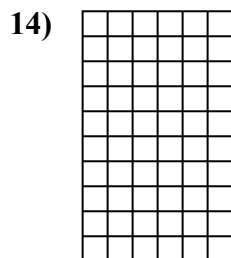
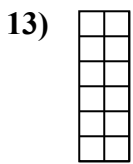
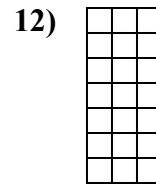
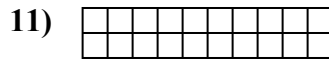
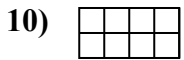
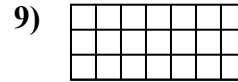
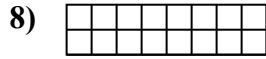
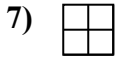
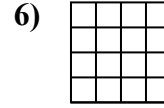
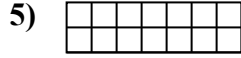
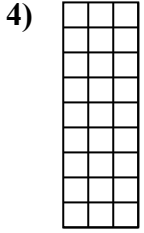

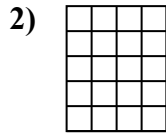
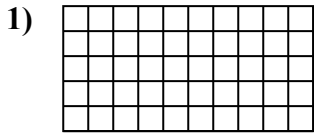
13. 16 u²

14. 15 u²

15. 100 u²



Xác định diện tích. Mỗi $\square = 1 \text{ u} (\text{u}^2)$.

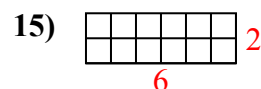
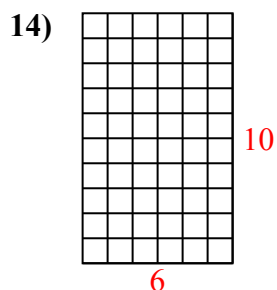
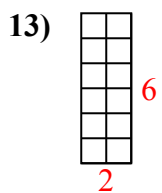
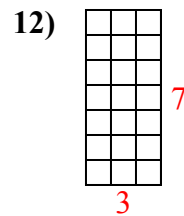
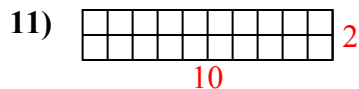
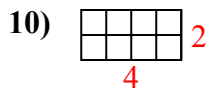
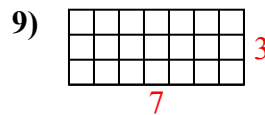
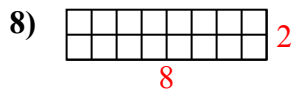
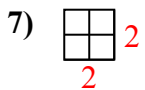
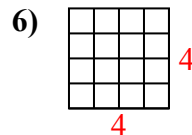
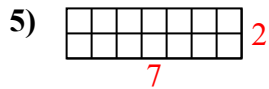
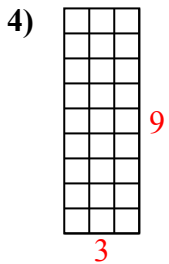
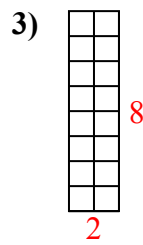
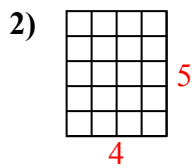
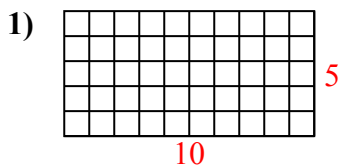


Câu trả lời

1. _____
2. _____
3. _____
4. _____
5. _____
6. _____
7. _____
8. _____
9. _____
10. _____
11. _____
12. _____
13. _____
14. _____
15. _____



Xác định diện tích. Mỗi $\square = 1 \text{ u} (\text{u}^2)$.



Câu trả lời

1. 50 u²

2. 20 u²

3. 16 u²

4. 27 u²

5. 14 u²

6. 16 u²

7. 4 u²

8. 16 u²

9. 21 u²

10. 8 u²

11. 20 u²

12. 21 u²

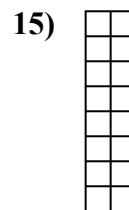

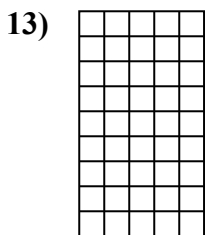
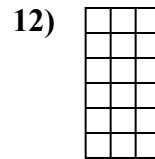
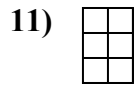
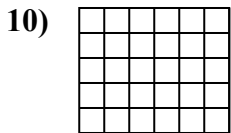
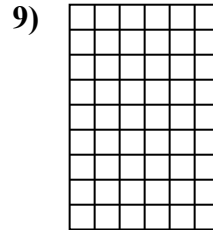

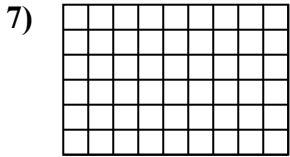

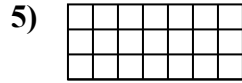
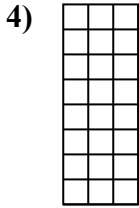
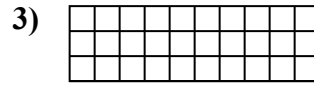
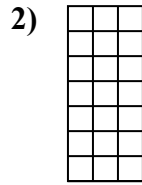

13. 12 u²

14. 60 u²

15. 12 u²



Xác định diện tích. Mỗi $\square = 1 \text{ u} (u^2)$.

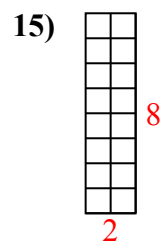
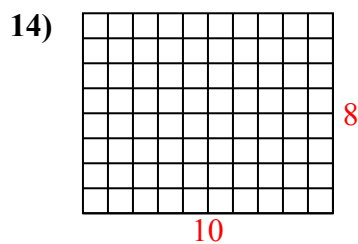
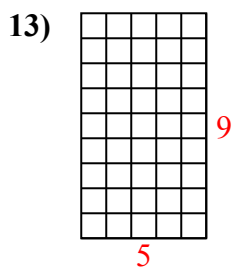
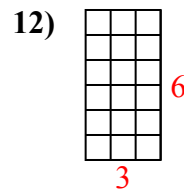
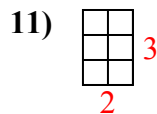
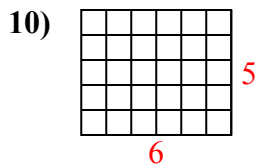
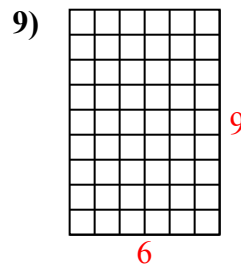
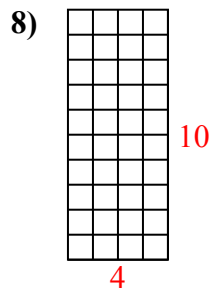
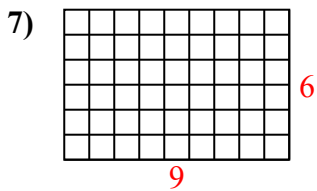
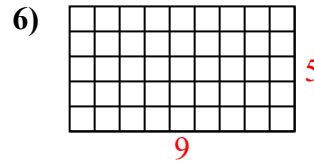
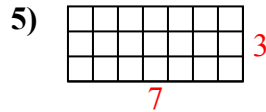
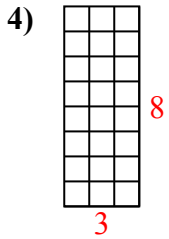
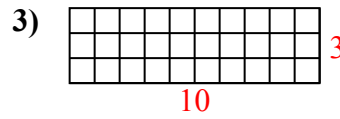
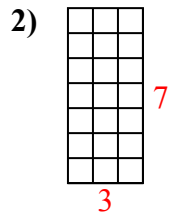
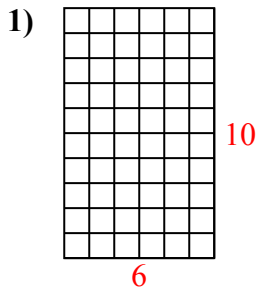


Câu trả lời

1. _____
2. _____
3. _____
4. _____
5. _____
6. _____
7. _____
8. _____
9. _____
10. _____
11. _____
12. _____
13. _____
14. _____
15. _____



Xác định diện tích. Mỗi $\square = 1 \text{ u} (\text{u}^2)$.



Câu trả lời

1. 60 u²

2. 21 u²

3. 30 u²

4. 24 u²

5. 21 u²

6. 45 u²

7. 54 u²

8. 40 u²

9. 54 u²

10. 30 u²

11. 6 u²

12. 18 u²

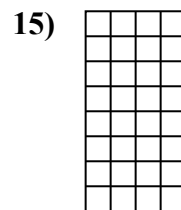
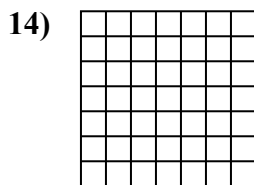

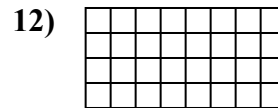
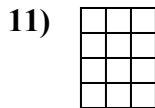
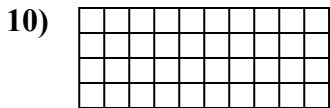
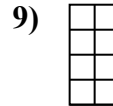
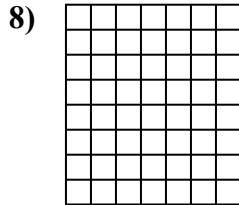
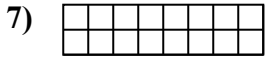

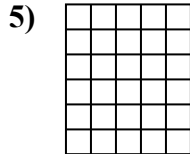
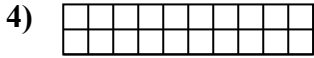
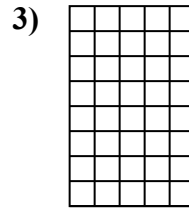
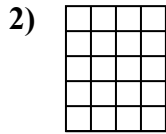
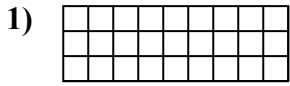
13. 45 u²

14. 80 u²

15. 16 u²



Xác định diện tích. Mỗi $\square = 1 \text{ u} (\text{u}^2)$.

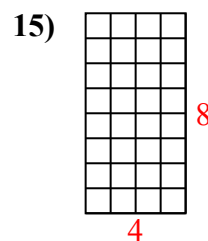
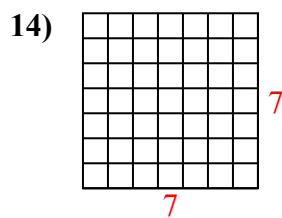
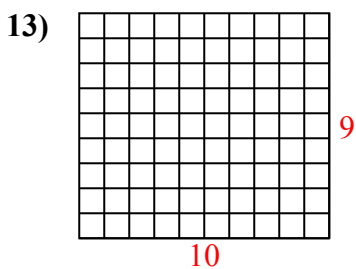
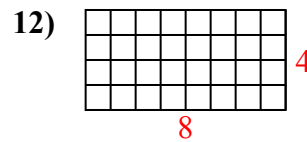
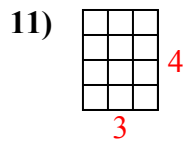
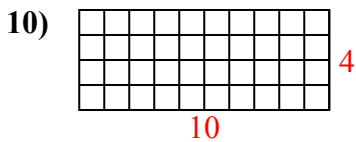
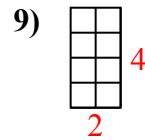
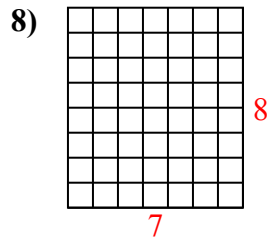
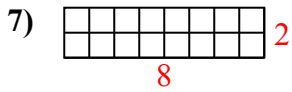
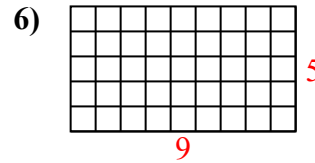
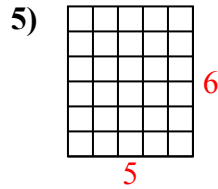
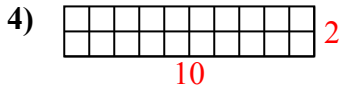
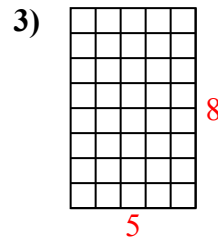
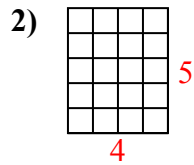
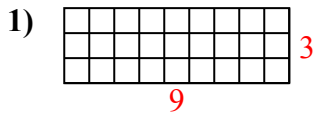


Câu trả lời

1. _____
2. _____
3. _____
4. _____
5. _____
6. _____
7. _____
8. _____
9. _____
10. _____
11. _____
12. _____
13. _____
14. _____
15. _____



Xác định diện tích. Mỗi $\square = 1 \text{ u} (u^2)$.



Câu trả lời

1. 27 u²

2. 20 u²

3. 40 u²

4. 20 u²

5. 30 u²

6. 45 u²

7. 16 u²

8. 56 u²

9. 8 u²

10. 40 u²

11. 12 u²

12. 32 u²

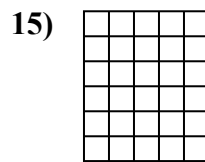
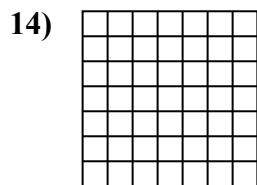
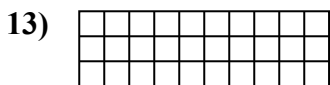

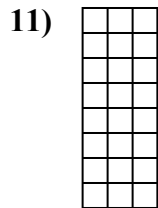
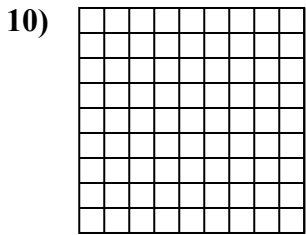
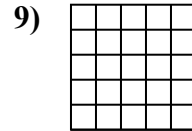
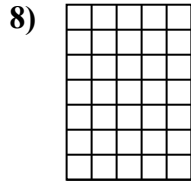
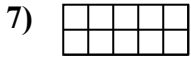
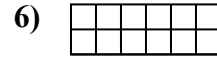
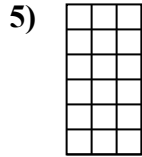
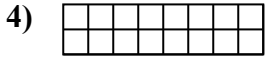
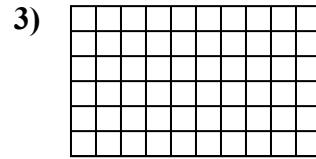
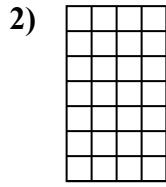
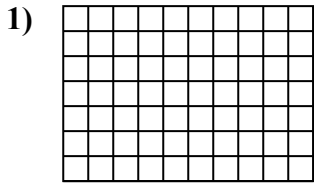
13. 90 u²

14. 49 u²

15. 32 u²



Xác định diện tích. Mỗi $\square = 1 \text{ u} (\text{u}^2)$.

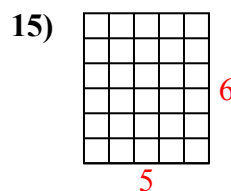
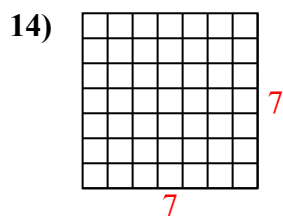
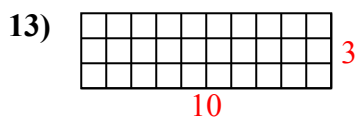
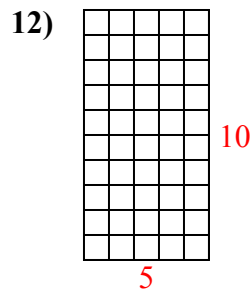
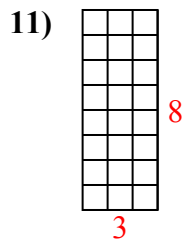
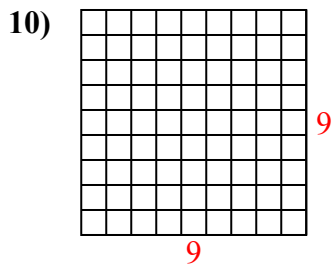
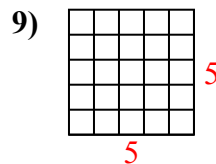
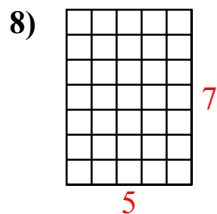
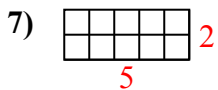
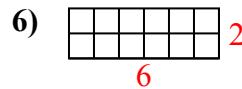
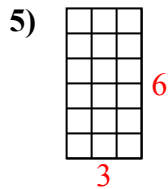
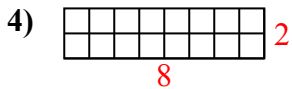
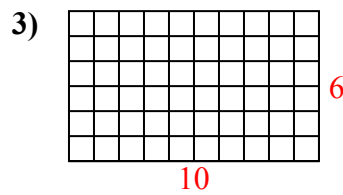
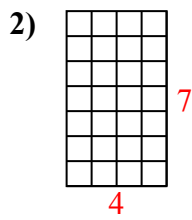
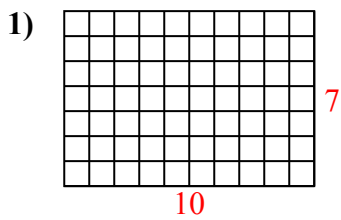


Câu trả lời

1. _____
2. _____
3. _____
4. _____
5. _____
6. _____
7. _____
8. _____
9. _____
10. _____
11. _____
12. _____
13. _____
14. _____
15. _____



Xác định diện tích. Mỗi $\square = 1 \text{ u} (u^2)$.



Câu trả lời

1. 70 u²

2. 28 u²

3. 60 u²

4. 16 u²

5. 18 u²

6. 12 u²

7. 10 u²

8. 35 u²

9. 25 u²

10. 81 u²

11. 24 u²

12. 50 u²

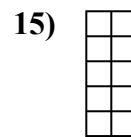
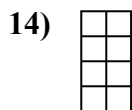
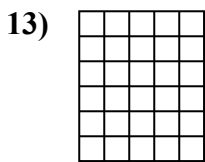
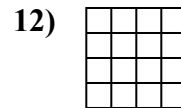
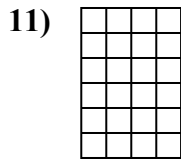
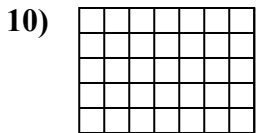
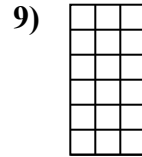


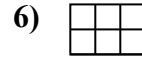
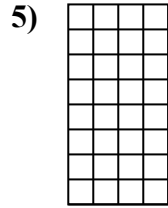
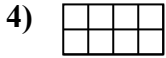
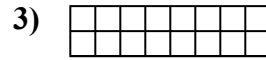
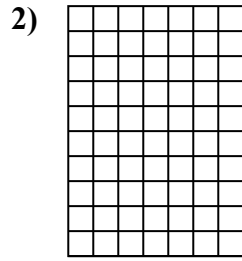
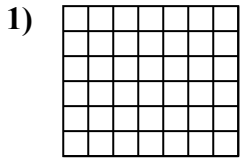
13. 30 u²

14. 49 u²

15. 30 u²



Xác định diện tích. Mỗi $\square = 1 \text{ u} (\text{u}^2)$.

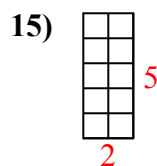
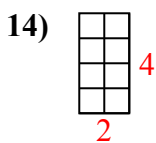
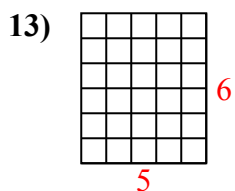
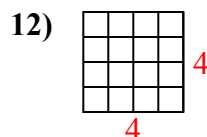
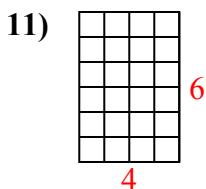
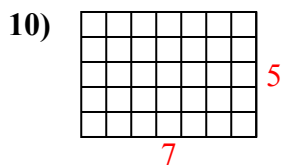
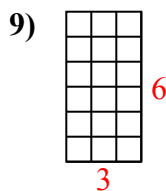
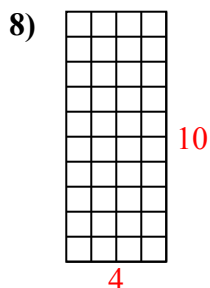
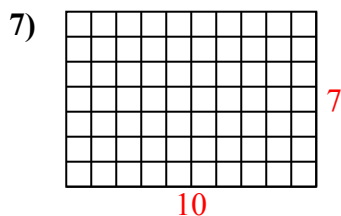
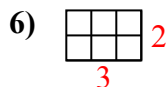
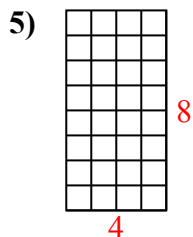
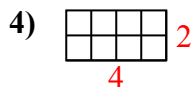
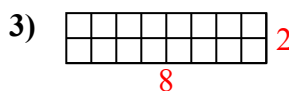
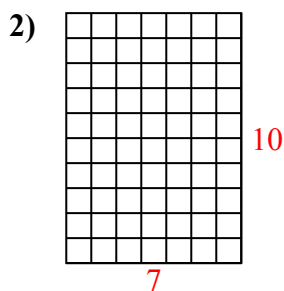
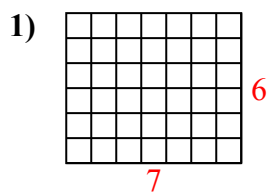


Câu trả lời

1. _____
2. _____
3. _____
4. _____
5. _____
6. _____
7. _____
8. _____
9. _____
10. _____
11. _____
12. _____
13. _____
14. _____
15. _____



Xác định diện tích. Mỗi $\square = 1 \text{ u} (u^2)$.



Câu trả lời

1. 42 u²

2. 70 u²

3. 16 u²

4. 8 u²

5. 32 u²

6. 6 u²

7. 70 u²

8. 40 u²

9. 18 u²

10. 35 u²

11. 24 u²

12. 16 u²


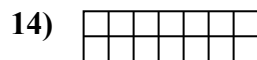
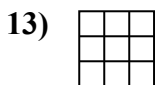
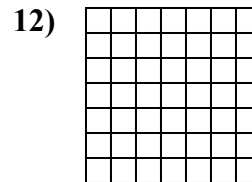
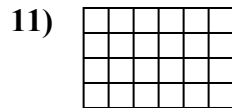
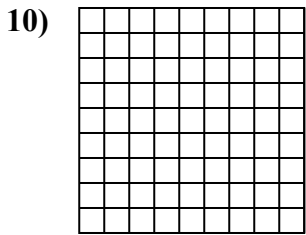
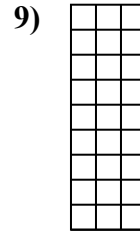
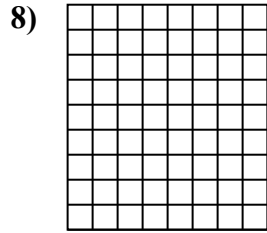
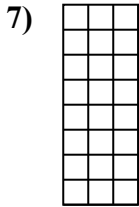
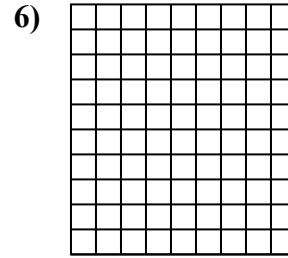
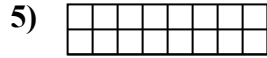
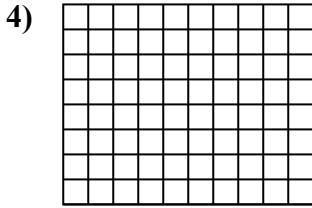
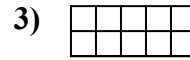
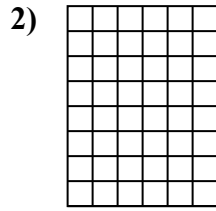
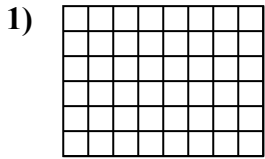
13. 30 u²

14. 8 u²

15. 10 u²



Xác định diện tích. Mỗi $\square = 1 \text{ u} (\text{u}^2)$.

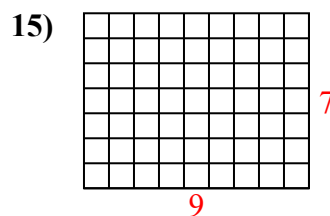
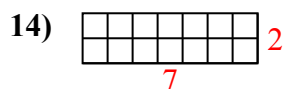
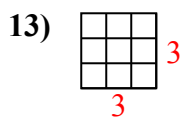
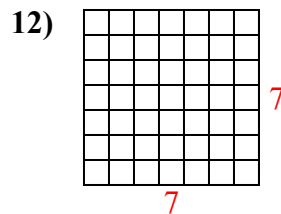
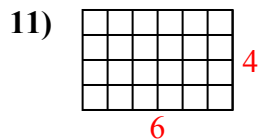
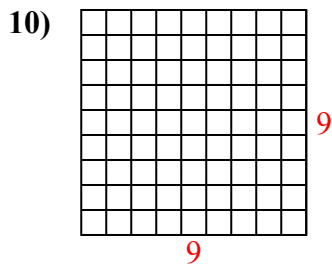
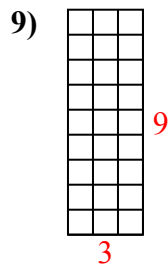
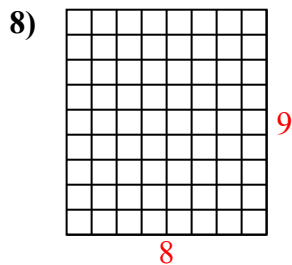
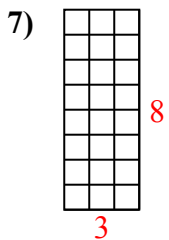
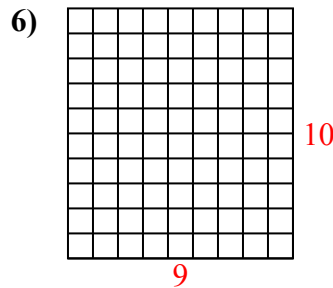
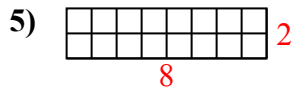
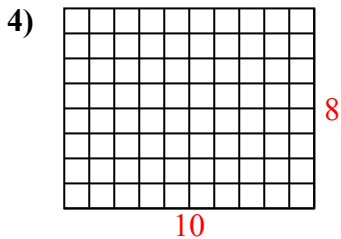
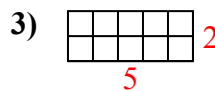
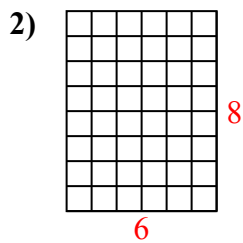
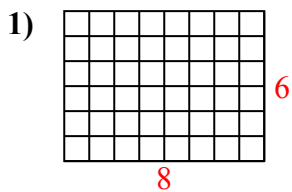


Câu trả lời

1. _____
2. _____
3. _____
4. _____
5. _____
6. _____
7. _____
8. _____
9. _____
10. _____
11. _____
12. _____
13. _____
14. _____
15. _____



Xác định diện tích. Mỗi $\square = 1 \text{ u} (\text{u}^2)$.

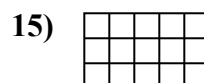
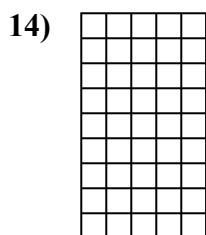
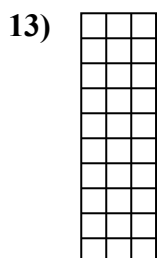
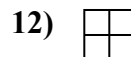
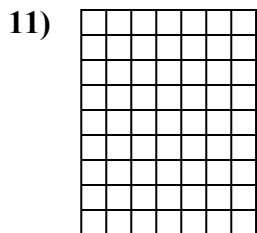
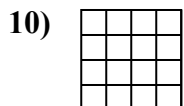
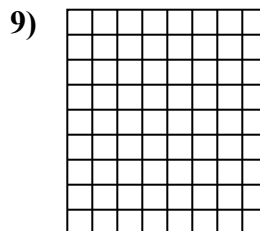
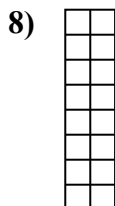
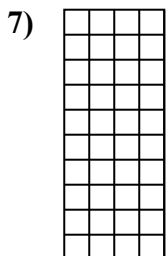

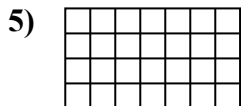
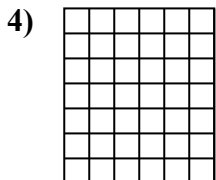
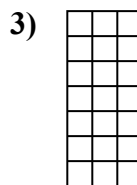
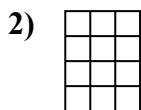
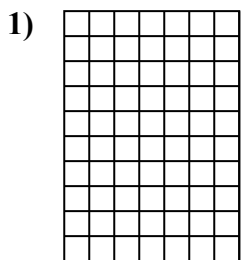


Câu trả lời

1. 48 u²
2. 48 u²
3. 10 u²
4. 80 u²
5. 16 u²
6. 90 u²
7. 24 u²
8. 72 u²
9. 27 u²
10. 81 u²
11. 24 u²
12. 49 u²
13. 9 u²
14. 14 u²
15. 63 u²



Xác định diện tích. Mỗi $\square = 1 \text{ u} (u^2)$.



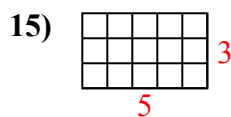
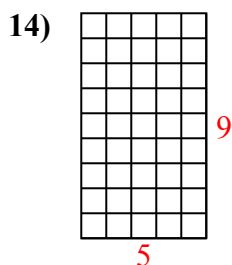
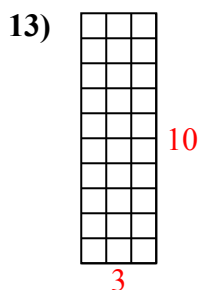
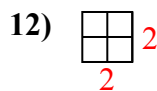
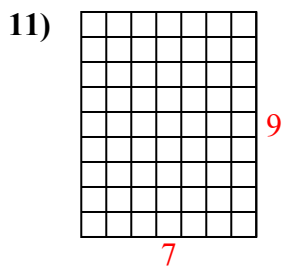
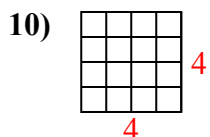
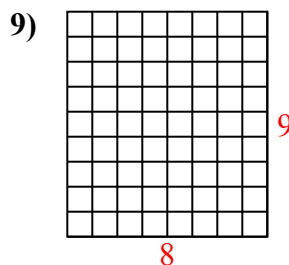
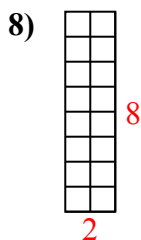
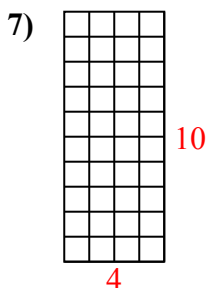
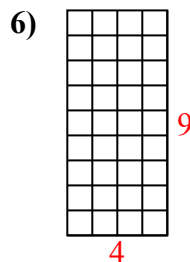
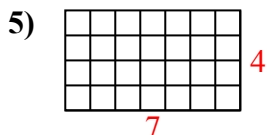
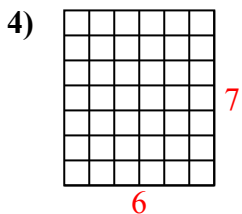
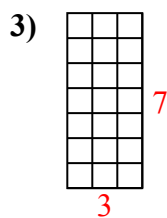
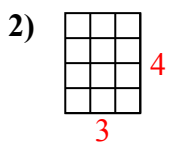
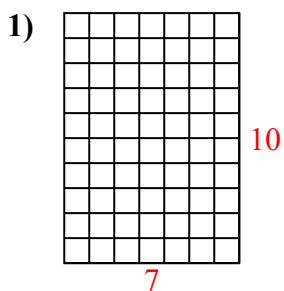
Câu trả lời

1. _____
2. _____
3. _____
4. _____
5. _____
6. _____
7. _____
8. _____
9. _____
10. _____
11. _____
12. _____
13. _____
14. _____
15. _____



Xác định diện tích. Mỗi $\square = 1 \text{ u} (u^2)$.

Câu trả lời



1. 70 u²

2. 12 u²

3. 21 u²

4. 42 u²

5. 28 u²

6. 36 u²

7. 40 u²

8. 16 u²

9. 72 u²

10. 16 u²

11. 63 u²

12. 4 u²

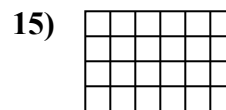
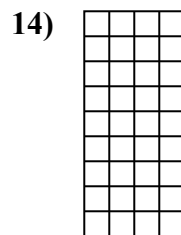
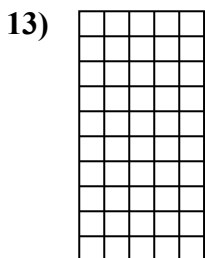
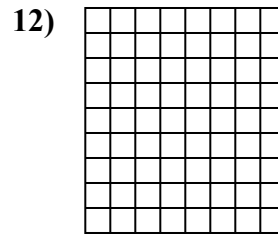
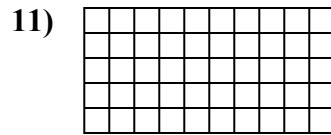
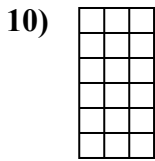
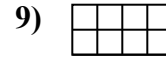


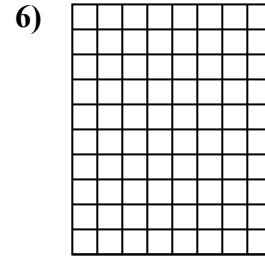
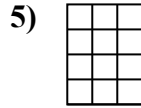
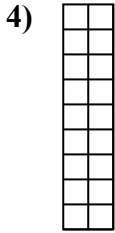
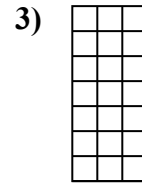
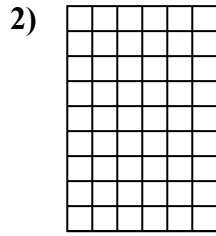
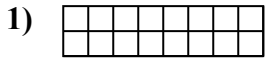
13. 30 u²

14. 45 u²

15. 15 u²



Xác định diện tích. Mỗi $\square = 1 \text{ u} (\text{u}^2)$.

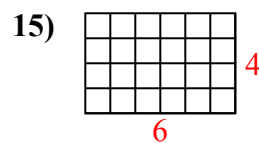
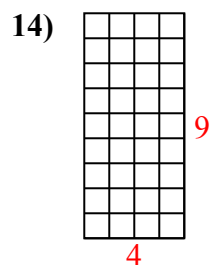
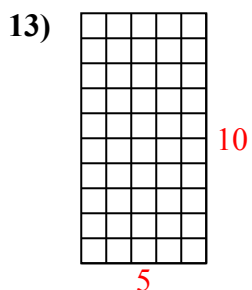
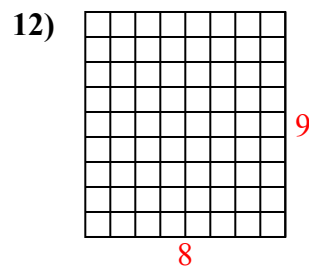
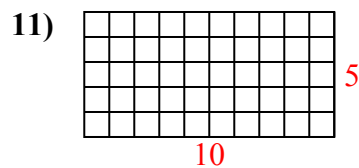
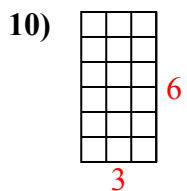
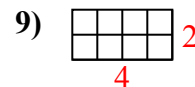
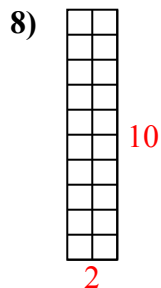
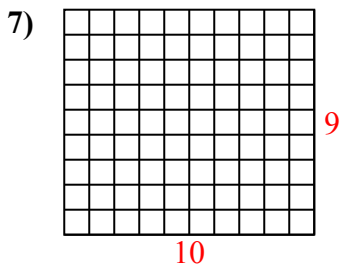
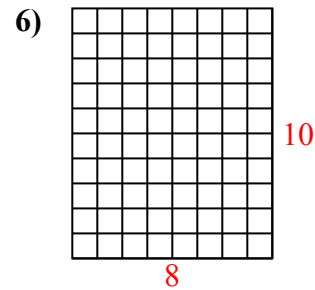
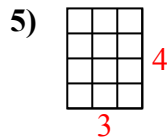
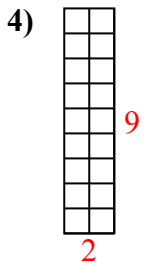
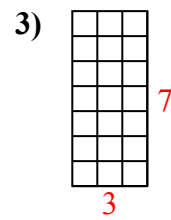
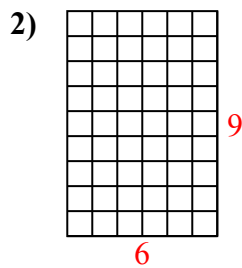
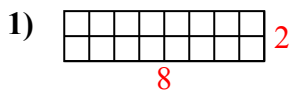


Câu trả lời

1. _____
2. _____
3. _____
4. _____
5. _____
6. _____
7. _____
8. _____
9. _____
10. _____
11. _____
12. _____
13. _____
14. _____
15. _____



Xác định diện tích. Mỗi $\square = 1 \text{ u} (u^2)$.



Câu trả lời

1. 16 u²

2. 54 u²

3. 21 u²

4. 18 u²

5. 12 u²

6. 80 u²

7. 90 u²

8. 20 u²

9. 8 u²

10. 18 u²

11. 50 u²

12. 72 u²

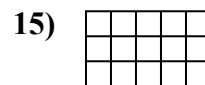

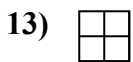
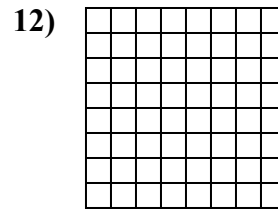
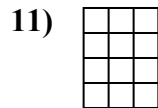
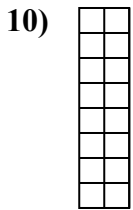

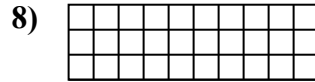
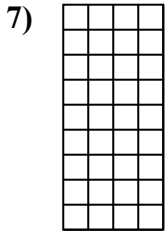
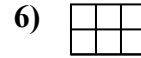
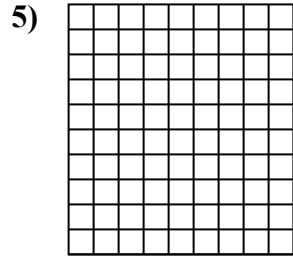
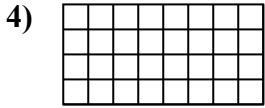
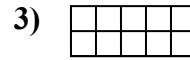
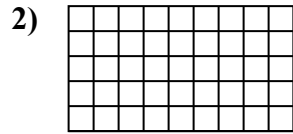
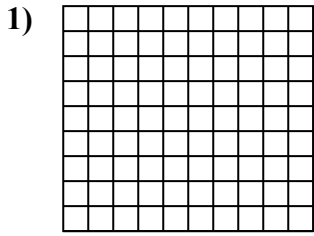
13. 50 u²

14. 36 u²

15. 24 u²



Xác định diện tích. Mỗi $\square = 1 \text{ u} (\text{u}^2)$.

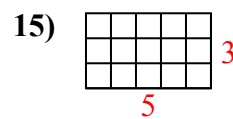
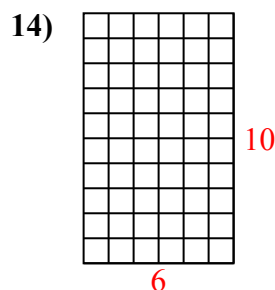
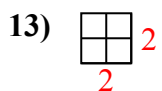
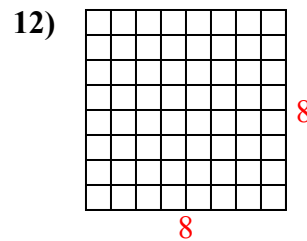
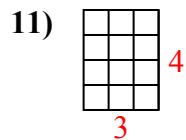
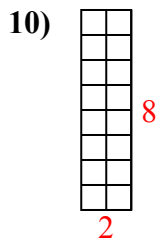
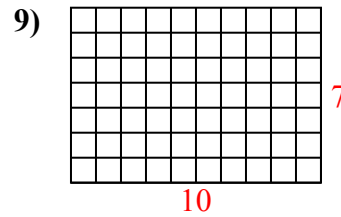
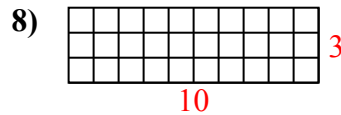
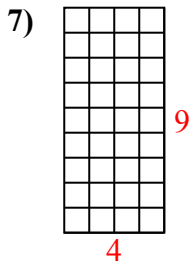
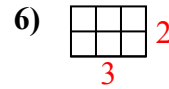
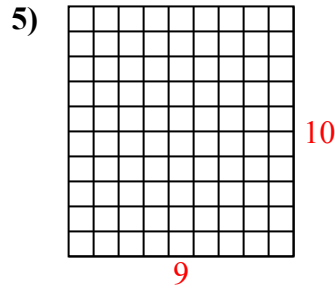
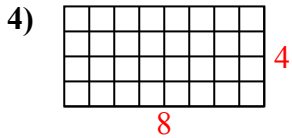
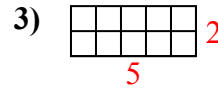
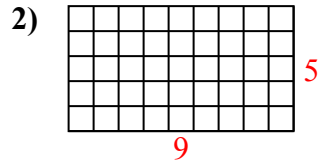
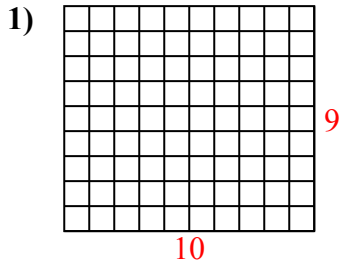


Câu trả lời

1. _____
2. _____
3. _____
4. _____
5. _____
6. _____
7. _____
8. _____
9. _____
10. _____
11. _____
12. _____
13. _____
14. _____
15. _____



Xác định diện tích. Mỗi $\square = 1 \text{ u} (u^2)$.



Câu trả lời

1. 90 u²

2. 45 u²

3. 10 u²

4. 32 u²

5. 90 u²

6. 6 u²

7. 36 u²

8. 30 u²

9. 70 u²

10. 16 u²

11. 12 u²

12. 64 u²

13. 4 u²

14. 60 u²

15. 15 u²