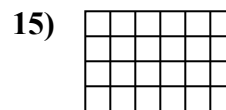
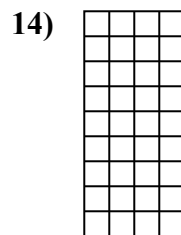
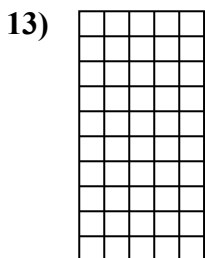
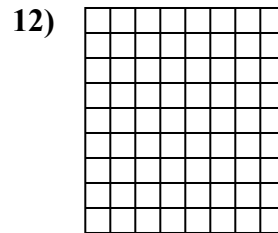
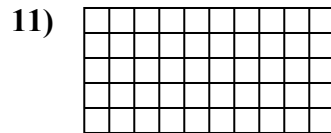
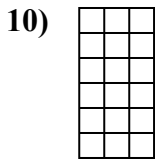
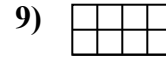


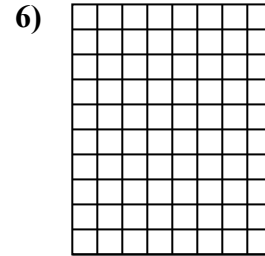
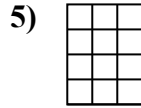
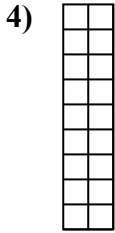
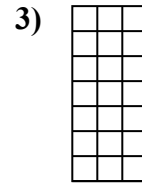
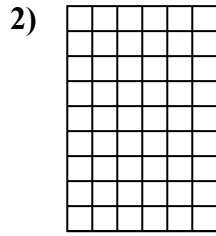
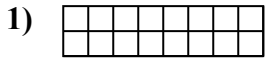




Xác định diện tích. Mỗi $\square = 1 \text{ u} (\text{u}^2)$.

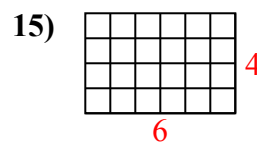
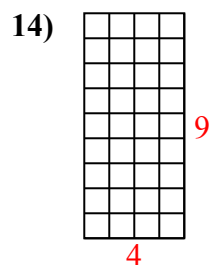
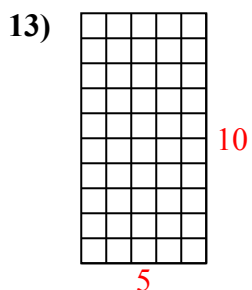
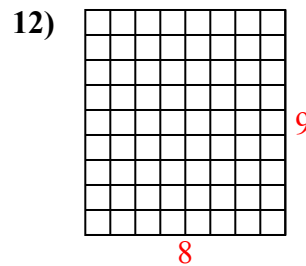
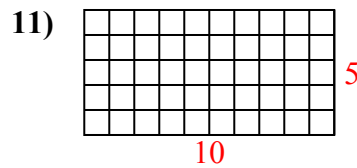
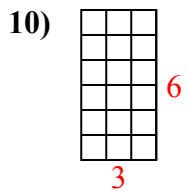
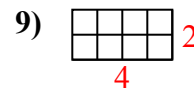
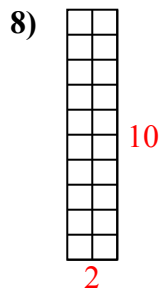
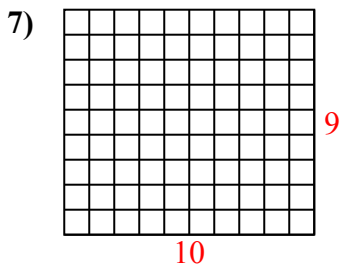
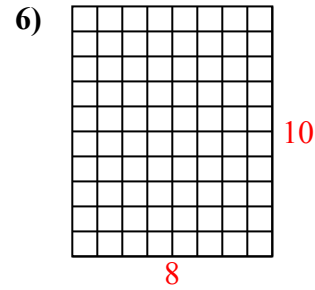
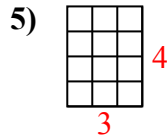
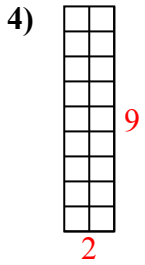
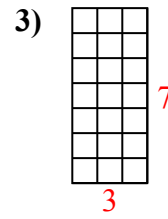
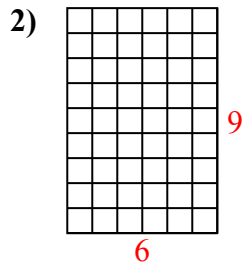
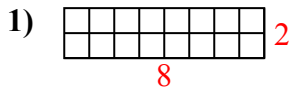


Câu trả lời

1. _____
2. _____
3. _____
4. _____
5. _____
6. _____
7. _____
8. _____
9. _____
10. _____
11. _____
12. _____
13. _____
14. _____
15. _____



Xác định diện tích. Mỗi $\square = 1 \text{ u} (u^2)$.



Câu trả lời

1. 16 u²

2. 54 u²

3. 21 u²

4. 18 u²

5. 12 u²

6. 80 u²

7. 90 u²

8. 20 u²

9. 8 u²

10. 18 u²

11. 50 u²

12. 72 u²

13. 50 u²

14. 36 u²

15. 24 u²