
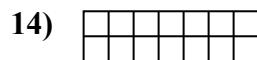
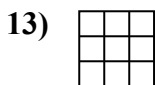
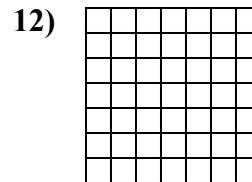
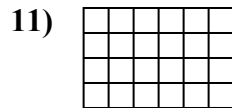
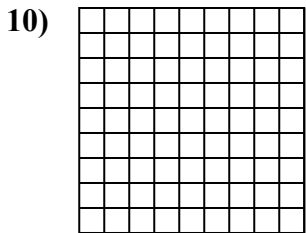
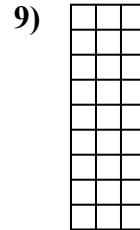
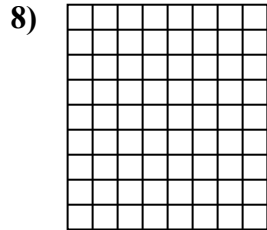
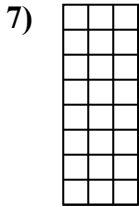

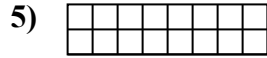
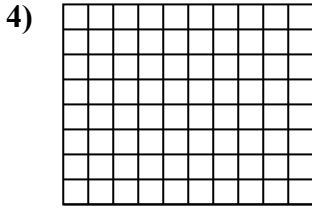
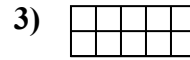
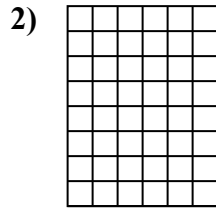
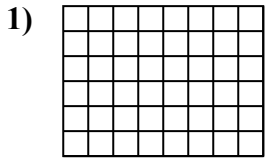




Xác định diện tích. Mỗi $\square = 1 \text{ u} (\text{u}^2)$.

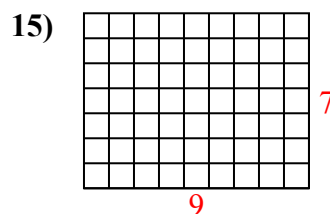
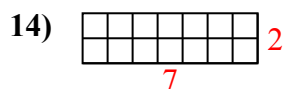
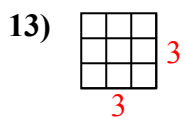
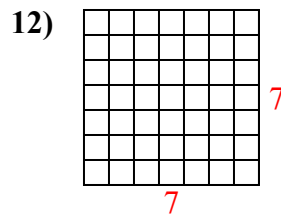
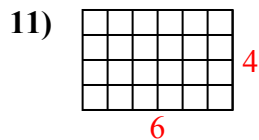
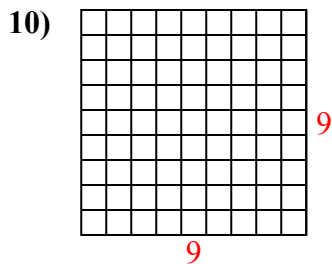
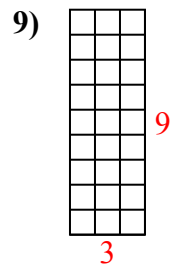
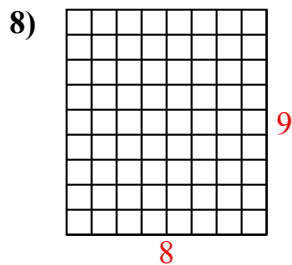
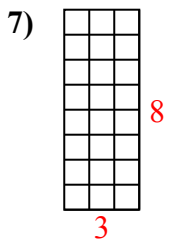
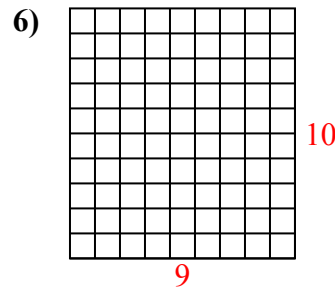
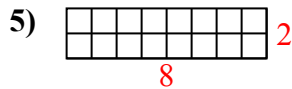
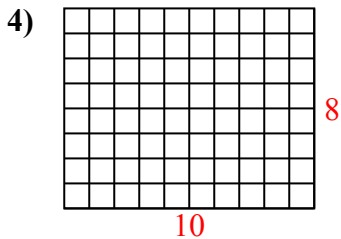
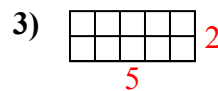
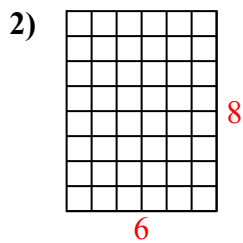
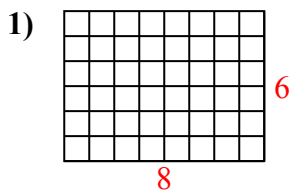


Câu trả lời

1. _____
2. _____
3. _____
4. _____
5. _____
6. _____
7. _____
8. _____
9. _____
10. _____
11. _____
12. _____
13. _____
14. _____
15. _____



Xác định diện tích. Mỗi $\square = 1 \text{ u} (\text{u}^2)$.



Câu trả lời

1. 48 u²
2. 48 u²
3. 10 u²
4. 80 u²
5. 16 u²
6. 90 u²
7. 24 u²
8. 72 u²
9. 27 u²
10. 81 u²
11. 24 u²
12. 49 u²
13. 9 u²
14. 14 u²
15. 63 u²