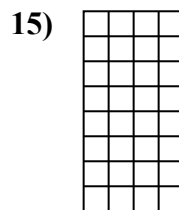
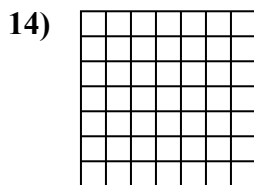
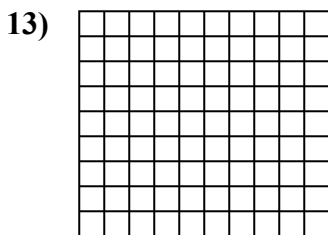
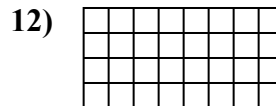
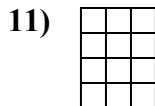
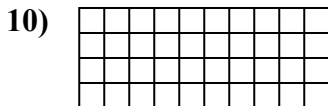
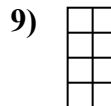
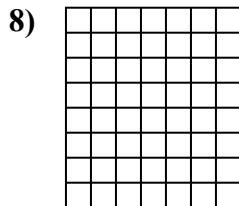


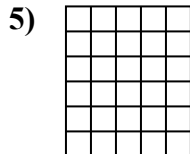

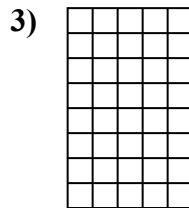
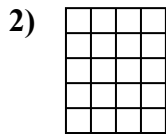
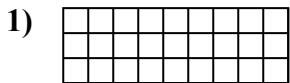




Xác định diện tích. Mỗi $\square = 1 \text{ u} (u^2)$.



Câu trả lời

1. _____

2. _____

3. _____

4. _____

5. _____

6. _____

7. _____

8. _____

9. _____

10. _____

11. _____

12. _____

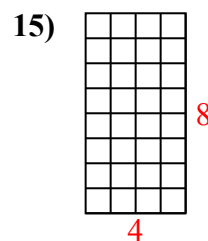
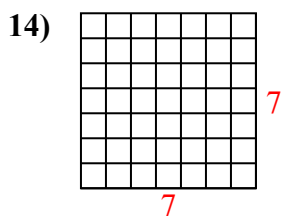
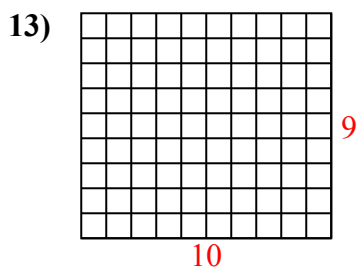
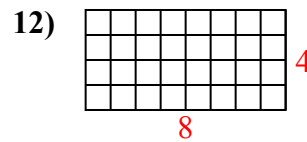
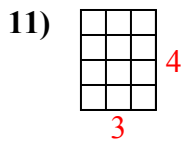
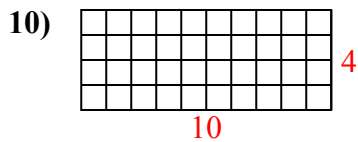
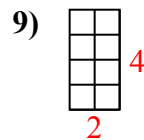
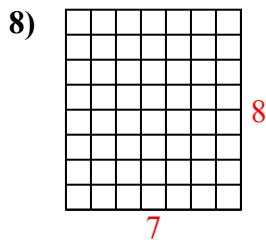
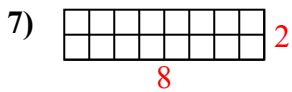
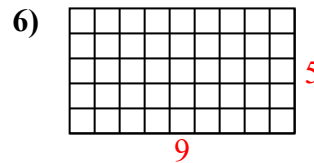
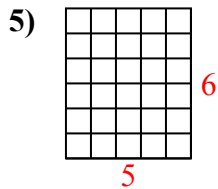
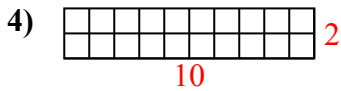
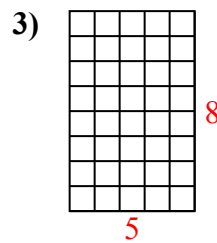
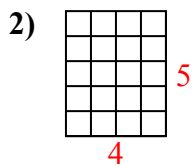
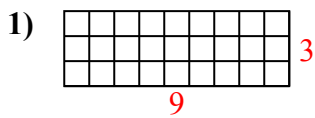
13. _____

14. _____

15. _____



Xác định diện tích. Mỗi $\square = 1 \text{ u} (u^2)$.



Câu trả lời

1. 27 u²
2. 20 u²
3. 40 u²
4. 20 u²
5. 30 u²
6. 45 u²
7. 16 u²
8. 56 u²
9. 8 u²
10. 40 u²
11. 12 u²
12. 32 u²
13. 90 u²
14. 49 u²
15. 32 u²