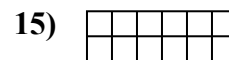
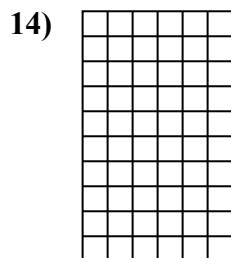
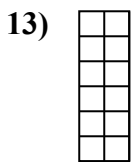
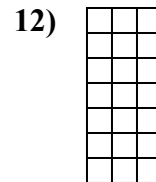
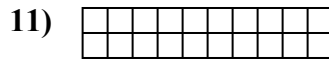
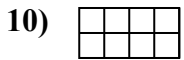
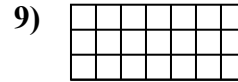
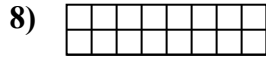
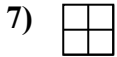
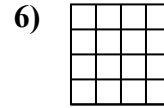
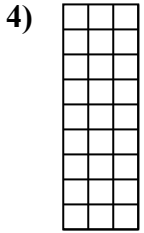

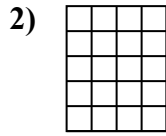
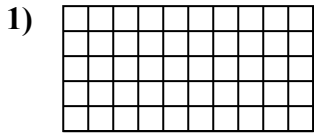




Xác định diện tích. Mỗi  $\square = 1 \text{ u} (\text{u}^2)$ .

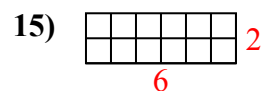
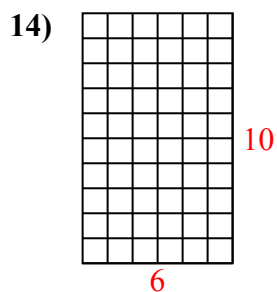
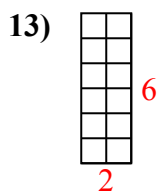
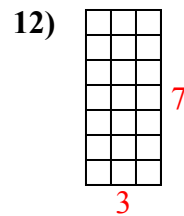
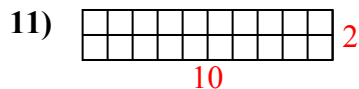
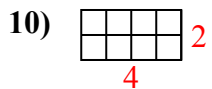
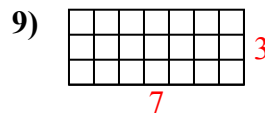
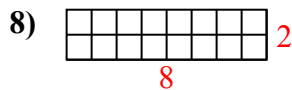
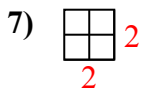
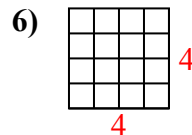
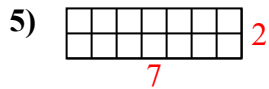
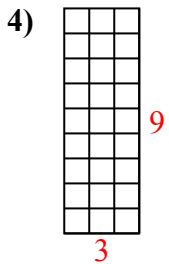
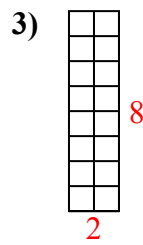
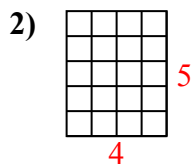
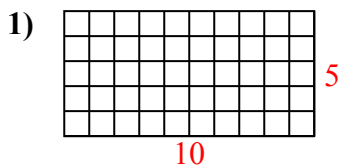


**Câu trả lời**

1. \_\_\_\_\_
2. \_\_\_\_\_
3. \_\_\_\_\_
4. \_\_\_\_\_
5. \_\_\_\_\_
6. \_\_\_\_\_
7. \_\_\_\_\_
8. \_\_\_\_\_
9. \_\_\_\_\_
10. \_\_\_\_\_
11. \_\_\_\_\_
12. \_\_\_\_\_
13. \_\_\_\_\_
14. \_\_\_\_\_
15. \_\_\_\_\_



Xác định diện tích. Mỗi  $\square = 1 \text{ u} (\text{u}^2)$ .



**Câu trả lời**

1. 50 u<sup>2</sup>

2. 20 u<sup>2</sup>

3. 16 u<sup>2</sup>

4. 27 u<sup>2</sup>

5. 14 u<sup>2</sup>

6. 16 u<sup>2</sup>

7. 4 u<sup>2</sup>

8. 16 u<sup>2</sup>

9. 21 u<sup>2</sup>

10. 8 u<sup>2</sup>

11. 20 u<sup>2</sup>

12. 21 u<sup>2</sup>

13. 12 u<sup>2</sup>

14. 60 u<sup>2</sup>

15. 12 u<sup>2</sup>