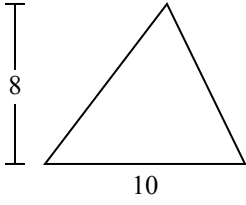


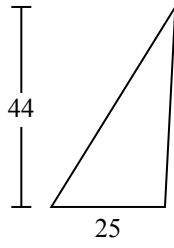


Tìm diện tích hình các tam giác. Đơn vị không theo tỉ lệ.

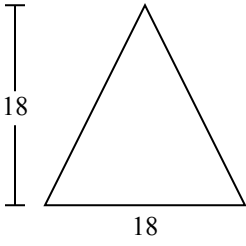
1)



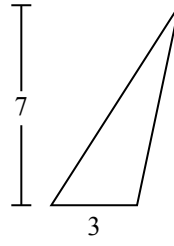
2)



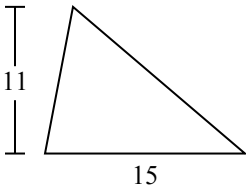
3)



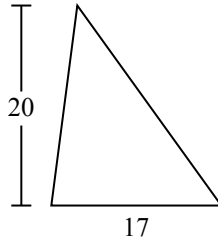
4)



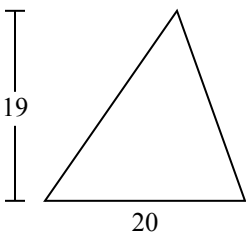
5)



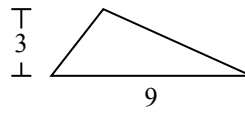
6)



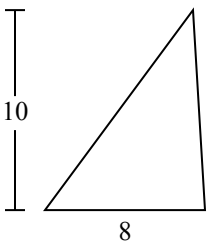
7)



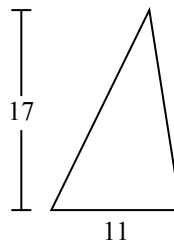
8)



9)



10)



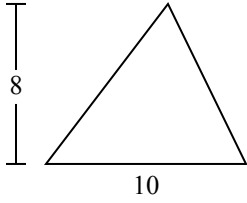
Câu trả lời

1. \_\_\_\_\_
2. \_\_\_\_\_
3. \_\_\_\_\_
4. \_\_\_\_\_
5. \_\_\_\_\_
6. \_\_\_\_\_
7. \_\_\_\_\_
8. \_\_\_\_\_
9. \_\_\_\_\_
10. \_\_\_\_\_

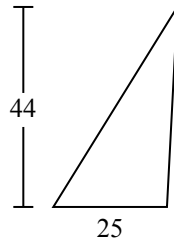


Tìm diện tích hình các tam giác. Đơn vị không theo tỉ lệ.

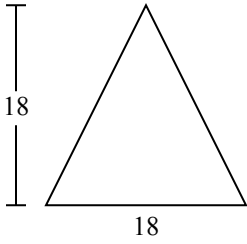
1)



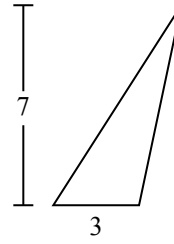
2)



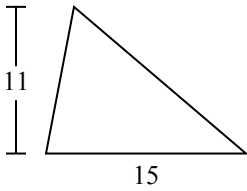
3)



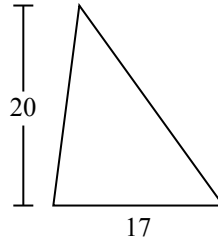
4)



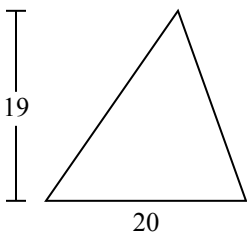
5)



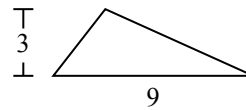
6)



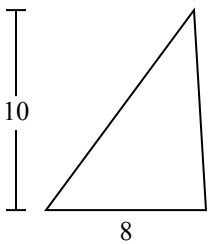
7)



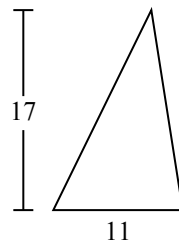
8)



9)



10)



**Câu trả lời**

1. **40**

2. **550**

3. **162**

4. **10,5**

5. **82,5**

6. **170**

7. **190**

8. **13,5**

9. **40**

10. **93,5**

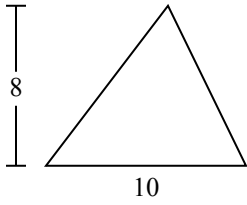


Tìm diện tích hình các tam giác. Đơn vị không theo tỉ lệ.

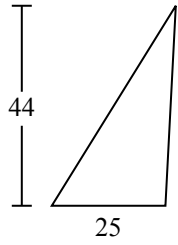
**Câu trả lời**

40	170	82,5	162	13,5
10,5	190	550	40	

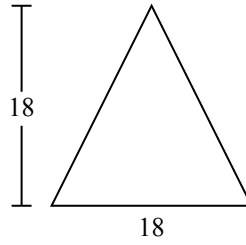
1)



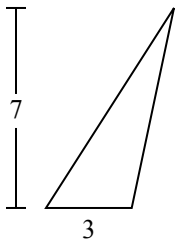
2)



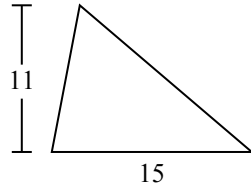
3)



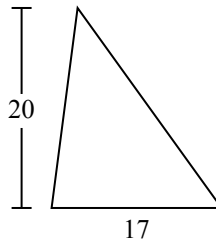
4)



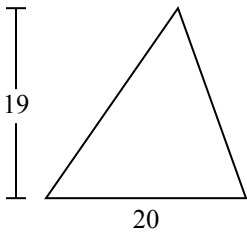
5)



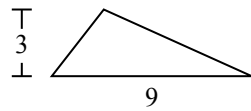
6)



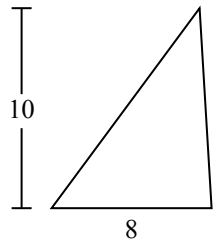
7)



8)



9)



1. \_\_\_\_\_
2. \_\_\_\_\_
3. \_\_\_\_\_
4. \_\_\_\_\_
5. \_\_\_\_\_
6. \_\_\_\_\_
7. \_\_\_\_\_
8. \_\_\_\_\_
9. \_\_\_\_\_