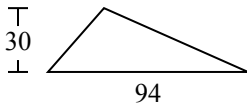




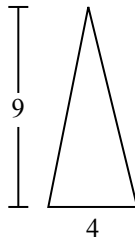
Tìm diện tích hình các tam giác. Đơn vị không theo tỉ lệ.

**Câu trả lời**

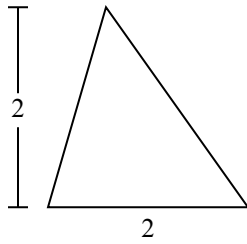
1)



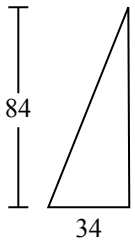
2)



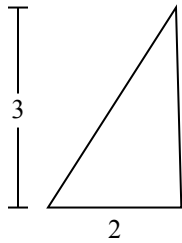
3)



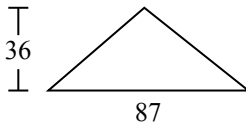
4)



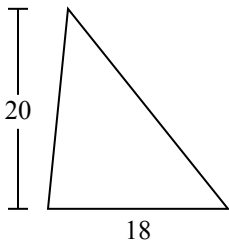
5)



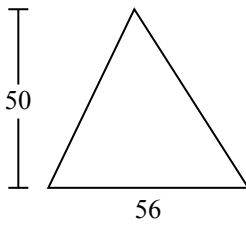
6)



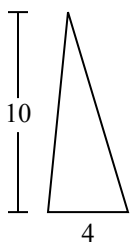
7)



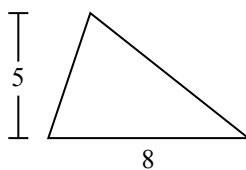
8)



9)



10)

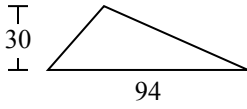


1. \_\_\_\_\_
2. \_\_\_\_\_
3. \_\_\_\_\_
4. \_\_\_\_\_
5. \_\_\_\_\_
6. \_\_\_\_\_
7. \_\_\_\_\_
8. \_\_\_\_\_
9. \_\_\_\_\_
10. \_\_\_\_\_

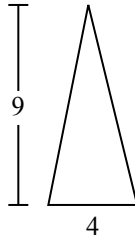


Tìm diện tích hình các tam giác. Đơn vị không theo tỉ lệ.

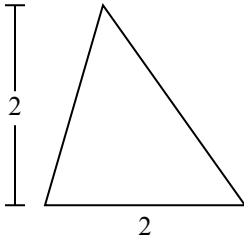
1)



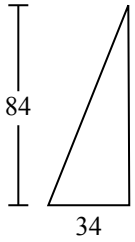
2)



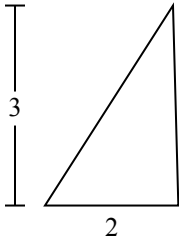
3)



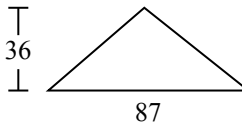
4)



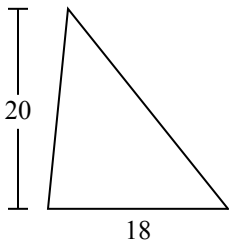
5)



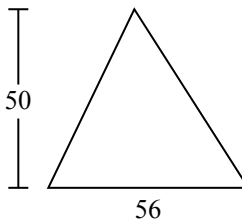
6)



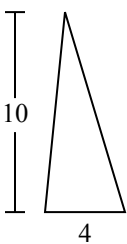
7)



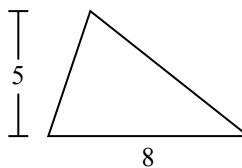
8)



9)



10)



**Câu trả lời**

1. **1.410**

2. **18**

3. **2**

4. **1.428**

5. **3**

6. **1.566**

7. **180**

8. **1.400**

9. **20**

10. **20**

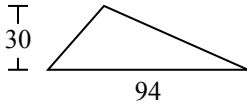


Tìm diện tích hình các tam giác. Đơn vị không theo tỉ lệ.

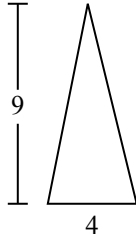
**Câu trả lời**

180	1.428	18	1.566	1.400
3	2	20	1.410	

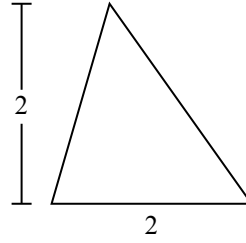
1)



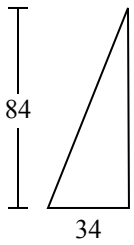
2)



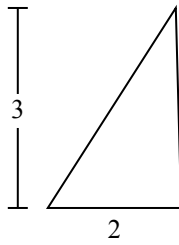
3)



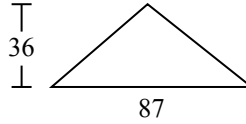
4)



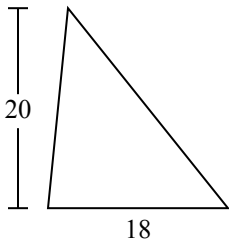
5)



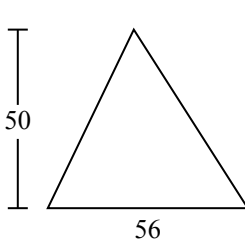
6)



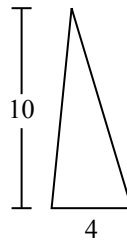
7)



8)



9)



1. \_\_\_\_\_
2. \_\_\_\_\_
3. \_\_\_\_\_
4. \_\_\_\_\_
5. \_\_\_\_\_
6. \_\_\_\_\_
7. \_\_\_\_\_
8. \_\_\_\_\_
9. \_\_\_\_\_