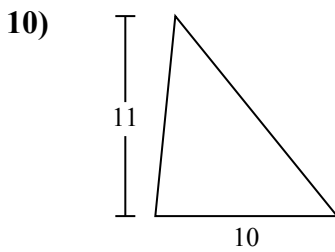
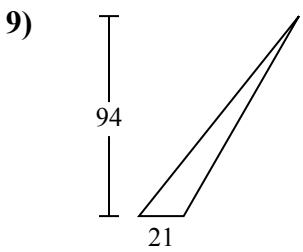
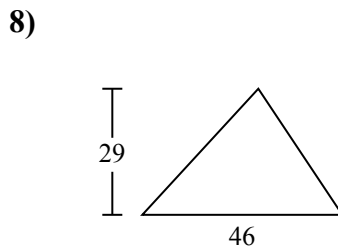
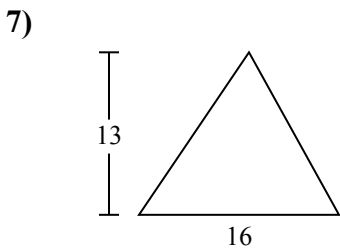
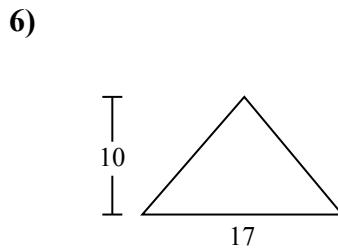
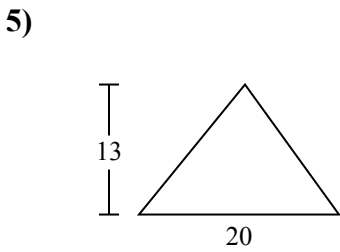
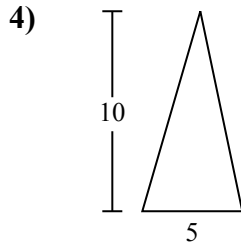
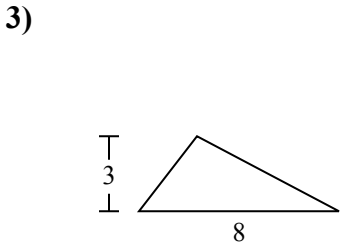
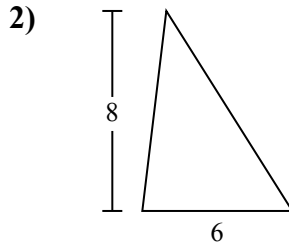
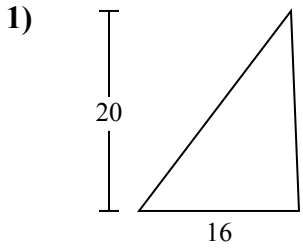




Tìm diện tích hình các tam giác. Đơn vị không theo tỉ lệ.

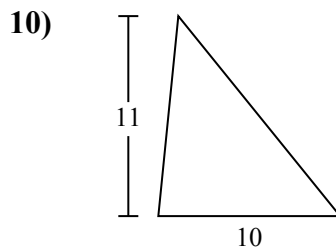
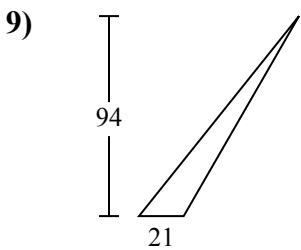
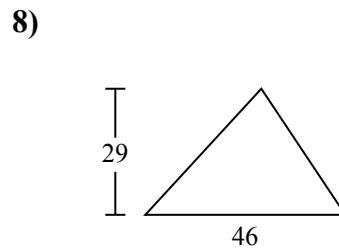
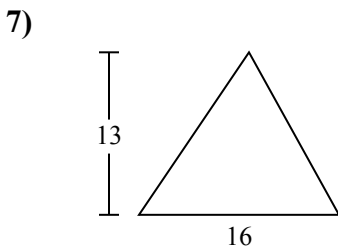
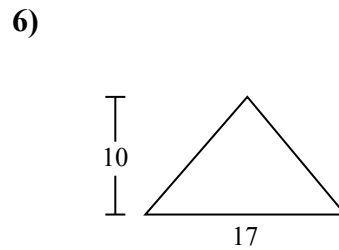
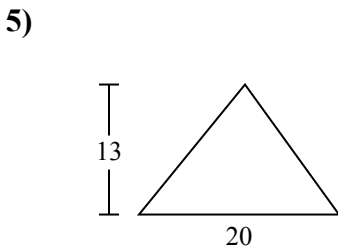
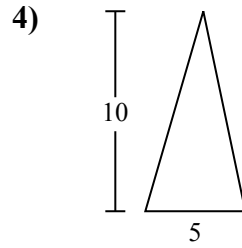
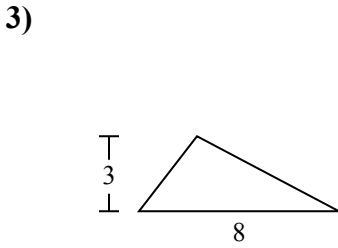
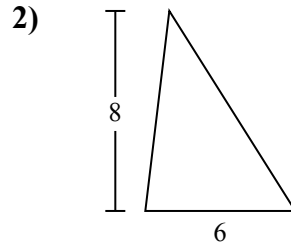
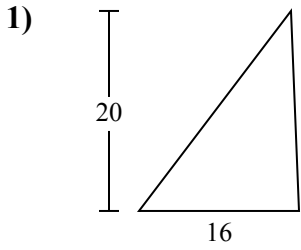
**Câu trả lời**



1. \_\_\_\_\_
2. \_\_\_\_\_
3. \_\_\_\_\_
4. \_\_\_\_\_
5. \_\_\_\_\_
6. \_\_\_\_\_
7. \_\_\_\_\_
8. \_\_\_\_\_
9. \_\_\_\_\_
10. \_\_\_\_\_



Tìm diện tích hình các tam giác. Đơn vị không theo tỉ lệ.



**Câu trả lời**

1. 160
2. 24
3. 12
4. 25
5. 130
6. 85
7. 104
8. 667
9. 987
10. 55



Tìm diện tích hình các tam giác. Đơn vị không theo tỉ lệ.

**Câu trả lời**

25

160

85

24

667

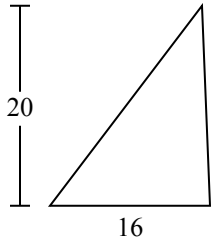
987

104

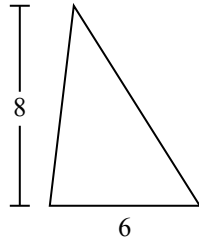
12

130

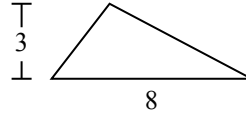
1)



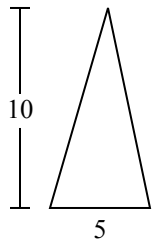
2)



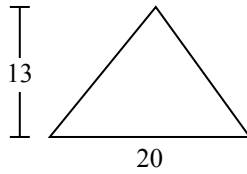
3)



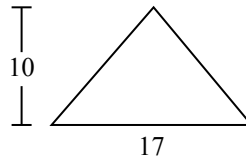
4)



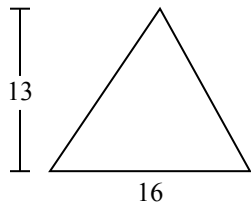
5)



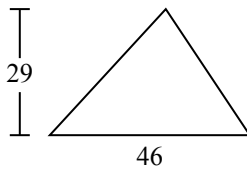
6)



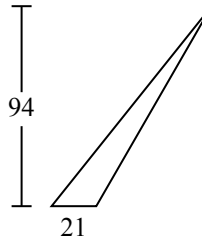
7)



8)



9)



1. \_\_\_\_\_
2. \_\_\_\_\_
3. \_\_\_\_\_
4. \_\_\_\_\_
5. \_\_\_\_\_
6. \_\_\_\_\_
7. \_\_\_\_\_
8. \_\_\_\_\_
9. \_\_\_\_\_