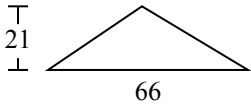




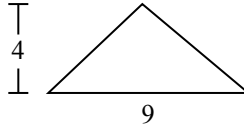
Tìm diện tích hình các tam giác. Đơn vị không theo tỉ lệ.

Câu trả lời

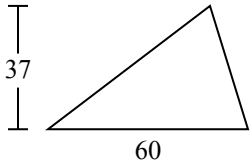
1)



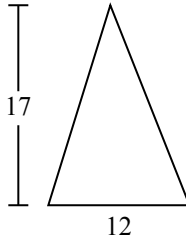
2)



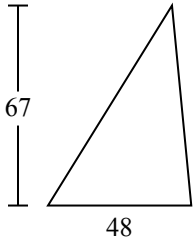
3)



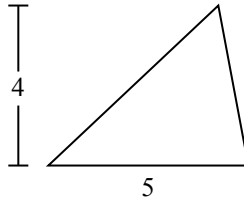
4)



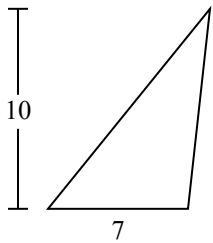
5)



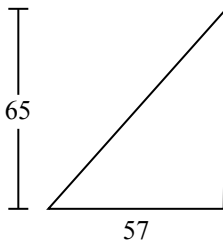
6)



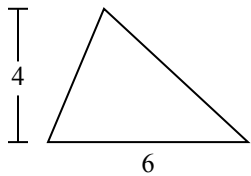
7)



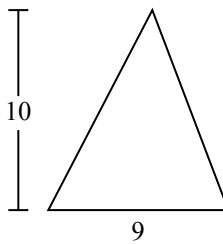
8)



9)



10)

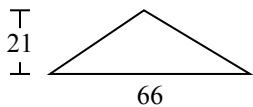


1. \_\_\_\_\_
2. \_\_\_\_\_
3. \_\_\_\_\_
4. \_\_\_\_\_
5. \_\_\_\_\_
6. \_\_\_\_\_
7. \_\_\_\_\_
8. \_\_\_\_\_
9. \_\_\_\_\_
10. \_\_\_\_\_

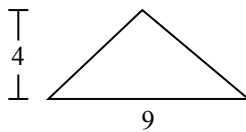


Tìm diện tích hình các tam giác. Đơn vị không theo tỉ lệ.

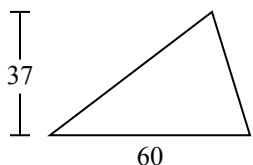
1)



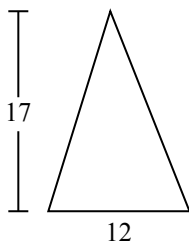
2)



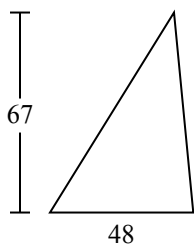
3)



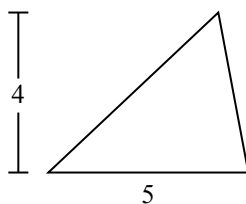
4)



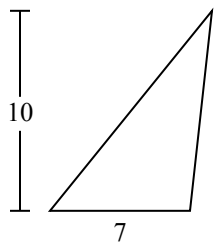
5)



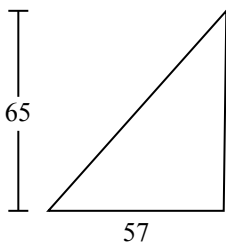
6)



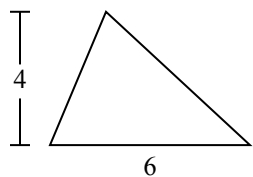
7)



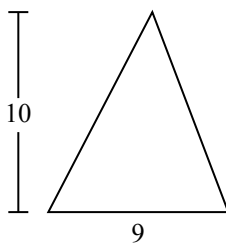
8)



9)



10)



**Câu trả lời**

1. **693**

2. **18**

3. **1.110**

4. **102**

5. **1.608**

6. **10**

7. **35**

8. **1.852,5**

9. **12**

10. **45**

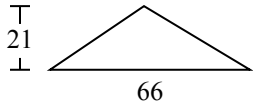


Tìm diện tích hình các tam giác. Đơn vị không theo tỉ lệ.

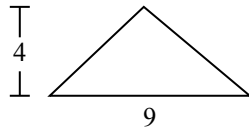
**Câu trả lời**

|       |     |       |         |    |
|-------|-----|-------|---------|----|
| 1.110 | 693 | 102   | 1.852,5 | 10 |
| 18    | 12  | 1.608 | 35      |    |

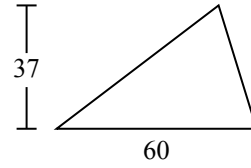
1)



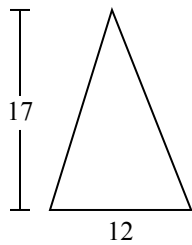
2)



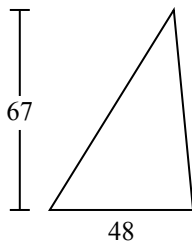
3)



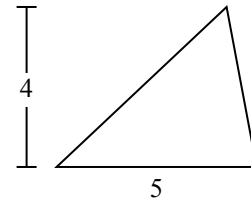
4)



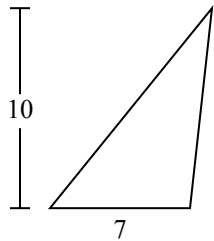
5)



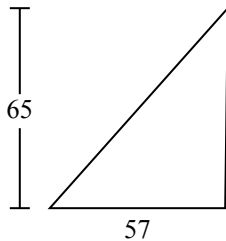
6)



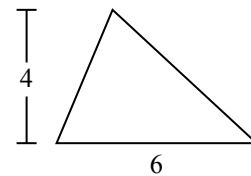
7)



8)



9)



1. \_\_\_\_\_
2. \_\_\_\_\_
3. \_\_\_\_\_
4. \_\_\_\_\_
5. \_\_\_\_\_
6. \_\_\_\_\_
7. \_\_\_\_\_
8. \_\_\_\_\_
9. \_\_\_\_\_