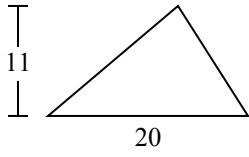


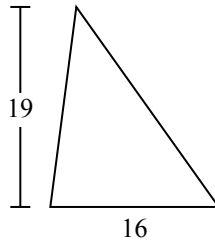


Tìm diện tích hình các tam giác. Đơn vị không theo tỉ lệ.

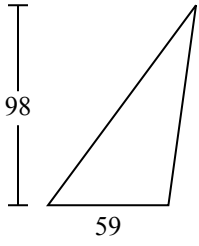
1)



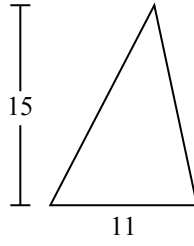
2)



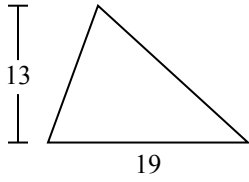
3)



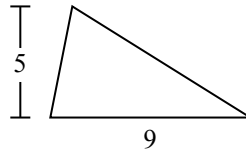
4)



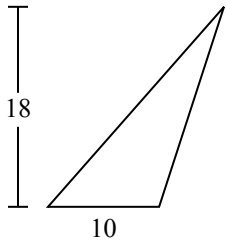
5)



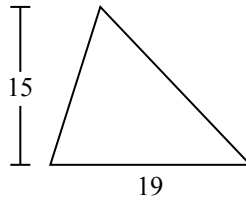
6)



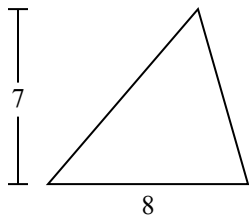
7)



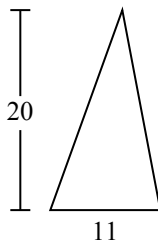
8)



9)



10)



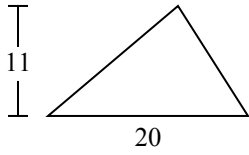
Câu trả lời

1. _____
2. _____
3. _____
4. _____
5. _____
6. _____
7. _____
8. _____
9. _____
10. _____

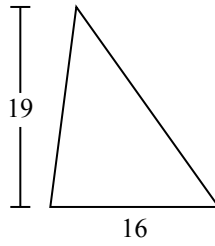


Tìm diện tích hình các tam giác. Đơn vị không theo tỉ lệ.

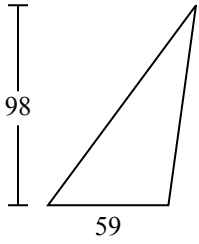
1)



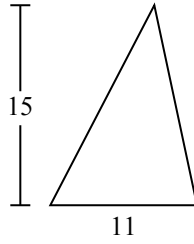
2)



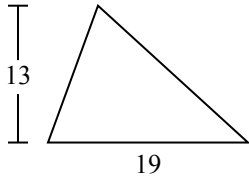
3)



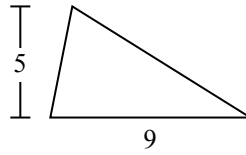
4)



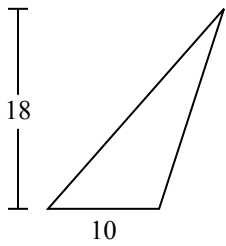
5)



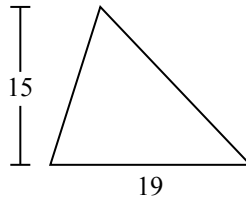
6)



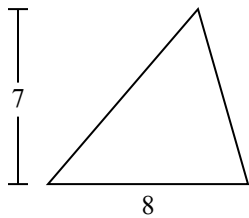
7)



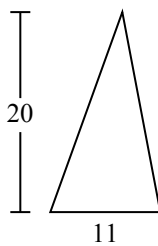
8)



9)



10)



Câu trả lời

1. **110**

2. **152**

3. **2.891**

4. **82,5**

5. **123,5**

6. **22,5**

7. **90**

8. **142,5**

9. **28**

10. **110**

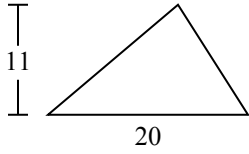


Tìm diện tích hình các tam giác. Đơn vị không theo tỉ lệ.

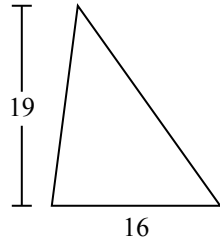
22,5	152	28	90	142,5
123,5	2.891	82,5	110	

Câu trả lời

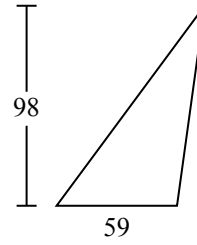
1)



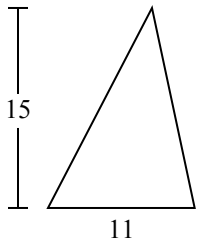
2)



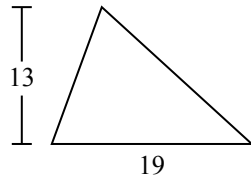
3)



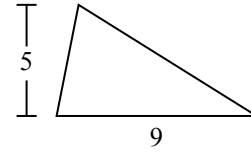
4)



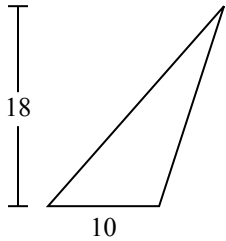
5)



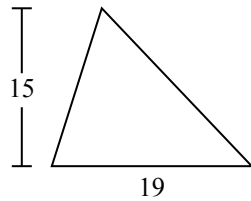
6)



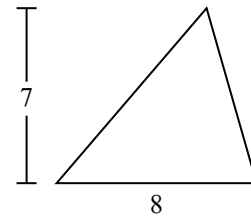
7)



8)



9)



1. _____
2. _____
3. _____
4. _____
5. _____
6. _____
7. _____
8. _____
9. _____