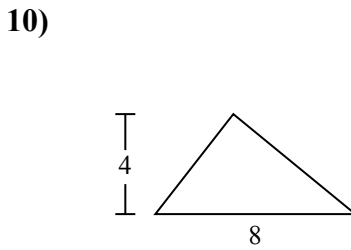
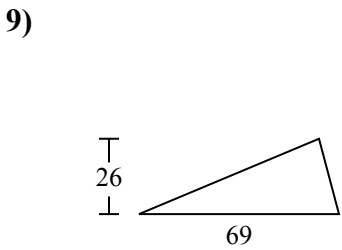
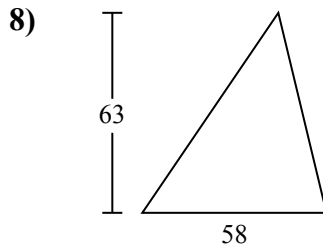
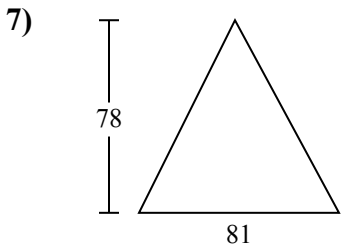
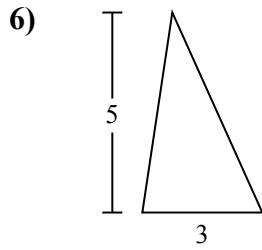
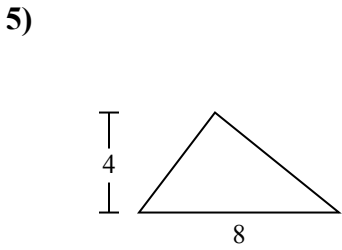
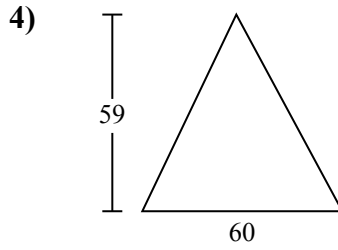
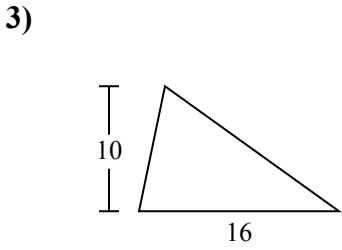
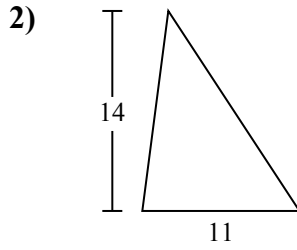
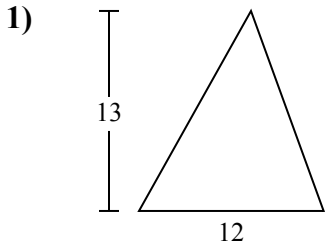




Tìm diện tích hình các tam giác. Đơn vị không theo tỉ lệ.

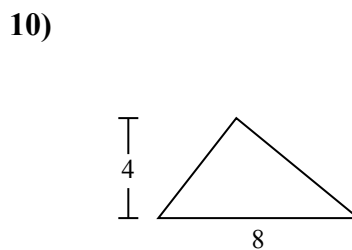
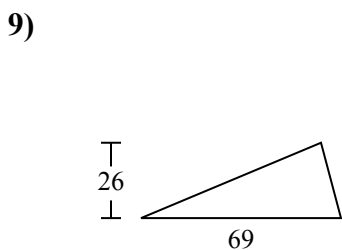
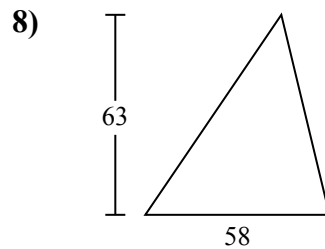
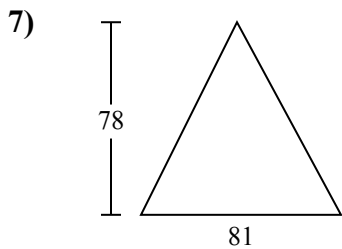
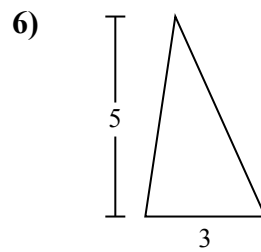
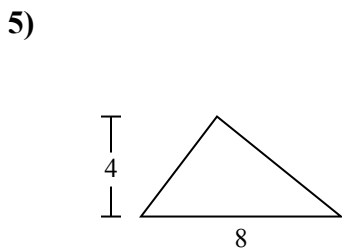
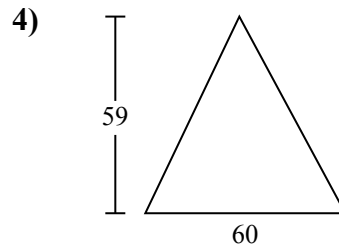
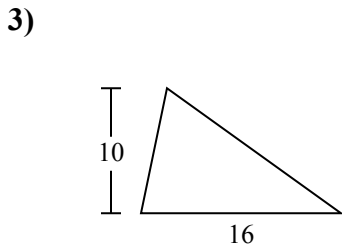
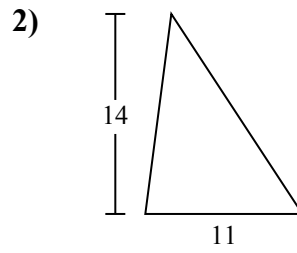
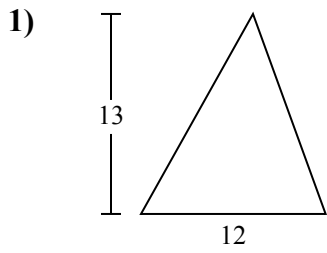
Câu trả lời



1. \_\_\_\_\_
2. \_\_\_\_\_
3. \_\_\_\_\_
4. \_\_\_\_\_
5. \_\_\_\_\_
6. \_\_\_\_\_
7. \_\_\_\_\_
8. \_\_\_\_\_
9. \_\_\_\_\_
10. \_\_\_\_\_



Tìm diện tích hình các tam giác. Đơn vị không theo tỉ lệ.



**Câu trả lời**

1. 78
2. 77
3. 80
4. 1.770
5. 16
6. 7,5
7. 3.159
8. 1.827
9. 897
10. 16



Tìm diện tích hình các tam giác. Đơn vị không theo tỉ lệ.

**Câu trả lời**

1.827

1.770

7,5

78

3.159

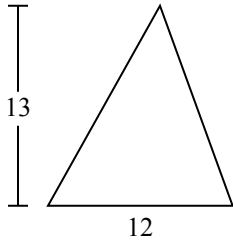
80

77

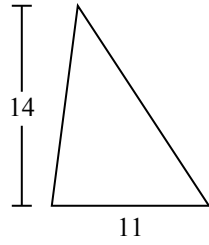
897

16

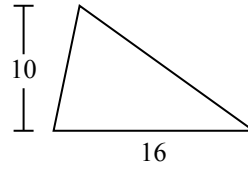
1)



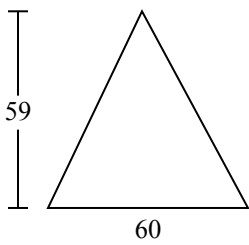
2)



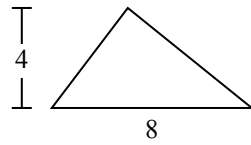
3)



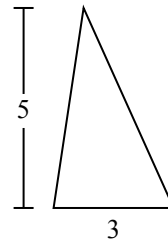
4)



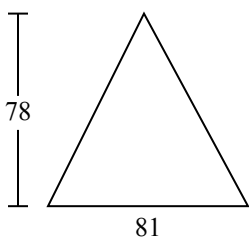
5)



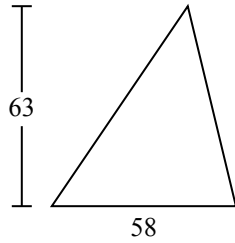
6)



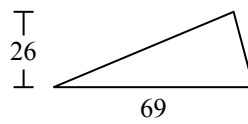
7)



8)



9)



1. \_\_\_\_\_
2. \_\_\_\_\_
3. \_\_\_\_\_
4. \_\_\_\_\_
5. \_\_\_\_\_
6. \_\_\_\_\_
7. \_\_\_\_\_
8. \_\_\_\_\_
9. \_\_\_\_\_