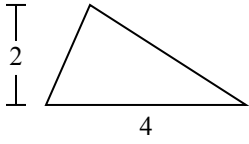


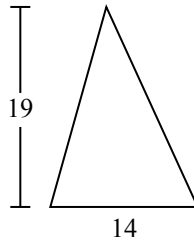


Tìm diện tích hình các tam giác. Đơn vị không theo tỉ lệ.

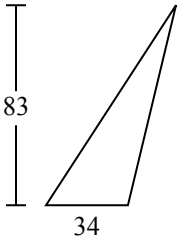
1)



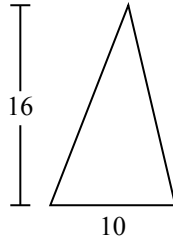
2)



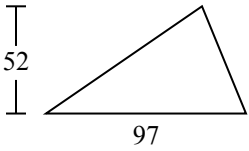
3)



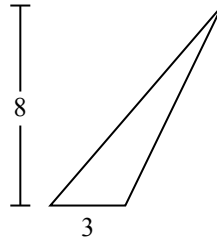
4)



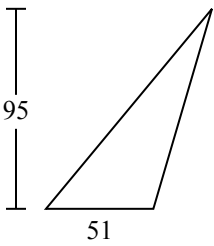
5)



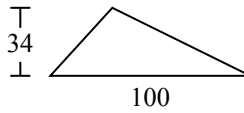
6)



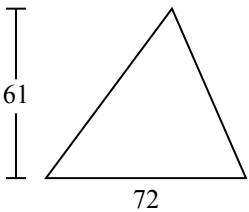
7)



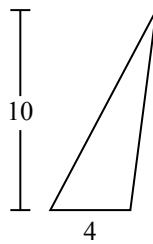
8)



9)



10)



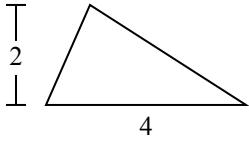
Câu trả lời

- 1. _____
- 2. _____
- 3. _____
- 4. _____
- 5. _____
- 6. _____
- 7. _____
- 8. _____
- 9. _____
- 10. _____

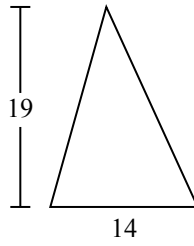


Tìm diện tích hình các tam giác. Đơn vị không theo tỉ lệ.

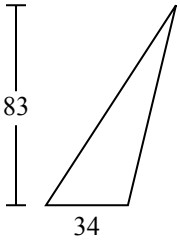
1)



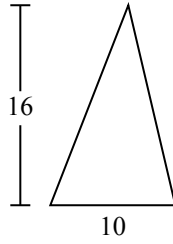
2)



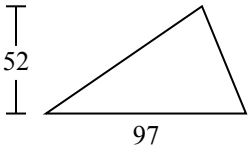
3)



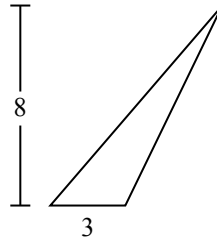
4)



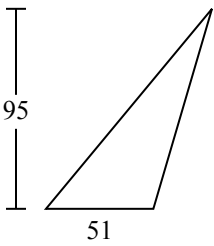
5)



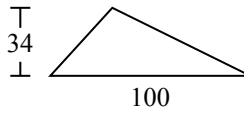
6)



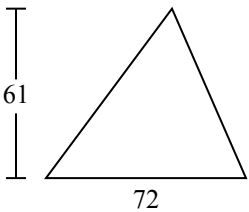
7)



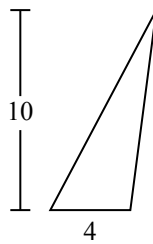
8)



9)



10)



Câu trả lời

1. 4

2. 133

3. 1.411

4. 80

5. 2.522

6. 12

7. 2.422,5

8. 1.700

9. 2.196

10. 20

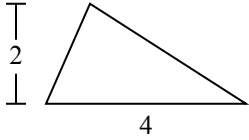


Tìm diện tích hình các tam giác. Đơn vị không theo tỉ lệ.

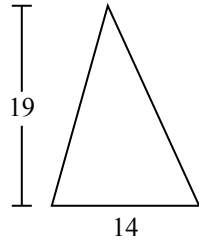
Câu trả lời

133	4	1.411	2.522	2.196
1.700	2.422,5	80	12	

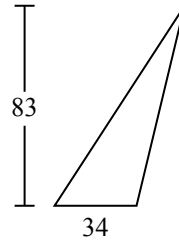
1)



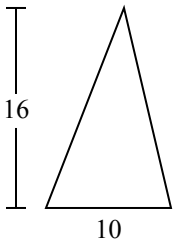
2)



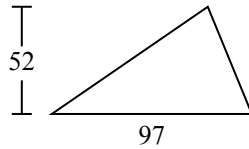
3)



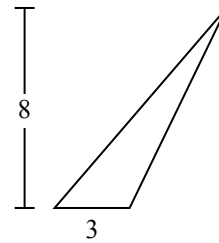
4)



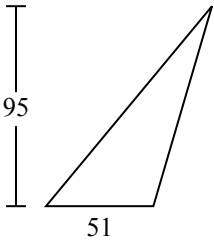
5)



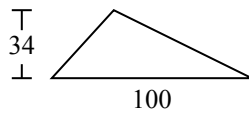
6)



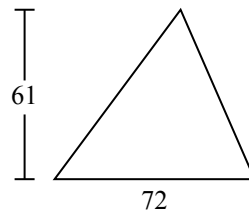
7)



8)



9)



1. _____
2. _____
3. _____
4. _____
5. _____
6. _____
7. _____
8. _____
9. _____