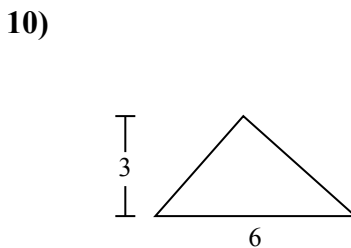
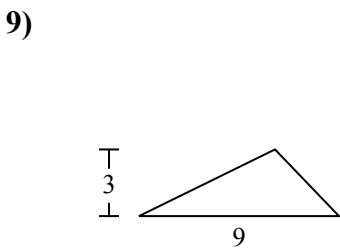
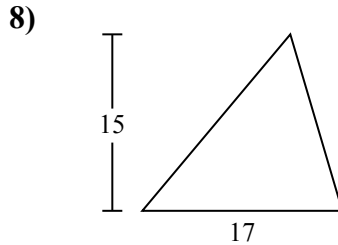
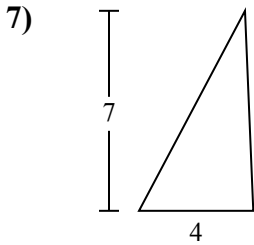
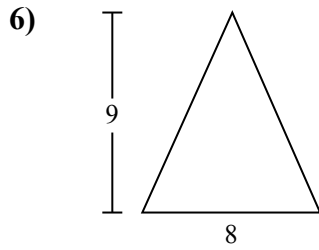
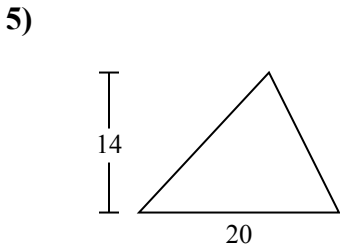
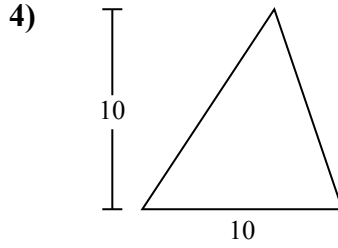
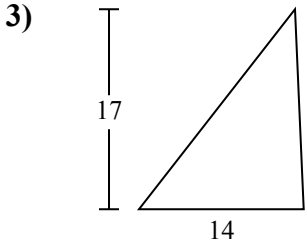
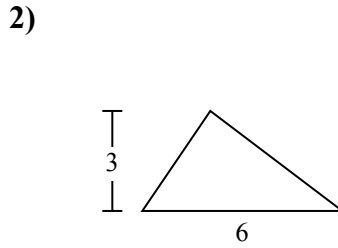
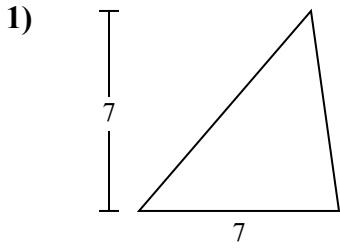




Tìm diện tích hình các tam giác. Đơn vị không theo tỉ lệ.

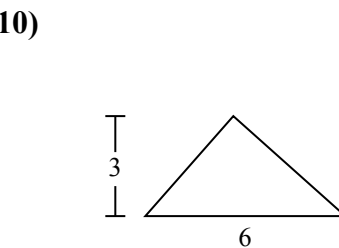
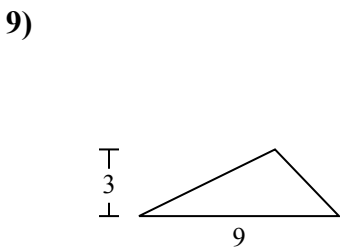
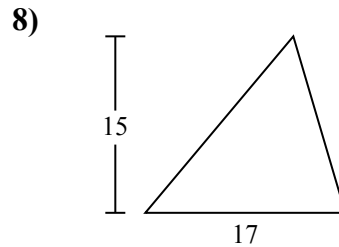
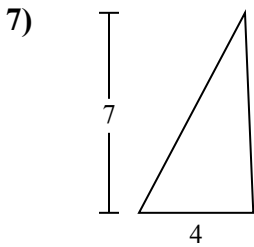
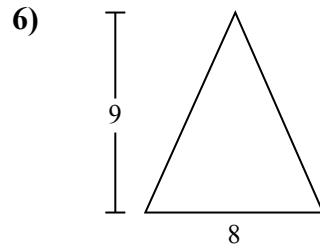
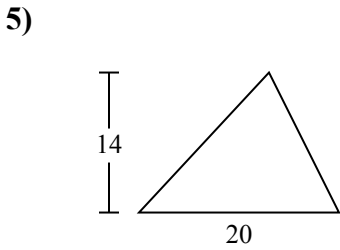
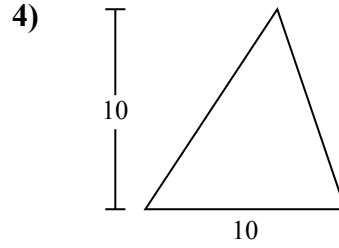
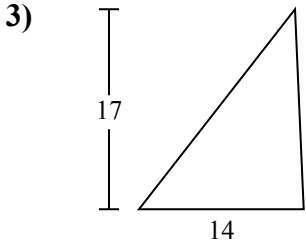
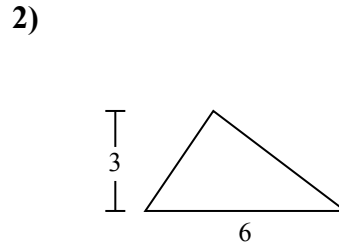
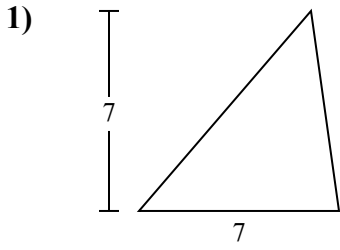
Câu trả lời



1. \_\_\_\_\_
2. \_\_\_\_\_
3. \_\_\_\_\_
4. \_\_\_\_\_
5. \_\_\_\_\_
6. \_\_\_\_\_
7. \_\_\_\_\_
8. \_\_\_\_\_
9. \_\_\_\_\_
10. \_\_\_\_\_



Tìm diện tích hình các tam giác. Đơn vị không theo tỉ lệ.



Câu trả lời

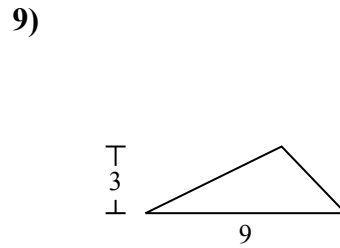
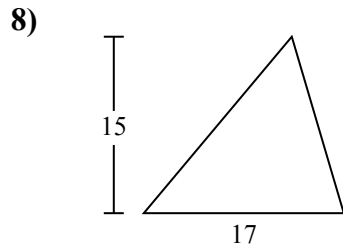
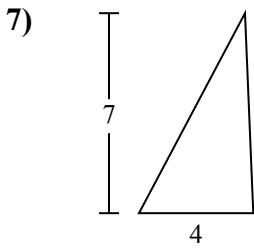
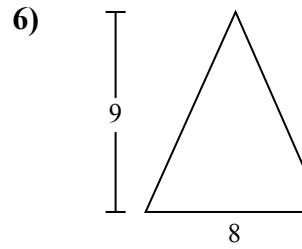
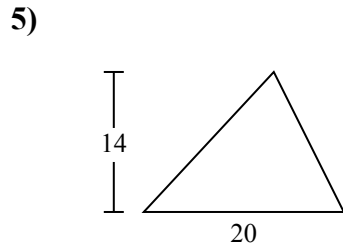
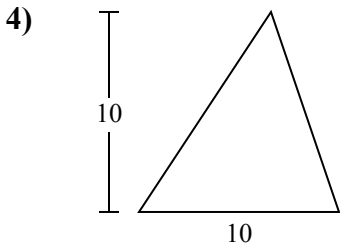
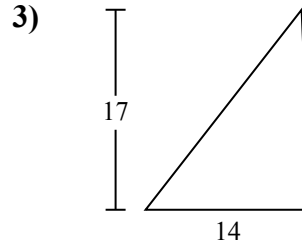
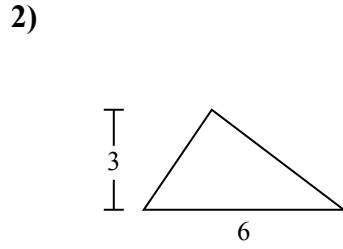
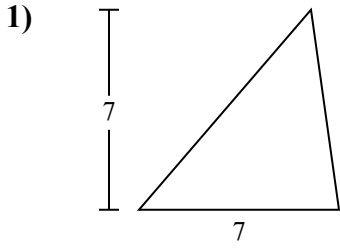
1. 24,5
2. 9
3. 119
4. 50
5. 140
6. 36
7. 14
8. 127,5
9. 13,5
10. 9



Tìm diện tích hình các tam giác. Đơn vị không theo tỉ lệ.

**Câu trả lời**

127,5	13,5	119	140	14
24,5	9	36	50	



1. \_\_\_\_\_
2. \_\_\_\_\_
3. \_\_\_\_\_
4. \_\_\_\_\_
5. \_\_\_\_\_
6. \_\_\_\_\_
7. \_\_\_\_\_
8. \_\_\_\_\_
9. \_\_\_\_\_